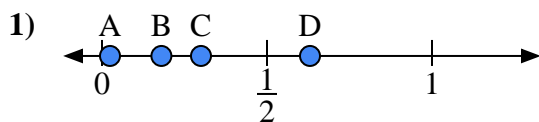
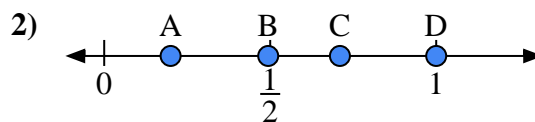




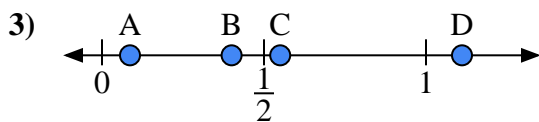
Use the number lines to answer the questions.

Answers

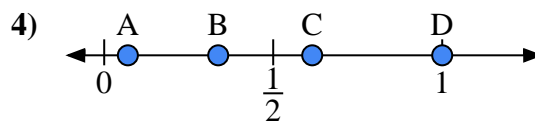
- a) Which letter best represents the location of 0.3?
- b) Which letter best represents the location of 0.18?



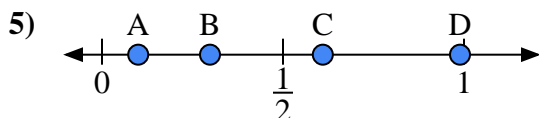
- a) Which letter best represents the location of 0.2?
- b) Which letter best represents the location of 0.71?



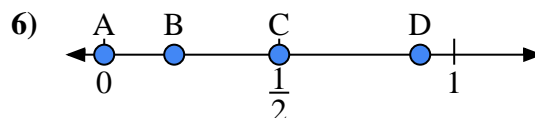
- a) Which letter best represents the location of 0.4?
- b) Which letter best represents the location of 0.55?



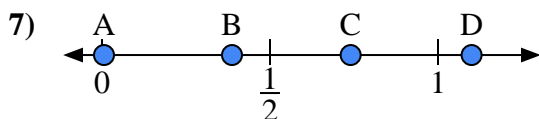
- a) Which letter best represents the location of 1.0?
- b) Which letter best represents the location of 0.07?



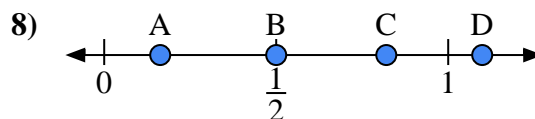
- a) Which letter best represents the location of 0.10?
- b) Which letter best represents the location of 0.61?



- a) Which letter best represents the location of 0.00?
- b) Which letter best represents the location of 0.50?



- a) Which letter best represents the location of 1.10?
- b) Which letter best represents the location of 0.74?

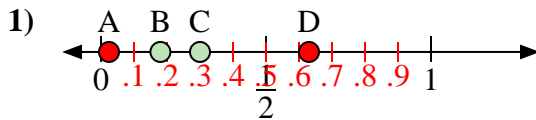


- a) Which letter best represents the location of 0.5?
- b) Which letter best represents the location of 0.82?

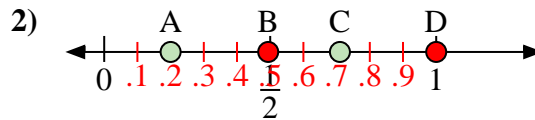
1. _____
2. _____
3. _____
4. _____
5. _____
6. _____
7. _____
8. _____



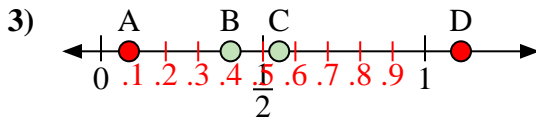
Use the number lines to answer the questions.

Answers

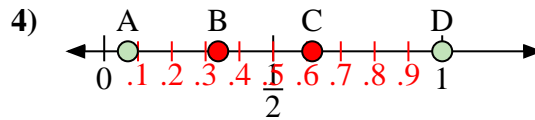
- a) Which letter best represents the location of 0.3?
b) Which letter best represents the location of 0.18?



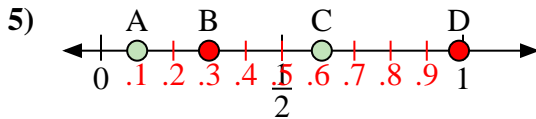
- a) Which letter best represents the location of 0.2?
b) Which letter best represents the location of 0.71?



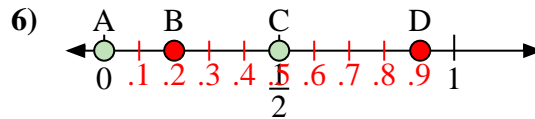
- a) Which letter best represents the location of 0.4?
b) Which letter best represents the location of 0.55?



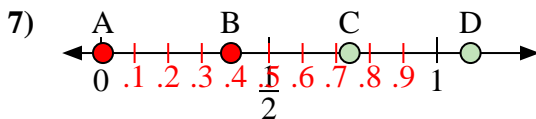
- a) Which letter best represents the location of 1.0?
b) Which letter best represents the location of 0.07?



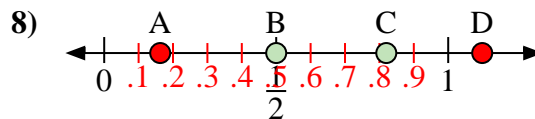
- a) Which letter best represents the location of 0.10?
b) Which letter best represents the location of 0.61?



- a) Which letter best represents the location of 0.00?
b) Which letter best represents the location of 0.50?



- a) Which letter best represents the location of 1.10?
b) Which letter best represents the location of 0.74?



- a) Which letter best represents the location of 0.5?
b) Which letter best represents the location of 0.82?

1. C B
2. A C
3. B C
4. D A
5. A C
6. A C
7. D C
8. B C