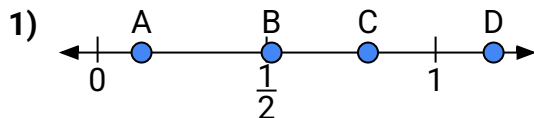
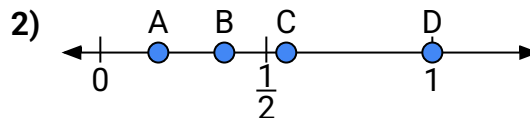




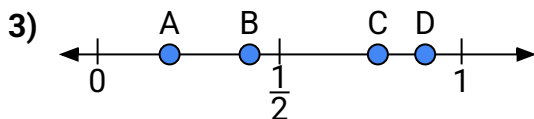
Use the number lines to answer the questions.

**Answers**

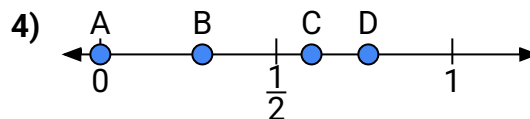
- a) Which letter best represents the location of 0.8?
- b) Which letter best represents the location of 0.13?



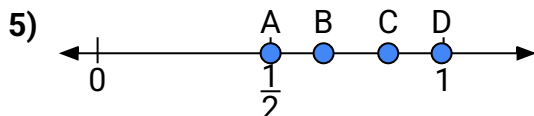
- a) Which letter best represents the location of 1.0?
- b) Which letter best represents the location of 0.56?



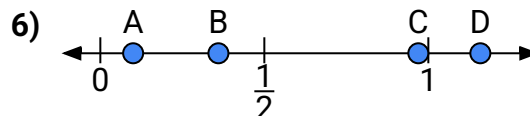
- a) Which letter best represents the location of 0.9?
- b) Which letter best represents the location of 0.77?



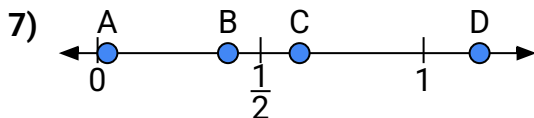
- a) Which letter best represents the location of 0.00?
- b) Which letter best represents the location of 0.60?



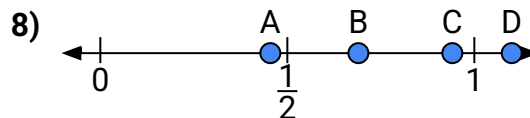
- a) Which letter best represents the location of 0.5?
- b) Which letter best represents the location of 0.84?



- a) Which letter best represents the location of 0.10?
- b) Which letter best represents the location of 0.36?



- a) Which letter best represents the location of 0.4?
- b) Which letter best represents the location of 0.03?



- a) Which letter best represents the location of 1.1?
- b) Which letter best represents the location of 0.69?

1. \_\_\_\_\_

2. \_\_\_\_\_

3. \_\_\_\_\_

4. \_\_\_\_\_

5. \_\_\_\_\_

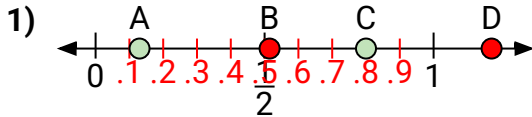
6. \_\_\_\_\_

7. \_\_\_\_\_

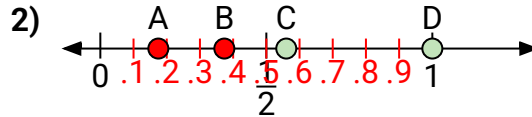
8. \_\_\_\_\_



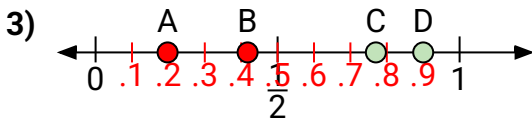
Use the number lines to answer the questions.

**Answers**

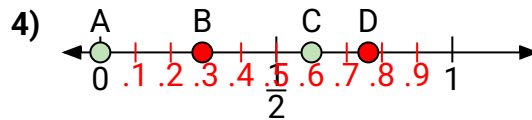
- a) Which letter best represents the location of 0.8?  
b) Which letter best represents the location of 0.13?



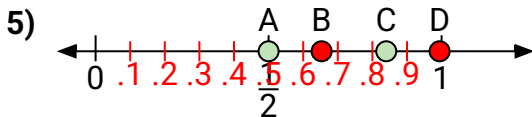
- a) Which letter best represents the location of 1.0?  
b) Which letter best represents the location of 0.56?



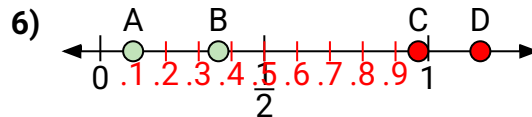
- a) Which letter best represents the location of 0.9?  
b) Which letter best represents the location of 0.77?



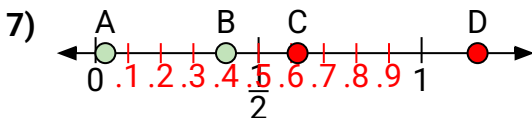
- a) Which letter best represents the location of 0.00?  
b) Which letter best represents the location of 0.60?



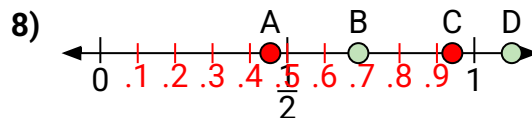
- a) Which letter best represents the location of 0.5?  
b) Which letter best represents the location of 0.84?



- a) Which letter best represents the location of 0.10?  
b) Which letter best represents the location of 0.36?



- a) Which letter best represents the location of 0.4?  
b) Which letter best represents the location of 0.03?



- a) Which letter best represents the location of 1.1?  
b) Which letter best represents the location of 0.69?

1. C A  
2. D C  
3. D C  
4. A C  
5. A C  
6. A B  
7. B A  
8. D B