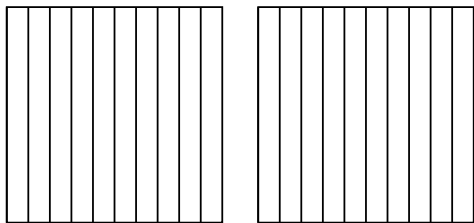


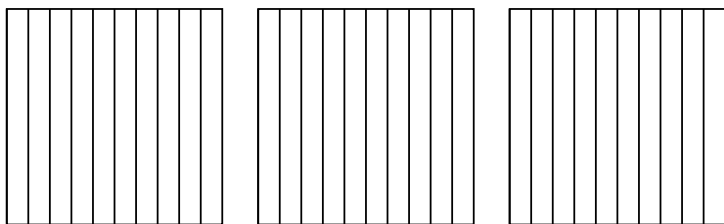


Use the visual model to solve each problem.

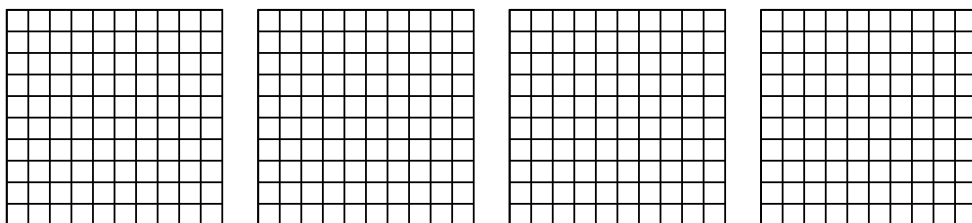
1)  $2 \times 0.7 =$




2)  $3 \times 0.5 =$



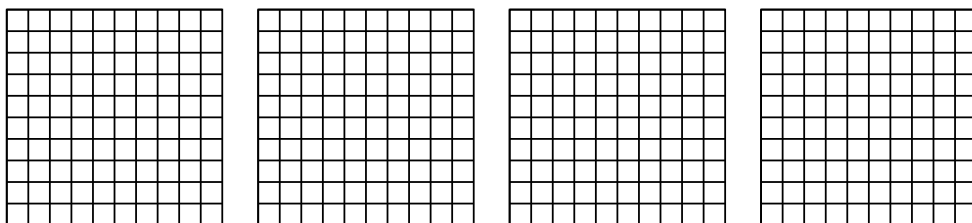
3)  $4 \times 0.92 =$



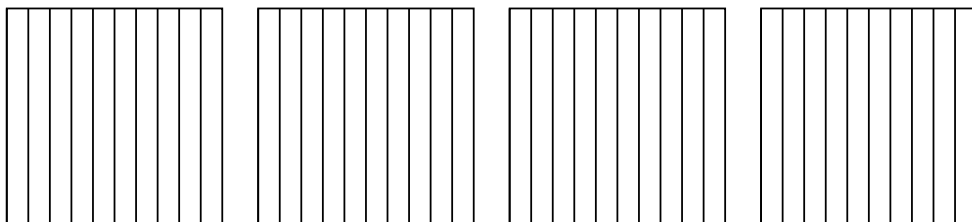
4)  $3 \times 0.73 =$



5)  $4 \times 0.20 =$



6)  $4 \times 0.7 =$



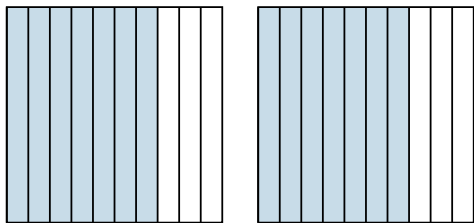
Answers

- 1. \_\_\_\_\_
- 2. \_\_\_\_\_
- 3. \_\_\_\_\_
- 4. \_\_\_\_\_
- 5. \_\_\_\_\_
- 6. \_\_\_\_\_

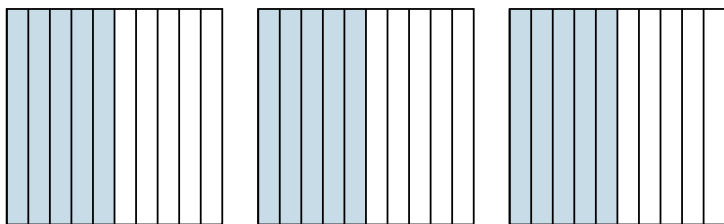


Use the visual model to solve each problem.

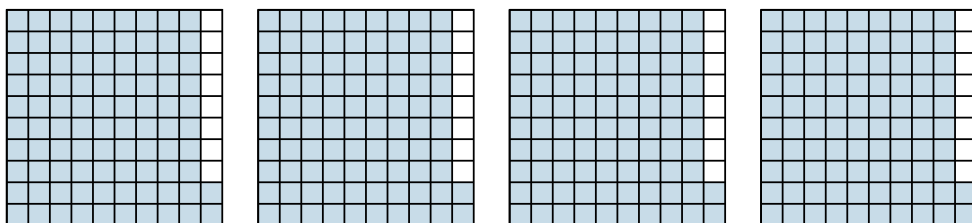
1)  $2 \times 0.7 =$



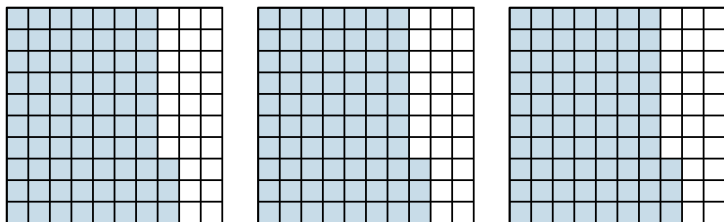
2)  $3 \times 0.5 =$



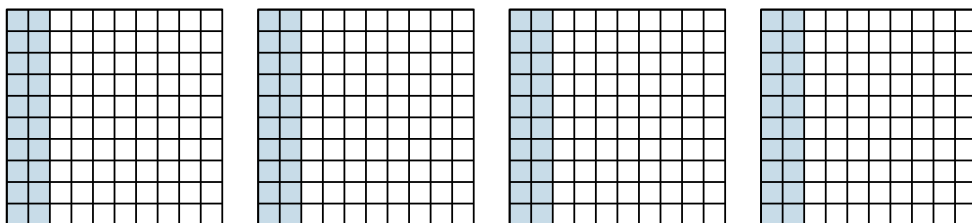
3)  $4 \times 0.92 =$



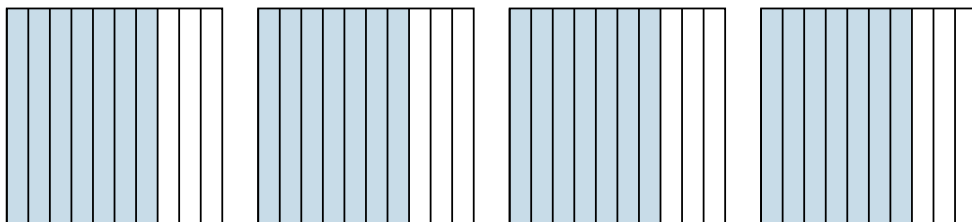
4)  $3 \times 0.73 =$



5)  $4 \times 0.20 =$



6)  $4 \times 0.7 =$



Answers

1.  $\frac{14}{10} = 1.4$

2.  $\frac{15}{10} = 1.5$

3.  $\frac{368}{100} = 3.68$

4.  $\frac{219}{100} = 2.19$

5.  $\frac{80}{100} = 0.8$

6.  $\frac{28}{10} = 2.8$