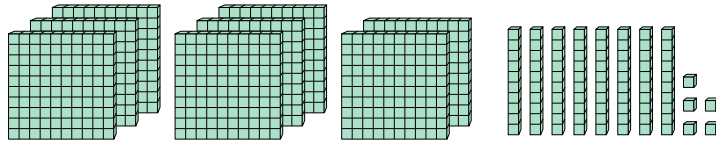
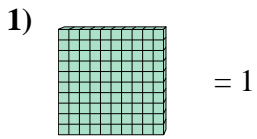


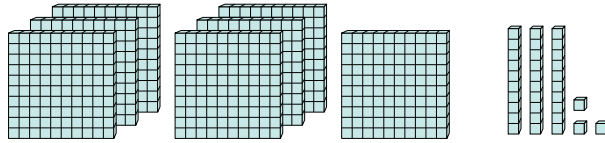
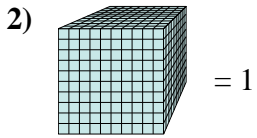


Use the block on the left to find the value of the set of blocks on the right.

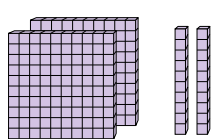
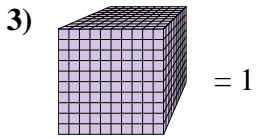
Answers



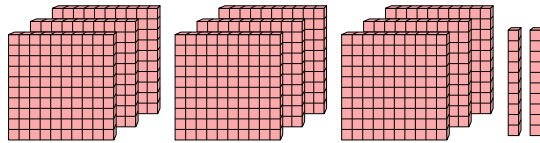
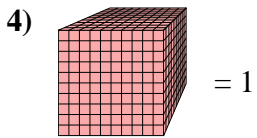
1. _____



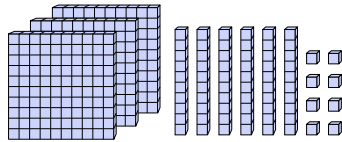
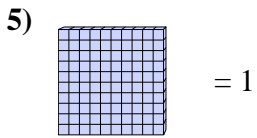
2. _____



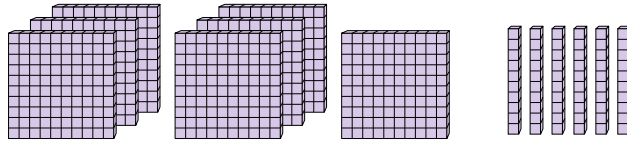
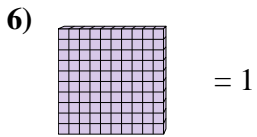
3. _____



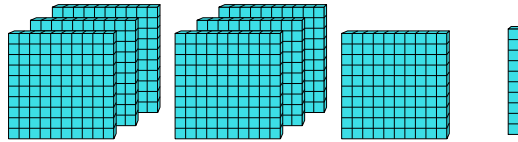
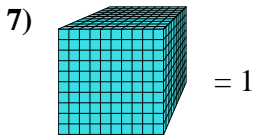
4. _____



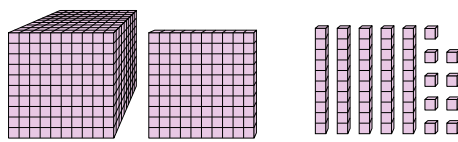
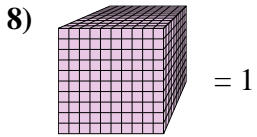
5. _____



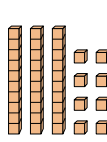
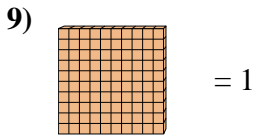
6. _____



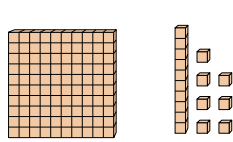
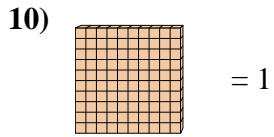
7. _____



8. _____



9. _____



10. _____



Use the block on the left to find the value of the set of blocks on the right.

1) = 1

2) = 1

3) = 1

4) = 1

5) = 1

6) = 1

7) = 1

8) = 1

9) = 1

10) = 1

Answers

1. 8.85

2. 0.733

3. 0.22

4. 0.92

5. 3.68

6. 7.6

7. 0.71

8. 1.159

9. 0.38

10. 1.17