



Use the block on the left to find the value of the set of blocks on the right.

Answers

1) = 1

1. _____

2) = 1

2. _____

3) = 1

3. _____

4) = 1

4. _____

5) = 1

5. _____

6) = 1

6. _____

7) = 1

7. _____

8) = 1

8. _____

9) = 1

9. _____

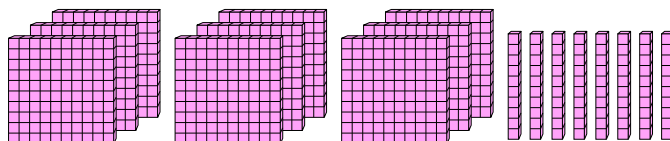
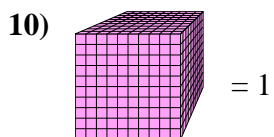
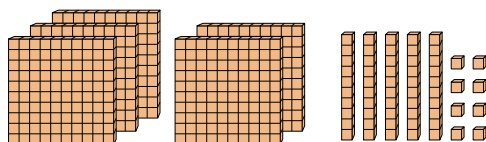
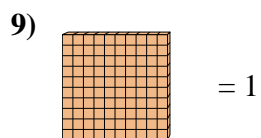
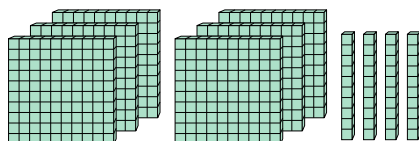
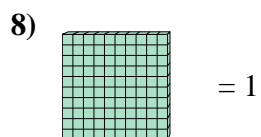
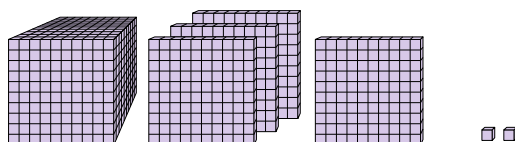
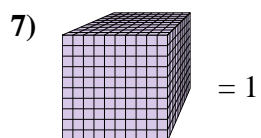
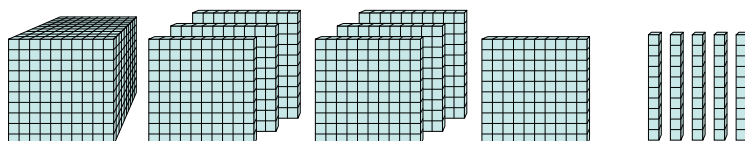
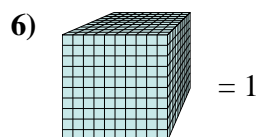
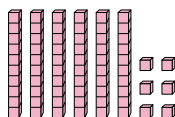
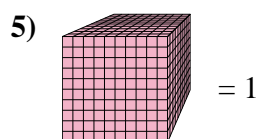
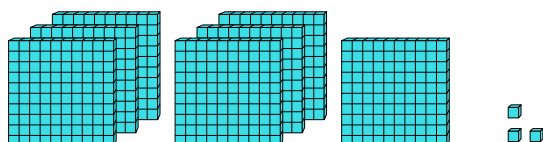
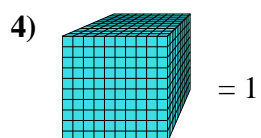

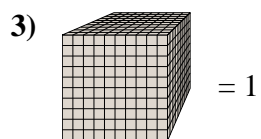
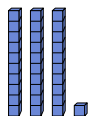
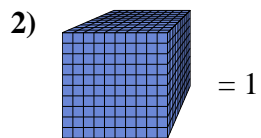
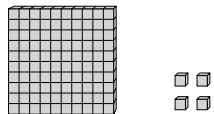
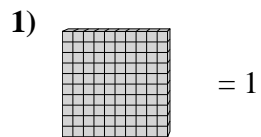
10) = 1

10. _____

10. _____



Use the block on the left to find the value of the set of blocks on the right.



Answers

1. 1.04

2. 0.031

3. 0.102

4. 0.703

5. 0.066

6. 1.75

7. 1.402

8. 6.4

9. 5.58

10. 0.98