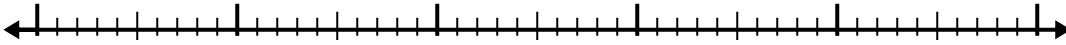


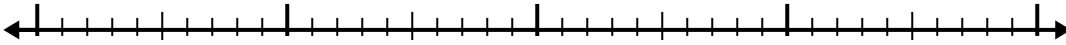


Use the number line to solve each problem.

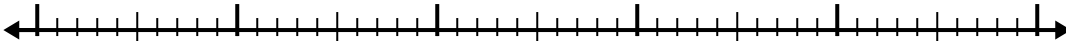
1) $8.5 + 2.1 =$



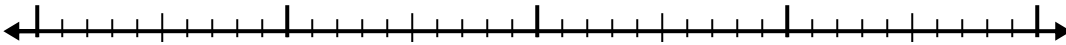
2) $4.7 + 2.3 =$




3) $3.4 + 2.4 =$



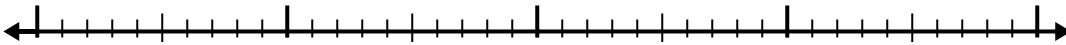
4) $1.2 + 1.7 =$



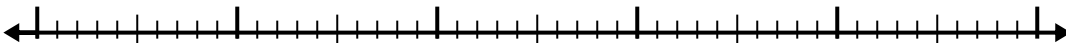
5) $1.4 + 3.9 =$



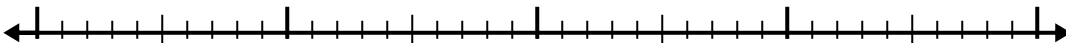
6) $5.9 + 2.1 =$



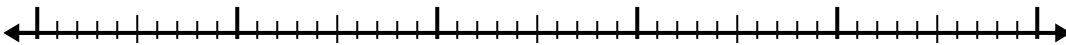
7) $1.1 + 2.6 =$



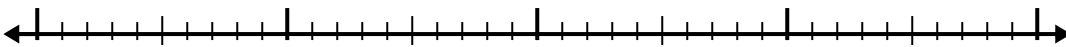
8) $2.3 + 2.1 =$



9) $3.8 + 2.6 =$



10) $5.8 + 1.2 =$



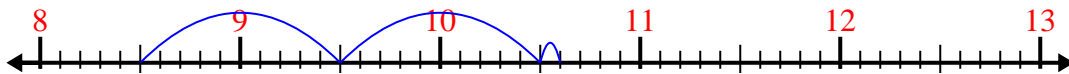
Answers

- 1. _____
- 2. _____
- 3. _____
- 4. _____
- 5. _____
- 6. _____
- 7. _____
- 8. _____
- 9. _____
- 10. _____

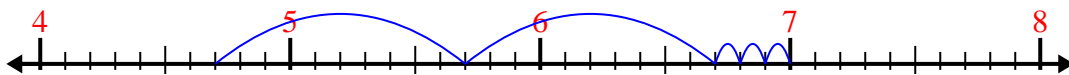


Use the number line to solve each problem.

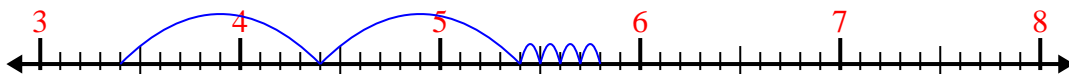
1) $8.5 + 2.1 =$



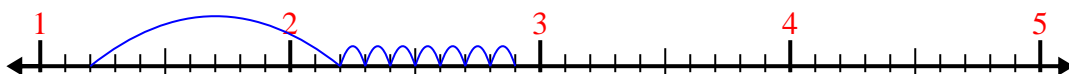
2) $4.7 + 2.3 =$



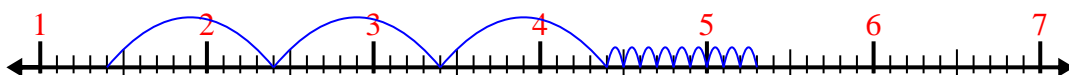
3) $3.4 + 2.4 =$



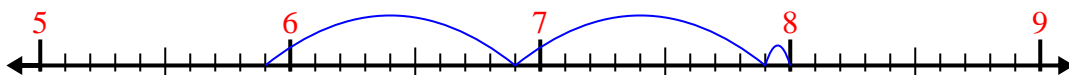
4) $1.2 + 1.7 =$



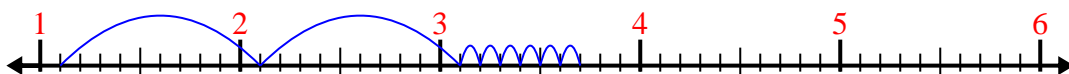
5) $1.4 + 3.9 =$



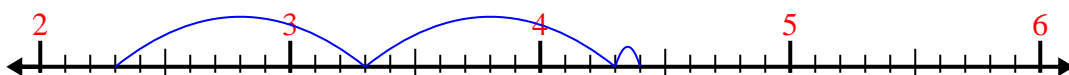
6) $5.9 + 2.1 =$



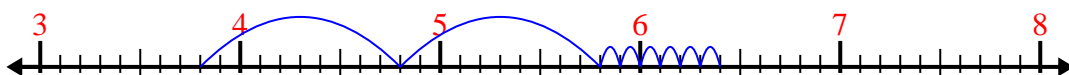
7) $1.1 + 2.6 =$



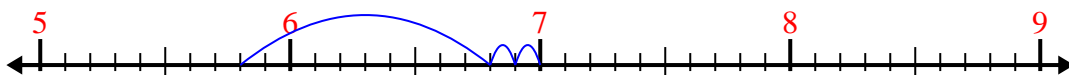
8) $2.3 + 2.1 =$



9) $3.8 + 2.6 =$



10) $5.8 + 1.2 =$



Answers

1. 10.6

2. 7.0

3. 5.8

4. 2.9

5. 5.3

6. 8.0

7. 3.7

8. 4.4

9. 6.4

10. 7.0