


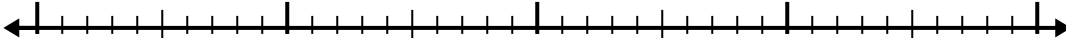


Use the number line to solve each problem.

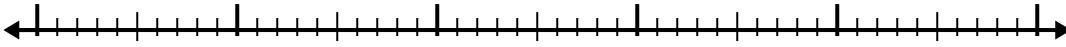
1)  $5.5 + 3.6 =$



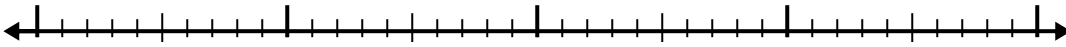
2)  $6.5 + 1.6 =$



3)  $3.5 + 3.2 =$



4)  $7.7 + 2.6 =$




5)  $3.9 + 1.9 =$



6)  $5.9 + 2.3 =$



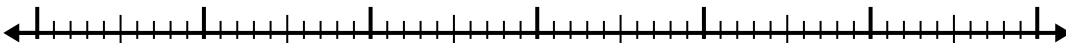
7)  $4.3 + 1.6 =$



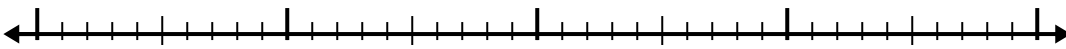
8)  $8.3 + 2.9 =$



9)  $7 + 3.5 =$



10)  $5.6 + 2.4 =$



Answers

1. \_\_\_\_\_

2. \_\_\_\_\_

3. \_\_\_\_\_

4. \_\_\_\_\_

5. \_\_\_\_\_

6. \_\_\_\_\_

7. \_\_\_\_\_

8. \_\_\_\_\_

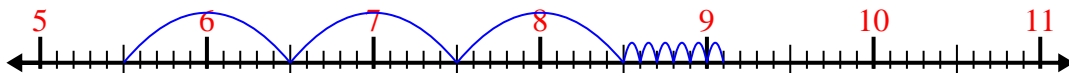
9. \_\_\_\_\_

10. \_\_\_\_\_

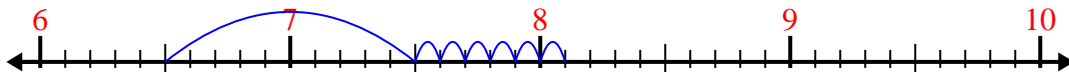


Use the number line to solve each problem.

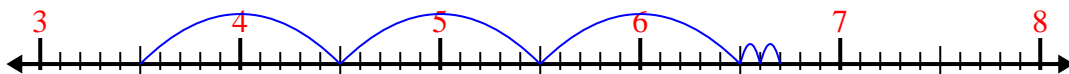
1)  $5.5 + 3.6 =$



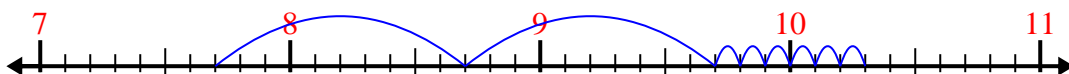
2)  $6.5 + 1.6 =$



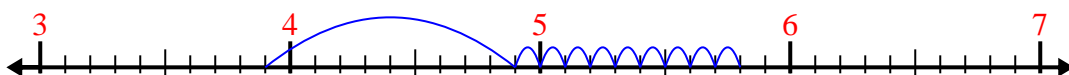
3)  $3.5 + 3.2 =$




4)  $7.7 + 2.6 =$



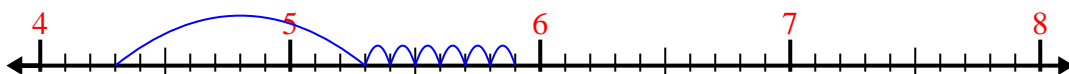
5)  $3.9 + 1.9 =$



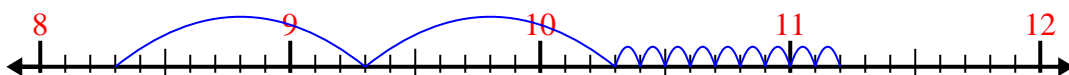
6)  $5.9 + 2.3 =$



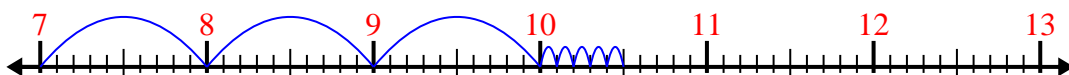
7)  $4.3 + 1.6 =$



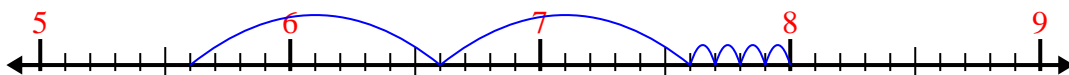
8)  $8.3 + 2.9 =$



9)  $7 + 3.5 =$



10)  $5.6 + 2.4 =$



Answers

1. 9.1

2. 8.1

3. 6.7

4. 10.3

5. 5.8

6. 8.2

7. 5.9

8. 11.2

9. 10.5

10. 8.0