



**Determine which choice best show the value written as a numeral.**

**Answers**

- |   |           |
|---|-----------|
| 1) eight hundred ninety-four and twenty-one hundredths<br>A. 894.21                      B. 894.12                      C. 894.0021                      D. 498.2                   | 1. _____  |
| 2) eighty-one and nine hundred fifty-eight thousandths<br>A. 81.958                      B. 18.958                      C. 18.95                      D. 18.859                     | 2. _____  |
| 3) nine hundred forty-seven and twenty-five thousandths<br>A. 749.0                      B. 947.520                      C. 947.025                      D. 947.25                  | 3. _____  |
| 4) two hundred seventy-one and nine hundred eighty-seven thousandths<br>A. 271.0987                      B. 271.987                      C. 172.789                      D. 172.987 | 4. _____  |
| 5) eighty-six and twenty-seven thousandths<br>A. 86.720                      B. 86.027                      C. 68.02                      D. 86.0027                                | 5. _____  |
| 6) six hundred thirty-six and six hundred thirteen thousandths<br>A. 636.613                      B. 636.00613                      C. 636.6                      D. 636.0613       | 6. _____  |
| 7) sixty-five and seventeen hundredths<br>A. 65.0017                      B. 65.17                      C. 56.1                      D. 65.71                                       | 7. _____  |
| 8) four hundred seventy-five and one tenth<br>A. 475.001                      B. 574.1                      C. 475.01                      D. 475.1                                 | 8. _____  |
| 9) forty-five and sixty-two hundredths<br>A. 45.62                      B. 54.6                      C. 45.26                      D. 54.62   | 9. _____  |
| 10) four hundred seventy-three and six hundredths<br>A. 374.60                      B. 473.006                      C. 374.06                      D. 473.06                        | 10. _____ |
| 11) sixty-one and ninety-five hundredths<br>A. 16.59                      B. 61.59                      C. 61.95                      D. 16.95                                      | 11. _____ |
| 12) four hundred thirty-four and twenty-five thousandths<br>A. 434.025                      B. 434.520                      C. 434.25                      D. 434.0025              | 12. _____ |
| 13) seventy-one and fifty-six thousandths<br>A. 71.56                      B. 71.0056                      C. 17.056                      D. 71.056                                 | 13. _____ |
| 14) thirty-three and four hundred fifty-two thousandths<br>A. 33.0452                      B. 33.452                      C. 33.254                      D. 33.4                    | 14. _____ |
| 15) three hundred fifty-eight and six hundred eighty-two thousandths<br>A. 358.286                      B. 358.682                      C. 853.286                      D. 853.68   | 15. _____ |



**Determine which choice best show the value written as a numeral.**

**Answers**

- |   |                             |
|---|-----------------------------|
| 1) eight hundred ninety-four and twenty-one hundredths<br>A. 894.21      B. 894.12      C. 894.0021      D. 498.2                   | 1. <u>    <b>A</b>    </u>  |
| 2) eighty-one and nine hundred fifty-eight thousandths<br>A. 81.958      B. 18.958      C. 18.95      D. 18.859                     | 2. <u>    <b>A</b>    </u>  |
| 3) nine hundred forty-seven and twenty-five thousandths<br>A. 749.0      B. 947.520      C. 947.025      D. 947.25                  | 3. <u>    <b>C</b>    </u>  |
| 4) two hundred seventy-one and nine hundred eighty-seven thousandths<br>A. 271.0987      B. 271.987      C. 172.789      D. 172.987 | 4. <u>    <b>B</b>    </u>  |
| 5) eighty-six and twenty-seven thousandths<br>A. 86.720      B. 86.027      C. 68.02      D. 86.0027                                | 5. <u>    <b>B</b>    </u>  |
| 6) six hundred thirty-six and six hundred thirteen thousandths<br>A. 636.613      B. 636.00613      C. 636.6      D. 636.0613       | 6. <u>    <b>A</b>    </u>  |
| 7) sixty-five and seventeen hundredths<br>A. 65.0017      B. 65.17      C. 56.1      D. 65.71                                       | 7. <u>    <b>B</b>    </u>  |
| 8) four hundred seventy-five and one tenth<br>A. 475.001      B. 574.1      C. 475.01      D. 475.1                                 | 8. <u>    <b>D</b>    </u>  |
| 9) forty-five and sixty-two hundredths<br>A. 45.62      B. 54.6      C. 45.26      D. 54.62   | 9. <u>    <b>A</b>    </u>  |
| 10) four hundred seventy-three and six hundredths<br>A. 374.60      B. 473.006      C. 374.06      D. 473.06                        | 10. <u>    <b>D</b>    </u> |
| 11) sixty-one and ninety-five hundredths<br>A. 16.59      B. 61.59      C. 61.95      D. 16.95                                      | 11. <u>    <b>A</b>    </u> |
| 12) four hundred thirty-four and twenty-five thousandths<br>A. 434.025      B. 434.520      C. 434.25      D. 434.0025              | 12. <u>    <b>D</b>    </u> |
| 13) seventy-one and fifty-six thousandths<br>A. 71.56      B. 71.0056      C. 17.056      D. 71.056                                 | 13. <u>    <b>B</b>    </u> |
| 14) thirty-three and four hundred fifty-two thousandths<br>A. 33.0452      B. 33.452      C. 33.254      D. 33.4                    | 14. <u>    <b>B</b>    </u> |
| 15) three hundred fifty-eight and six hundred eighty-two thousandths<br>A. 358.286      B. 358.682      C. 853.286      D. 853.68   | 15. <u>    <b>B</b>    </u> |



**Determine which choice best show the value written as a numeral.**

**Answers**

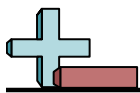
- |   |   |
|---|---|
| <p>1) ninety-four and one hundred fifty-two thousandths<br/>                 A. 49.15                      B. 94.00152                      C. 94.152                      D. 49.1</p> <p>2) six hundred thirteen and four tenths<br/>                 A. 316.4                      B. 613.004                      C. 613.4                      D. 613.04</p> <p>3) one hundred forty-seven and twenty-eight hundredths<br/>                 A. 741.82                      B. 147.28                      C. 147.028                      D. 741.2</p> <p>4) eight hundred twenty-two and ninety-five hundredths<br/>                 A. 822.95                      B. 228.95                      C. 228.59                      D. 822.0095</p> <p>5) fifty-nine and forty-nine hundredths<br/>                 A. 95.49                      B. 59.0049                      C. 59.49                      D. 95.4</p> <p>6) nine hundred eighty-two and two thousandths<br/>                 A. 289.002                      B. 289.200                      C. 289.0                      D. 982.002</p> <p>7) fifty-seven and twenty-two thousandths<br/>                 A. 57.022                      B. 57.0022                      C. 75.02                      D. 57.220</p> <p>8) five hundred sixty-five and two thousandths<br/>                 A. 565.2                      B. 565.002                      C. 565.200                      D. 565.02</p> <p>9) five hundred thirty-one and ninety-six hundredths<br/>                 A. 135.96                      B. 531.69                      C. 531.96                      D. 531.096</p> <p>10) eight hundred thirty-five and thirty-five thousandths<br/>                 A. 538.035                      B. 835.35                      C. 538.03                      D. 835.035</p> <p>11) seventy-one and three thousandths<br/>                 A. 17.300                      B. 17.0                      C. 71.003                      D. 17.00</p> <p>12) eighty-nine and five hundredths<br/>                 A. 98.0                      B. 89.50                      C. 89.005                      D. 89.05</p> <p>13) twenty-six and three hundred eighty-eight thousandths<br/>                 A. 26.0388                      B. 26.388                      C. 62.3                      D. 26.883</p> <p>14) fifty-six and three hundred fifty-one thousandths<br/>                 A. 65.351                      B. 65.3                      C. 56.351                      D. 65.153</p> <p>15) fifty-one and four hundred sixty-two thousandths<br/>                 A. 15.4                      B. 15.462                      C. 51.462                      D. 51.0462</p> | <p>1. _____</p> <p>2. _____</p> <p>3. _____</p> <p>4. _____</p> <p>5. _____</p> <p>6. _____</p> <p>7. _____</p> <p>8. _____</p> <p>9. _____</p> <p>10. _____</p> <p>11. _____</p> <p>12. _____</p> <p>13. _____</p> <p>14. _____</p> <p>15. _____</p> |
|---|---|



**Determine which choice best show the value written as a numeral.**

**Answers**

- |   |   |
|---|---|
| 1) ninety-four and one hundred fifty-two thousandths<br>A. 49.15                      B. 94.00152                      C. 94.152                      D. 49.1         | 1. <u>          <b>C</b>          </u>  |
| 2) six hundred thirteen and four tenths<br>A. 316.4                      B. 613.004                      C. 613.4                      D. 613.04                      | 2. <u>          <b>C</b>          </u>  |
| 3) one hundred forty-seven and twenty-eight hundredths<br>A. 741.82                      B. 147.28                      C. 147.028                      D. 741.2      | 3. <u>          <b>B</b>          </u>  |
| 4) eight hundred twenty-two and ninety-five hundredths<br>A. 822.95                      B. 228.95                      C. 228.59                      D. 822.0095    | 4. <u>          <b>A</b>          </u>  |
| 5) fifty-nine and forty-nine hundredths<br>A. 95.49                      B. 59.0049                      C. 59.49                      D. 95.4                        | 5. <u>          <b>C</b>          </u>  |
| 6) nine hundred eighty-two and two thousandths<br>A. 289.002                      B. 289.200                      C. 289.0                      D. 982.002            | 6. <u>          <b>D</b>          </u>  |
| 7) nine hundred eighty-two and two thousandths<br>A. 289.002                      B. 289.200                      C. 289.0                      D. 982.002            | 7. <u>          <b>A</b>          </u>  |
| 8) fifty-seven and twenty-two thousandths<br>A. 57.022                      B. 57.0022                      C. 75.02                      D. 57.220                   | 8. <u>          <b>B</b>          </u>  |
| 9) five hundred sixty-five and two thousandths<br>A. 565.2                      B. 565.002                      C. 565.200                      D. 565.02             | 9. <u>          <b>C</b>          </u>  |
| 10) five hundred sixty-five and two thousandths<br>A. 565.2                      B. 565.002                      C. 565.200                      D. 565.02            | 10. <u>          <b>D</b>          </u> |
| 11) five hundred thirty-one and ninety-six hundredths<br>A. 135.96                      B. 531.69                      C. 531.96                      D. 531.096      | 11. <u>          <b>C</b>          </u> |
| 12) eight hundred thirty-five and thirty-five thousandths<br>A. 538.035                      B. 835.35                      C. 538.03                      D. 835.035 | 12. <u>          <b>D</b>          </u> |
| 13) eight hundred thirty-five and thirty-five thousandths<br>A. 538.035                      B. 835.35                      C. 538.03                      D. 835.035 | 13. <u>          <b>B</b>          </u> |
| 14) seventy-one and three thousandths<br>A. 17.300                      B. 17.0                      C. 71.003                      D. 17.00                          | 14. <u>          <b>C</b>          </u> |
| 15) eighty-nine and five hundredths<br>A. 98.0                      B. 89.50                      C. 89.005                      D. 89.05                             | 15. <u>          <b>C</b>          </u> |
| 16) twenty-six and three hundred eighty-eight thousandths<br>A. 26.0388                      B. 26.388                      C. 62.3                      D. 26.883    |   |
| 17) fifty-six and three hundred fifty-one thousandths<br>A. 65.351                      B. 65.3                      C. 56.351                      D. 65.153         |   |
| 18) fifty-one and four hundred sixty-two thousandths<br>A. 15.4                      B. 15.462                      C. 51.462                      D. 51.0462         |   |



Determine which choice best show the value written as a numeral.

Answers

- |   |           |
|---|-----------|
| 1) five hundred eighty-three and six hundred sixty-five thousandths<br>A. 385.6                      B. 385.665                      C. 583.665                      D. 583.566 | 1. _____  |
| 2) fifty-two and seven hundredths<br>A. 52.7                      B. 52.70                      C. 25.0                      D. 52.07   | 2. _____  |
| 3) ninety-two and one tenth<br>A. 92.01                      B. 29.1                      C. 92.1                      D. 92.001  | 3. _____  |
| 4) twenty-seven and fifty-four hundredths<br>A. 72.45                      B. 27.54                      C. 72.54                      D. 27.0054                               | 4. _____  |
| 5) fifty-two and twenty-five hundredths<br>A. 52.025                      B. 25.52                      C. 52.52                      D. 52.25                                  | 5. _____  |
| 6) eighty-four and two tenths<br>A. 84.02                      B. 84.2                      C. 48.2                      D. 84.002  | 6. _____  |
| 7) eight hundred eighty-six and ninety-nine hundredths<br>A. 886.99                      B. 886.0099                      C. 886.099                      D. 688.99             | 7. _____  |
| 8) fifty-eight and one hundred sixty-eight thousandths<br>A. 58.00168                      B. 58.168                      C. 85.168                      D. 58.861              | 8. _____  |
| 9) eighty-two and sixty-five thousandths<br>A. 82.065                      B. 82.0065                      C. 82.65                      D. 28.06                               | 9. _____  |
| 10) fifty-four and four hundred seventy-nine thousandths<br>A. 54.479                      B. 54.974                      C. 54.00479                      D. 45.47             | 10. _____ |
| 11) four hundred sixty-five and fifty-seven hundredths<br>A. 564.5                      B. 465.057                      C. 465.75                      D. 465.57                | 11. _____ |
| 12) twenty-six and eight hundred twenty-three thousandths<br>A. 62.823                      B. 26.823                      C. 62.82                      D. 26.328              | 12. _____ |
| 13) forty-eight and twenty-two thousandths<br>A. 48.22                      B. 48.220                      C. 48.0022                      D. 48.022                            | 13. _____ |
| 14) ninety-seven and nine hundred fifteen thousandths<br>A. 97.915                      B. 97.0915                      C. 79.91                      D. 97.519                 | 14. _____ |
| 15) sixty-eight and six hundred eighteen thousandths<br>A. 68.00618                      B. 68.816                      C. 86.6                      D. 68.618                  | 15. _____ |

**Determine which choice best show the value written as a numeral.****Answers**

- |   |   |
|---|---|
| 1) five hundred eighty-three and six hundred sixty-five thousandths<br>A. 385.6                      B. 385.665                      C. 583.665                      D. 583.566 | 1. <u>          <b>C</b>          </u>  |
| 2) fifty-two and seven hundredths<br>A. 52.7                      B. 52.70                      C. 25.0                      D. 52.07   | 2. <u>          <b>D</b>          </u>  |
| 3) ninety-two and one tenth<br>A. 92.01                      B. 29.1                      C. 92.1                      D. 92.001  | 3. <u>          <b>C</b>          </u>  |
| 4) twenty-seven and fifty-four hundredths<br>A. 72.45                      B. 27.54                      C. 72.54                      D. 27.0054                               | 4. <u>          <b>B</b>          </u>  |
| 5) fifty-two and twenty-five hundredths<br>A. 52.025                      B. 25.52                      C. 52.52                      D. 52.25                                  | 5. <u>          <b>D</b>          </u>  |
| 6) eighty-four and two tenths<br>A. 84.02                      B. 84.2                      C. 48.2                      D. 84.002  | 6. <u>          <b>B</b>          </u>  |
| 7) eight hundred eighty-six and ninety-nine hundredths<br>A. 886.99                      B. 886.0099                      C. 886.099                      D. 688.99             | 7. <u>          <b>A</b>          </u>  |
| 8) fifty-eight and one hundred sixty-eight thousandths<br>A. 58.00168                      B. 58.168                      C. 85.168                      D. 58.861              | 8. <u>          <b>B</b>          </u>  |
| 9) eighty-two and sixty-five thousandths<br>A. 82.065                      B. 82.0065                      C. 82.65                      D. 28.06                               | 9. <u>          <b>A</b>          </u>  |
| 10) fifty-four and four hundred seventy-nine thousandths<br>A. 54.479                      B. 54.974                      C. 54.00479                      D. 45.47             | 10. <u>          <b>A</b>          </u> |
| 11) eighty-two and sixty-five thousandths<br>A. 82.065                      B. 82.0065                      C. 82.65                      D. 28.06                              | 11. <u>          <b>D</b>          </u> |
| 12) fifty-four and four hundred seventy-nine thousandths<br>A. 54.479                      B. 54.974                      C. 54.00479                      D. 45.47             | 12. <u>          <b>B</b>          </u> |
| 13) four hundred sixty-five and fifty-seven hundredths<br>A. 564.5                      B. 465.057                      C. 465.75                      D. 465.57                | 13. <u>          <b>D</b>          </u> |
| 14) twenty-six and eight hundred twenty-three thousandths<br>A. 62.823                      B. 26.823                      C. 62.82                      D. 26.328              | 14. <u>          <b>A</b>          </u> |
| 15) forty-eight and twenty-two thousandths<br>A. 48.22                      B. 48.220                      C. 48.0022                      D. 48.022                            | 15. <u>          <b>D</b>          </u> |
| 16) ninety-seven and nine hundred fifteen thousandths<br>A. 97.915                      B. 97.0915                      C. 79.91                      D. 97.519                 |   |
| 17) sixty-eight and six hundred eighteen thousandths<br>A. 68.00618                      B. 68.816                      C. 86.6                      D. 68.618                  |   |



**Determine which choice best show the value written as a numeral.**

**Answers**

- |   |   |
|---|---|
| <p>1) eighty-two and one hundred sixty-nine thousandths<br/>                 A. 28.169                      B. 82.00169                      C. 28.1                      D. 82.169</p> <p>2) fifty-three and eight hundredths<br/>                 A. 53.8                      B. 35.80                      C. 53.08                      D. 53.008</p> <p>3) forty-seven and eighty-four hundredths<br/>                 A. 74.8                      B. 47.084                      C. 74.84                      D. 47.84</p> <p>4) ninety-seven and twenty-four hundredths<br/>                 A. 97.24                      B. 97.42                      C. 79.42                      D. 97.024</p> <p>5) forty-five and three thousandths<br/>                 A. 54.003                      B. 45.003                      C. 45.300                      D. 45.3</p> <p>6) twenty-seven and eighty-seven thousandths<br/>                 A. 27.780                      B. 27.0087                      C. 27.087                      D. 72.780</p> <p>7) seventy-one and two hundredths<br/>                 A. 71.20                      B. 17.0                      C. 71.2                      D. 71.02</p> <p>8) forty-five and seventy-five hundredths<br/>                 A. 45.075                      B. 54.7                      C. 54.57                      D. 45.75</p> <p>9) thirteen and one thousandth<br/>                 A. 31.00                      B. 13.001                      C. 13.1                      D. 31.100</p> <p>10) thirty-nine and four hundred ninety-six thousandths<br/>                 A. 93.496                      B. 39.496                      C. 39.0496                      D. 93.694</p> <p>11) two hundred sixty-two and nine hundred seventeen thousandths<br/>                 A. 262.9                      B. 262.91                      C. 262.917                      D. 262.00917</p> <p>12) seventy-six and three tenths<br/>                 A. 67.3                      B. 76.03                      C. 76.003                      D. 76.3</p> <p>13) sixty-seven and nine hundred ninety-nine thousandths<br/>                 A. 76.9                      B. 67.999                      C. 67.0999                      D. 76.99</p> <p>14) four hundred sixty-four and three thousandths<br/>                 A. 464.300                      B. 464.03                      C. 464.0                      D. 464.003</p> <p>15) fifty-eight and forty-five hundredths<br/>                 A. 58.45                      B. 85.45                      C. 85.54                      D. 58.045</p> | <p>1. _____</p> <p>2. _____</p> <p>3. _____</p> <p>4. _____</p> <p>5. _____</p> <p>6. _____</p> <p>7. _____</p> <p>8. _____</p> <p>9. _____</p> <p>10. _____</p> <p>11. _____</p> <p>12. _____</p> <p>13. _____</p> <p>14. _____</p> <p>15. _____</p> |
|---|---|



Determine which choice best show the value written as a numeral.

Answers

- |   |   |
|---|---|
| 1) eighty-two and one hundred sixty-nine thousandths<br>A. 28.169                      B. 82.00169                      C. 28.1                      D. 82.169                | 1. <u>          <b>D</b>          </u>  |
| 2) fifty-three and eight hundredths<br>A. 53.8                      B. 35.80                      C. 53.08                      D. 53.008                                     | 2. <u>          <b>C</b>          </u>  |
| 3) forty-seven and eighty-four hundredths<br>A. 74.8                      B. 47.084                      C. 74.84                      D. 47.84                               | 3. <u>          <b>D</b>          </u>  |
| 4) ninety-seven and twenty-four hundredths<br>A. 97.24                      B. 97.42                      C. 79.42                      D. 97.024                             | 4. <u>          <b>A</b>          </u>  |
| 5) forty-five and three thousandths<br>A. 54.003                      B. 45.003                      C. 45.300                      D. 45.3                                   | 5. <u>          <b>B</b>          </u>  |
| 6) twenty-seven and eighty-seven thousandths<br>A. 27.780                      B. 27.0087                      C. 27.087                      D. 72.780                       | 6. <u>          <b>C</b>          </u>  |
| 7) seventy-one and two hundredths<br>A. 71.20                      B. 17.0                      C. 71.2                      D. 71.02   | 7. <u>          <b>D</b>          </u>  |
| 8) forty-five and seventy-five hundredths<br>A. 45.075                      B. 54.7                      C. 54.57                      D. 45.75                               | 8. <u>          <b>D</b>          </u>  |
| 9) thirteen and one thousandth<br>A. 31.00                      B. 13.001                      C. 13.1                      D. 31.100   | 9. <u>          <b>B</b>          </u>  |
| 10) thirty-nine and four hundred ninety-six thousandths<br>A. 93.496                      B. 39.496                      C. 39.0496                      D. 93.694            | 10. <u>          <b>B</b>          </u> |
| 11) two hundred sixty-two and nine hundred seventeen thousandths<br>A. 262.9                      B. 262.91                      C. 262.917                      D. 262.00917 | 11. <u>          <b>C</b>          </u> |
| 12) seventy-six and three tenths<br>A. 67.3                      B. 76.03                      C. 76.003                      D. 76.3   | 12. <u>          <b>D</b>          </u> |
| 13) sixty-seven and nine hundred ninety-nine thousandths<br>A. 76.9                      B. 67.999                      C. 67.0999                      D. 76.99              | 13. <u>          <b>B</b>          </u> |
| 14) four hundred sixty-four and three thousandths<br>A. 464.300                      B. 464.03                      C. 464.0                      D. 464.003                  | 14. <u>          <b>D</b>          </u> |
| 15) fifty-eight and forty-five hundredths<br>A. 58.45                      B. 85.45                      C. 85.54                      D. 58.045                              | 15. <u>          <b>A</b>          </u> |





**Determine which choice best show the value written as a numeral.**

**Answers**

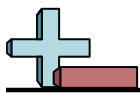
- |  |           |
|--|-----------|
| 1) two hundred thirty-three and nine tenths<br>A. 233.009      B. 233.09      C. 233.9      D. 332.9                                 | 1. _____  |
| 2) four hundred eleven and one hundred thirty-nine thousandths<br>A. 411.00139      B. 114.139      C. 411.139      D. 114.931       | 2. _____  |
| 3) ninety-five and fifty-four thousandths<br>A. 59.05      B. 95.450      C. 95.054      D. 95.54                                    | 3. _____  |
| 4) fifty-four and three hundredths<br>A. 54.03      B. 45.03      C. 54.30      D. 45.0  | 4. _____  |
| 5) two hundred seventy-five and four hundred forty-nine thousandths<br>A. 275.00449      B. 275.0449      C. 572.449      D. 275.449 | 5. _____  |
| 6) fifty-one and three thousandths<br>A. 51.003      B. 51.03      C. 51.3      D. 51.300  | 6. _____  |
| 7) forty-one and four hundredths<br>A. 41.40      B. 41.004      C. 41.04      D. 14.04  | 7. _____  |
| 8) five hundred fifty-nine and six tenths<br>A. 559.006      B. 559.6      C. 955.6      D. 559.06                                   | 8. _____  |
| 9) fifty-seven and nineteen thousandths<br>A. 57.019      B. 57.0019      C. 57.19      D. 75.01                                     | 9. _____  |
| 10) three hundred twenty-five and four hundred seventy-nine thousandths<br>A. 325.974      B. 325.479      C. 523.47      D. 523.4   | 10. _____ |
| 11) twenty-five and one hundredth<br>A. 52.01      B. 25.10      C. 52.0      D. 25.01   | 11. _____ |
| 12) eight hundred forty-four and six hundred fifty-three thousandths<br>A. 844.653      B. 448.65      C. 448.653      D. 844.0653   | 12. _____ |
| 13) ninety-two and twenty-one thousandths<br>A. 92.120      B. 92.21      C. 29.021      D. 92.021                                   | 13. _____ |
| 14) sixty-six and nine hundred sixty-seven thousandths<br>A. 66.00967      B. 66.769      C. 66.967      D. 66.96                    | 14. _____ |
| 15) eighty-two and ninety-nine hundredths<br>A. 82.99      B. 82.0099      C. 82.099      D. 28.9                                    | 15. _____ |



**Determine which choice best show the value written as a numeral.**

**Answers**

- |  |   |
|--|---|
| 1) two hundred thirty-three and nine tenths<br>A. 233.009      B. 233.09      C. 233.9      D. 332.9                                 | 1. <u>          <b>C</b>          </u>  |
| 2) four hundred eleven and one hundred thirty-nine thousandths<br>A. 411.00139      B. 114.139      C. 411.139      D. 114.931       | 2. <u>          <b>C</b>          </u>  |
| 3) ninety-five and fifty-four thousandths<br>A. 59.05      B. 95.450      C. 95.054      D. 95.54                                    | 3. <u>          <b>C</b>          </u>  |
| 4) fifty-four and three hundredths<br>A. 54.03      B. 45.03      C. 54.30      D. 45.0  | 4. <u>          <b>A</b>          </u>  |
| 5) two hundred seventy-five and four hundred forty-nine thousandths<br>A. 275.00449      B. 275.0449      C. 572.449      D. 275.449 | 5. <u>          <b>D</b>          </u>  |
| 6) fifty-one and three thousandths<br>A. 51.003      B. 51.03      C. 51.3      D. 51.300  | 6. <u>          <b>A</b>          </u>  |
| 7) forty-one and four hundredths<br>A. 41.40      B. 41.004      C. 41.04      D. 14.04  | 7. <u>          <b>C</b>          </u>  |
| 8) five hundred fifty-nine and six tenths<br>A. 559.006      B. 559.6      C. 955.6      D. 559.06                                   | 8. <u>          <b>B</b>          </u>  |
| 9) fifty-seven and nineteen thousandths<br>A. 57.019      B. 57.0019      C. 57.19      D. 75.01                                     | 9. <u>          <b>A</b>          </u>  |
| 10) three hundred twenty-five and four hundred seventy-nine thousandths<br>A. 325.974      B. 325.479      C. 523.47      D. 523.4   | 10. <u>          <b>B</b>          </u> |
| 11) twenty-five and one hundredth<br>A. 52.01      B. 25.10      C. 52.0      D. 25.01   | 11. <u>          <b>D</b>          </u> |
| 12) eight hundred forty-four and six hundred fifty-three thousandths<br>A. 844.653      B. 448.65      C. 448.653      D. 844.0653   | 12. <u>          <b>A</b>          </u> |
| 13) ninety-two and twenty-one thousandths<br>A. 92.120      B. 92.21      C. 29.021      D. 92.021                                   | 13. <u>          <b>D</b>          </u> |
| 14) sixty-six and nine hundred sixty-seven thousandths<br>A. 66.00967      B. 66.769      C. 66.967      D. 66.96                    | 14. <u>          <b>C</b>          </u> |
| 15) eighty-two and ninety-nine hundredths<br>A. 82.99      B. 82.0099      C. 82.099      D. 28.9                                    | 15. <u>          <b>A</b>          </u> |



**Determine which choice best show the value written as a numeral.**

**Answers**

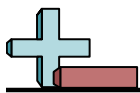
- |   |           |
|---|-----------|
| 1) sixty-five and twelve hundredths<br>A. 65.12                      B. 56.21                      C. 65.21                      D. 65.0012   | 1. _____  |
| 2) eighty-four and eight tenths<br>A. 84.008                      B. 48.8                      C. 84.8                      D. 84.08  | 2. _____  |
| 3) forty-seven and six hundred forty-three thousandths<br>A. 47.643                      B. 74.6                      C. 47.346                      D. 47.00643                    | 3. _____  |
| 4) seven hundred sixty-five and fifty-six thousandths<br>A. 567.05                      B. 567.056                      C. 567.650                      D. 765.056                  | 4. _____  |
| 5) seven hundred ninety-five and two hundred sixty-five thousandths<br>A. 795.562                      B. 795.265                      C. 795.0265                      D. 597.562  | 5. _____  |
| 6) two hundred thirty-one and three hundred fifty-three thousandths<br>A. 231.00353                      B. 231.353                      C. 132.35                      D. 132.3    | 6. _____  |
| 7) sixty-seven and forty-five hundredths<br>A. 76.45                      B. 67.54                      C. 76.4                      D. 67.45                                       | 7. _____  |
| 8) eighty-seven and ninety-nine thousandths<br>A. 78.0                      B. 87.099                      C. 87.990                      D. 87.0099                                | 8. _____  |
| 9) twenty-five and seventy-five thousandths<br>A. 25.570                      B. 52.0                      C. 25.0075                      D. 25.075                                | 9. _____  |
| 10) ninety-six and seven hundred fourteen thousandths<br>A. 69.7                      B. 69.417                      C. 96.714                      D. 96.00714                     | 10. _____ |
| 11) five hundred nineteen and nine hundred eighty-four thousandths<br>A. 519.984                      B. 915.984                      C. 915.9                      D. 519.0984     | 11. _____ |
| 12) thirty-three and ninety-three hundredths<br>A. 33.39                      B. 33.93                      C. 33.0093                      D. 33.093                               | 12. _____ |
| 13) six hundred thirty-three and thirty-one thousandths<br>A. 336.03                      B. 633.130                      C. 336.130                      D. 633.031                | 13. _____ |
| 14) thirteen and three thousandths<br>A. 31.0                      B. 13.003                      C. 13.3                      D. 13.03   | 14. _____ |
| 15) three hundred seventy-nine and two hundred sixty-seven thousandths<br>A. 379.762                      B. 973.267                      C. 379.267                      D. 973.26 | 15. _____ |



**Determine which choice best show the value written as a numeral.**

**Answers**

- |   |   |
|---|---|
| 1) sixty-five and twelve hundredths<br>A. 65.12                      B. 56.21                      C. 65.21                      D. 65.0012   | 1. <u>          <b>A</b>          </u>  |
| 2) eighty-four and eight tenths<br>A. 84.008                      B. 48.8                      C. 84.8                      D. 84.08  | 2. <u>          <b>C</b>          </u>  |
| 3) forty-seven and six hundred forty-three thousandths<br>A. 47.643                      B. 74.6                      C. 47.346                      D. 47.00643                    | 3. <u>          <b>A</b>          </u>  |
| 4) seven hundred sixty-five and fifty-six thousandths<br>A. 567.05                      B. 567.056                      C. 567.650                      D. 765.056                  | 4. <u>          <b>D</b>          </u>  |
| 5) seven hundred ninety-five and two hundred sixty-five thousandths<br>A. 795.562                      B. 795.265                      C. 795.0265                      D. 597.562  | 5. <u>          <b>B</b>          </u>  |
| 6) two hundred thirty-one and three hundred fifty-three thousandths<br>A. 231.00353                      B. 231.353                      C. 132.35                      D. 132.3    | 6. <u>          <b>B</b>          </u>  |
| 7) sixty-seven and forty-five hundredths<br>A. 76.45                      B. 67.54                      C. 76.4                      D. 67.45                                       | 7. <u>          <b>D</b>          </u>  |
| 8) eighty-seven and ninety-nine thousandths<br>A. 78.0                      B. 87.099                      C. 87.990                      D. 87.0099                                | 8. <u>          <b>B</b>          </u>  |
| 9) twenty-five and seventy-five thousandths<br>A. 25.570                      B. 52.0                      C. 25.0075                      D. 25.075                                | 9. <u>          <b>D</b>          </u>  |
| 10) ninety-six and seven hundred fourteen thousandths<br>A. 69.7                      B. 69.417                      C. 96.714                      D. 96.00714                     | 10. <u>          <b>C</b>          </u> |
| 11) five hundred nineteen and nine hundred eighty-four thousandths<br>A. 519.984                      B. 915.984                      C. 915.9                      D. 519.0984     | 11. <u>          <b>A</b>          </u> |
| 12) thirty-three and ninety-three hundredths<br>A. 33.39                      B. 33.93                      C. 33.0093                      D. 33.093                               | 12. <u>          <b>B</b>          </u> |
| 13) six hundred thirty-three and thirty-one thousandths<br>A. 336.03                      B. 633.130                      C. 336.130                      D. 633.031                | 13. <u>          <b>D</b>          </u> |
| 14) thirteen and three thousandths<br>A. 31.0                      B. 13.003                      C. 13.3                      D. 13.03   | 14. <u>          <b>B</b>          </u> |
| 15) three hundred seventy-nine and two hundred sixty-seven thousandths<br>A. 379.762                      B. 973.267                      C. 379.267                      D. 973.26 | 15. <u>          <b>C</b>          </u> |



**Determine which choice best show the value written as a numeral.**

**Answers**

- |   |           |
|---|-----------|
| 1) twenty-two and six hundred thirty-three thousandths<br>A. 22.633                      B. 22.00633                      C. 22.336                      D. 22.0633             | 1. _____  |
| 2) fifty-seven and seventy-nine thousandths<br>A. 57.79                      B. 57.079                      C. 75.07                      D. 57.0079                            | 2. _____  |
| 3) fifty-nine and three hundred twenty-two thousandths<br>A. 59.223                      B. 59.00322                      C. 59.322                      D. 95.3                | 3. _____  |
| 4) sixty-seven and one hundred seventy-six thousandths<br>A. 67.0176                      B. 67.00176                      C. 67.176                      D. 76.17              | 4. _____  |
| 5) eight hundred fifty-seven and one hundredth<br>A. 857.01                      B. 857.1                      C. 758.10                      D. 758.01                         | 5. _____  |
| 6) forty-three and fifty-three hundredths<br>A. 43.53                      B. 43.35                      C. 34.53                      D. 43.053                                | 6. _____  |
| 7) twenty-seven and four hundred twenty-five thousandths<br>A. 72.4                      B. 27.0425                      C. 27.425                      D. 72.425               | 7. _____  |
| 8) eight hundred fifty-four and five hundred fifty-six thousandths<br>A. 458.5                      B. 458.55                      C. 854.556                      D. 854.655   | 8. _____  |
| 9) fifty-three and nine hundredths<br>A. 53.9                      B. 53.009                      C. 53.09                      D. 35.09  | 9. _____  |
| 10) eighty-nine and seven hundred ninety-two thousandths<br>A. 98.297                      B. 89.792                      C. 98.7                      D. 98.792                | 10. _____ |
| 11) fifty-three and five hundred thirty-nine thousandths<br>A. 35.5                      B. 53.539                      C. 53.0539                      D. 53.935               | 11. _____ |
| 12) sixty-six and two hundredths<br>A. 66.2                      B. 66.002                      C. 66.02                      D. 66.20  | 12. _____ |
| 13) one hundred ninety-five and two hundred thirty-six thousandths<br>A. 591.2                      B. 195.236                      C. 591.23                      D. 195.00236 | 13. _____ |
| 14) seventy-one and two hundredths<br>A. 71.2                      B. 17.02                      C. 71.02                      D. 71.002  | 14. _____ |
| 15) seventy-five and seven hundred seventy-two thousandths<br>A. 57.277                      B. 75.0772                      C. 57.77                      D. 75.772            | 15. _____ |



**Determine which choice best show the value written as a numeral.**

**Answers**

- |   |   |
|---|---|
| 1) twenty-two and six hundred thirty-three thousandths<br>A. 22.633                      B. 22.00633                      C. 22.336                      D. 22.0633             | 1. <u>          <b>A</b>          </u>  |
| 2) fifty-seven and seventy-nine thousandths<br>A. 57.79                      B. 57.079                      C. 75.07                      D. 57.0079                            | 2. <u>          <b>B</b>          </u>  |
| 3) fifty-nine and three hundred twenty-two thousandths<br>A. 59.223                      B. 59.00322                      C. 59.322                      D. 95.3                | 3. <u>          <b>C</b>          </u>  |
| 4) sixty-seven and one hundred seventy-six thousandths<br>A. 67.0176                      B. 67.00176                      C. 67.176                      D. 76.17              | 4. <u>          <b>C</b>          </u>  |
| 5) eight hundred fifty-seven and one hundredth<br>A. 857.01                      B. 857.1                      C. 758.10                      D. 758.01                         | 5. <u>          <b>A</b>          </u>  |
| 6) forty-three and fifty-three hundredths<br>A. 43.53                      B. 43.35                      C. 34.53                      D. 43.053                                | 6. <u>          <b>A</b>          </u>  |
| 7) twenty-seven and four hundred twenty-five thousandths<br>A. 72.4                      B. 27.0425                      C. 27.425                      D. 72.425               | 7. <u>          <b>C</b>          </u>  |
| 8) eight hundred fifty-four and five hundred fifty-six thousandths<br>A. 458.5                      B. 458.55                      C. 854.556                      D. 854.655   | 8. <u>          <b>C</b>          </u>  |
| 9) fifty-three and nine hundredths<br>A. 53.9                      B. 53.009                      C. 53.09                      D. 35.09  | 9. <u>          <b>C</b>          </u>  |
| 10) eighty-nine and seven hundred ninety-two thousandths<br>A. 98.297                      B. 89.792                      C. 98.7                      D. 98.792                | 10. <u>          <b>B</b>          </u> |
| 11) fifty-three and five hundred thirty-nine thousandths<br>A. 35.5                      B. 53.539                      C. 53.0539                      D. 53.935               | 11. <u>          <b>B</b>          </u> |
| 12) sixty-six and two hundredths<br>A. 66.2                      B. 66.002                      C. 66.02                      D. 66.20  | 12. <u>          <b>C</b>          </u> |
| 13) one hundred ninety-five and two hundred thirty-six thousandths<br>A. 591.2                      B. 195.236                      C. 591.23                      D. 195.00236 | 13. <u>          <b>B</b>          </u> |
| 14) seventy-one and two hundredths<br>A. 71.2                      B. 17.02                      C. 71.02                      D. 71.002  | 14. <u>          <b>C</b>          </u> |
| 15) seventy-five and seven hundred seventy-two thousandths<br>A. 57.277                      B. 75.0772                      C. 57.77                      D. 75.772            | 15. <u>          <b>D</b>          </u> |



**Determine which choice best show the value written as a numeral.**

**Answers**

- |   |           |
|---|-----------|
| 1) four hundred seventy-eight and thirty-one hundredths<br>A. 478.31                      B. 874.3                      C. 874.13                      D. 478.13            | 1. _____  |
| 2) twenty-three and one hundred forty-five thousandths<br>A. 32.14                      B. 23.145                      C. 32.145                      D. 23.541             | 2. _____  |
| 3) two hundred ninety-one and five hundred fifty-one thousandths<br>A. 192.55                      B. 291.155                      C. 291.551                      D. 192.5 | 3. _____  |
| 4) fifty-six and nine thousandths<br>A. 65.0                      B. 65.00                      C. 56.009                      D. 65.009                                    | 4. _____  |
| 5) sixty-three and one hundred forty-four thousandths<br>A. 36.1                      B. 36.441                      C. 63.0144                      D. 63.144              | 5. _____  |
| 6) six hundred twenty-four and four tenths<br>A. 624.04                      B. 624.004                      C. 624.4                      D. 426.4                         | 6. _____  |
| 7) thirty-nine and eight tenths<br>A. 39.008                      B. 39.8                      C. 39.08                      D. 93.8  | 7. _____  |
| 8) seventeen and one hundred seventy-three thousandths<br>A. 17.0173                      B. 17.173                      C. 71.173                      D. 17.371           | 8. _____  |
| 9) twenty-three and eight hundredths<br>A. 32.80                      B. 23.08                      C. 23.80                      D. 32.0                                   | 9. _____  |
| 10) one hundred seventy-five and forty-eight hundredths<br>A. 571.84                      B. 175.0048                      C. 175.84                      D. 175.48         | 10. _____ |
| 11) four hundred twenty-nine and thirty-seven hundredths<br>A. 429.37                      B. 924.73                      C. 924.3                      D. 429.73           | 11. _____ |
| 12) eight hundred sixty-nine and eight hundredths<br>A. 869.08                      B. 968.08                      C. 968.80                      D. 869.80                 | 12. _____ |
| 13) eleven and two hundred sixty-eight thousandths<br>A. 11.268                      B. 11.00268                      C. 11.26                      D. 11.0268              | 13. _____ |
| 14) one hundred ninety-five and twenty-three hundredths<br>A. 195.0023                      B. 195.23                      C. 195.023                      D. 591.23        | 14. _____ |
| 15) five hundred thirty-six and eighty-six hundredths<br>A. 536.86                      B. 635.68                      C. 536.68                      D. 536.0086           | 15. _____ |

**Determine which choice best show the value written as a numeral.****Answers**

- |   |                             |
|---|-----------------------------|
| 1) four hundred seventy-eight and thirty-one hundredths<br>A. 478.31      B. 874.3      C. 874.13      D. 478.13            | 1. <u>    <b>A</b>    </u>  |
| 2) twenty-three and one hundred forty-five thousandths<br>A. 32.14      B. 23.145      C. 32.145      D. 23.541             | 2. <u>    <b>B</b>    </u>  |
| 3) two hundred ninety-one and five hundred fifty-one thousandths<br>A. 192.55      B. 291.155      C. 291.551      D. 192.5 | 3. <u>    <b>C</b>    </u>  |
| 4) fifty-six and nine thousandths<br>A. 65.0      B. 65.00      C. 56.009      D. 65.009                                    | 4. <u>    <b>C</b>    </u>  |
| 5) sixty-three and one hundred forty-four thousandths<br>A. 36.1      B. 36.441      C. 63.0144      D. 63.144              | 5. <u>    <b>D</b>    </u>  |
| 6) six hundred twenty-four and four tenths<br>A. 624.04      B. 624.004      C. 624.4      D. 426.4                         | 6. <u>    <b>C</b>    </u>  |
| 7) thirty-nine and eight tenths<br>A. 624.04      B. 624.004      C. 624.4      D. 426.4                                    | 7. <u>    <b>B</b>    </u>  |
| 8) seventeen and one hundred seventy-three thousandths<br>A. 17.0173      B. 17.173      C. 71.173      D. 17.371           | 8. <u>    <b>B</b>    </u>  |
| 9) twenty-three and eight hundredths<br>A. 39.008      B. 39.8      C. 39.08      D. 93.8                                   | 9. <u>    <b>B</b>    </u>  |
| 10) one hundred seventy-five and forty-eight hundredths<br>A. 17.0173      B. 17.173      C. 71.173      D. 17.371          | 10. <u>    <b>D</b>    </u> |
| 11) four hundred twenty-nine and thirty-seven hundredths<br>A. 32.80      B. 23.08      C. 23.80      D. 32.0               | 11. <u>    <b>A</b>    </u> |
| 12) eight hundred sixty-nine and eight hundredths<br>A. 32.80      B. 23.08      C. 23.80      D. 32.0                      | 12. <u>    <b>A</b>    </u> |
| 13) eleven and two hundred sixty-eight thousandths<br>A. 571.84      B. 175.0048      C. 175.84      D. 175.48              | 13. <u>    <b>A</b>    </u> |
| 14) one hundred seventy-five and forty-eight hundredths<br>A. 571.84      B. 175.0048      C. 175.84      D. 175.48         | 14. <u>    <b>B</b>    </u> |
| 15) five hundred thirty-six and eighty-six hundredths<br>A. 429.37      B. 924.73      C. 924.3      D. 429.73              | 15. <u>    <b>A</b>    </u> |





**Determine which choice best show the value written as a numeral.**

**Answers**

- |  |   |
|--|---|
| <p>1) seventy-one and one hundredth<br/>                 A. 71.001                      B. 17.10                      C. 71.01                      D. 17.0</p> <p>2) thirty-eight and eight thousandths<br/>                 A. 38.008                      B. 83.00                      C. 38.800                      D. 83.008</p> <p>3) two hundred fifty-six and seventy-four thousandths<br/>                 A. 256.074                      B. 652.470                      C. 652.07                      D. 256.0074</p> <p>4) sixty-two and seven thousandths<br/>                 A. 26.00                      B. 62.007                      C. 62.700                      D. 62.07</p> <p>5) twenty-three and one hundred sixty-nine thousandths<br/>                 A. 23.0169                      B. 23.00169                      C. 32.1                      D. 23.169</p> <p>6) three hundred seventy-four and twelve thousandths<br/>                 A. 473.210                      B. 374.012                      C. 473.01                      D. 374.12</p> <p>7) ninety-eight and two thousandths<br/>                 A. 89.200                      B. 98.002                      C. 89.00                      D. 98.2</p> <p>8) fourteen and three hundred thirty-five thousandths<br/>                 A. 41.335                      B. 14.335                      C. 41.533                      D. 14.0335</p> <p>9) one hundred ninety-four and sixty-seven thousandths<br/>                 A. 194.067                      B. 194.0067                      C. 194.67                      D. 491.0</p> <p>10) three hundred fifty-one and one tenth<br/>                 A. 153.1                      B. 351.1                      C. 351.01                      D. 351.001</p> <p>11) twenty-eight and three hundred thirty-eight thousandths<br/>                 A. 28.0338                      B. 82.33                      C. 82.338                      D. 28.338</p> <p>12) three hundred nineteen and nine thousandths<br/>                 A. 319.009                      B. 319.9                      C. 913.900                      D. 319.900</p> <p>13) forty-nine and nineteen hundredths<br/>                 A. 49.91                      B. 49.19                      C. 49.0019                      D. 94.19</p> <p>14) thirty-eight and fifty-four thousandths<br/>                 A. 83.05                      B. 38.054                      C. 38.450                      D. 83.0</p> <p>15) two hundred eighty-three and sixty-four hundredths<br/>                 A. 283.0064                      B. 382.46                      C. 382.6                      D. 283.64</p> | <p>1. _____</p> <p>2. _____</p> <p>3. _____</p> <p>4. _____</p> <p>5. _____</p> <p>6. _____</p> <p>7. _____</p> <p>8. _____</p> <p>9. _____</p> <p>10. _____</p> <p>11. _____</p> <p>12. _____</p> <p>13. _____</p> <p>14. _____</p> <p>15. _____</p> |
|--|---|



**Determine which choice best show the value written as a numeral.**

**Answers**

- |   |   |
|---|---|
| 1) seventy-one and one hundredth<br>A. 71.001      B. 17.10      C. 71.01      D. 17.0                                | 1. <u>          <b>C</b>          </u>  |
| 2) thirty-eight and eight thousandths<br>A. 38.008      B. 83.00      C. 38.800      D. 83.008                        | 2. <u>          <b>A</b>          </u>  |
| 3) two hundred fifty-six and seventy-four thousandths<br>A. 256.074      B. 652.470      C. 652.07      D. 256.0074   | 3. <u>          <b>A</b>          </u>  |
| 4) sixty-two and seven thousandths<br>A. 26.00      B. 62.007      C. 62.700      D. 62.07                            | 4. <u>          <b>B</b>          </u>  |
| 5) twenty-three and one hundred sixty-nine thousandths<br>A. 23.0169      B. 23.00169      C. 32.1      D. 23.169     | 5. <u>          <b>D</b>          </u>  |
| 6) three hundred seventy-four and twelve thousandths<br>A. 473.210      B. 374.012      C. 473.01      D. 374.12      | 6. <u>          <b>B</b>          </u>  |
| 7) ninety-eight and two thousandths<br>A. 89.200      B. 98.002      C. 89.00      D. 98.2                            | 7. <u>          <b>B</b>          </u>  |
| 8) fourteen and three hundred thirty-five thousandths<br>A. 41.335      B. 14.335      C. 41.533      D. 14.0335      | 8. <u>          <b>A</b>          </u>  |
| 9) one hundred ninety-four and sixty-seven thousandths<br>A. 194.067      B. 194.0067      C. 194.67      D. 491.0    | 9. <u>          <b>B</b>          </u>  |
| 10) three hundred fifty-one and one tenth<br>A. 153.1      B. 351.1      C. 351.01      D. 351.001                    | 10. <u>          <b>D</b>          </u> |
| 11) twenty-eight and three hundred thirty-eight thousandths<br>A. 28.0338      B. 82.33      C. 82.338      D. 28.338 | 11. <u>          <b>A</b>          </u> |
| 12) three hundred nineteen and nine thousandths<br>A. 319.009      B. 319.9      C. 913.900      D. 319.900           | 12. <u>          <b>B</b>          </u> |
| 13) forty-nine and nineteen hundredths<br>A. 49.91      B. 49.19      C. 49.0019      D. 94.19                        | 13. <u>          <b>B</b>          </u> |
| 14) thirty-eight and fifty-four thousandths<br>A. 83.05      B. 38.054      C. 38.450      D. 83.0                    | 14. <u>          <b>B</b>          </u> |
| 15) two hundred eighty-three and sixty-four hundredths<br>A. 283.0064      B. 382.46      C. 382.6      D. 283.64     | 15. <u>          <b>D</b>          </u> |



**Determine which choice best show the value written as a numeral.**

**Answers**

- |   |           |
|---|-----------|
| 1) thirty-six and eighty-three hundredths<br>A. 63.8                      B. 36.0083                      C. 36.83                      D. 63.83                                      | 1. _____  |
| 2) sixteen and three hundred eighty-three thousandths<br>A. 16.0383                      B. 16.383                      C. 61.383                      D. 61.3                        | 2. _____  |
| 3) sixty-two and five thousandths<br>A. 26.005                      B. 26.500                      C. 62.5                      D. 62.005   | 3. _____  |
| 4) fifty-six and four thousandths<br>A. 56.004                      B. 65.00                      C. 65.0                      D. 56.04   | 4. _____  |
| 5) three hundred thirty-four and one hundred fifty-one thousandths<br>A. 334.0151                      B. 334.151                      C. 433.15                      D. 433.151      | 5. _____  |
| 6) twenty-one and one tenth<br>A. 21.001                      B. 12.1                      C. 21.01                      D. 21.1  | 6. _____  |
| 7) six hundred eighty-six and eighty-three thousandths<br>A. 686.083                      B. 686.0083                      C. 686.0                      D. 686.380                   | 7. _____  |
| 8) eighty-nine and two hundred forty-four thousandths<br>A. 98.244                      B. 98.2                      C. 89.244                      D. 89.00244                       | 8. _____  |
| 9) ninety-six and seven thousandths<br>A. 96.07                      B. 96.007                      C. 69.0                      D. 69.007  | 9. _____  |
| 10) three hundred forty-two and ninety-seven thousandths<br>A. 342.97                      B. 342.0097                      C. 243.09                      D. 342.097                 | 10. _____ |
| 11) six hundred forty-eight and seventeen hundredths<br>A. 846.71                      B. 648.17                      C. 846.1                      D. 846.17                         | 11. _____ |
| 12) eight hundred forty-eight and nine hundred seventy-two thousandths<br>A. 848.00972                      B. 848.97                      C. 848.972                      D. 848.279 | 12. _____ |
| 13) eleven and sixty-nine hundredths<br>A. 11.96                      B. 11.0069                      C. 11.69                      D. 11.069   | 13. _____ |
| 14) five hundred sixty-one and nine hundred thirty-three thousandths<br>A. 561.0933                      B. 561.933                      C. 561.339                      D. 165.339   | 14. _____ |
| 15) nine hundred ninety-five and six thousandths<br>A. 599.006                      B. 995.006                      C. 599.600                      D. 995.600                        | 15. _____ |

**Determine which choice best show the value written as a numeral.****Answers**

- |   |   |
|---|---|
| 1) thirty-six and eighty-three hundredths<br>A. 63.8                      B. 36.0083                      C. 36.83                      D. 63.83                                      | 1. <u>          <b>C</b>          </u>  |
| 2) sixteen and three hundred eighty-three thousandths<br>A. 16.0383                      B. 16.383                      C. 61.383                      D. 61.3                        | 2. <u>          <b>B</b>          </u>  |
| 3) sixty-two and five thousandths<br>A. 26.005                      B. 26.500                      C. 62.5                      D. 62.005   | 3. <u>          <b>D</b>          </u>  |
| 4) fifty-six and four thousandths<br>A. 56.004                      B. 65.00                      C. 65.0                      D. 56.04   | 4. <u>          <b>A</b>          </u>  |
| 5) three hundred thirty-four and one hundred fifty-one thousandths<br>A. 334.0151                      B. 334.151                      C. 433.15                      D. 433.151      | 5. <u>          <b>B</b>          </u>  |
| 6) twenty-one and one tenth<br>A. 21.001                      B. 12.1                      C. 21.01                      D. 21.1  | 6. <u>          <b>D</b>          </u>  |
| 7) six hundred eighty-six and eighty-three thousandths<br>A. 686.083                      B. 686.0083                      C. 686.0                      D. 686.380                   | 7. <u>          <b>A</b>          </u>  |
| 8) eighty-nine and two hundred forty-four thousandths<br>A. 98.244                      B. 98.2                      C. 89.244                      D. 89.00244                       | 8. <u>          <b>C</b>          </u>  |
| 9) ninety-six and seven thousandths<br>A. 96.07                      B. 96.007                      C. 69.0                      D. 69.007  | 9. <u>          <b>B</b>          </u>  |
| 10) three hundred forty-two and ninety-seven thousandths<br>A. 342.97                      B. 342.0097                      C. 243.09                      D. 342.097                 | 10. <u>          <b>D</b>          </u> |
| 11) six hundred forty-eight and seventeen hundredths<br>A. 846.71                      B. 648.17                      C. 846.1                      D. 846.17                         | 11. <u>          <b>B</b>          </u> |
| 12) eight hundred forty-eight and nine hundred seventy-two thousandths<br>A. 848.00972                      B. 848.97                      C. 848.972                      D. 848.279 | 12. <u>          <b>C</b>          </u> |
| 13) eleven and sixty-nine hundredths<br>A. 11.96                      B. 11.0069                      C. 11.69                      D. 11.069   | 13. <u>          <b>C</b>          </u> |
| 14) five hundred sixty-one and nine hundred thirty-three thousandths<br>A. 561.0933                      B. 561.933                      C. 561.339                      D. 165.339   | 14. <u>          <b>B</b>          </u> |
| 15) nine hundred ninety-five and six thousandths<br>A. 599.006                      B. 995.006                      C. 599.600                      D. 995.600                        | 15. <u>          <b>B</b>          </u> |