



Determine which letter best represents the volume.

Milliliter

A milliliter is equal to about 20 drops of water.



Liter

Many large soda bottles are either 1 or 2 liters.


1 Liter = 1,000 Milliliters



Answers

1. _____
2. _____
3. _____
4. _____
5. _____
6. _____
7. _____
8. _____
9. _____

1)



Liquid in a pitcher

- A. 5 liters
- B. 20 milliliters
- C. 1 liter
- D. 500 milliliters

2)



Flour in a pan of brownies

- A. 3 liters
- B. 0.5 liters
- C. 10 milliliters
- D. 16 liters


3)



Liquid in a tea cup

- A. 2 milliliters
- B. 2 liters
- C. 250 milliliters
- D. 5 liters


4)



Eyedropper holds

- A. 1000 milliliters
- B. 2 liters
- C. 500 milliliters
- D. 2 milliliters

5)



Sand a wheel barrow holds

- A. 50 milliliters
- B. 500 milliliters
- C. 3 liters
- D. 170 liters

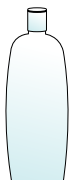
6)



Measuring Cup

- A. 1 liter
- B. 237 liters
- C. 50 milliliters
- D. 237 milliliters


7)



Shampoo in a bottle

- A. 1 milliliter
- B. 20 milliliters
- C. 1.5 liters
- D. 20 liters

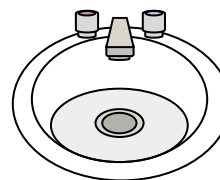
8)



Gas tank in a car

- A. 60 liters
- B. 15 milliliters
- C. 70 milliliters
- D. 3 liters

9)



Water in bathroom sink

- A. 10 milliliters
- B. 2 liters
- C. 500 milliliters
- D. 7.5 liters



Determine which letter best represents the volume.

Milliliter

A milliliter is equal to about 20 drops of water.




Liter

Many large soda bottles are either 1 or 2 liters.

1 Liter = 1,000 Milliliters




Answers

1) 


Liquid in a pitcher

A. 5 liters
B. 20 milliliters
C. 1 liter
D. 500 milliliters

2) 


Flour in a pan of brownies

A. 3 liters
B. 0.5 liters
C. 10 milliliters
D. 16 liters

3) 


Liquid in a tea cup

A. 2 milliliters
B. 2 liters
C. 250 milliliters
D. 5 liters

4) 


Eyedropper holds

A. 1000 milliliters
B. 2 liters
C. 500 milliliters
D. 2 milliliters

5) 


Sand a wheel barrow holds

A. 50 milliliters
B. 500 milliliters
C. 3 liters
D. 170 liters

6) 


Measuring Cup

A. 1 liter
B. 237 liters
C. 50 milliliters
D. 237 milliliters

7) 

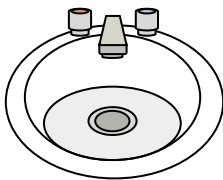
Shampoo in a bottle

A. 1 milliliter
B. 20 milliliters
C. 1.5 liters
D. 20 liters

8) 

Gas tank in a car

A. 60 liters
B. 15 milliliters
C. 70 milliliters
D. 3 liters

9) 

Water in bathroom sink

A. 10 milliliters
B. 2 liters
C. 500 milliliters
D. 7.5 liters

1. **A**
2. **B**
3. **C**
4. **D**
5. **D**
6. **D**
7. **C**
8. **A**
9. **D**