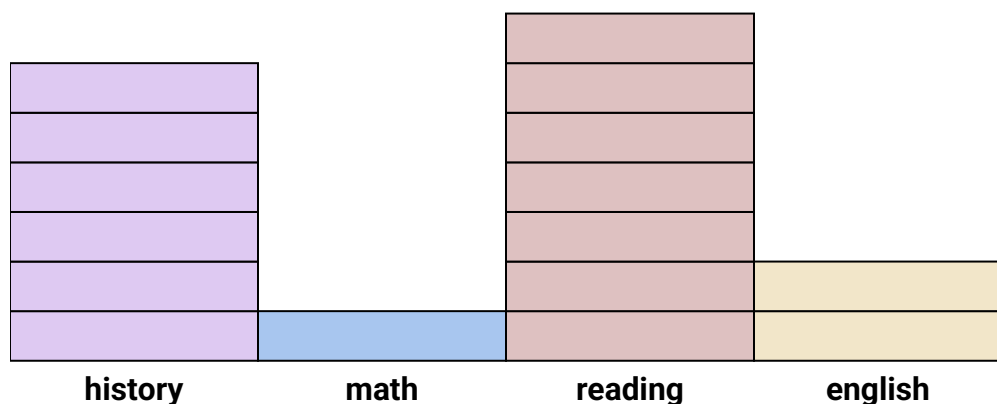





Solve each problem.

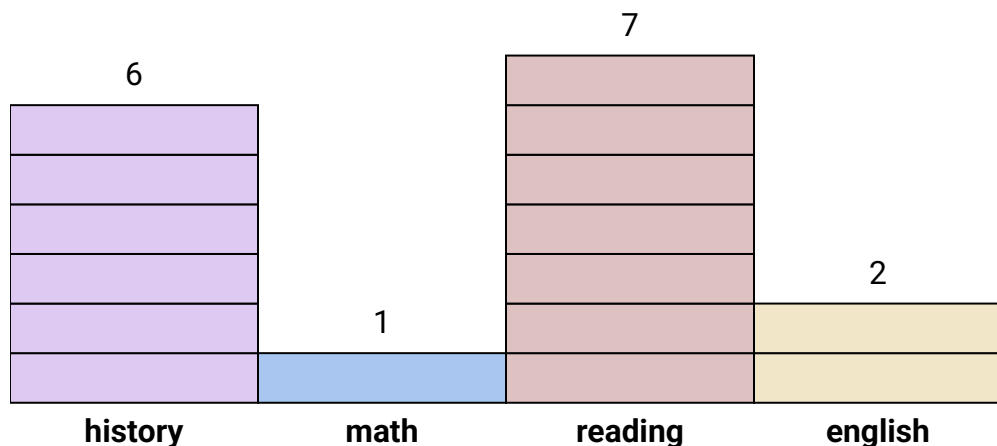
Each  = 2 votes**Answers**

1. \_\_\_\_\_
2. \_\_\_\_\_
3. \_\_\_\_\_
4. \_\_\_\_\_
5. \_\_\_\_\_
6. \_\_\_\_\_
7. \_\_\_\_\_
8. \_\_\_\_\_
9. \_\_\_\_\_
10. \_\_\_\_\_

- 1) How many more votes did history receive than english?
- 2) Which subject got the most votes?
- 3) Which subject got the fewest votes?
- 4) What is the total number of students who voted?
- 5) Did fewer students vote for Reading or for History?
- 6) Did more students vote for Math or for History?
- 7) Which subject received exactly 14 votes?
- 8) How many students voted for history?
- 9) What is the combined number of students who voted for English and who voted for Reading?
- 10) What is the difference in the number of students who voted for math and the number who voted for reading?



Solve each problem.

Each  = 2 votes**Answers**

1. 8
2. reading
3. math
4. 32
5. history
6. history
7. reading
8. 12
9. 18
10. 12

- 1) How many more votes did history receive than english?
- 2) Which subject got the most votes?
- 3) Which subject got the fewest votes?
- 4) What is the total number of students who voted?
- 5) Did fewer students vote for Reading or for History?
- 6) Did more students vote for Math or for History?
- 7) Which subject received exactly 14 votes?
- 8) How many students voted for history?
- 9) What is the combined number of students who voted for English and who voted for Reading?
- 10) What is the difference in the number of students who voted for math and the number who voted for reading?