



Determine which graph goes with which table.

1)

| Color  | People |
|--------|--------|
| blue   | 4,000  |
| green  | 3,000  |
| orange | 8,000  |
| yellow | 5,000  |
| red    | 2,000  |

2)

| Color  | People |
|--------|--------|
| blue   | 3,000  |
| green  | 8,000  |
| orange | 4,000  |
| yellow | 2,000  |
| red    | 5,000  |

3)

| Color  | People |
|--------|--------|
| blue   | 2,000  |
| green  | 5,000  |
| orange | 8,000  |
| yellow | 4,000  |
| red    | 3,000  |

4)

| Color  | People |
|--------|--------|
| blue   | 4,000  |
| green  | 8,000  |
| orange | 2,000  |
| yellow | 5,000  |
| red    | 3,000  |

5)

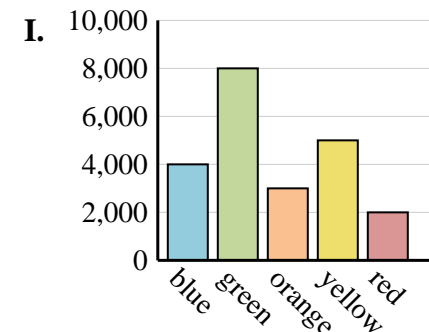
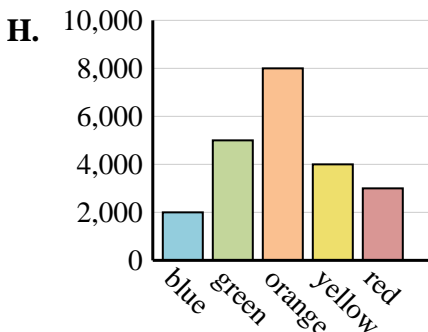
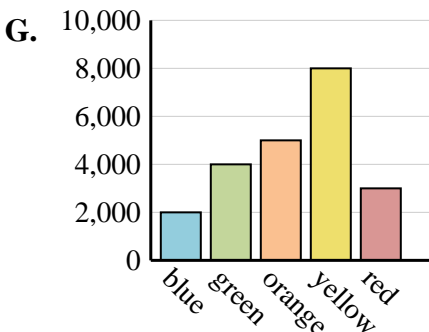
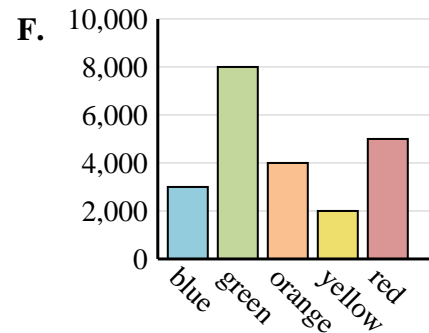
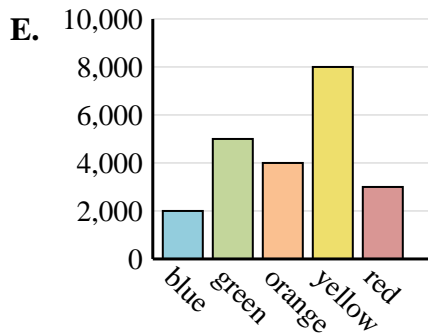
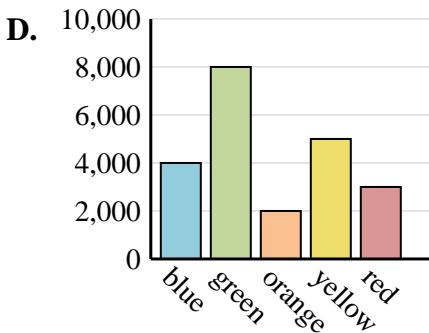
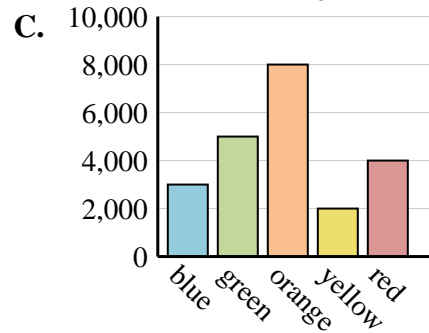
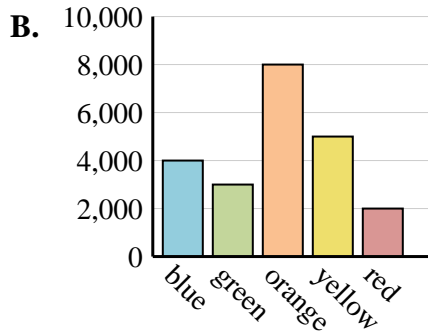
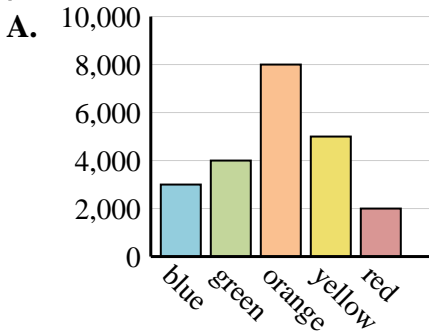
| Color  | People |
|--------|--------|
| blue   | 2,000  |
| green  | 4,000  |
| orange | 5,000  |
| yellow | 8,000  |
| red    | 3,000  |

6)

| Color  | People |
|--------|--------|
| blue   | 3,000  |
| green  | 5,000  |
| orange | 8,000  |
| yellow | 2,000  |
| red    | 4,000  |

**Answers**

1. \_\_\_\_\_
2. \_\_\_\_\_
3. \_\_\_\_\_
4. \_\_\_\_\_
5. \_\_\_\_\_
6. \_\_\_\_\_





Determine which graph goes with which table.

1)

| Color  | People |
|--------|--------|
| blue   | 4,000  |
| green  | 3,000  |
| orange | 8,000  |
| yellow | 5,000  |
| red    | 2,000  |

2)

| Color  | People |
|--------|--------|
| blue   | 3,000  |
| green  | 8,000  |
| orange | 4,000  |
| yellow | 2,000  |
| red    | 5,000  |

3)

| Color  | People |
|--------|--------|
| blue   | 2,000  |
| green  | 5,000  |
| orange | 8,000  |
| yellow | 4,000  |
| red    | 3,000  |

4)

| Color  | People |
|--------|--------|
| blue   | 4,000  |
| green  | 8,000  |
| orange | 2,000  |
| yellow | 5,000  |
| red    | 3,000  |

5)

| Color  | People |
|--------|--------|
| blue   | 2,000  |
| green  | 4,000  |
| orange | 5,000  |
| yellow | 8,000  |
| red    | 3,000  |

6)

| Color  | People |
|--------|--------|
| blue   | 3,000  |
| green  | 5,000  |
| orange | 8,000  |
| yellow | 2,000  |
| red    | 4,000  |

**Answers**

1. **B**
2. **F**
3. **H**
4. **D**
5. **G**
6. **C**

