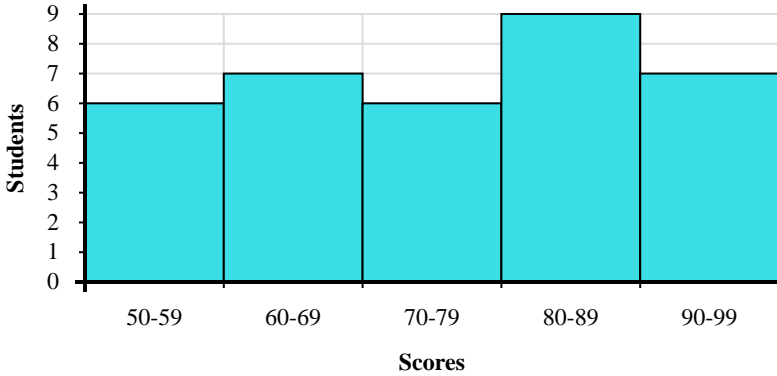




Use the histograms shown to answer each question.



- 1) How many students received between 0 and 2 gifts?
- 2) How many students are represented in this histogram?
- 3) If a student received 6 gifts which bar would they be added to?
- 4) Most students received between _____ and _____ gifts.



- 5) How many students are represented in this histogram?
- 6) How many students scored between a 50 and 60?
- 7) Most students scored between a _____ and _____.
- 8) If a student scored a 54 which bar would they be added to?

Answers

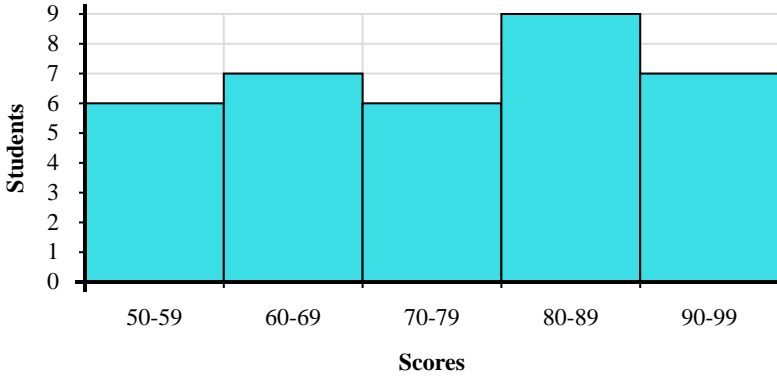
1. _____
2. _____
3. _____
4. _____
5. _____
6. _____
7. _____
8. _____



Use the histograms shown to answer each question.



- 1) How many students received between 0 and 2 gifts?
- 2) How many students are represented in this histogram?
- 3) If a student received 6 gifts which bar would they be added to?
- 4) Most students received between _____ and _____ gifts.



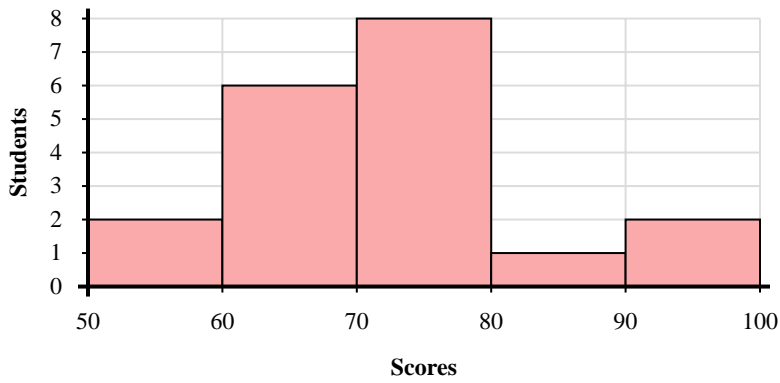
- 5) How many students are represented in this histogram?
- 6) How many students scored between a 50 and 60?
- 7) Most students scored between a _____ and _____.
- 8) If a student scored a 54 which bar would they be added to?

Answers

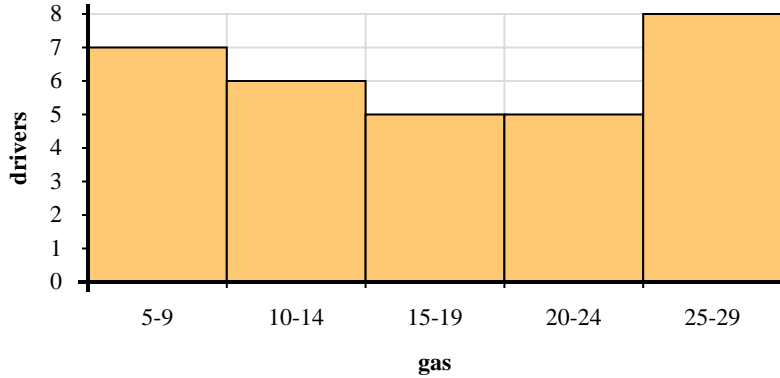
1. 2
2. 15
3. 4
4. 8 10
5. 35
6. 6
7. 80 90
8. 1



Use the histograms shown to answer each question.



- 1) If a student scored a 94 which bar would they be added to?
- 2) How many students are represented in this histogram?
- 3) How many students scored between a 60 and 70?
- 4) Most students scored between a _____ and _____.



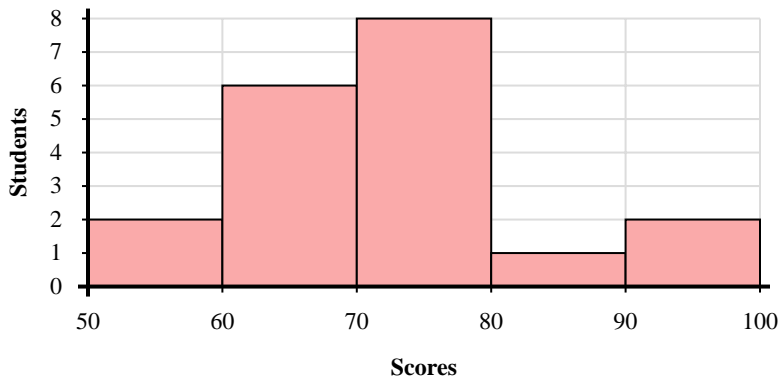
- 5) Most drivers purchased between _____ and _____ gallons.
- 6) How many drivers are represented in this histogram?
- 7) If a driver purchased 17 gallons which bar would they be added to?
- 8) How many drivers purchased between 5 and 10 gallons?

Answers

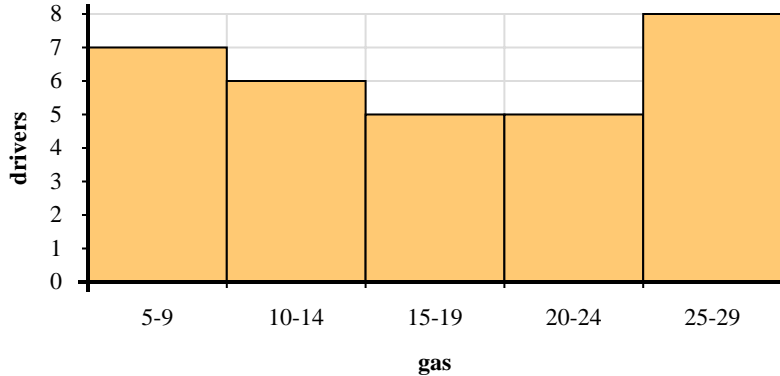
1. _____
2. _____
3. _____
4. _____
5. _____
6. _____
7. _____
8. _____



Use the histograms shown to answer each question.



- 1) If a student scored a 94 which bar would they be added to?
- 2) How many students are represented in this histogram?
- 3) How many students scored between a 60 and 70?
- 4) Most students scored between a _____ and _____.



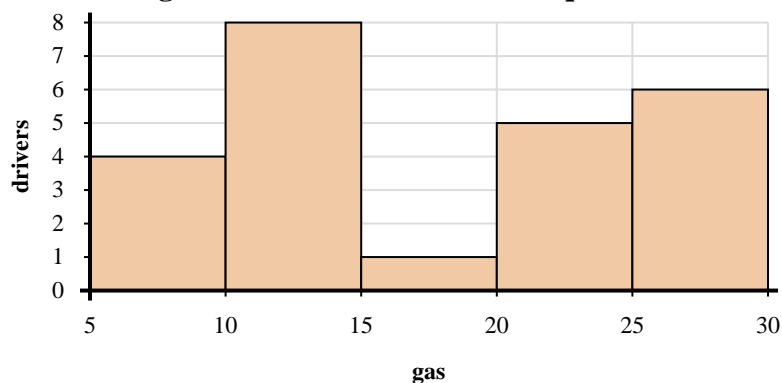
- 5) Most drivers purchased between _____ and _____ gallons.
- 6) How many drivers are represented in this histogram?
- 7) If a driver purchased 17 gallons which bar would they be added to?
- 8) How many drivers purchased between 5 and 10 gallons?

Answers

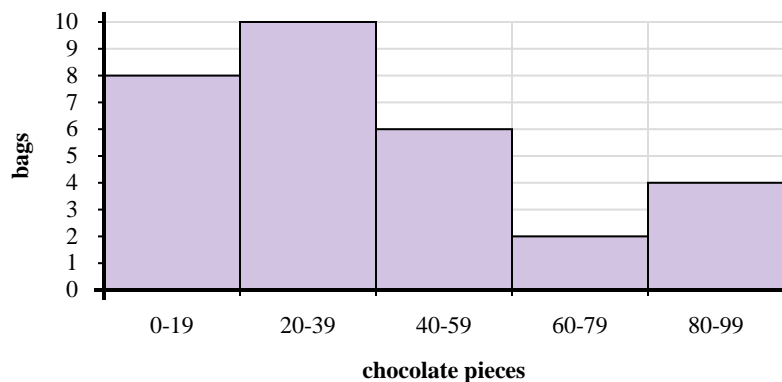
1. 5
2. 19
3. 6
4. 70 80
5. 25 30
6. 31
7. 3
8. 7



Use the histograms shown to answer each question.



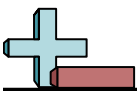
- 1) Most drivers purchased between _____ and _____ gallons.
- 2) How many drivers purchased between 10 and 15 gallons?
- 3) If a driver purchased 12 gallons which bar would they be added to?
- 4) How many drivers are represented in this histogram?



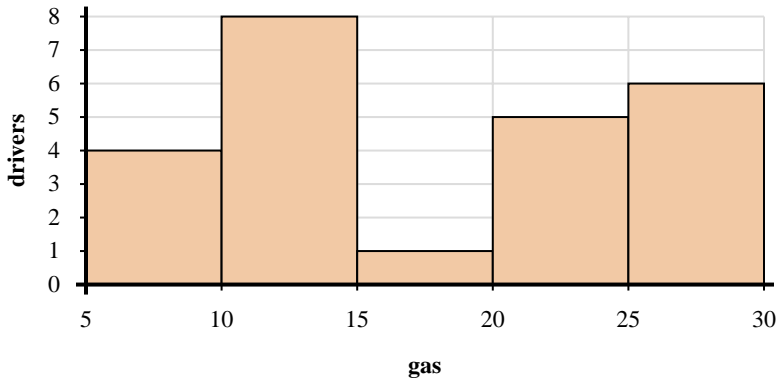
- 5) How many bags of trail mix are represented in this histogram?
- 6) Most bags had between _____ and _____ pieces of chocolate.
- 7) If a bag had 49 pieces of chocolate in it, which bar would it be added to?
- 8) How many bags had between 60 and 80 chocolate pieces?

Answers

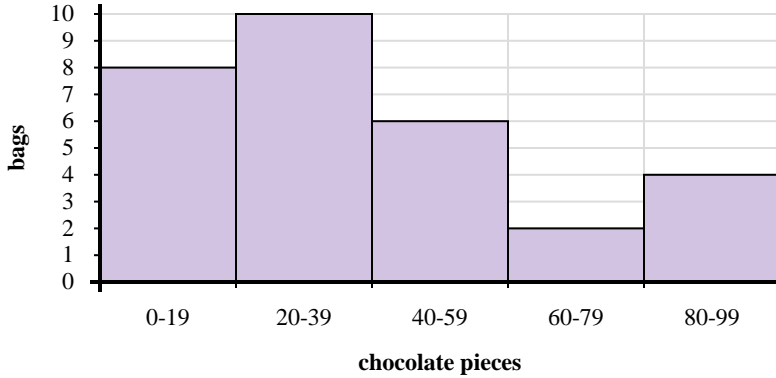
1. _____
2. _____
3. _____
4. _____
5. _____
6. _____
7. _____
8. _____



Use the histograms shown to answer each question.



- Most drivers purchased between _____ and _____ gallons.
- How many drivers purchased between 10 and 15 gallons?
- If a driver purchased 12 gallons which bar would they be added to?
- How many drivers are represented in this histogram?



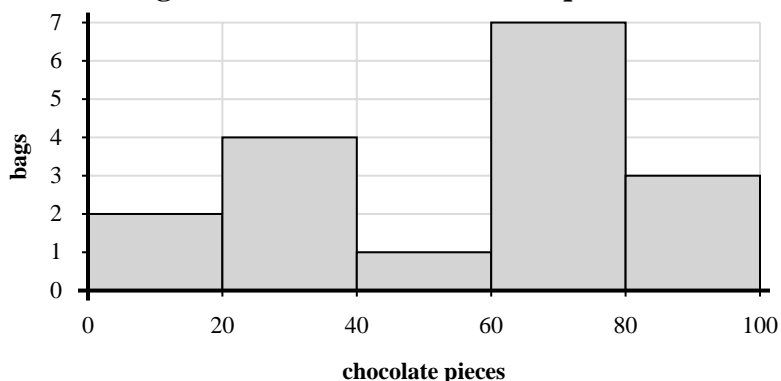
- How many bags of trail mix are represented in this histogram?
- Most bags had between _____ and _____ pieces of chocolate.
- If a bag had 49 pieces of chocolate in it, which bar would it be added to?
- How many bags had between 60 and 80 chocolate pieces?

Answers

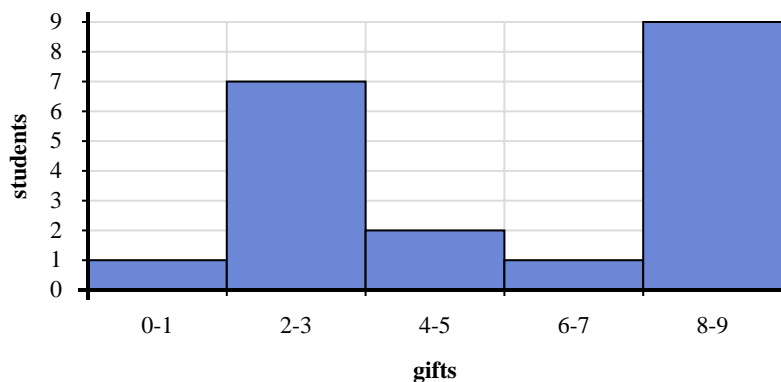
- 10 15
- 8
- 2
- 24
- 30
- 20 40
- 3
- 2



Use the histograms shown to answer each question.



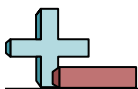
- 1) How many bags had between 40 and 60 chocolate pieces?
- 2) How many bags of trail mix are represented in this histogram?
- 3) If a bag had 69 pieces of chocolate in it, which bar would it be added to?
- 4) Most bags had between _____ and _____ pieces of chocolate.



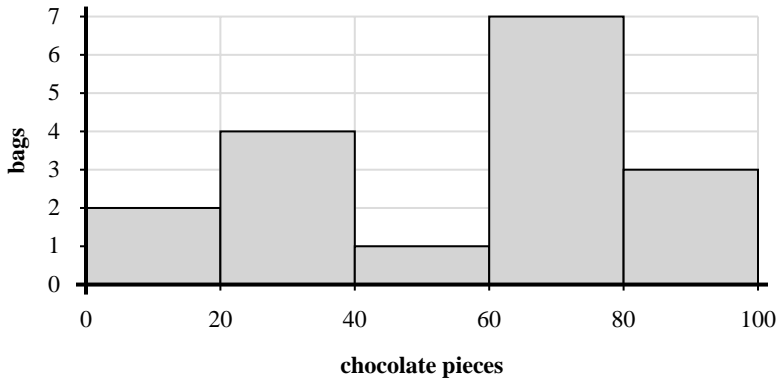
- 5) If a student received 4 gifts which bar would they be added to?
- 6) How many students received between 0 and 2 gifts?
- 7) How many students are represented in this histogram?
- 8) Most students received between _____ and _____ gifts.

Answers

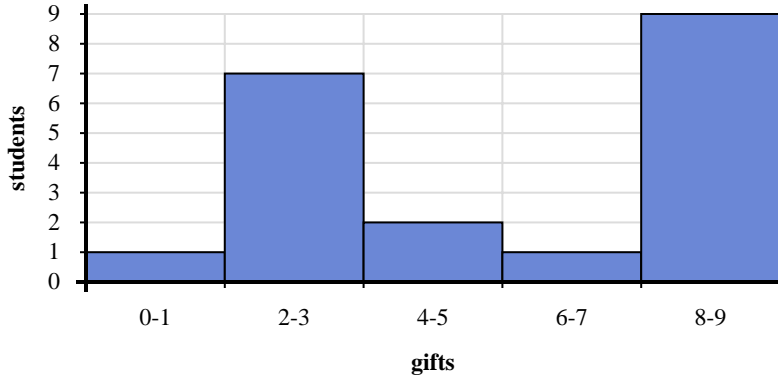
1. _____
2. _____
3. _____
4. _____
5. _____
6. _____
7. _____
8. _____



Use the histograms shown to answer each question.



- How many bags had between 40 and 60 chocolate pieces?
- How many bags of trail mix are represented in this histogram?
- If a bag had 69 pieces of chocolate in it, which bar would it be added to?
- Most bags had between ____ and ____ pieces of chocolate.



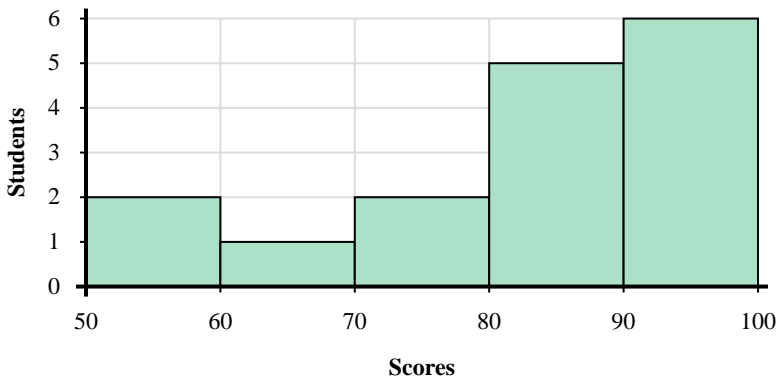
- If a student received 4 gifts which bar would they be added to?
- How many students received between 0 and 2 gifts?
- How many students are represented in this histogram?
- Most students received between ____ and ____ gifts.

Answers

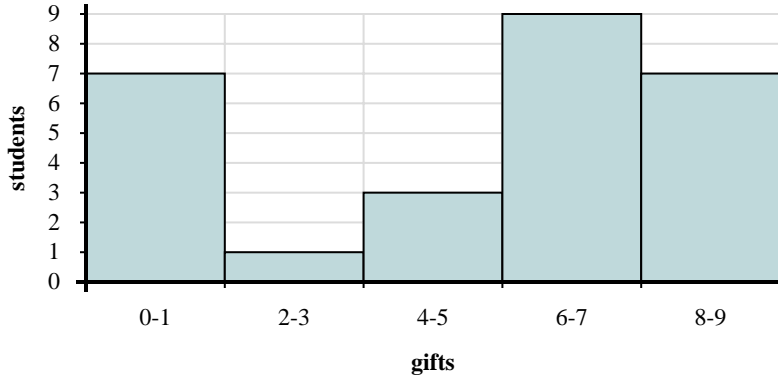
- 1
- 17
- 4
- 60 80
- 3
- 1
- 20
- 8 10



Use the histograms shown to answer each question.



- 1) How many students scored between a 90 and 100?
- 2) Most students scored between a _____ and _____.
- 3) If a student scored a 54 which bar would they be added to?
- 4) How many students are represented in this histogram?



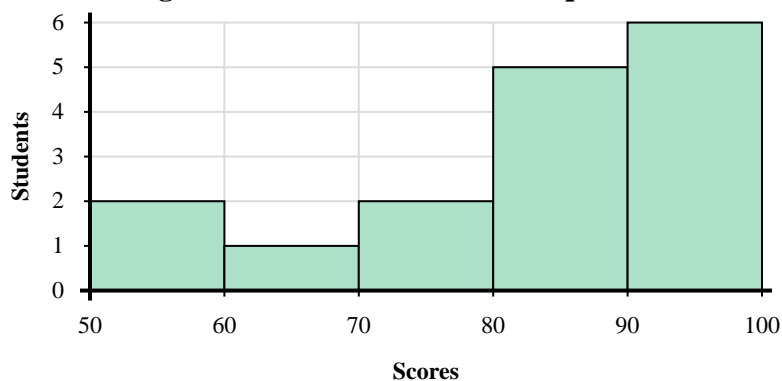
- 5) Most students received between _____ and _____ gifts.
- 6) How many students are represented in this histogram?
- 7) If a student received 0 gifts which bar would they be added to?
- 8) How many students received between 6 and 8 gifts?

Answers

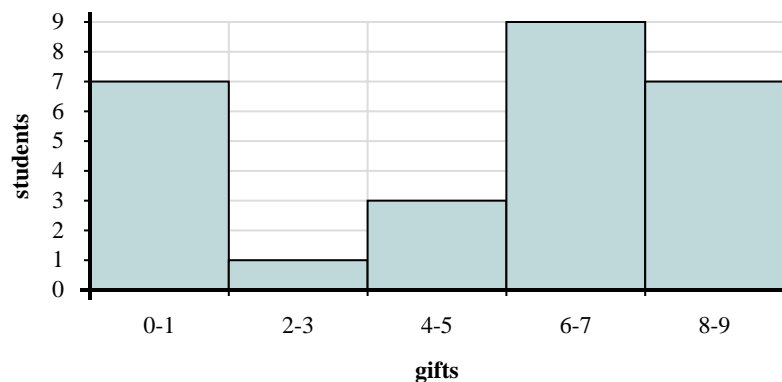
1. _____
2. _____
3. _____
4. _____
5. _____
6. _____
7. _____
8. _____



Use the histograms shown to answer each question.



- How many students scored between a 90 and 100?
- Most students scored between a _____ and _____.
- If a student scored a 54 which bar would they be added to?
- How many students are represented in this histogram?



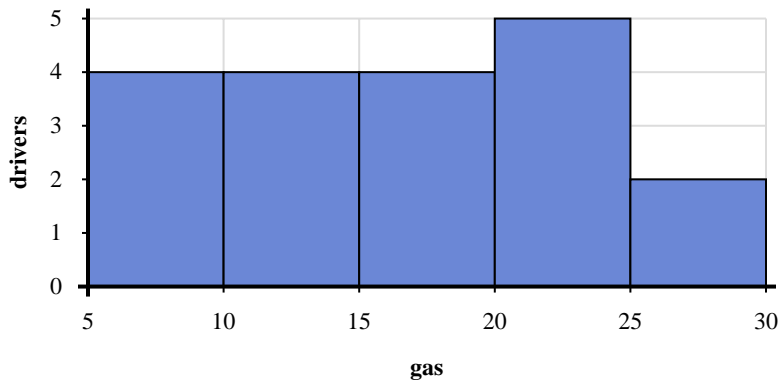
- Most students received between _____ and _____ gifts.
- How many students are represented in this histogram?
- If a student received 0 gifts which bar would they be added to?
- How many students received between 6 and 8 gifts?

Answers

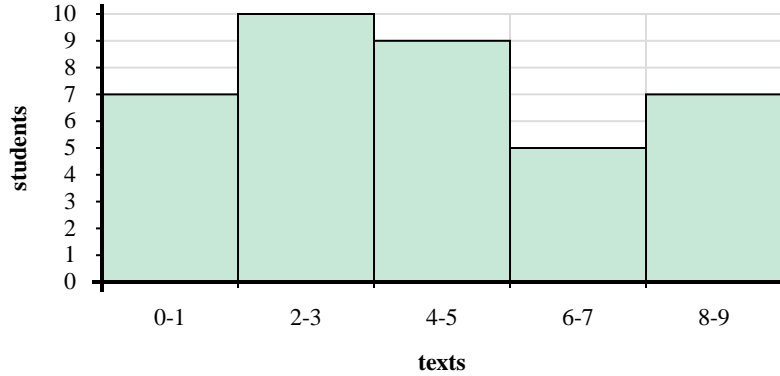
- 6
- 90 100
- 1
- 16
- 6 8
- 27
- 1
- 9



Use the histograms shown to answer each question.



- 1) How many drivers purchased between 20 and 25 gallons?
- 2) How many drivers are represented in this histogram?
- 3) If a driver purchased 22 gallons which bar would they be added to?
- 4) Most drivers purchased between _____ and _____ gallons.



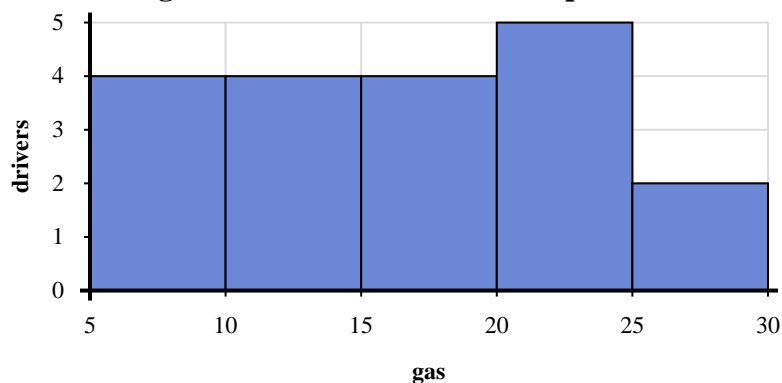
- 5) How many students are represented in this histogram?
- 6) Most students sent between _____ and _____ texts.
- 7) How many students sent between 6 and 8 texts?
- 8) If a student sent 0 texts which bar would they be added to?

Answers

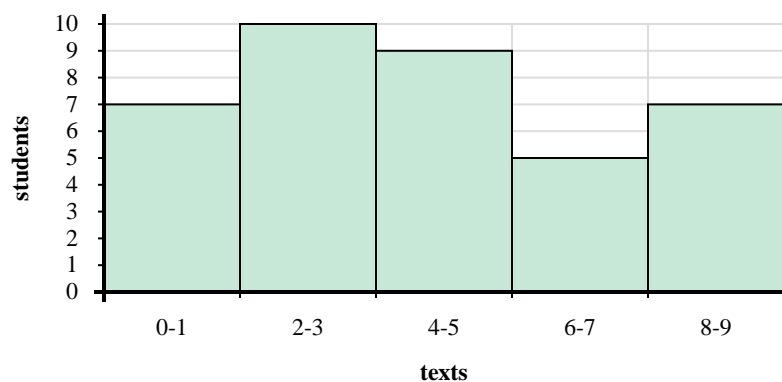
1. _____
2. _____
3. _____
4. _____
5. _____
6. _____
7. _____
8. _____



Use the histograms shown to answer each question.



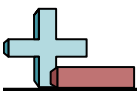
- How many drivers purchased between 20 and 25 gallons?
- How many drivers are represented in this histogram?
- If a driver purchased 22 gallons which bar would they be added to?
- Most drivers purchased between _____ and _____ gallons.



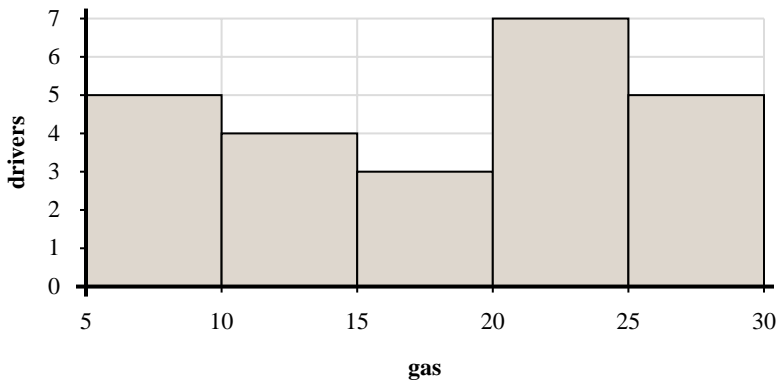
- How many students are represented in this histogram?
- Most students sent between _____ and _____ texts.
- How many students sent between 6 and 8 texts?
- If a student sent 0 texts which bar would they be added to?

Answers

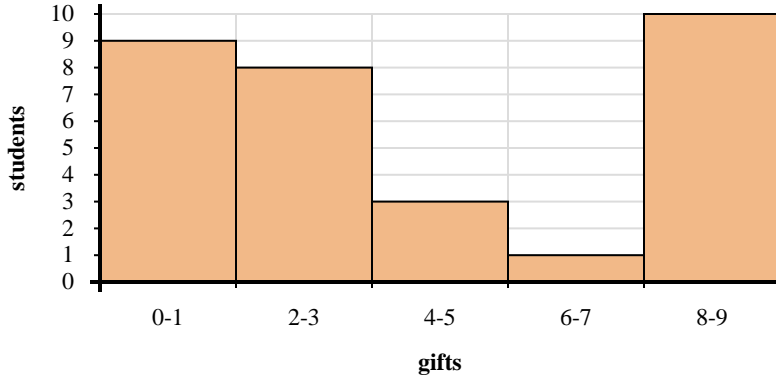
- 5
- 19
- 4
- 20 25
- 38
- 2 4
- 5
- 1



Use the histograms shown to answer each question.



- 1) Most drivers purchased between _____ and _____ gallons.
- 2) How many drivers purchased between 15 and 20 gallons?
- 3) How many drivers are represented in this histogram?
- 4) If a driver purchased 27 gallons which bar would they be added to?



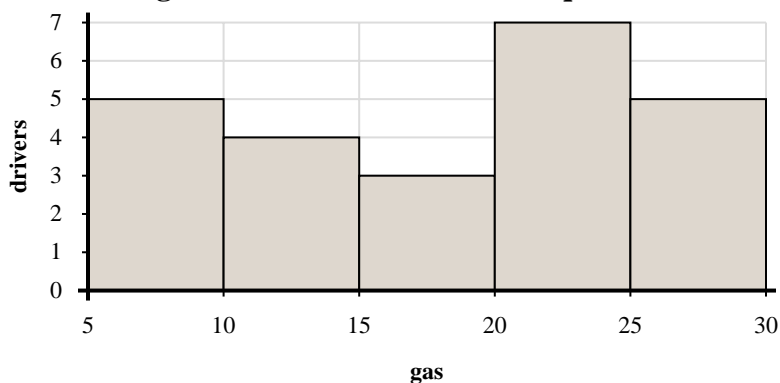
- 5) If a student received 0 gifts which bar would they be added to?
- 6) Most students received between _____ and _____ gifts.
- 7) How many students received between 0 and 2 gifts?
- 8) How many students are represented in this histogram?

Answers

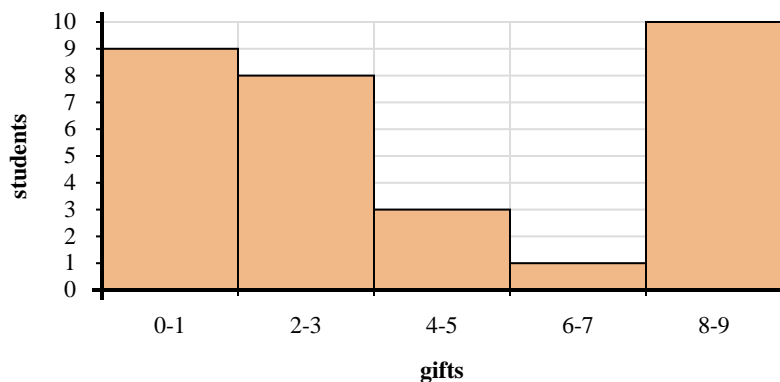
1. _____
2. _____
3. _____
4. _____
5. _____
6. _____
7. _____
8. _____



Use the histograms shown to answer each question.



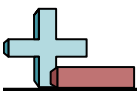
- 1) Most drivers purchased between _____ and _____ gallons.
- 2) How many drivers purchased between 15 and 20 gallons?
- 3) How many drivers are represented in this histogram?
- 4) If a driver purchased 27 gallons which bar would they be added to?



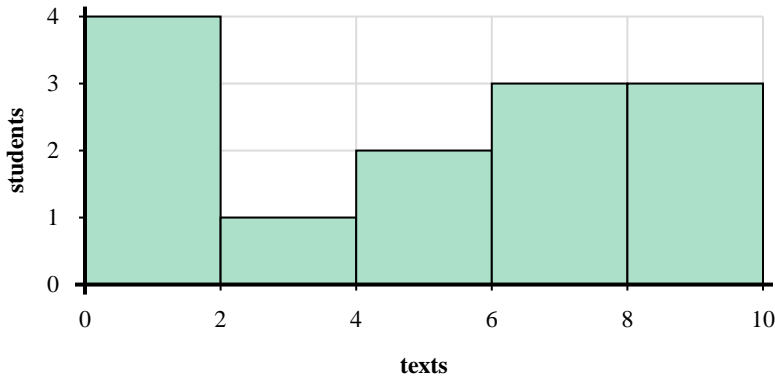
- 5) If a student received 0 gifts which bar would they be added to?
- 6) Most students received between _____ and _____ gifts.
- 7) How many students received between 0 and 2 gifts?
- 8) How many students are represented in this histogram?

Answers

1. 20 25
2. 3
3. 24
4. 5
5. 1
6. 8 10
7. 9
8. 31



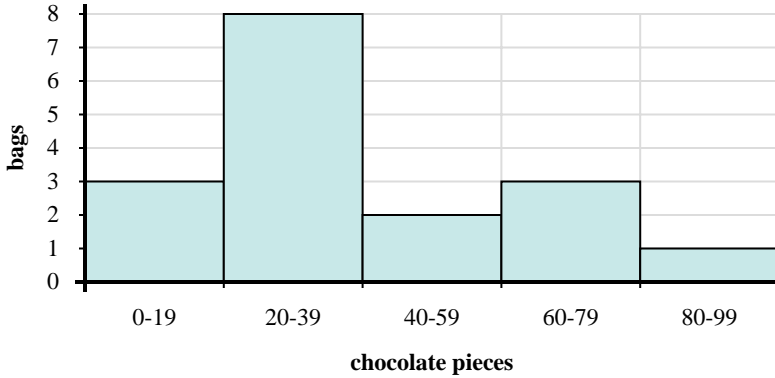
Use the histograms shown to answer each question.



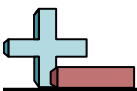
- 1) How many students are represented in this histogram?
- 2) Most students sent between _____ and _____ texts.
- 3) How many students sent between 8 and 10 texts?
- 4) If a student sent 6 texts which bar would they be added to?

Answers

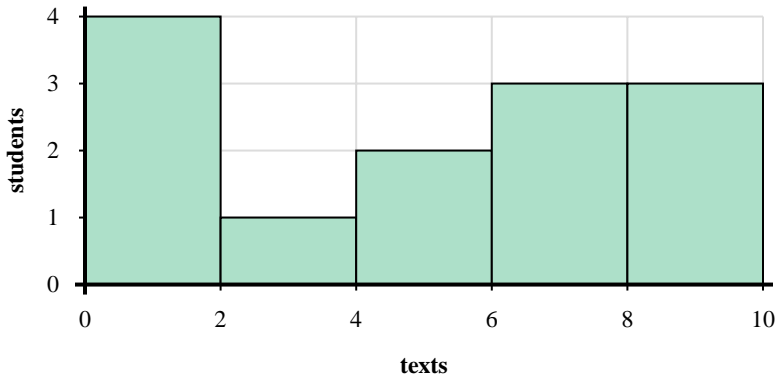
1. _____
2. _____
3. _____
4. _____
5. _____
6. _____
7. _____
8. _____



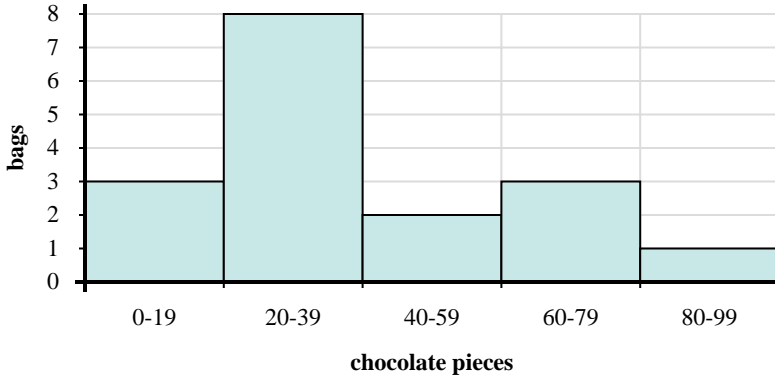
- 5) Most bags had between _____ and _____ pieces of chocolate.
- 6) How many bags had between 40 and 60 chocolate pieces?
- 7) If a bag had 69 pieces of chocolate in it, which bar would it be added to?
- 8) How many bags of trail mix are represented in this histogram?



Use the histograms shown to answer each question.



- 1) How many students are represented in this histogram?
- 2) Most students sent between _____ and _____ texts.
- 3) How many students sent between 8 and 10 texts?
- 4) If a student sent 6 texts which bar would they be added to?



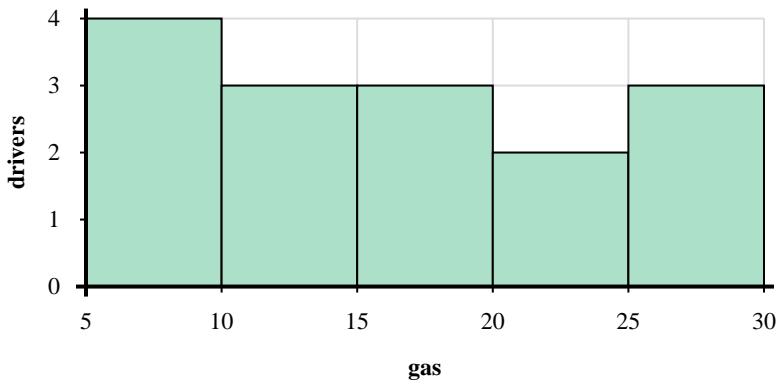
- 5) Most bags had between _____ and _____ pieces of chocolate.
- 6) How many bags had between 40 and 60 chocolate pieces?
- 7) If a bag had 69 pieces of chocolate in it, which bar would it be added to?
- 8) How many bags of trail mix are represented in this histogram?

Answers

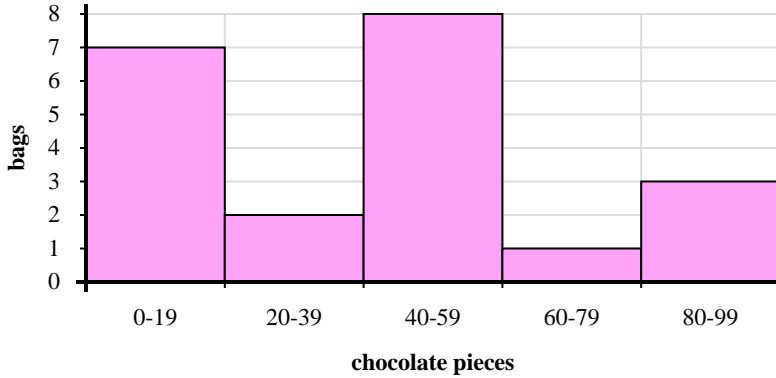
1. 13
2. 0 2
3. 3
4. 4
5. 20 40
6. 2
7. 4
8. 17



Use the histograms shown to answer each question.



- 1) Most drivers purchased between _____ and _____ gallons.
- 2) How many drivers purchased between 20 and 25 gallons?
- 3) How many drivers are represented in this histogram?
- 4) If a driver purchased 27 gallons which bar would they be added to?



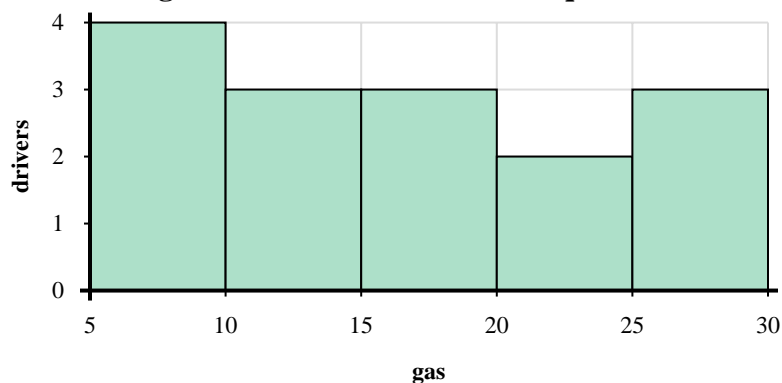
- 5) How many bags had between 20 and 40 chocolate pieces?
- 6) If a bag had 9 pieces of chocolate in it, which bar would it be added to?
- 7) How many bags of trail mix are represented in this histogram?
- 8) Most bags had between _____ and _____ pieces of chocolate.

Answers

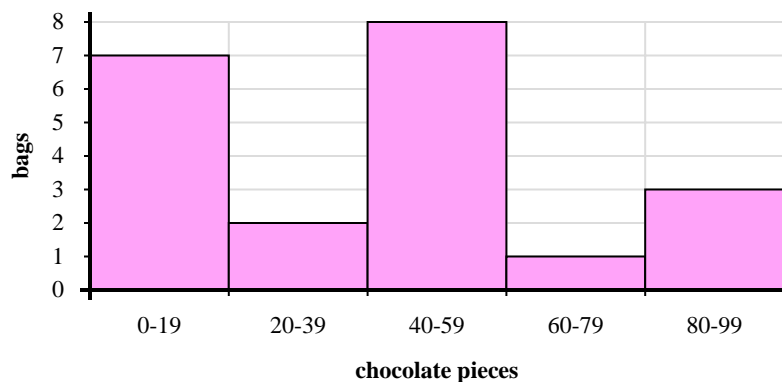
1. _____
2. _____
3. _____
4. _____
5. _____
6. _____
7. _____
8. _____



Use the histograms shown to answer each question.



- Most drivers purchased between _____ and _____ gallons.
- How many drivers purchased between 20 and 25 gallons?
- How many drivers are represented in this histogram?
- If a driver purchased 27 gallons which bar would they be added to?



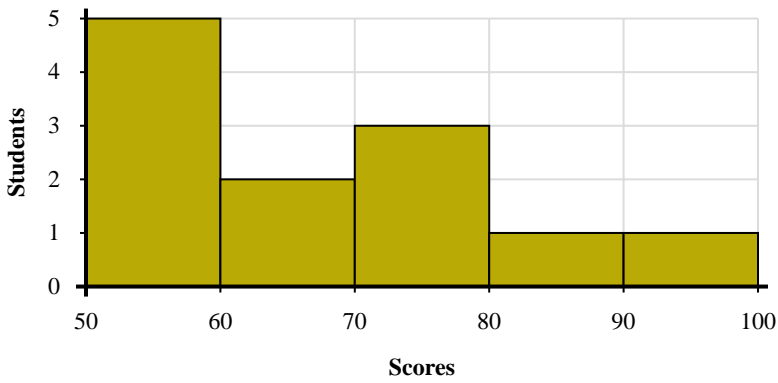
- How many bags had between 20 and 40 chocolate pieces?
- If a bag had 9 pieces of chocolate in it, which bar would it be added to?
- How many bags of trail mix are represented in this histogram?
- Most bags had between _____ and _____ pieces of chocolate.

Answers

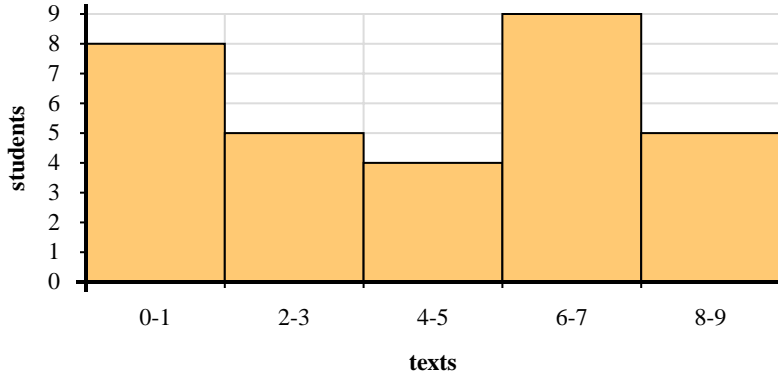
- 5 10
- 2
- 15
- 5
- 2
- 1
- 21
- 40 60



Use the histograms shown to answer each question.



- 1) How many students are represented in this histogram?
- 2) How many students scored between a 50 and 60?
- 3) Most students scored between a _____ and _____.
- 4) If a student scored a 54 which bar would they be added to?



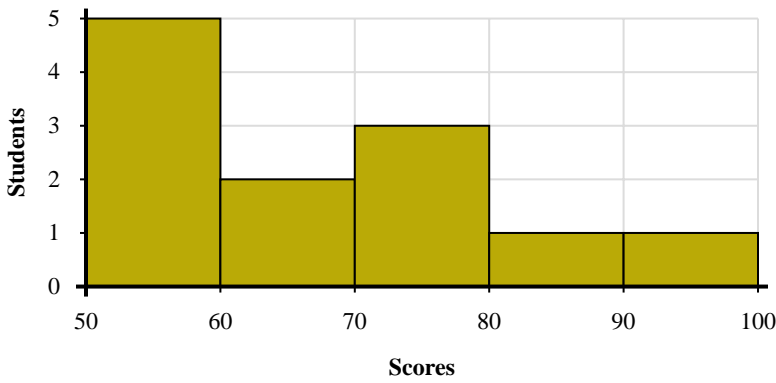
- 5) How many students sent between 6 and 8 texts?
- 6) How many students are represented in this histogram?
- 7) Most students sent between _____ and _____ texts.
- 8) If a student sent 6 texts which bar would they be added to?

Answers

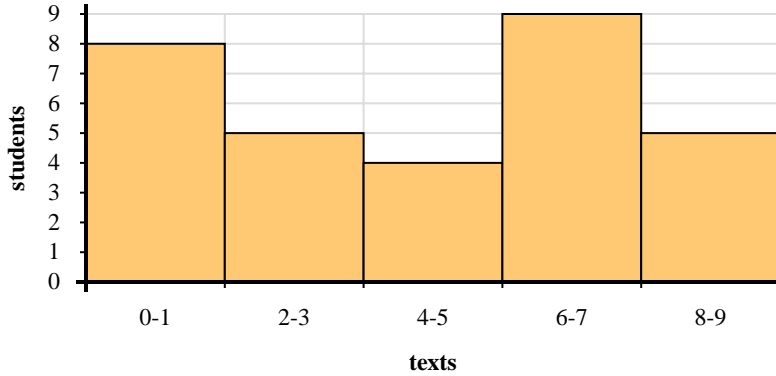
1. _____
2. _____
3. _____
4. _____
5. _____
6. _____
7. _____
8. _____



Use the histograms shown to answer each question.



- 1) How many students are represented in this histogram?
- 2) How many students scored between a 50 and 60?
- 3) Most students scored between a _____ and _____.
- 4) If a student scored a 54 which bar would they be added to?



- 5) How many students sent between 6 and 8 texts?
- 6) How many students are represented in this histogram?
- 7) Most students sent between _____ and _____ texts.
- 8) If a student sent 6 texts which bar would they be added to?

Answers

1. 12
2. 5
3. 50 60
4. 1
5. 9
6. 31
7. 6 8
8. 4