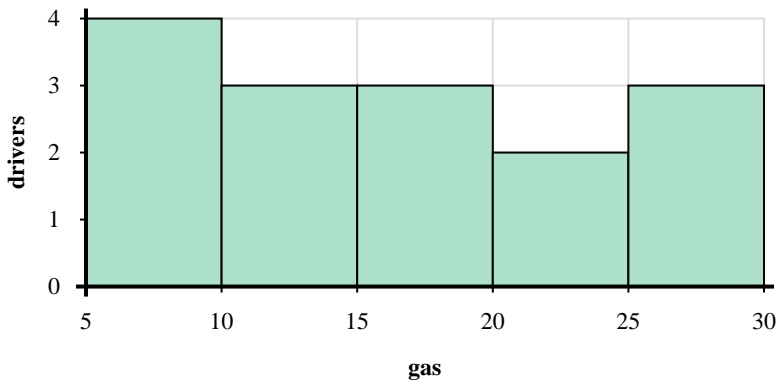
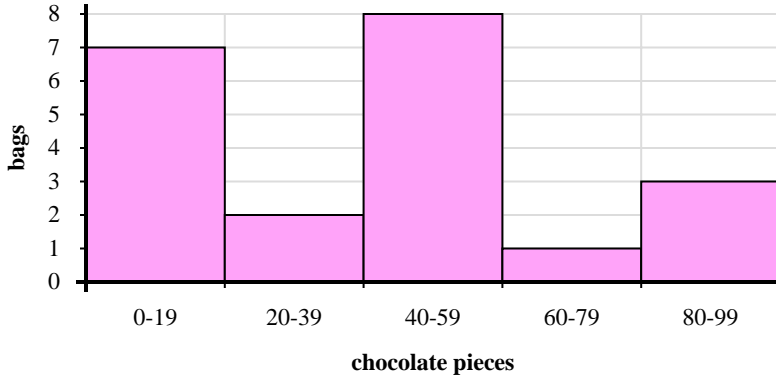




Use the histograms shown to answer each question.



- 1) Most drivers purchased between \_\_\_\_\_ and \_\_\_\_\_ gallons.
- 2) How many drivers purchased between 20 and 25 gallons?
- 3) How many drivers are represented in this histogram?
- 4) If a driver purchased 27 gallons which bar would they be added to?



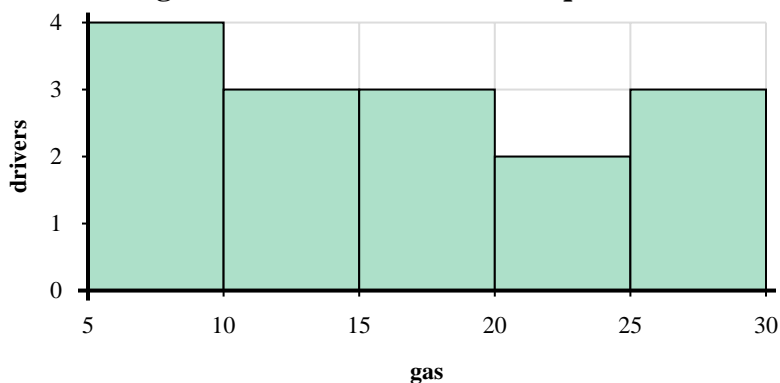
- 5) How many bags had between 20 and 40 chocolate pieces?
- 6) If a bag had 9 pieces of chocolate in it, which bar would it be added to?
- 7) How many bags of trail mix are represented in this histogram?
- 8) Most bags had between \_\_\_\_\_ and \_\_\_\_\_ pieces of chocolate.

Answers

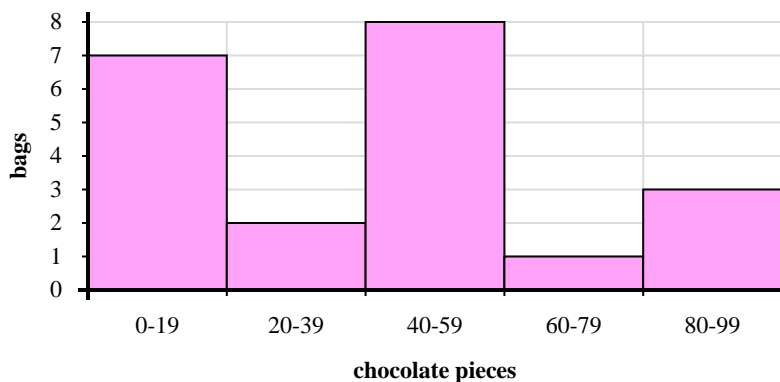
1. \_\_\_\_\_
2. \_\_\_\_\_
3. \_\_\_\_\_
4. \_\_\_\_\_
5. \_\_\_\_\_
6. \_\_\_\_\_
7. \_\_\_\_\_
8. \_\_\_\_\_



Use the histograms shown to answer each question.



- Most drivers purchased between \_\_\_\_\_ and \_\_\_\_\_ gallons.
- How many drivers purchased between 20 and 25 gallons?
- How many drivers are represented in this histogram?
- If a driver purchased 27 gallons which bar would they be added to?



- How many bags had between 20 and 40 chocolate pieces?
- If a bag had 9 pieces of chocolate in it, which bar would it be added to?
- How many bags of trail mix are represented in this histogram?
- Most bags had between \_\_\_\_\_ and \_\_\_\_\_ pieces of chocolate.

**Answers**

- 5    10
- 2
- 15
- 5
- 2
- 1
- 21
- 40    60