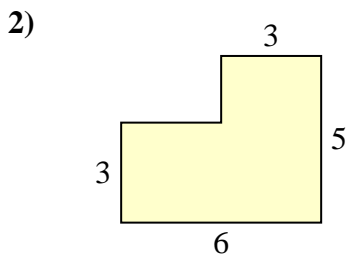
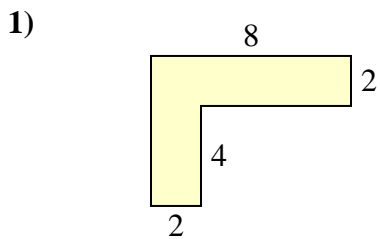




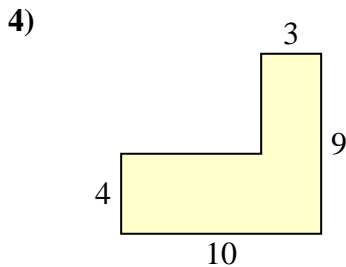
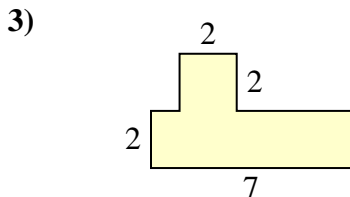
Find the total area of each shape. Measurement is in millimeters (mm). Not to scale.

Answers



1. \_\_\_\_\_

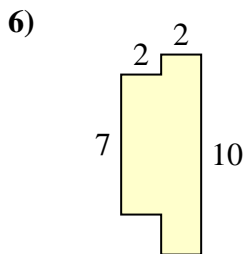
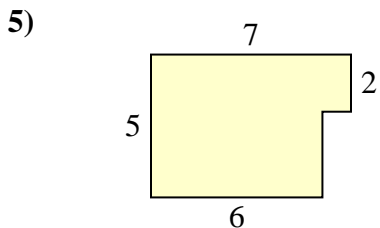
2. \_\_\_\_\_



3. \_\_\_\_\_

4. \_\_\_\_\_

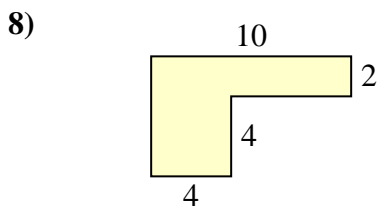
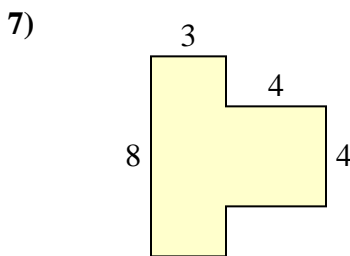
5. \_\_\_\_\_



6. \_\_\_\_\_

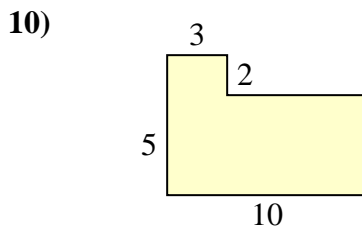
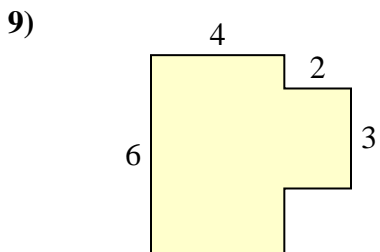
7. \_\_\_\_\_

8. \_\_\_\_\_



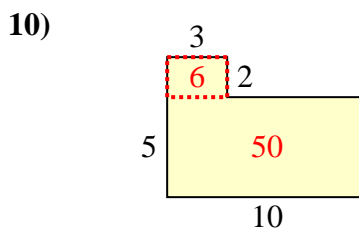
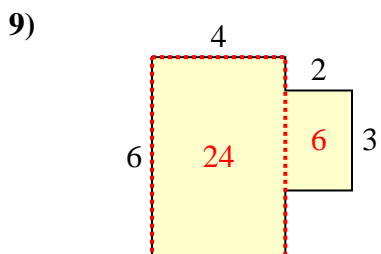
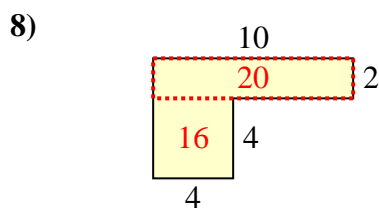
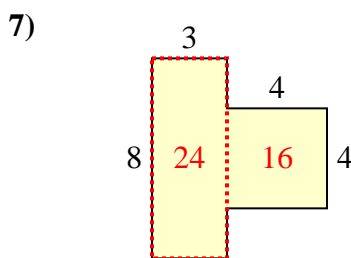
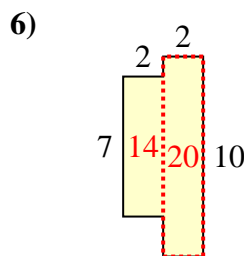
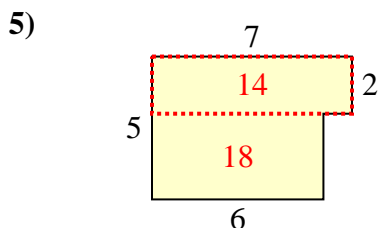
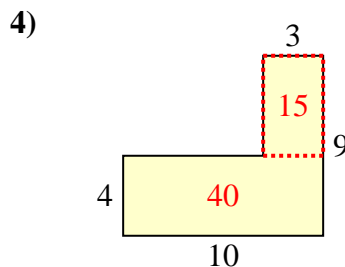
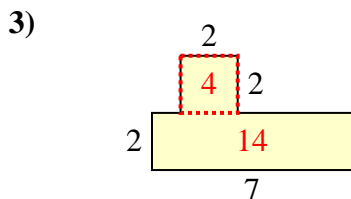
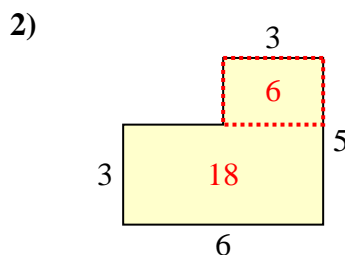
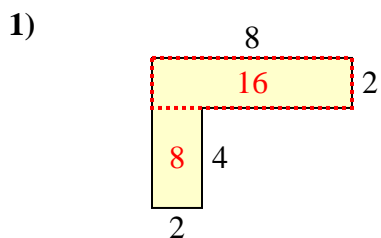
9. \_\_\_\_\_

10. \_\_\_\_\_





Find the total area of each shape. Measurement is in millimeters (mm). Not to scale.



Answers

1. 24 mm<sup>2</sup>
2. 24 mm<sup>2</sup>
3. 18 mm<sup>2</sup>
4. 55 mm<sup>2</sup>
5. 32 mm<sup>2</sup>
6. 34 mm<sup>2</sup>
7. 40 mm<sup>2</sup>
8. 36 mm<sup>2</sup>
9. 30 mm<sup>2</sup>
10. 56 mm<sup>2</sup>