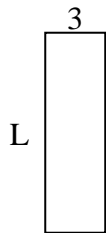


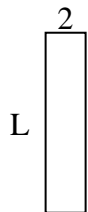


Determine the value of 'L'.

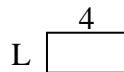
1) Area = $30u^2$



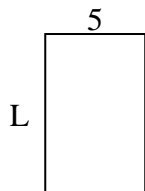
2) Area = $18u^2$



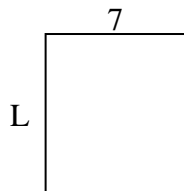
3) Area = $8u^2$



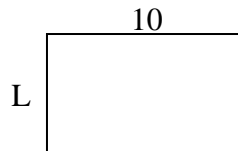
4) Area = $40u^2$



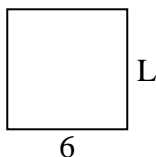
5) Area = $56u^2$



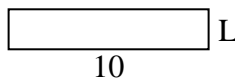
6) Area = $60u^2$



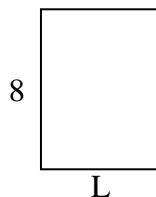
7) Area = $36u^2$



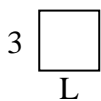
8) Area = $20u^2$



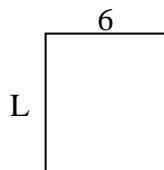
9) Area = $48u^2$



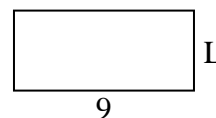
10) Area = $9u^2$



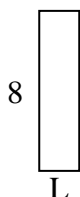
11) Area = $42u^2$



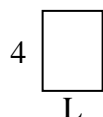
12) Area = $36u^2$



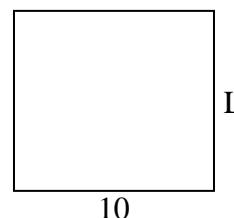
13) Area = $16u^2$



14) Area = $12u^2$



15) Area = $90u^2$



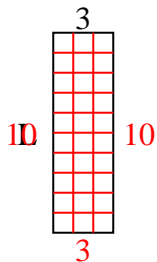
Answers

1. _____
2. _____
3. _____
4. _____
5. _____
6. _____
7. _____
8. _____
9. _____
10. _____
11. _____
12. _____
13. _____
14. _____
15. _____

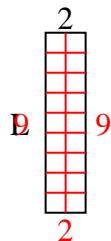


Determine the value of 'L'.

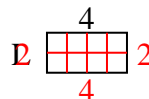
1) Area = $30u^2$



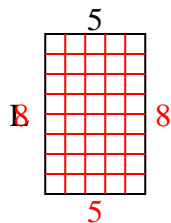
2) Area = $18u^2$



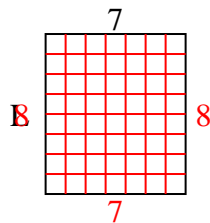
3) Area = $8u^2$



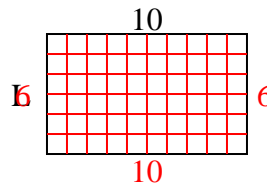
4) Area = $40u^2$



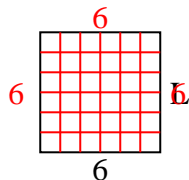
5) Area = $56u^2$



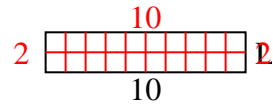
6) Area = $60u^2$



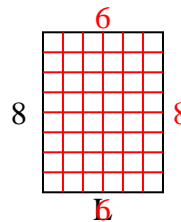
7) Area = $36u^2$



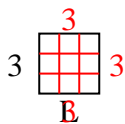
8) Area = $20u^2$



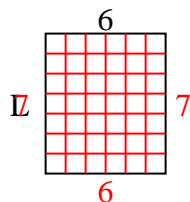
9) Area = $48u^2$



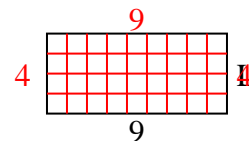
10) Area = $9u^2$



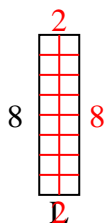
11) Area = $42u^2$



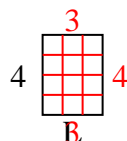
12) Area = $36u^2$



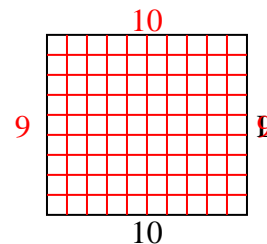
13) Area = $16u^2$



14) Area = $12u^2$



15) Area = $90u^2$



Answers

1. 10

2. 9

3. 2

4. 8

5. 8

6. 6

7. 6

8. 2

9. 6

10. 3

11. 7

12. 4

13. 2

14. 3

15. 9