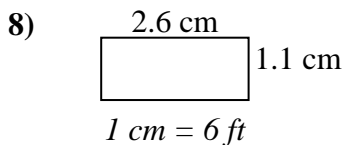
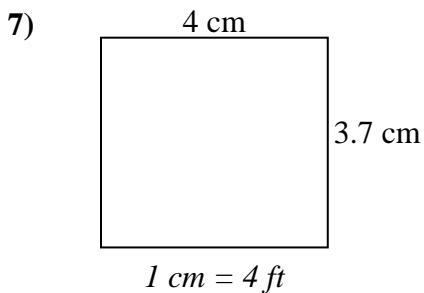
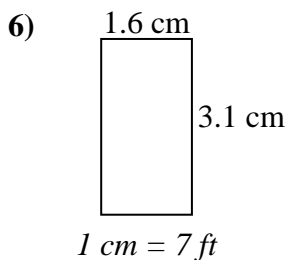
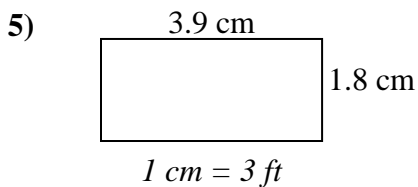
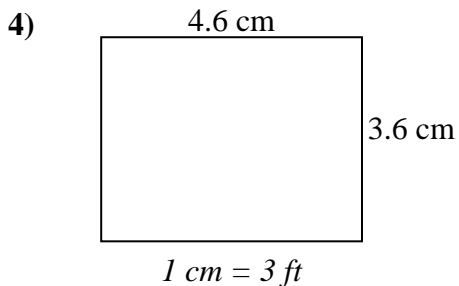
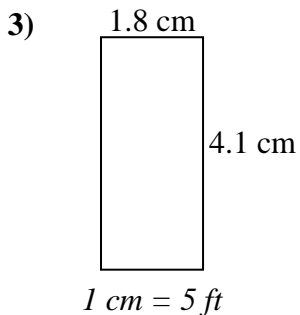
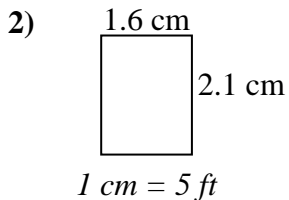
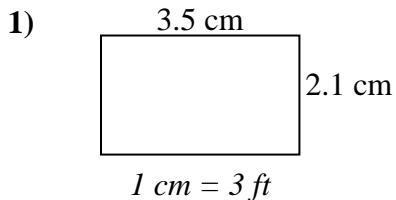




Determine the actual width, height and area of each scale rectangle.

Round the area to the nearest whole number.



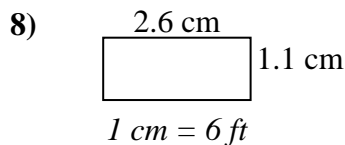
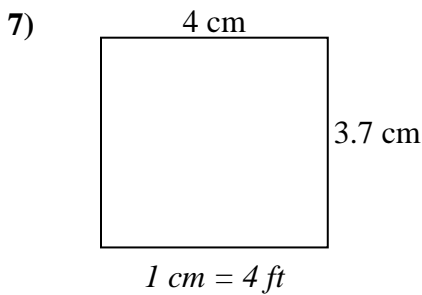
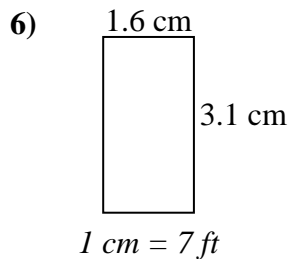
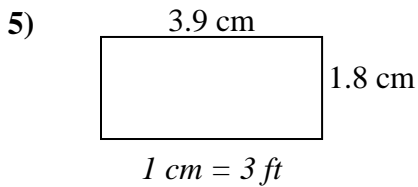
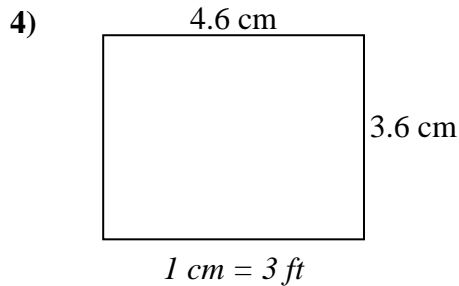
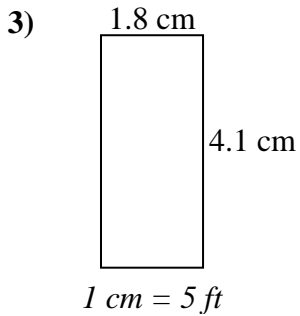
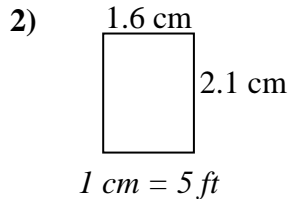
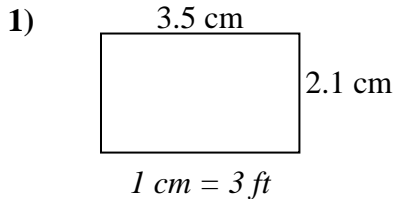
Answers

1. \_\_\_\_\_
2. \_\_\_\_\_
3. \_\_\_\_\_
4. \_\_\_\_\_
5. \_\_\_\_\_
6. \_\_\_\_\_
7. \_\_\_\_\_
8. \_\_\_\_\_



Determine the actual width, height and area of each scale rectangle.

Round the area to the nearest whole number.



Answers

1. 10.5   6.3   66
2. 8   10.5   84
3. 9   20.5   185
4. 13.8   10.8   149
5. 11.7   5.4   63
6. 11.2   21.7   243
7. 16   14.8   237
8. 15.6   6.6   103