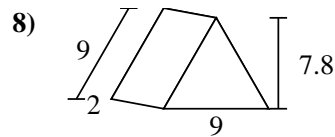
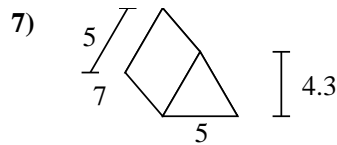
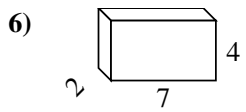
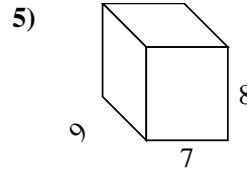
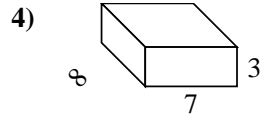
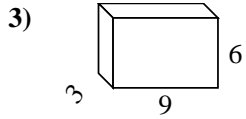
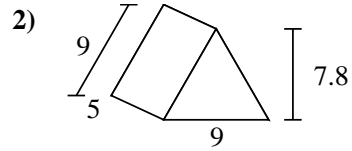
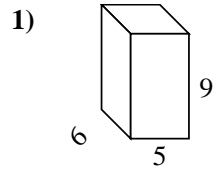
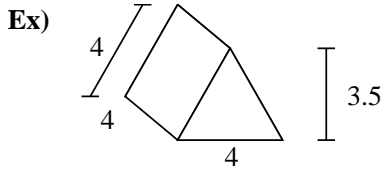




Find the surface area of each figure. Units are in cm (not to scale).



**Answers**

Ex. 62 cm<sup>2</sup>

1. \_\_\_\_\_

2. \_\_\_\_\_

3. \_\_\_\_\_

4. \_\_\_\_\_

5. \_\_\_\_\_

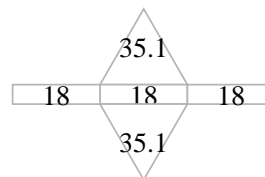
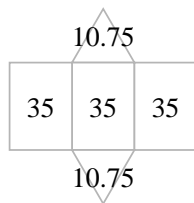
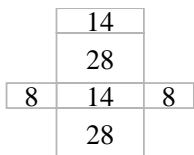
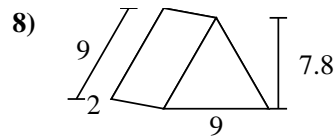
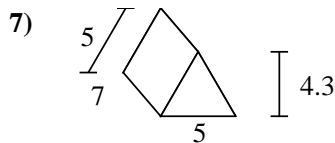
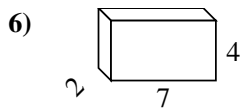
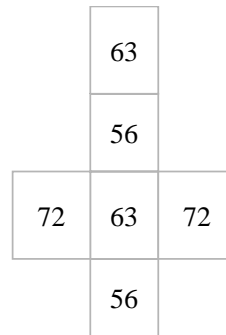
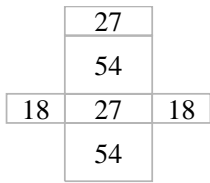
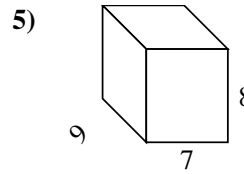
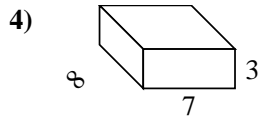
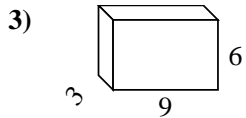
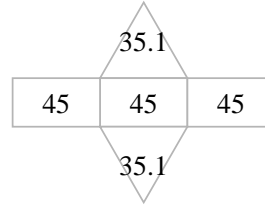
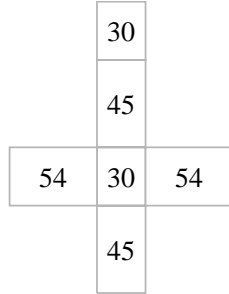
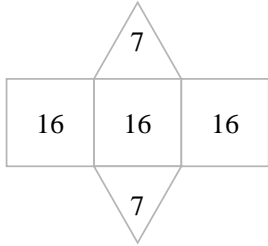
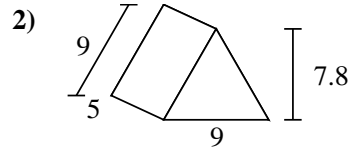
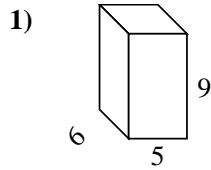
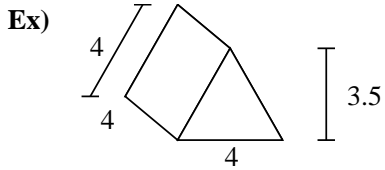
6. \_\_\_\_\_

7. \_\_\_\_\_

8. \_\_\_\_\_



Find the surface area of each figure. Units are in cm (not to scale).



**Answers**

Ex. 62 cm<sup>2</sup>

1. 258 cm<sup>2</sup>

2. 205.2 cm<sup>2</sup>

3. 198 cm<sup>2</sup>

4. 202 cm<sup>2</sup>

5. 382 cm<sup>2</sup>

6. 100 cm<sup>2</sup>

7. 126.5 cm<sup>2</sup>

8. 124.2 cm<sup>2</sup>