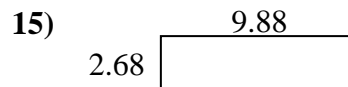
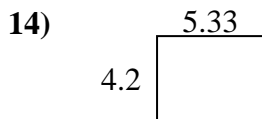
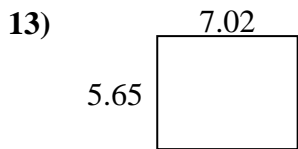
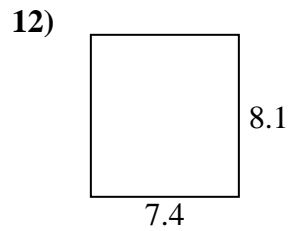
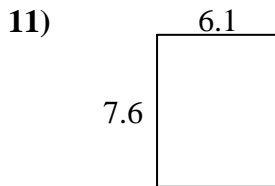
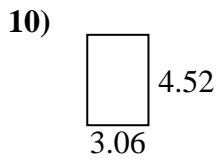
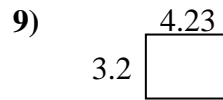
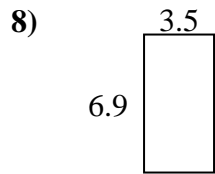
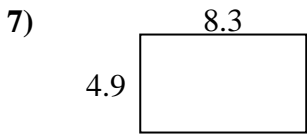

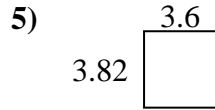
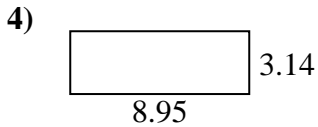
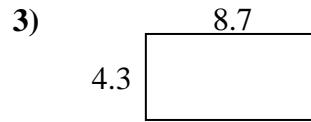
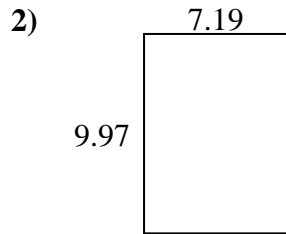
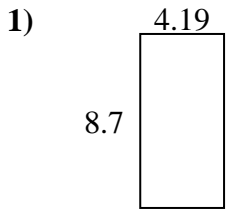




Find the perimeter and area of each figure. Answer to the nearest 10th.

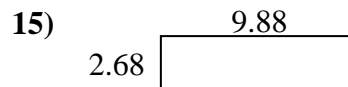
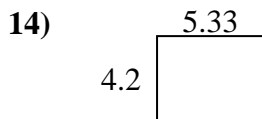
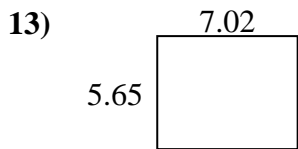
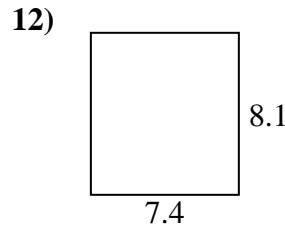
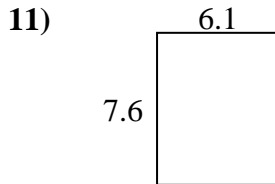
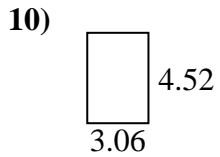
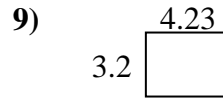
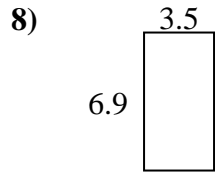
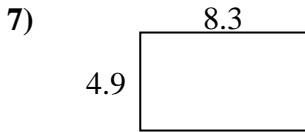

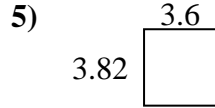

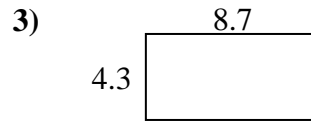
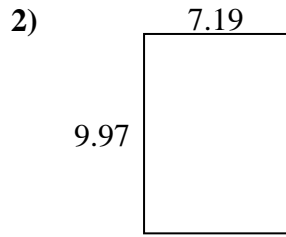
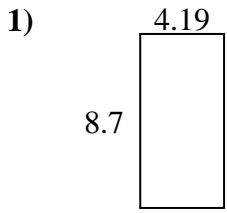
Answers



1. _____
2. _____
3. _____
4. _____
5. _____
6. _____
7. _____
8. _____
9. _____
10. _____
11. _____
12. _____
13. _____
14. _____
15. _____



Find the perimeter and area of each figure. Answer to the nearest 10th.



Answers

| | | |
|-----|-------------|-------------|
| 1. | <u>36.5</u> | <u>25.8</u> |
| 2. | <u>71.7</u> | <u>34.3</u> |
| 3. | <u>37.4</u> | <u>26.0</u> |
| 4. | <u>28.1</u> | <u>24.2</u> |
| 5. | <u>13.8</u> | <u>14.8</u> |
| 6. | <u>31.4</u> | <u>26.0</u> |
| 7. | <u>40.7</u> | <u>26.4</u> |
| 8. | <u>24.2</u> | <u>20.8</u> |
| 9. | <u>13.5</u> | <u>14.9</u> |
| 10. | <u>13.8</u> | <u>15.2</u> |
| 11. | <u>46.4</u> | <u>27.4</u> |
| 12. | <u>59.9</u> | <u>31.0</u> |
| 13. | <u>39.7</u> | <u>25.3</u> |
| 14. | <u>22.4</u> | <u>19.1</u> |
| 15. | <u>26.5</u> | <u>25.1</u> |