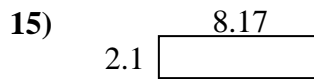

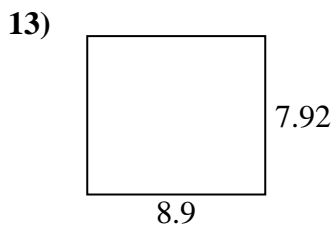
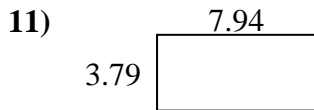
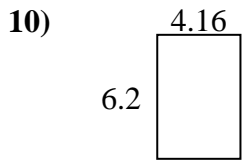
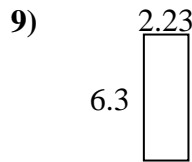
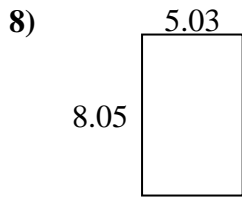
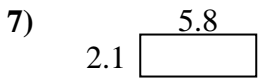
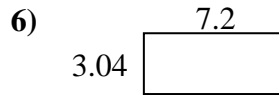
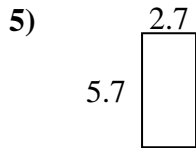
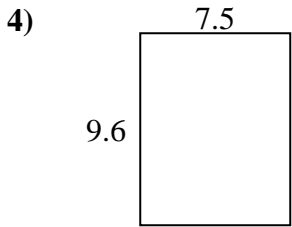
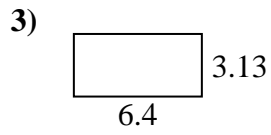
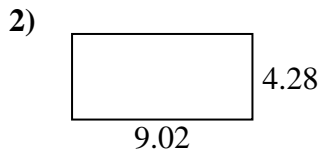




Find the perimeter and area of each figure. Answer to the nearest 10th.

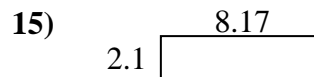
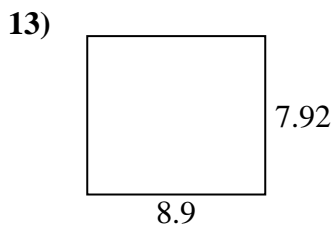
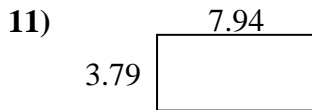
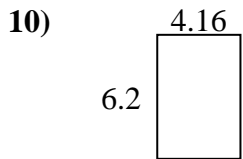
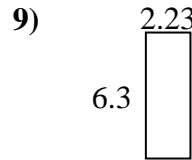
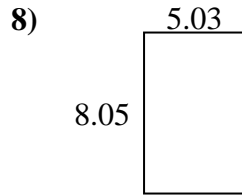
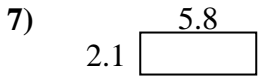
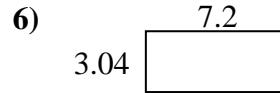
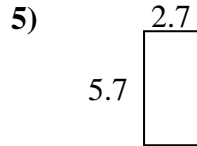
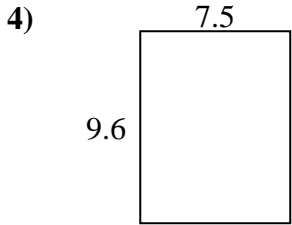
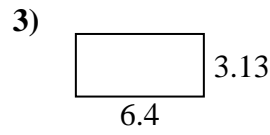
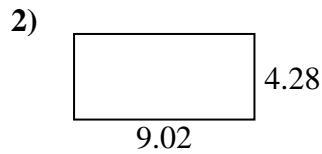


Answers

1. \_\_\_\_\_
2. \_\_\_\_\_
3. \_\_\_\_\_
4. \_\_\_\_\_
5. \_\_\_\_\_
6. \_\_\_\_\_
7. \_\_\_\_\_
8. \_\_\_\_\_
9. \_\_\_\_\_
10. \_\_\_\_\_
11. \_\_\_\_\_
12. \_\_\_\_\_
13. \_\_\_\_\_
14. \_\_\_\_\_
15. \_\_\_\_\_



Find the perimeter and area of each figure. Answer to the nearest 10th.



Answers

|     |             |             |
|-----|-------------|-------------|
| 1.  | <u>30.7</u> | <u>25.2</u> |
| 2.  | <u>38.6</u> | <u>26.6</u> |
| 3.  | <u>20.0</u> | <u>19.1</u> |
| 4.  | <u>72.0</u> | <u>34.2</u> |
| 5.  | <u>15.4</u> | <u>16.8</u> |
| 6.  | <u>21.9</u> | <u>20.5</u> |
| 7.  | <u>12.2</u> | <u>15.8</u> |
| 8.  | <u>40.5</u> | <u>26.2</u> |
| 9.  | <u>14.0</u> | <u>17.1</u> |
| 10. | <u>25.8</u> | <u>20.7</u> |
| 11. | <u>30.1</u> | <u>23.5</u> |
| 12. | <u>8.0</u>  | <u>11.5</u> |
| 13. | <u>70.5</u> | <u>33.6</u> |
| 14. | <u>25.6</u> | <u>22.1</u> |
| 15. | <u>17.2</u> | <u>20.5</u> |