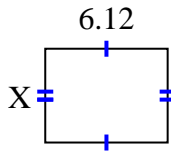


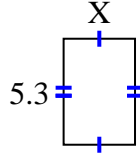


Find the value of X for each figure. Each figure is in centimeters (cm). Not to scale.

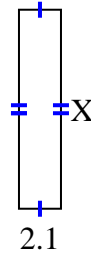
1) area =  $28.7028 \text{ cm}^2$



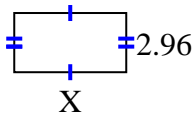
2) area =  $18.921 \text{ cm}^2$



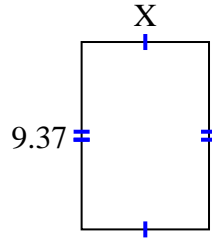
3) area =  $20.895 \text{ cm}^2$



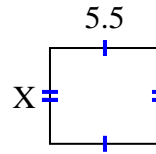
4) area =  $16.576 \text{ cm}^2$



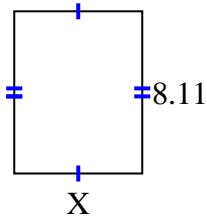
5) area =  $59.6869 \text{ cm}^2$



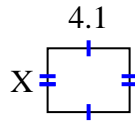
6) area =  $26.345 \text{ cm}^2$



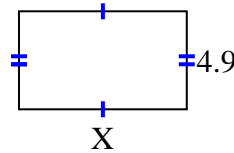
7) area =  $51.904 \text{ cm}^2$



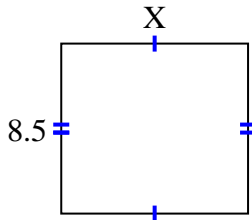
8) area =  $13.079 \text{ cm}^2$



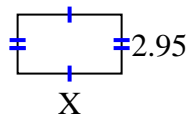
9) area =  $41.111 \text{ cm}^2$



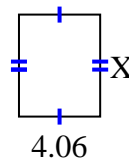
10) area =  $79.39 \text{ cm}^2$



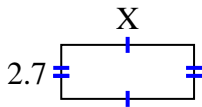
11) area =  $15.34 \text{ cm}^2$



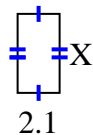
12) area =  $20.706 \text{ cm}^2$



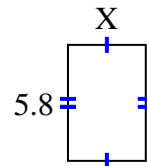
13) area =  $17.928 \text{ cm}^2$



14) area =  $8.295 \text{ cm}^2$



15) area =  $22.562 \text{ cm}^2$



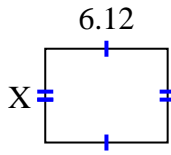
**Answers**

1. \_\_\_\_\_
2. \_\_\_\_\_
3. \_\_\_\_\_
4. \_\_\_\_\_
5. \_\_\_\_\_
6. \_\_\_\_\_
7. \_\_\_\_\_
8. \_\_\_\_\_
9. \_\_\_\_\_
10. \_\_\_\_\_
11. \_\_\_\_\_
12. \_\_\_\_\_
13. \_\_\_\_\_
14. \_\_\_\_\_
15. \_\_\_\_\_

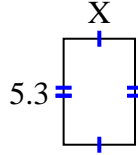


Find the value of X for each figure. Each figure is in centimeters (cm). Not to scale.

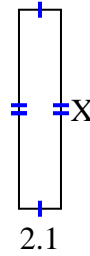
1) area =  $28.7028 \text{ cm}^2$



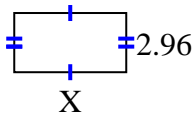
2) area =  $18.921 \text{ cm}^2$



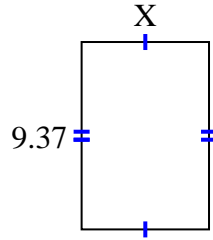
3) area =  $20.895 \text{ cm}^2$



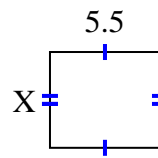
4) area =  $16.576 \text{ cm}^2$



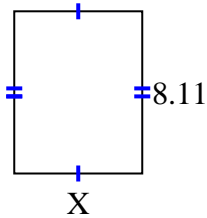
5) area =  $59.6869 \text{ cm}^2$



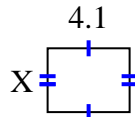
6) area =  $26.345 \text{ cm}^2$



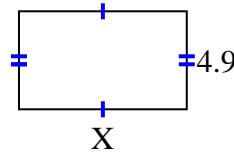
7) area =  $51.904 \text{ cm}^2$



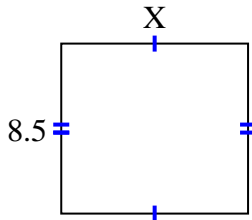
8) area =  $13.079 \text{ cm}^2$



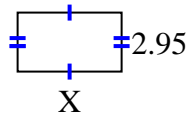
9) area =  $41.111 \text{ cm}^2$



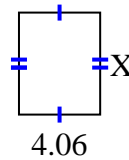
10) area =  $79.39 \text{ cm}^2$



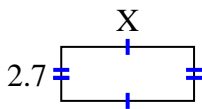
11) area =  $15.34 \text{ cm}^2$



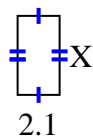
12) area =  $20.706 \text{ cm}^2$



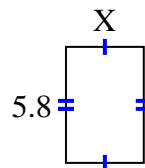
13) area =  $17.928 \text{ cm}^2$



14) area =  $8.295 \text{ cm}^2$



15) area =  $22.562 \text{ cm}^2$



Answers

1. 4.69

2. 3.57

3. 9.95

4. 5.6

5. 6.37

6. 4.79

7. 6.4

8. 3.19

9. 8.39

10. 9.34

11. 5.2

12. 5.1

13. 6.64

14. 3.95

15. 3.89