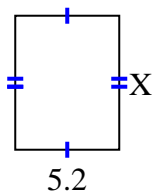


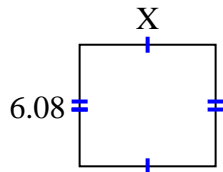


Find the value of X for each figure. Each figure is in centimeters (cm). Not to scale.

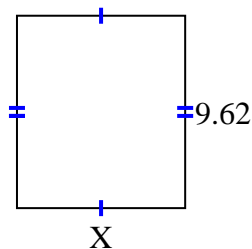
1) area =  $34.84 \text{ cm}^2$



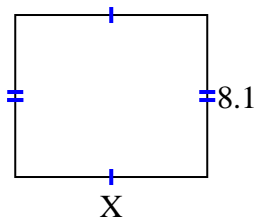
2) area =  $41.344 \text{ cm}^2$



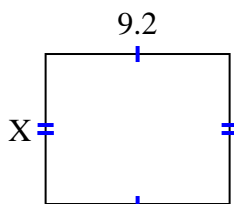
3) area =  $80.9042 \text{ cm}^2$



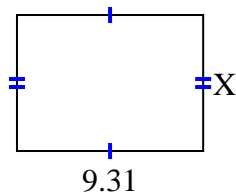
4) area =  $77.76 \text{ cm}^2$



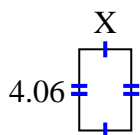
5) area =  $69 \text{ cm}^2$



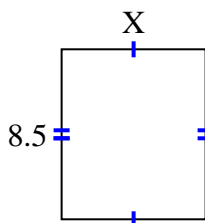
6) area =  $63.308 \text{ cm}^2$



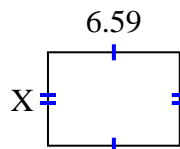
7) area =  $10.556 \text{ cm}^2$



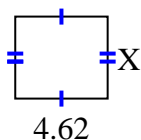
8) area =  $61.2 \text{ cm}^2$



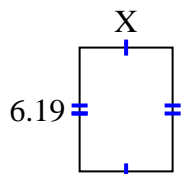
9) area =  $30.7753 \text{ cm}^2$



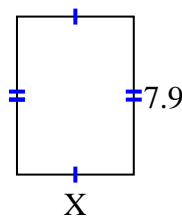
10) area =  $18.942 \text{ cm}^2$



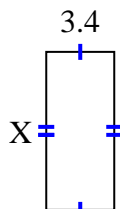
11) area =  $28.7835 \text{ cm}^2$



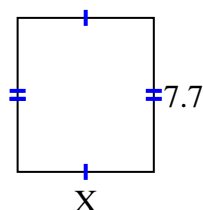
12) area =  $46.136 \text{ cm}^2$



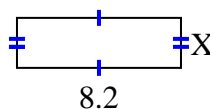
13) area =  $26.86 \text{ cm}^2$



14) area =  $52.437 \text{ cm}^2$



15) area =  $20.5 \text{ cm}^2$



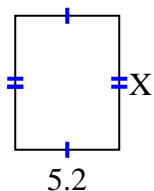
**Answers**

1. \_\_\_\_\_
2. \_\_\_\_\_
3. \_\_\_\_\_
4. \_\_\_\_\_
5. \_\_\_\_\_
6. \_\_\_\_\_
7. \_\_\_\_\_
8. \_\_\_\_\_
9. \_\_\_\_\_
10. \_\_\_\_\_
11. \_\_\_\_\_
12. \_\_\_\_\_
13. \_\_\_\_\_
14. \_\_\_\_\_
15. \_\_\_\_\_

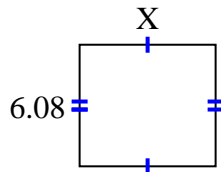


Find the value of X for each figure. Each figure is in centimeters (cm). Not to scale.

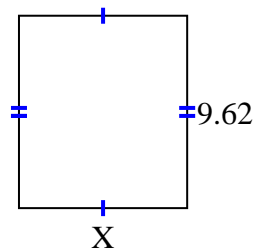
1) area =  $34.84 \text{ cm}^2$



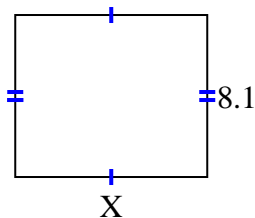
2) area =  $41.344 \text{ cm}^2$



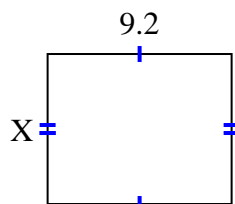
3) area =  $80.9042 \text{ cm}^2$



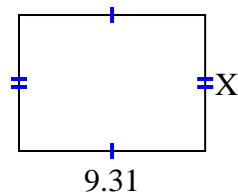
4) area =  $77.76 \text{ cm}^2$



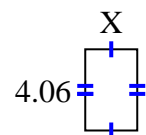
5) area =  $69 \text{ cm}^2$



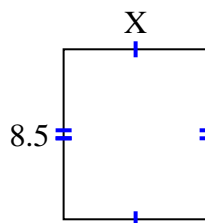
6) area =  $63.308 \text{ cm}^2$



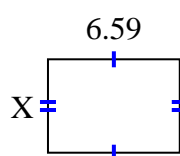
7) area =  $10.556 \text{ cm}^2$



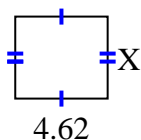
8) area =  $61.2 \text{ cm}^2$



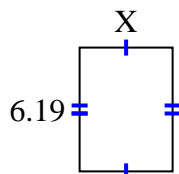
9) area =  $30.7753 \text{ cm}^2$



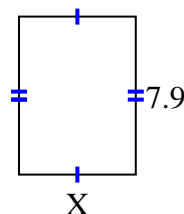
10) area =  $18.942 \text{ cm}^2$



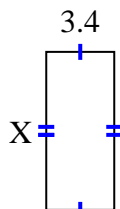
11) area =  $28.7835 \text{ cm}^2$



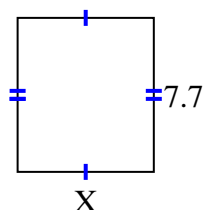
12) area =  $46.136 \text{ cm}^2$



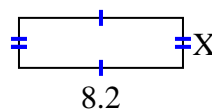
13) area =  $26.86 \text{ cm}^2$



14) area =  $52.437 \text{ cm}^2$



15) area =  $20.5 \text{ cm}^2$



Answers

1. 6.7

2. 6.8

3. 8.41

4. 9.6

5. 7.5

6. 6.8

7. 2.6

8. 7.2

9. 4.67

10. 4.1

11. 4.65

12. 5.84

13. 7.9

14. 6.81

15. 2.5