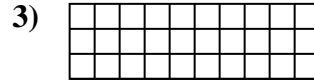
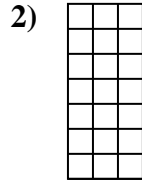





Determine the area. Each **SVGREPLACE** = 1 square unit ( $u^2$ ).

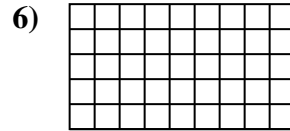
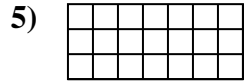
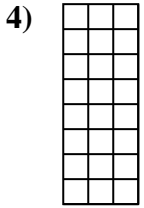
**Answers**



1. \_\_\_\_\_

2. \_\_\_\_\_


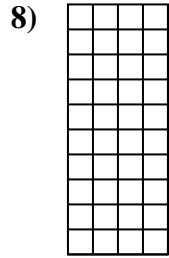
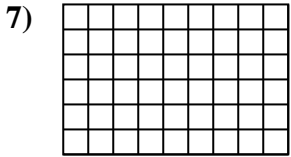
3. \_\_\_\_\_



4. \_\_\_\_\_

5. \_\_\_\_\_

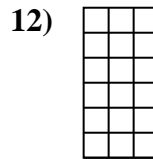
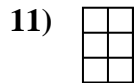
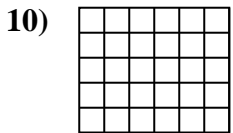
6. \_\_\_\_\_



7. \_\_\_\_\_

8. \_\_\_\_\_

9. \_\_\_\_\_



10. \_\_\_\_\_

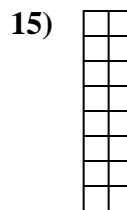

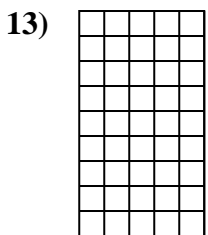
11. \_\_\_\_\_

12. \_\_\_\_\_

13. \_\_\_\_\_

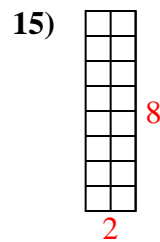
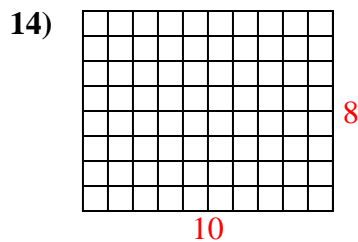
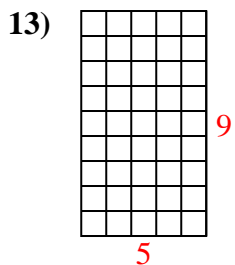
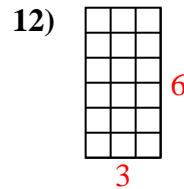
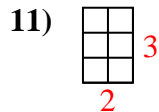
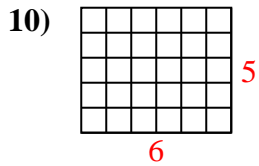
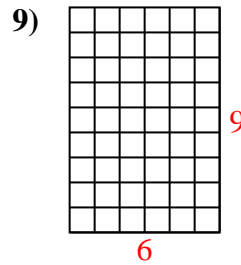
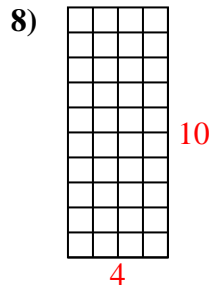
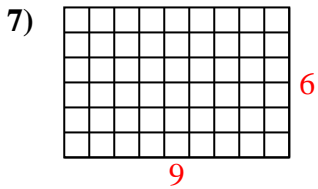
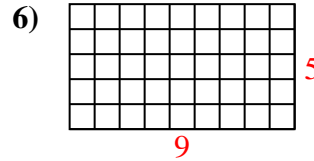
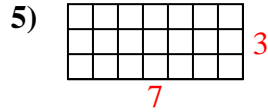
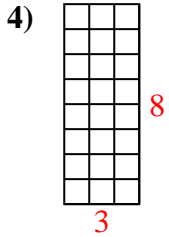
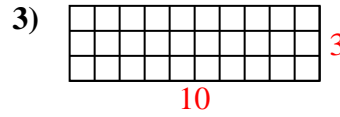
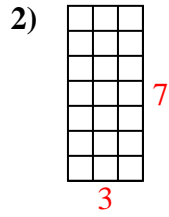
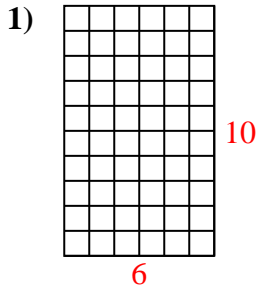
14. \_\_\_\_\_

15. \_\_\_\_\_





Determine the area. Each **SVGREPLACE** = 1 square unit ( $u^2$ ).



Answers

1. 60  $u^2$

2. 21  $u^2$

3. 30  $u^2$

4. 24  $u^2$

5. 21  $u^2$

6. 45  $u^2$

7. 54  $u^2$

8. 40  $u^2$

9. 54  $u^2$

10. 30  $u^2$

11. 6  $u^2$

12. 18  $u^2$

13. 45  $u^2$

14. 80  $u^2$

15. 16  $u^2$