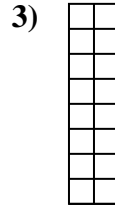
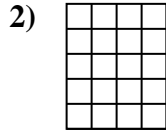
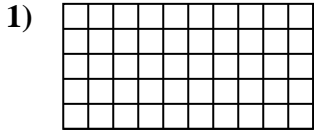




Determine the area. Each **SVGREPLACE** = 1 square unit (u^2).

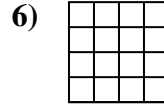

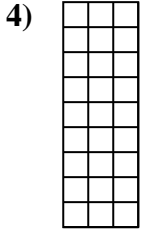
Answers



1. _____

2. _____

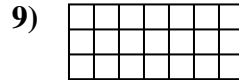
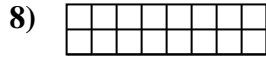
3. _____



4. _____

5. _____

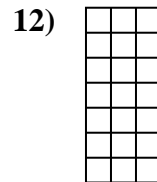
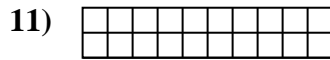
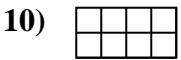
6. _____



7. _____

8. _____

9. _____



10. _____

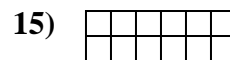
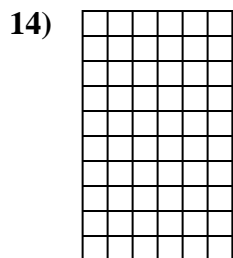
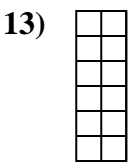
11. _____

12. _____

13. _____

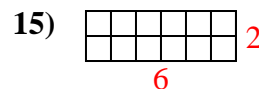
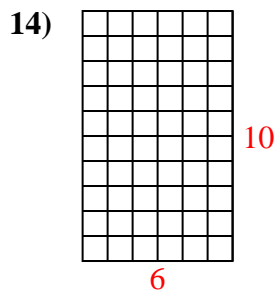
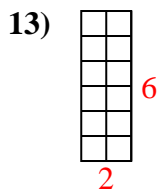
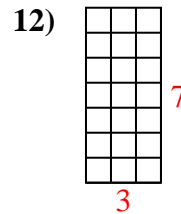
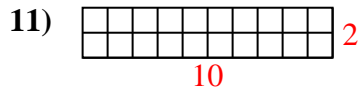
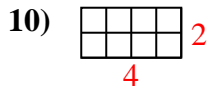
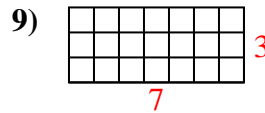
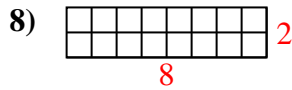
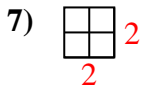
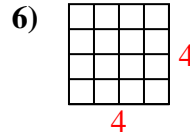
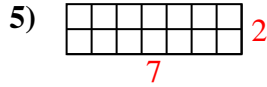
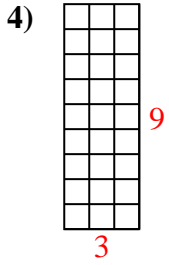
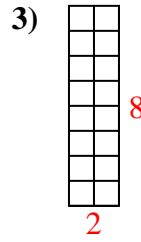
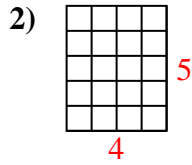
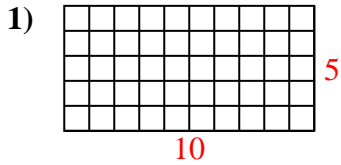
14. _____

15. _____





Determine the area. Each **SVGREPLACE** = 1 square unit (u^2).



Answers

1. 50 u^2

2. 20 u^2

3. 16 u^2

4. 27 u^2

5. 14 u^2

6. 16 u^2

7. 4 u^2

8. 16 u^2

9. 21 u^2

10. 8 u^2

11. 20 u^2

12. 21 u^2

13. 12 u^2

14. 60 u^2

15. 12 u^2