





Use the diagrams below to create a rectangle with the area/perimeter shown. Each SVGREPLACE = 1 unit(u). Answer with the length and height. Answers will vary.


1) Area of 16 square units.




2) Perimeter of 40 units.




3) Perimeter of 6 units.




4) Perimeter of 20 units.




5) Perimeter of 26 units.




6) Area of 32 square units.




7) Area of 7 square units.




8) Area of 42 square units.




9) Perimeter of 22 units.




10) Perimeter of 38 units.



11) Perimeter of 8 units.



12) Area of 21 square units.



Answers

1. _____ $=16u^2$

2. _____ $=40u$

3. _____ $=6u$

4. _____ $=20u$

5. _____ $=26u$

6. _____ $=32u^2$

7. _____ $=7u^2$

8. _____ $=42u^2$

9. _____ $=22u$

10. _____ $=38u$


11. _____ $=8u$

12. _____ $=21u^2$




Use the diagrams below to create a rectangle with the area/perimeter shown. Each SVGREPLACE = 1 unit(u). Answer with the length and height. Answers will vary.


1) Area of 16 square units.




2) Perimeter of 40 units.




3) Perimeter of 6 units.




4) Perimeter of 20 units.




5) Perimeter of 26 units.




6) Area of 32 square units.




7) Area of 7 square units.




8) Area of 42 square units.




9) Perimeter of 22 units.




10) Perimeter of 38 units.



11) Perimeter of 8 units.



12) Area of 21 square units.



Answers

1. = $16u^2$

2. = $40u$

3. = $6u$

4. = $20u$

5. = $26u$

6. = $32u^2$

7. = $7u^2$

8. = $42u^2$

9. = $22u$

10. = $38u$

11. = $8u$

12. = $21u^2$