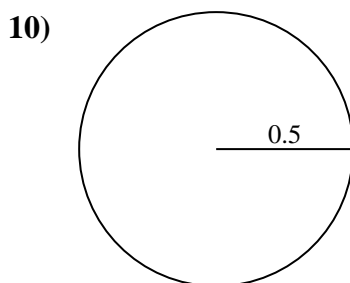
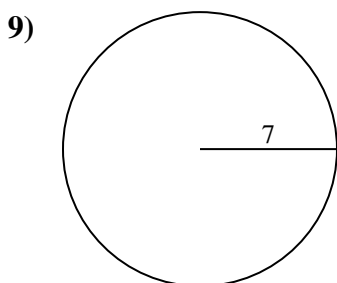
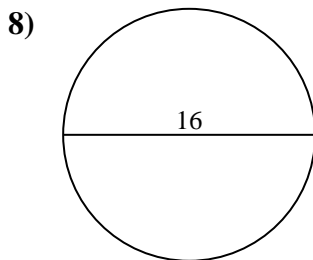
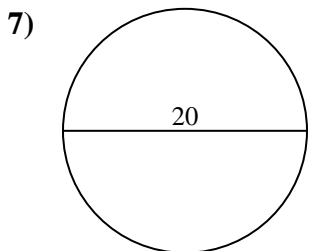
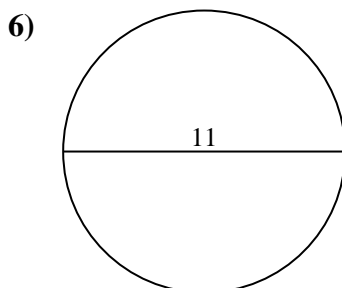
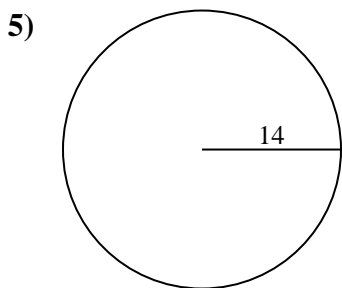
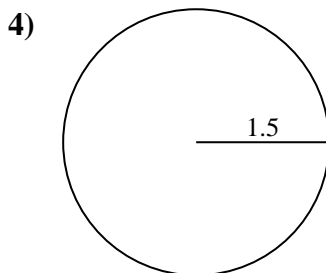
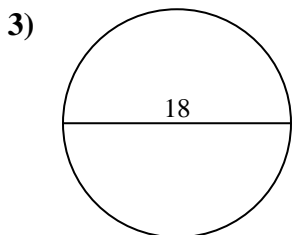
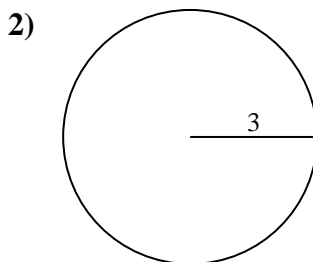
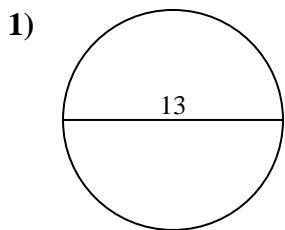




Find the circumference (in cm) of the circle. Circles are not to scale.

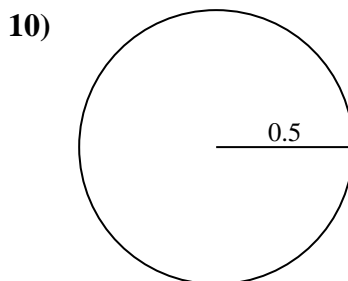
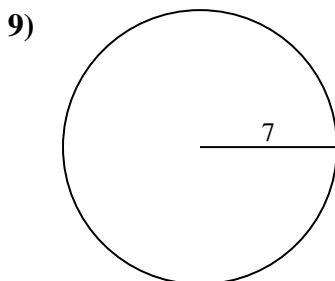
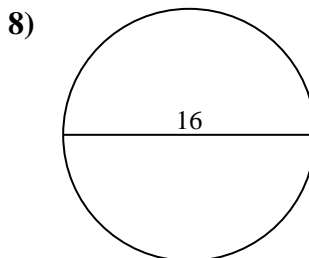
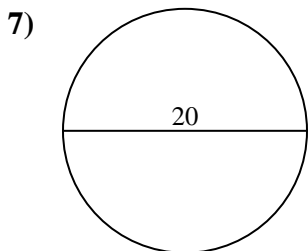
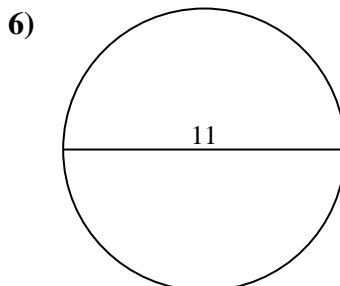
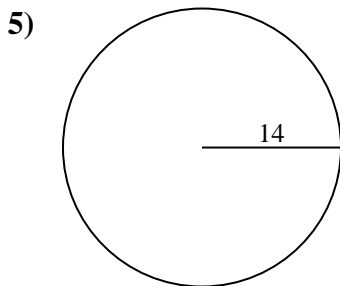
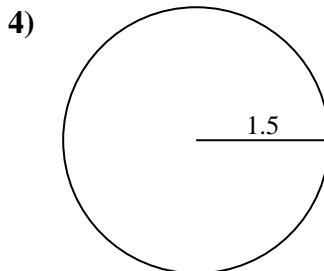
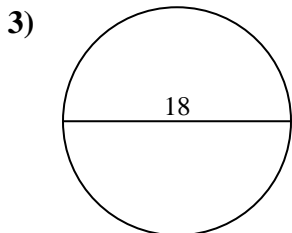
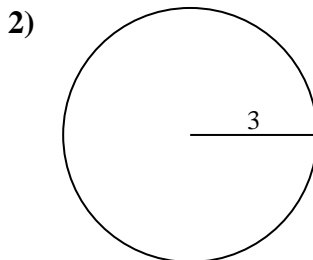
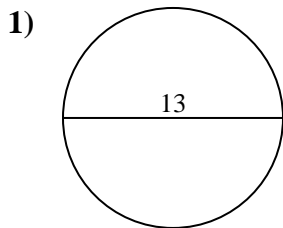


Answers

- 1. _____
- 2. _____
- 3. _____
- 4. _____
- 5. _____
- 6. _____
- 7. _____
- 8. _____
- 9. _____
- 10. _____



Find the circumference (in cm) of the circle. Circles are not to scale.

**Answers**

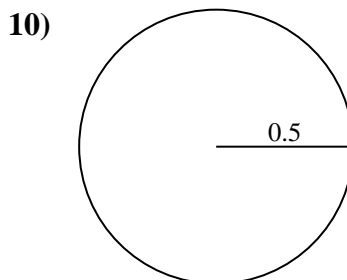
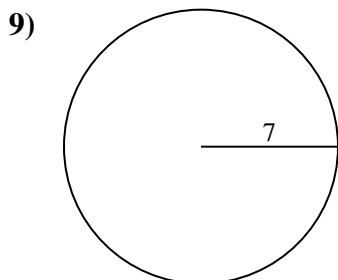
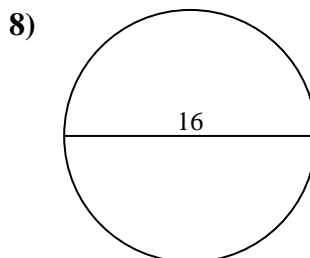
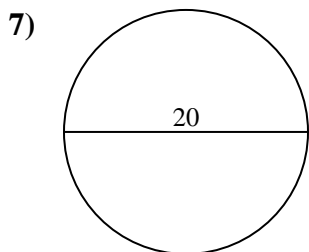
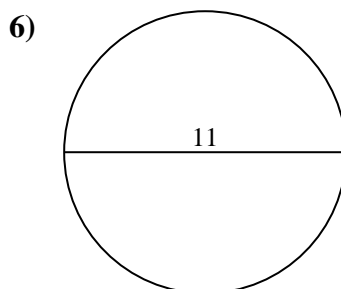
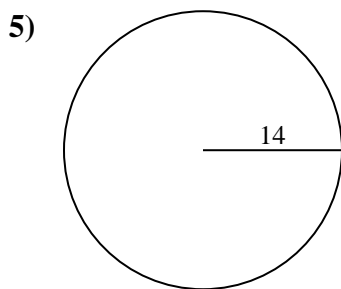
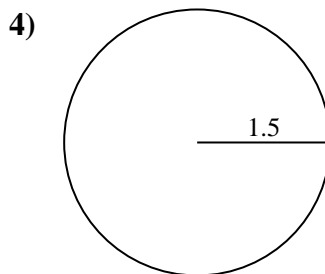
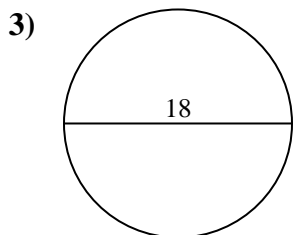
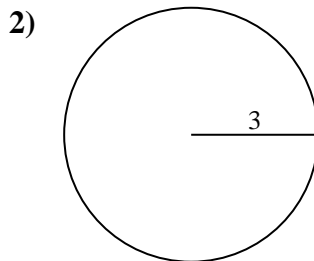
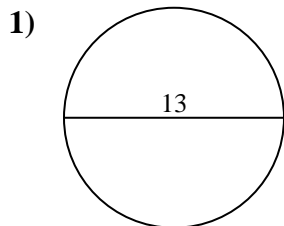
1. 40.84 cm
2. 18.85 cm
3. 56.55 cm
4. 9.42 cm
5. 87.96 cm
6. 34.56 cm
7. 62.83 cm
8. 50.27 cm
9. 43.98 cm
10. 3.14 cm



Find the circumference (in cm) of the circle. Circles are not to scale.

- | | | | | |
|----------|----------|----------|----------|----------|
| 34.56 cm | 3.14 cm | 50.27 cm | 87.96 cm | 43.98 cm |
| 18.85 cm | 40.84 cm | 62.83 cm | 9.42 cm | 56.55 cm |

Answers



- 1. _____
- 2. _____
- 3. _____
- 4. _____
- 5. _____
- 6. _____
- 7. _____
- 8. _____
- 9. _____
- 10. _____