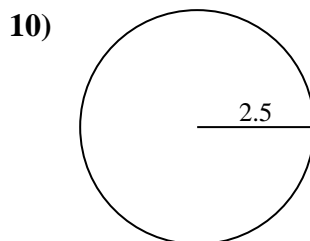
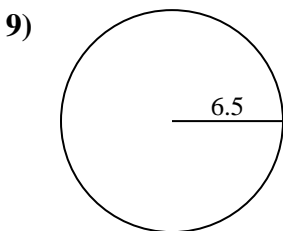
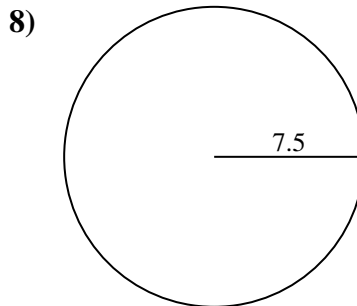
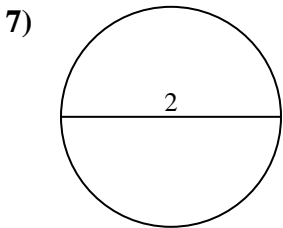
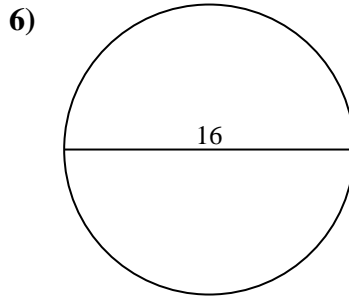
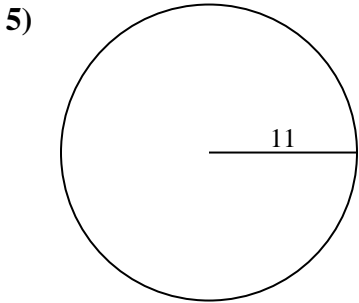
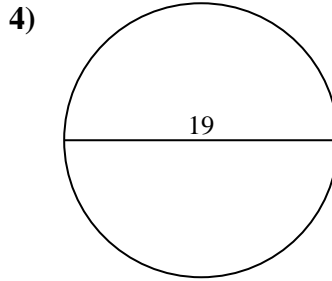
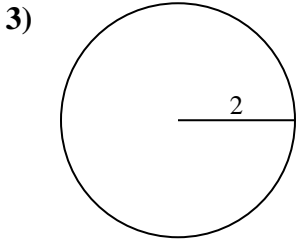
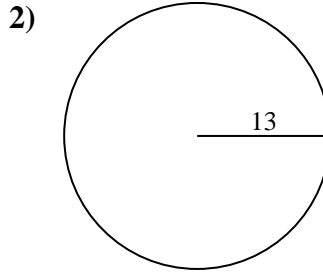
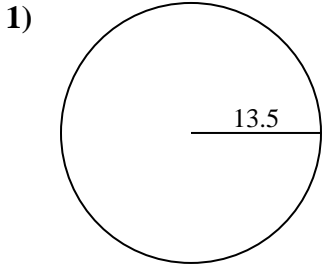




Find the circumference (in cm) of the circle. Circles are not to scale.

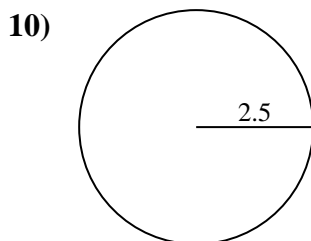
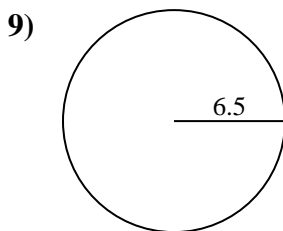
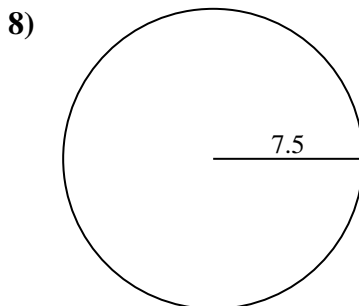
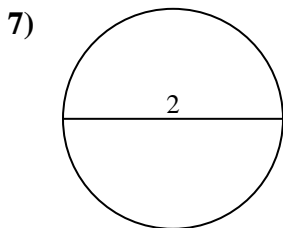
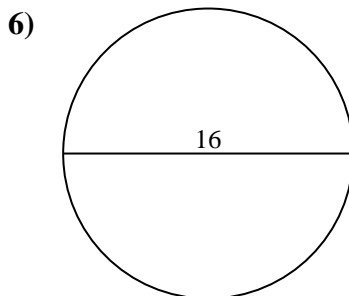
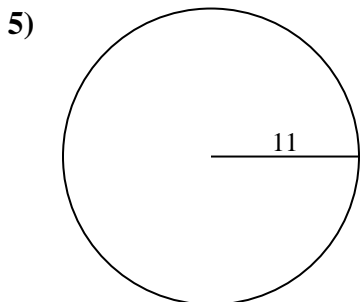
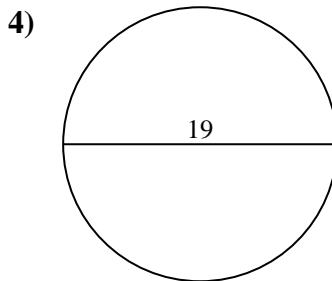
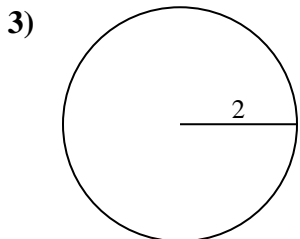
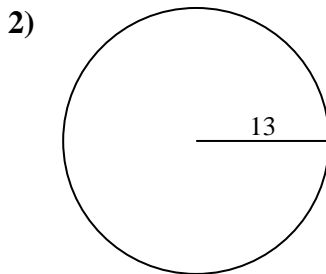
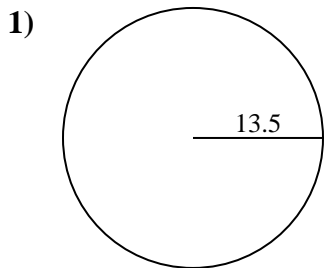


Answers

- 1. \_\_\_\_\_
- 2. \_\_\_\_\_
- 3. \_\_\_\_\_
- 4. \_\_\_\_\_
- 5. \_\_\_\_\_
- 6. \_\_\_\_\_
- 7. \_\_\_\_\_
- 8. \_\_\_\_\_
- 9. \_\_\_\_\_
- 10. \_\_\_\_\_



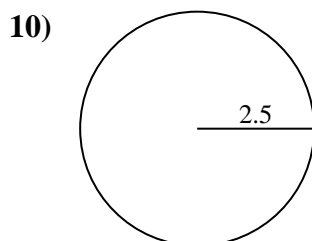
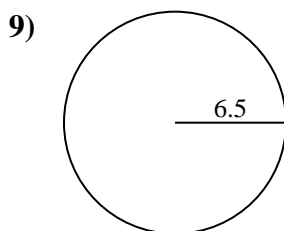
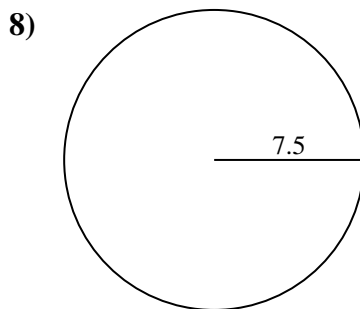
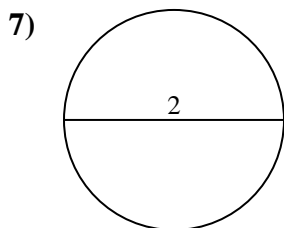
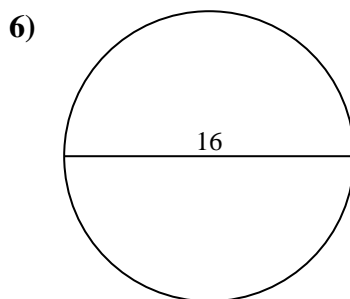
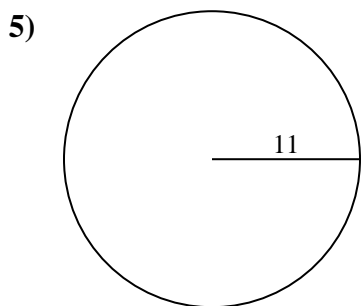
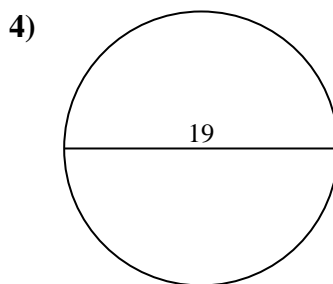
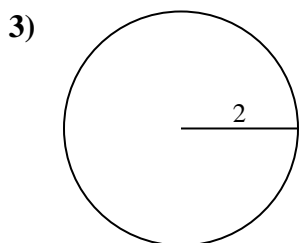
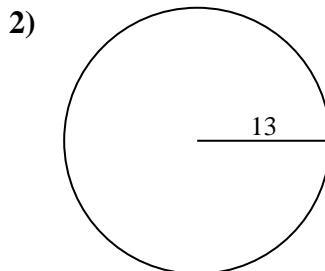
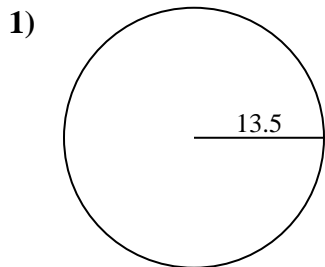
Find the circumference (in cm) of the circle. Circles are not to scale.

**Answers**1. **84.82 cm**2. **81.68 cm**3. **12.57 cm**4. **59.69 cm**5. **69.12 cm**6. **50.27 cm**7. **6.28 cm**8. **47.12 cm**9. **40.84 cm**10. **15.71 cm**



Find the circumference (in cm) of the circle. Circles are not to scale.

- |          |          |          |          |          |
|----------|----------|----------|----------|----------|
| 69.12 cm | 6.28 cm  | 81.68 cm | 15.71 cm | 12.57 cm |
| 50.27 cm | 47.12 cm | 84.82 cm | 59.69 cm | 40.84 cm |



**Answers**

- \_\_\_\_\_
- \_\_\_\_\_
- \_\_\_\_\_
- \_\_\_\_\_
- \_\_\_\_\_
- \_\_\_\_\_
- \_\_\_\_\_
- \_\_\_\_\_
- \_\_\_\_\_
- \_\_\_\_\_