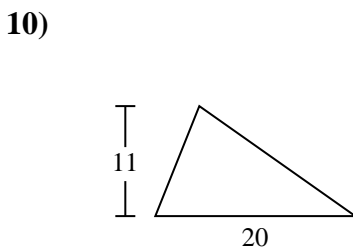
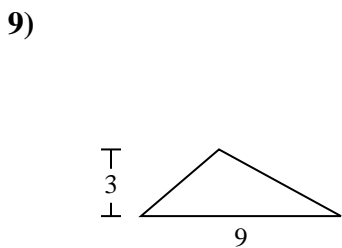
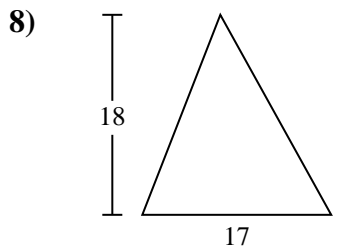
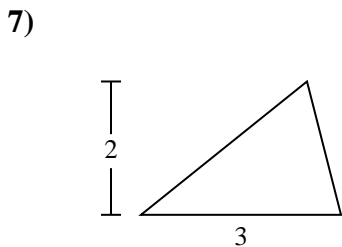
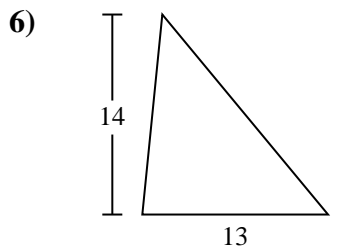
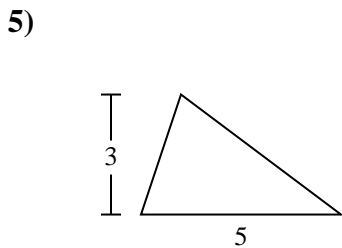
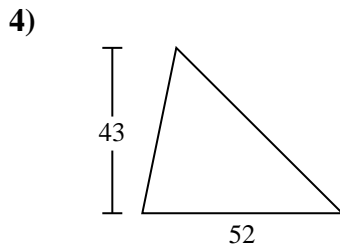
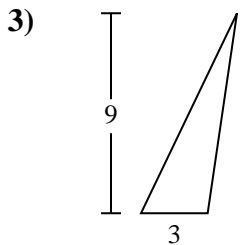
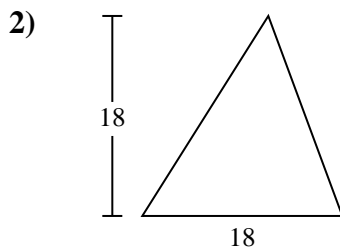
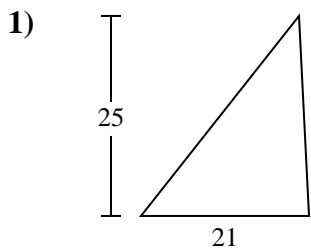




Find the area of the triangle. Round your answer to the nearest 10th.

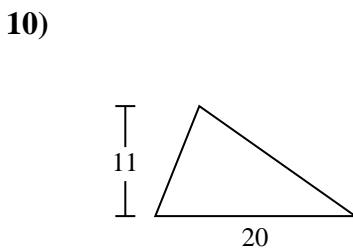
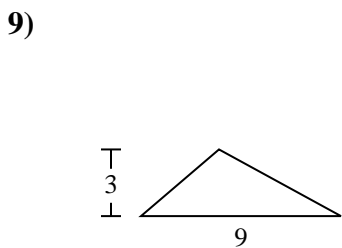
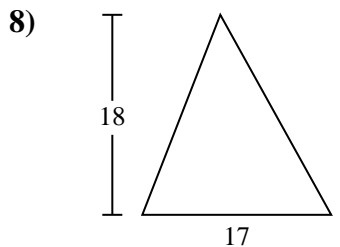
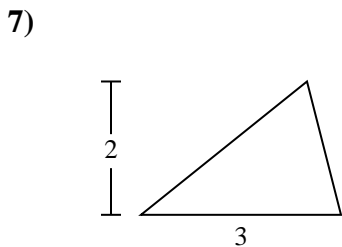
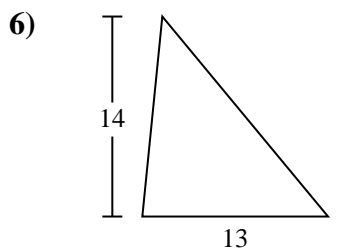
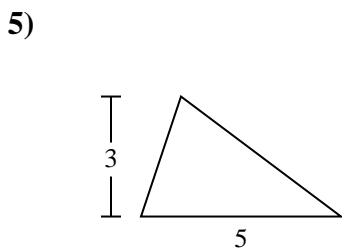
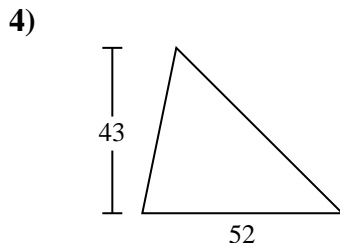
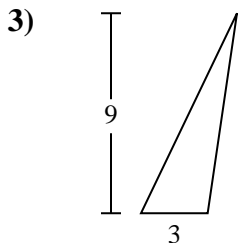
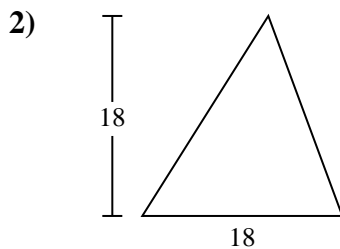
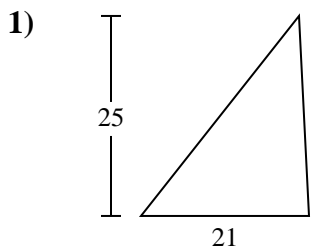


Answers

- 1. _____
- 2. _____
- 3. _____
- 4. _____
- 5. _____
- 6. _____
- 7. _____
- 8. _____
- 9. _____
- 10. _____



Find the area of the triangle. Round your answer to the nearest 10th.



Answers

1. 262.5

2. 162

3. 13.5

4. 1,118

5. 7.5

6. 91

7. 3

8. 153

9. 13.5

10. 110



Find the area of the triangle. Round your answer to the nearest 10th.

13.5	13.5	262.5	91	7.5
162	153	3	1,118	

Answers

1. _____
2. _____
3. _____
4. _____
5. _____
6. _____
7. _____
8. _____
9. _____

