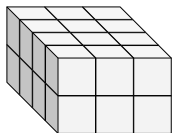


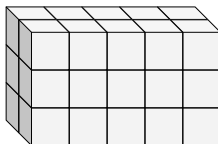


Find the length, width and height of the rectangular prism. Then find the volume.

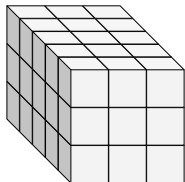
Ex)



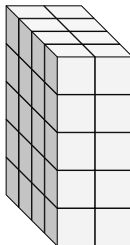
1)



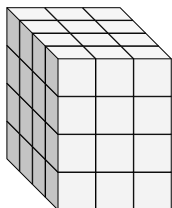
2)



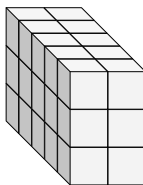
3)



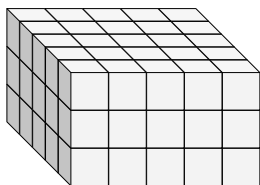
4)



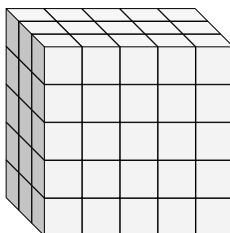
5)



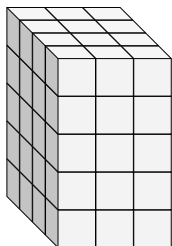
6)



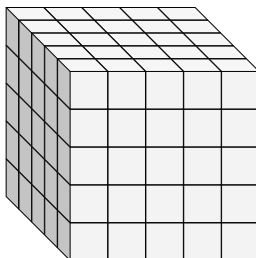
7)



8)



9)

**Answers**Ex. 4 3 2 24

1. _____

2. _____

3. _____

4. _____

5. _____

6. _____

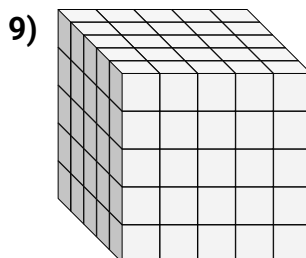
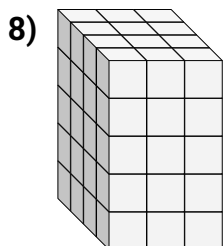
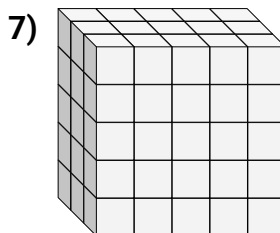
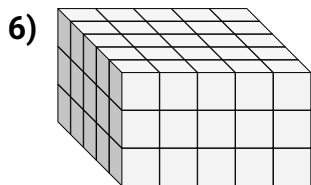
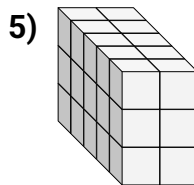
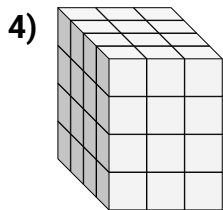
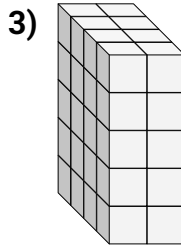
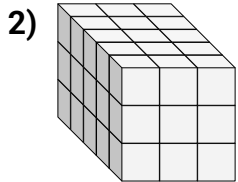
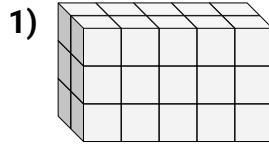
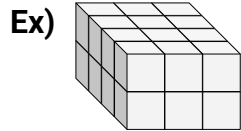
7. _____

8. _____

9. _____



Find the length, width and height of the rectangular prism. Then find the volume.

**Answers**Ex. 4 3 2 241. 2 5 3 302. 5 3 3 453. 4 2 5 404. 4 3 4 485. 5 2 3 306. 5 5 3 757. 3 5 5 758. 4 3 5 609. 5 5 5 125