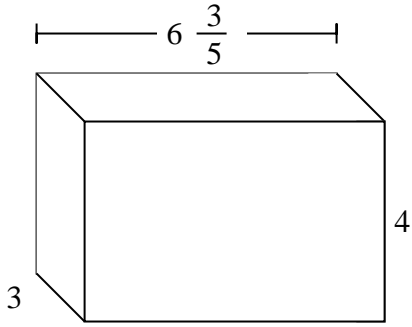


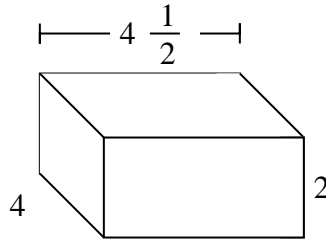


Fill each rectangular prism with cubes to determine the volume. Each prism's unit is measured in cm (not to scale).

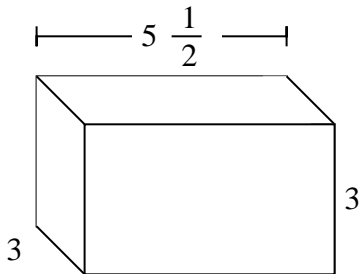
Ex)



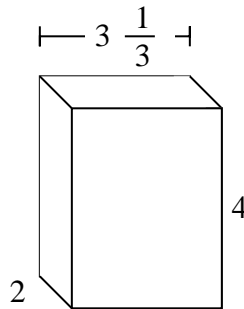
1)



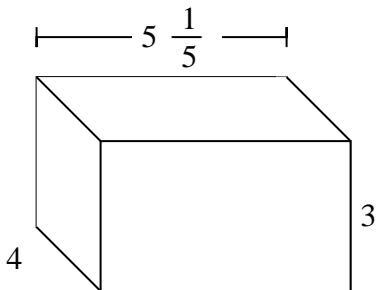
2)



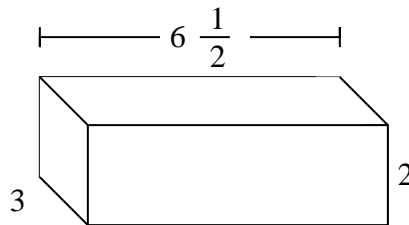
3)



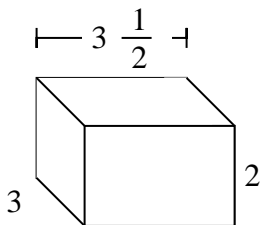
4)



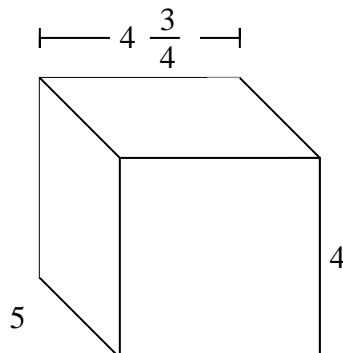
5)



6)



7)

AnswersEx.  $79\frac{1}{5}$  cm

1. \_\_\_\_\_

2. \_\_\_\_\_

3. \_\_\_\_\_

4. \_\_\_\_\_

5. \_\_\_\_\_

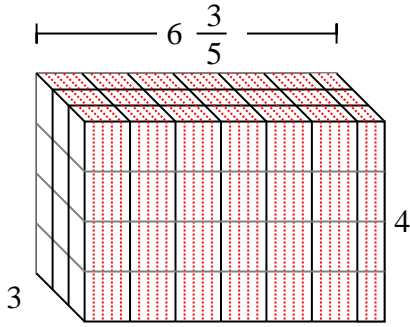
6. \_\_\_\_\_

7. \_\_\_\_\_

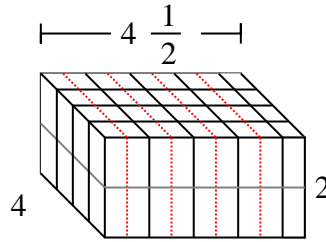


Fill each rectangular prism with cubes to determine the volume. Each prism's unit is measured in cm (not to scale).

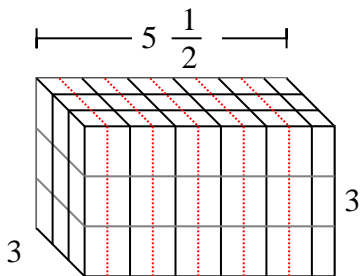
Ex)



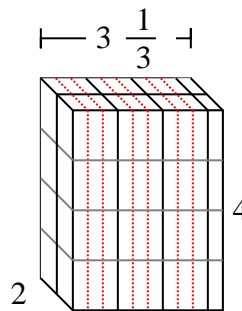
1)

AnswersEx.  $79 \frac{1}{5} \text{ cm}$ 1.  $36 \text{ cm}$ 2.  $49 \frac{1}{2} \text{ cm}$ 3.  $26 \frac{2}{3} \text{ cm}$ 4.  $62 \frac{2}{5} \text{ cm}$ 5.  $39 \text{ cm}$ 6.  $21 \text{ cm}$ 7.  $95 \text{ cm}$ 

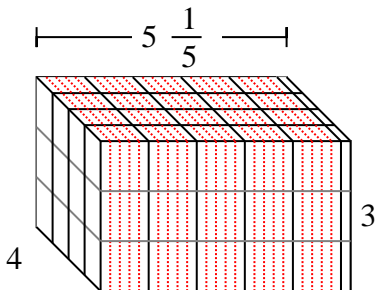
2)



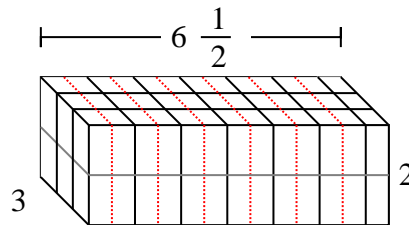
3)



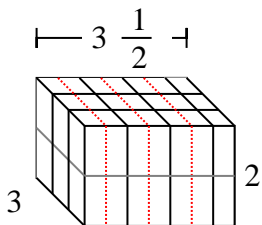
4)



5)



6)



7)

