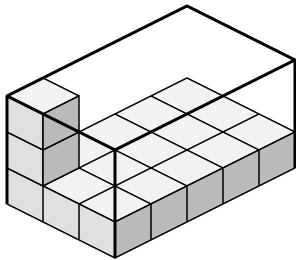




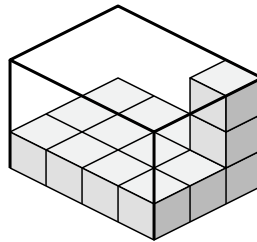
Create an expression to determine the volume of each box.

Answers

1)



2)



1. _____

2. _____

3. _____

4. _____

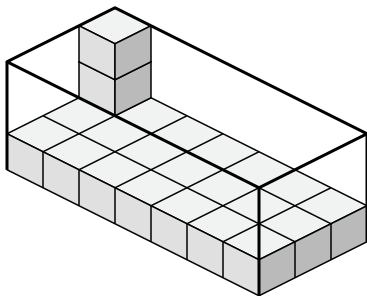
5. _____

6. _____

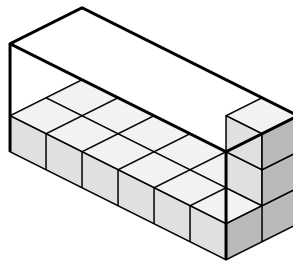
7. _____

8. _____

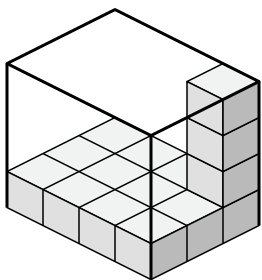
3)



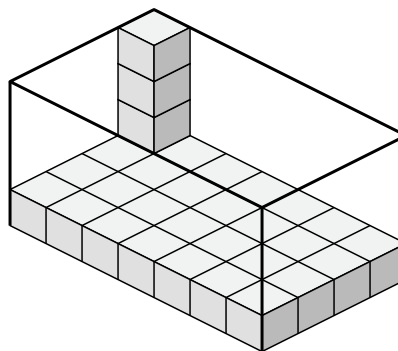
4)



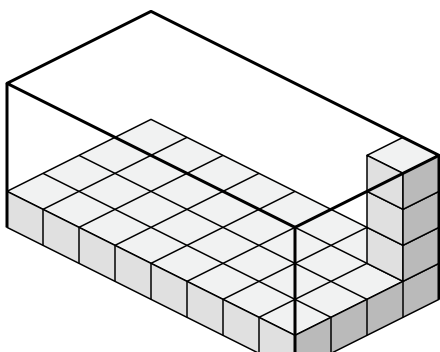
5)



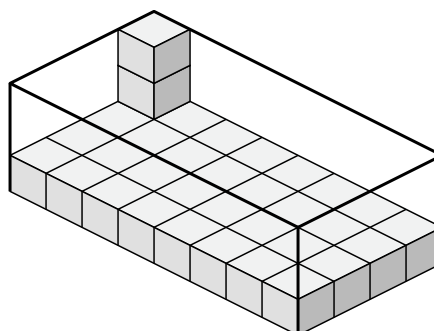
6)



7)



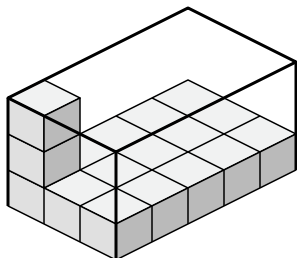
8)



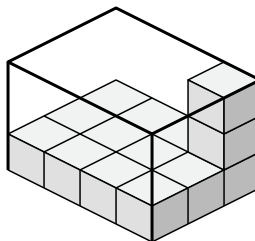


Create an expression to determine the volume of each box.

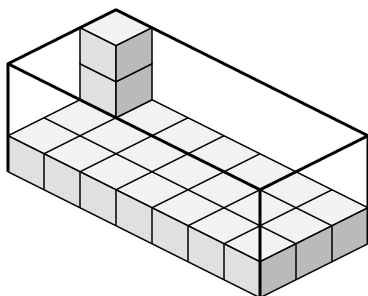
1)



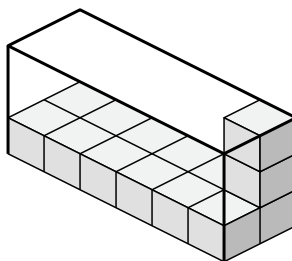
2)



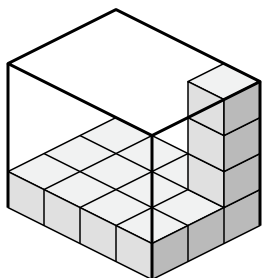
3)



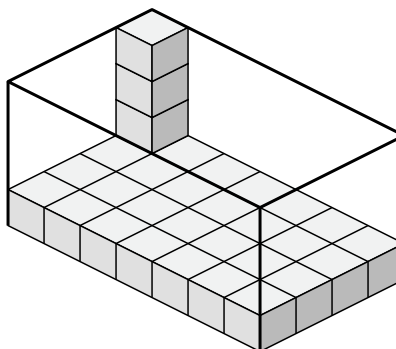
4)



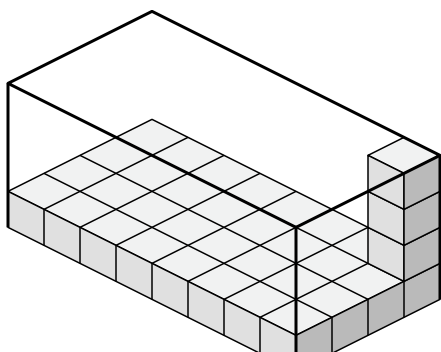
5)



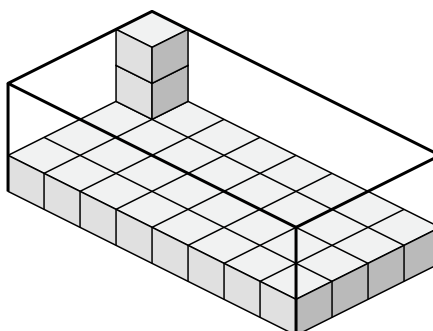
6)



7)



8)



Answers

1. 3×5×3

2. 4×3×3

3. 7×3×3

4. 6×2×3

5. 4×3×4

6. 7×4×4

7. 8×4×4

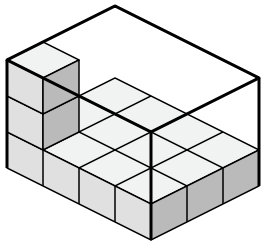
8. 8×4×3



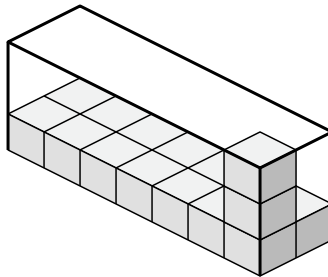
Create an expression to determine the volume of each box.

Answers

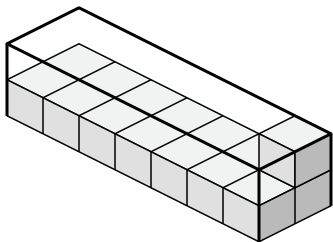
1)



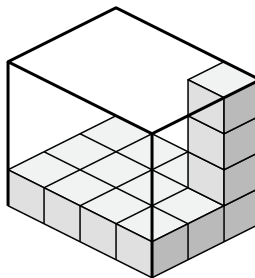
2)



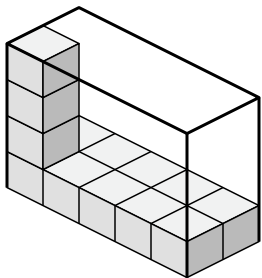
3)



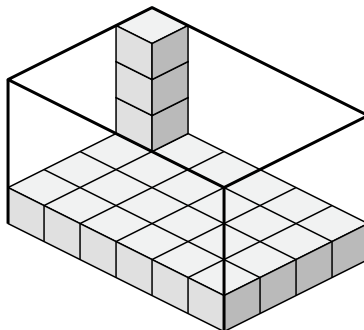
4)



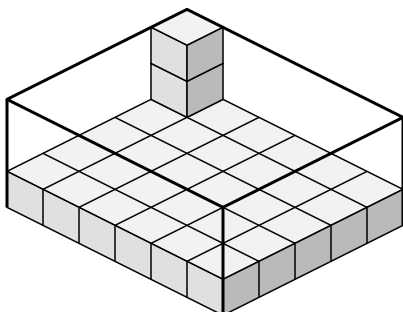
5)



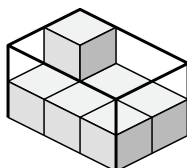
6)



7)



8)

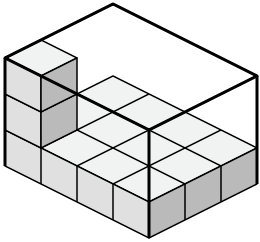


- 1. _____
- 2. _____
- 3. _____
- 4. _____
- 5. _____
- 6. _____
- 7. _____
- 8. _____

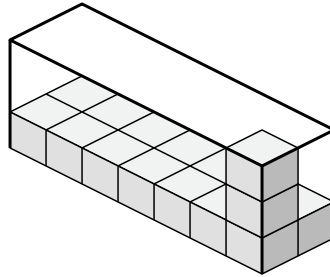


Create an expression to determine the volume of each box.

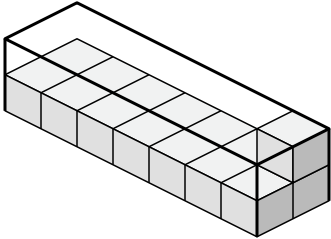
1)



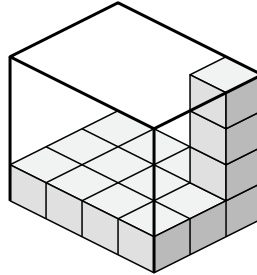
2)



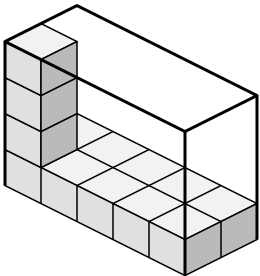
3)



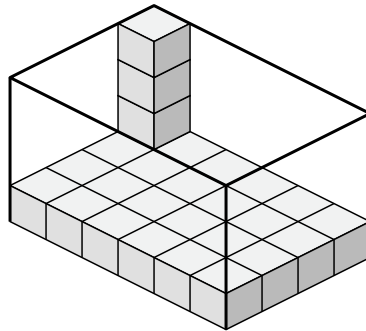
4)



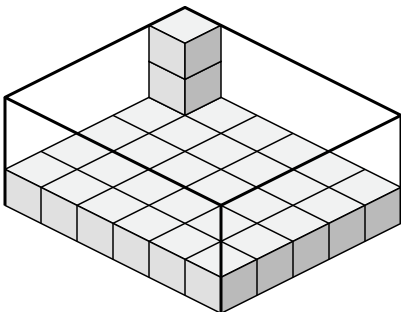
5)



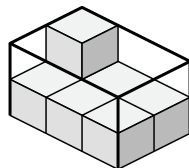
6)



7)



8)



Answers

1. 4×3×3

2. 7×2×3

3. 7×2×2

4. 4×3×4

5. 5×2×4

6. 6×4×4

7. 6×5×3

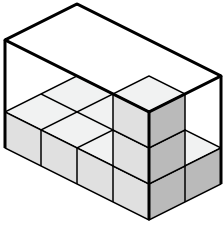
8. 3×2×2



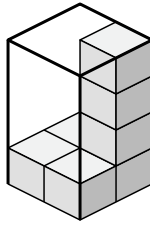
Create an expression to determine the volume of each box.

Answers

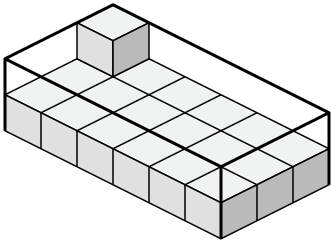
1)



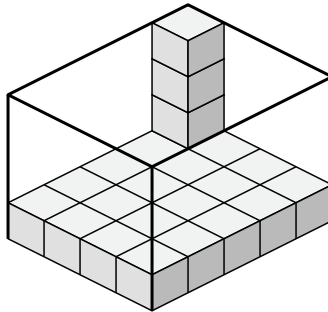
2)



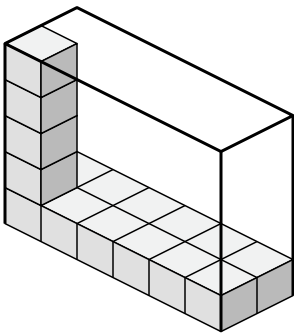
3)



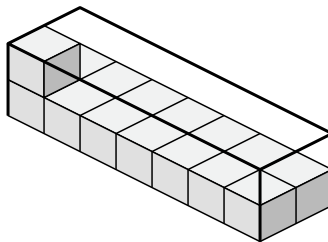
4)



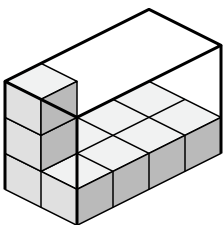
5)



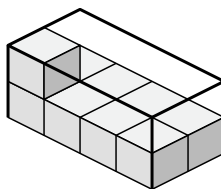
6)



7)



8)

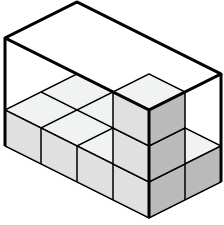


- 1. _____
- 2. _____
- 3. _____
- 4. _____
- 5. _____
- 6. _____
- 7. _____
- 8. _____

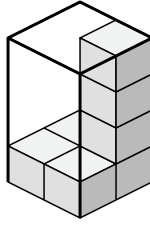


Create an expression to determine the volume of each box.

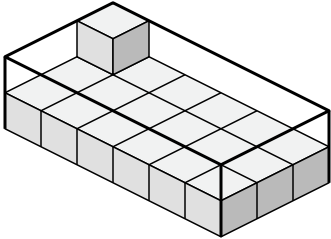
1)



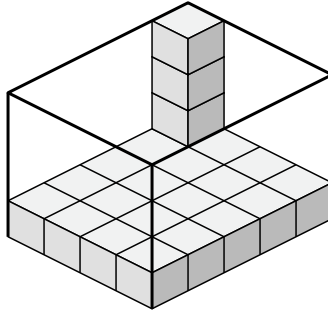
2)



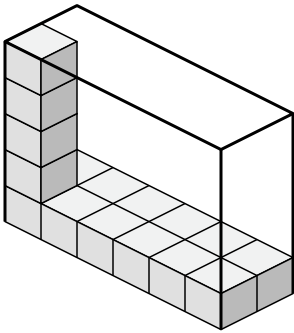
3)



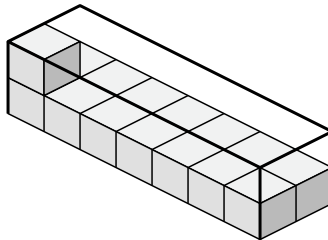
4)



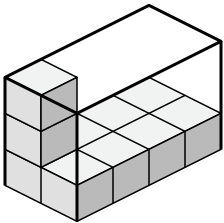
5)



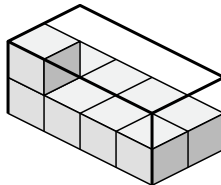
6)



7)



8)



Answers

1. 4×2×3

2. 2×2×4

3. 6×3×2

4. 4×5×4

5. 6×2×5

6. 7×2×2

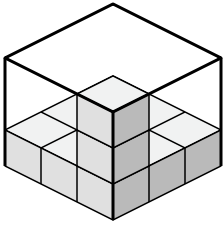
7. 2×4×3

8. 4×2×2

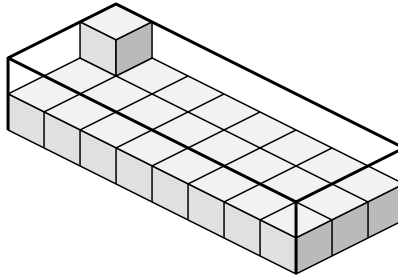


Create an expression to determine the volume of each box.

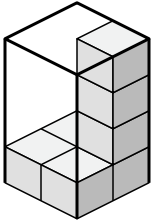
1)



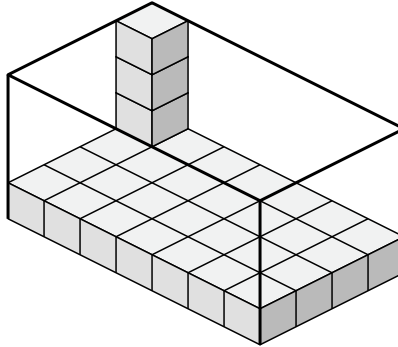
2)



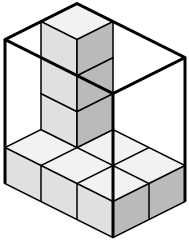
3)



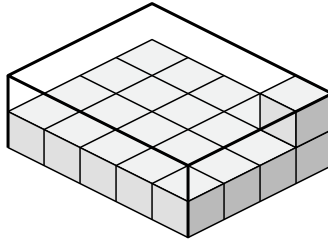
4)



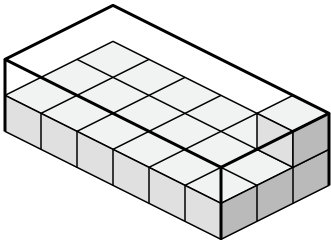
5)



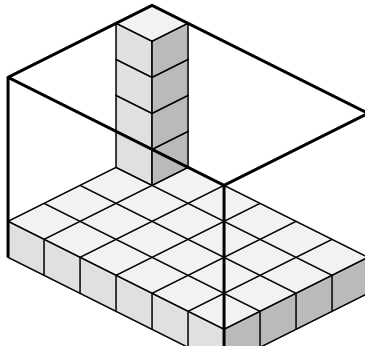
6)



7)



8)



Answers

1. _____

2. _____

3. _____

4. _____

5. _____

6. _____

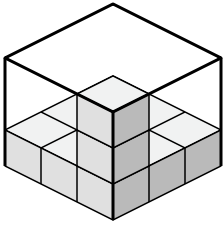
7. _____

8. _____

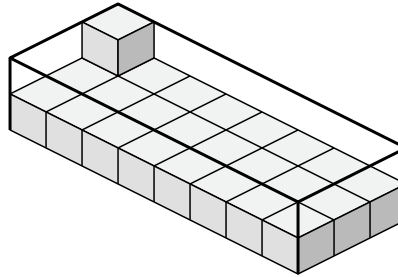


Create an expression to determine the volume of each box.

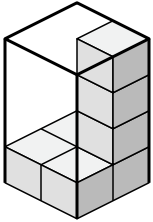
1)



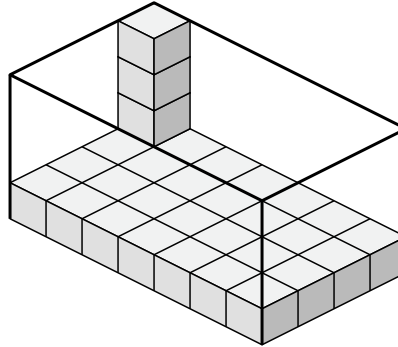
2)



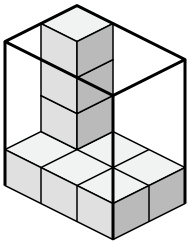
3)



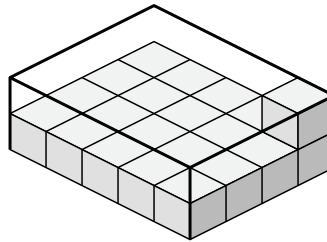
4)



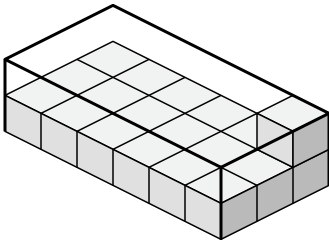
5)



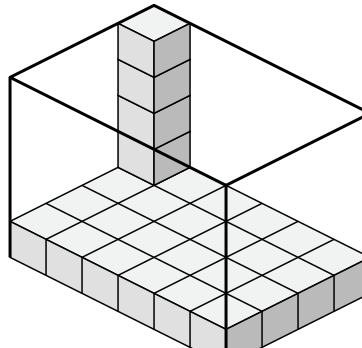
6)



7)



8)



Answers

1. 3×3×3

2. 8×3×2

3. 2×2×4

4. 7×4×4

5. 3×2×4

6. 5×4×2

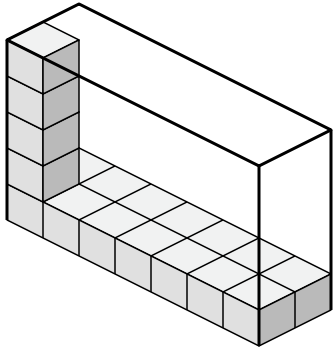
7. 6×3×2

8. 6×4×5

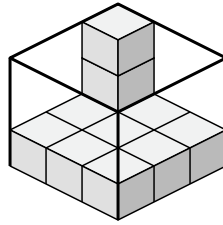


Create an expression to determine the volume of each box.

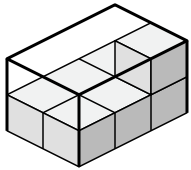
1)



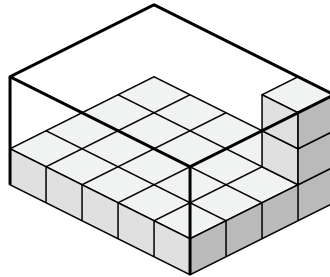
2)



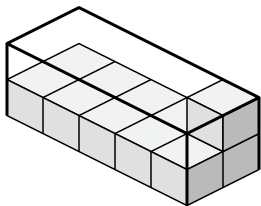
3)



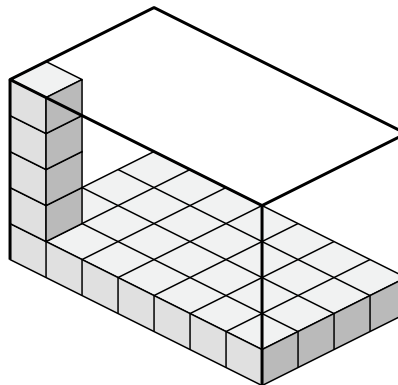
4)



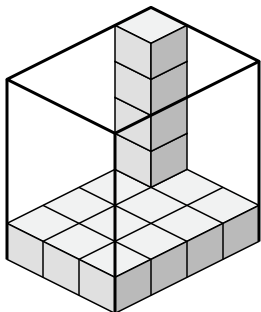
5)



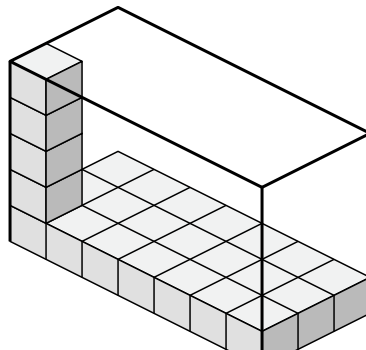
6)



7)



8)



Answers

1. _____

2. _____

3. _____

4. _____

5. _____

6. _____

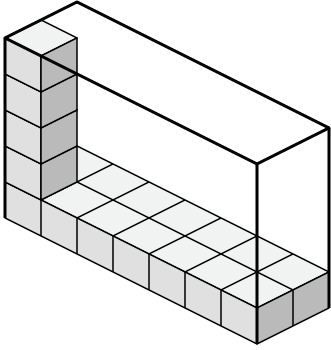
7. _____

8. _____

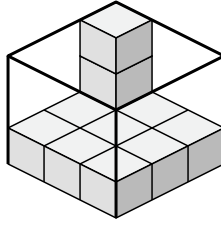


Create an expression to determine the volume of each box.

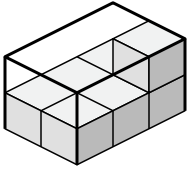
1)



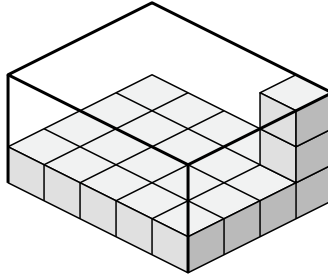
2)



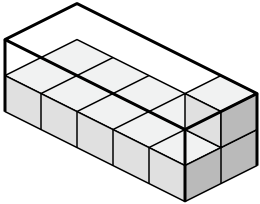
3)



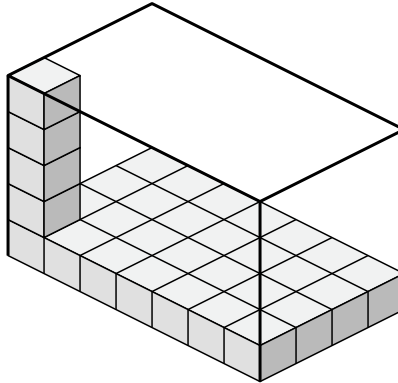
4)



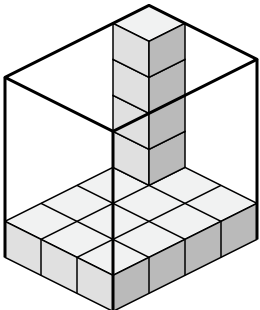
5)



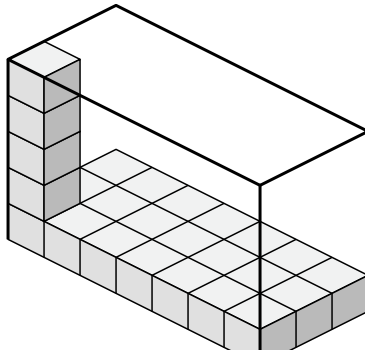
6)



7)



8)



Answers

1. 7×2×5

2. 3×3×3

3. 2×3×2

4. 5×4×3

5. 5×2×2

6. 7×4×5

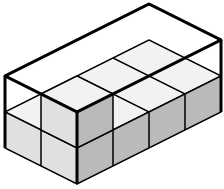
7. 3×4×5

8. 7×3×5

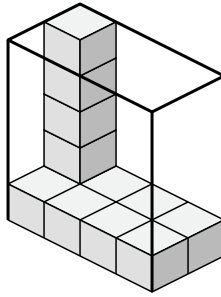


Create an expression to determine the volume of each box.

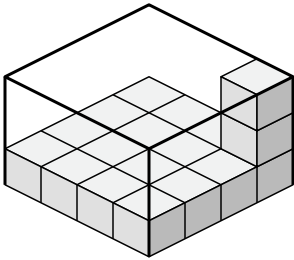
1)



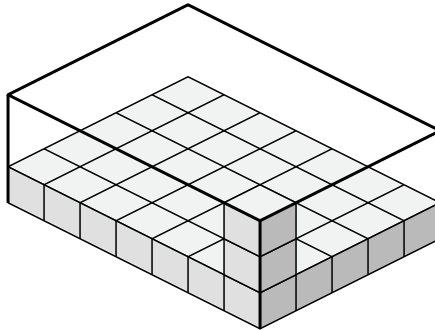
2)



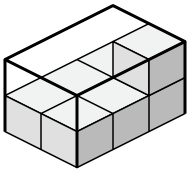
3)



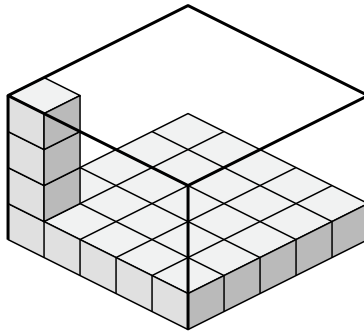
4)



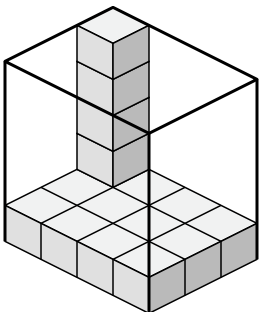
5)



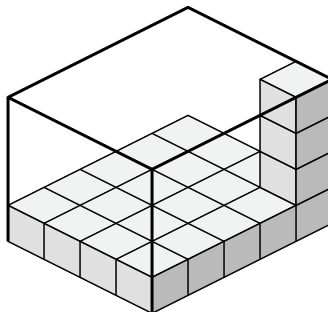
6)



7)



8)



Answers

1. _____

2. _____

3. _____

4. _____

5. _____

6. _____

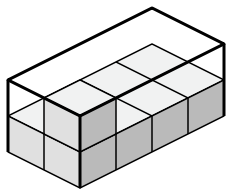
7. _____

8. _____

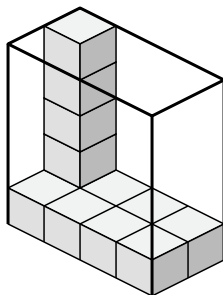


Create an expression to determine the volume of each box.

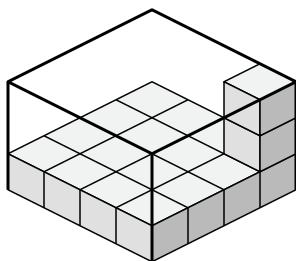
1)



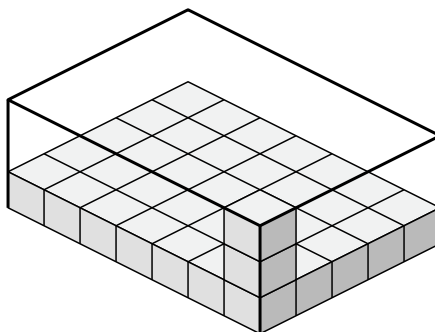
2)



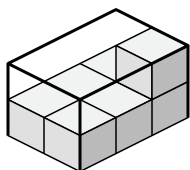
3)



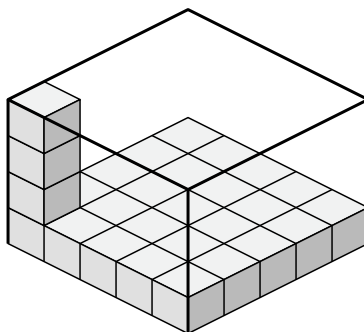
4)



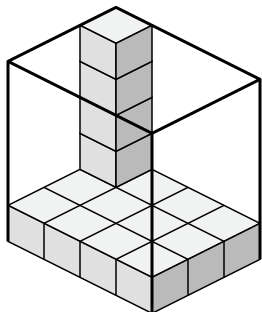
5)



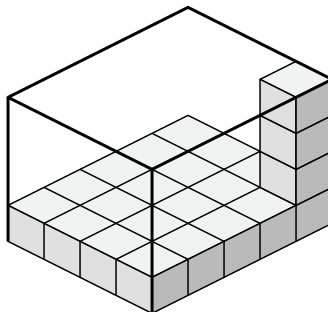
6)



7)



8)



Answers

1. 2×4×2

2. 4×2×5

3. 4×4×3

4. 7×5×3

5. 2×3×2

6. 5×5×4

7. 4×3×5

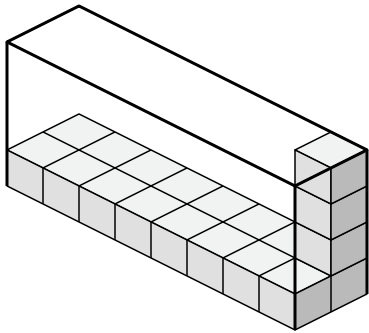
8. 4×5×4



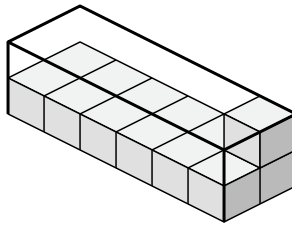
Create an expression to determine the volume of each box.

Answers

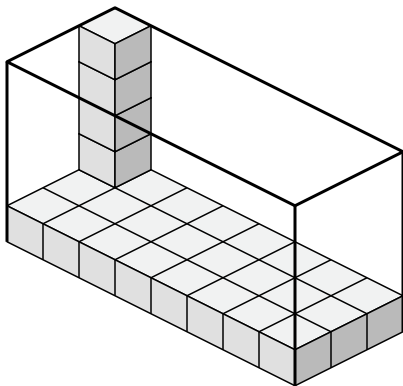
1)



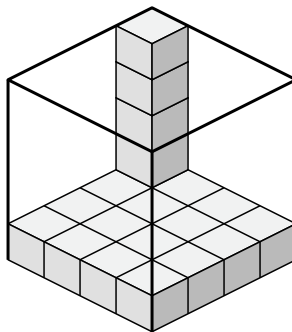
2)



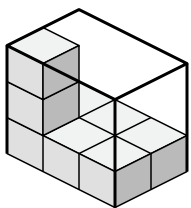
3)



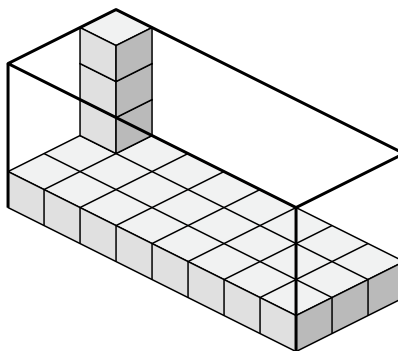
4)



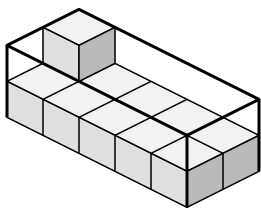
5)



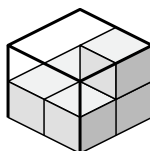
6)



7)



8)

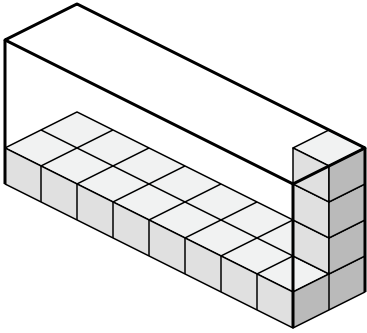


- 1. _____
- 2. _____
- 3. _____
- 4. _____
- 5. _____
- 6. _____
- 7. _____
- 8. _____

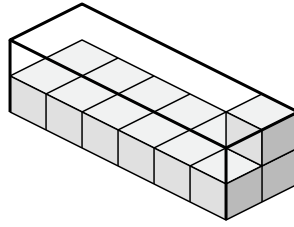


Create an expression to determine the volume of each box.

1)



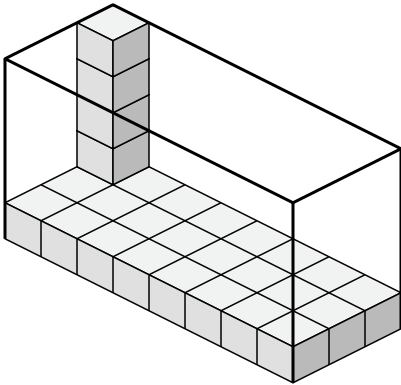
2)



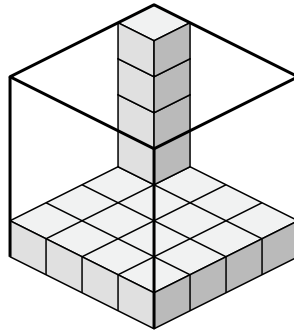
1. $8 \times 2 \times 4$

2. $6 \times 2 \times 2$

3)



4)



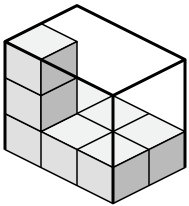
3. $8 \times 3 \times 5$

4. $4 \times 4 \times 5$

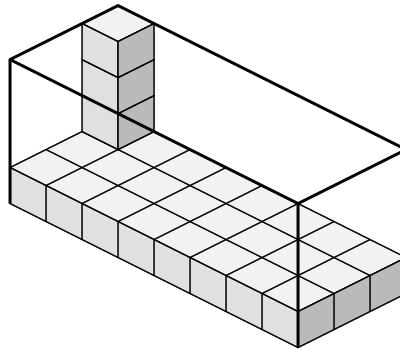
5. $3 \times 2 \times 3$

6. $8 \times 3 \times 4$

5)



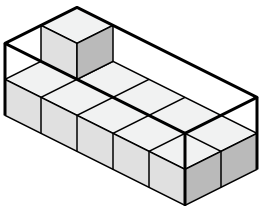
6)



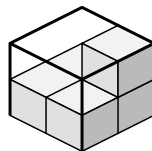
7. $5 \times 2 \times 2$

8. $2 \times 2 \times 2$

7)



8)

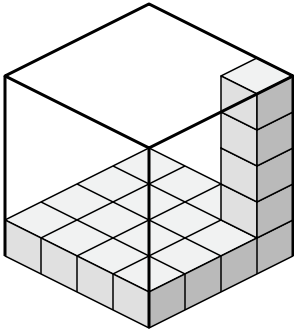




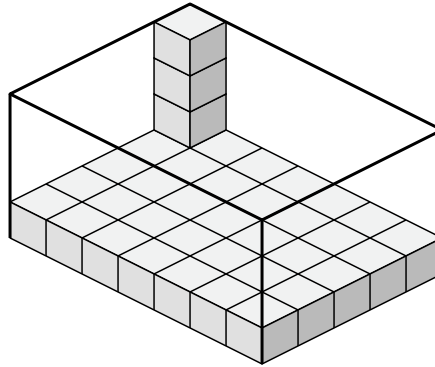
Create an expression to determine the volume of each box.

Answers

1)



2)



1. _____

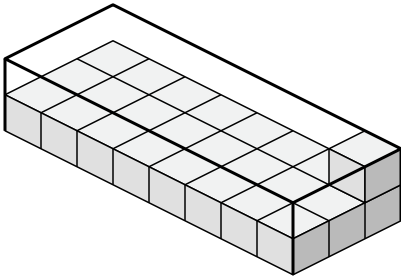
2. _____

3. _____

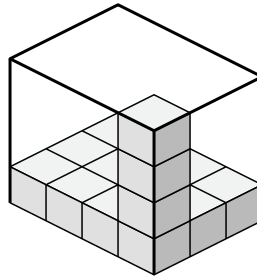
4. _____

5. _____

3)



4)

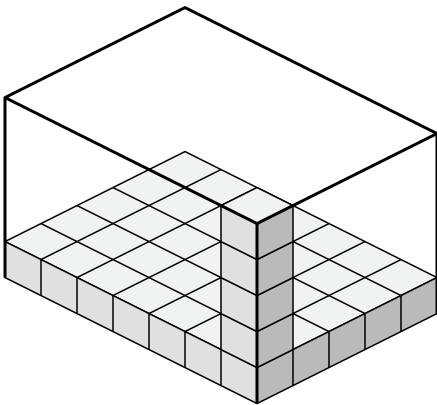


6. _____

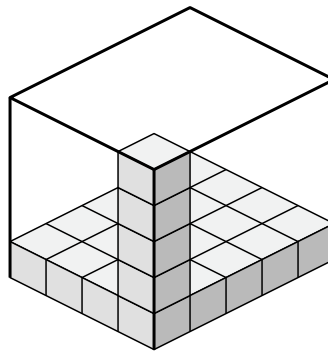
7. _____

8. _____

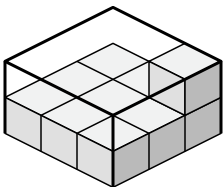
5)



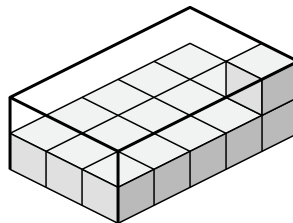
6)



7)



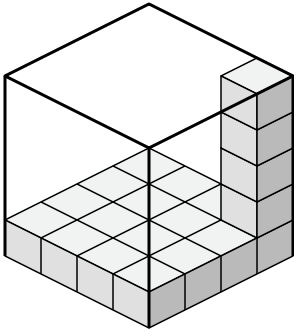
8)



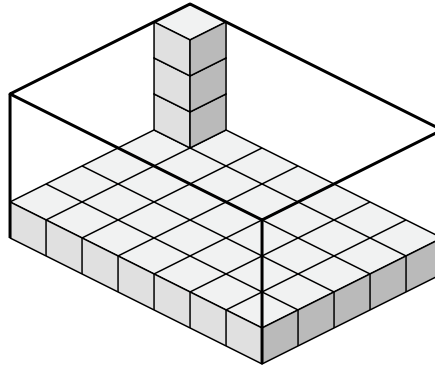


Create an expression to determine the volume of each box.

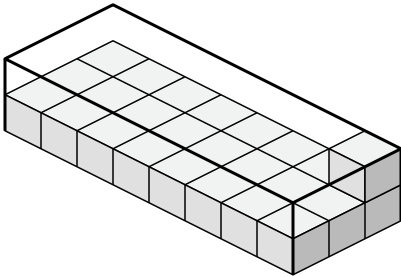
1)



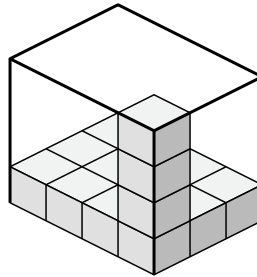
2)



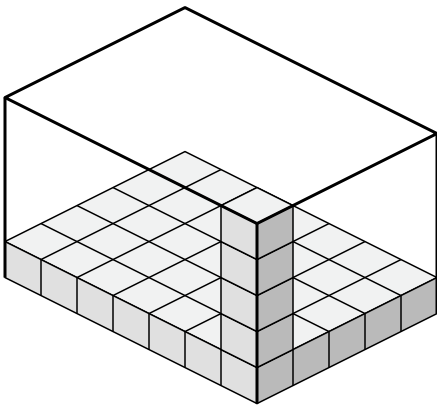
3)



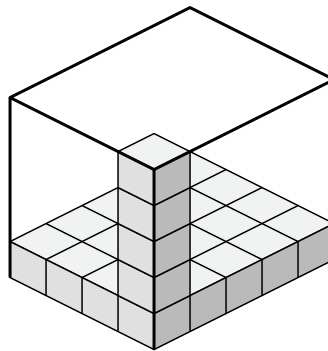
4)



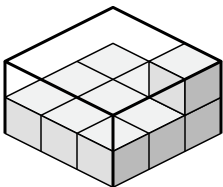
5)



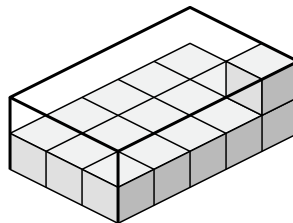
6)



7)



8)



Answers

1. 4x4x5

2. 7x5x4

3. 8x3x2

4. 4x3x4

5. 7x5x5

6. 4x5x5

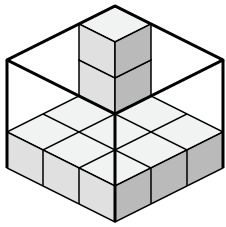
7. 3x3x2

8. 3x5x2

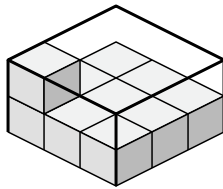


Create an expression to determine the volume of each box.

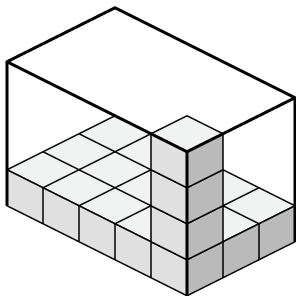
1)



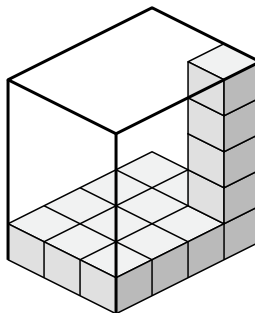
2)



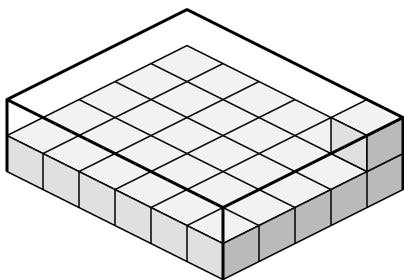
3)



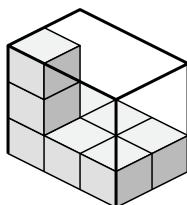
4)



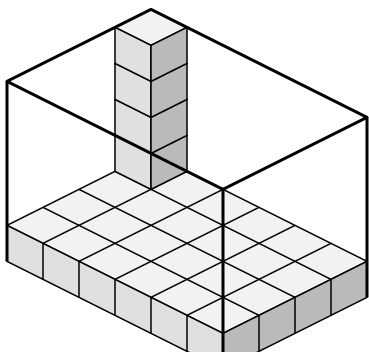
5)



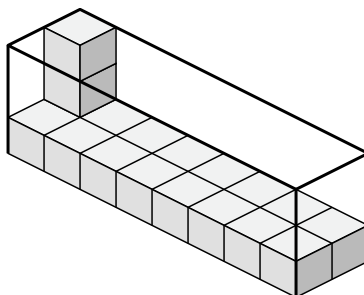
6)



7)



8)



Answers

1. _____

2. _____

3. _____

4. _____

5. _____

6. _____

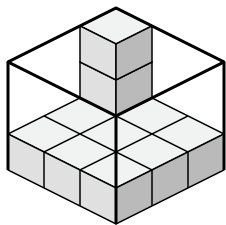
7. _____

8. _____

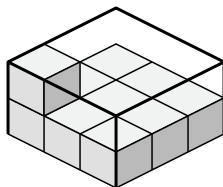


Create an expression to determine the volume of each box.

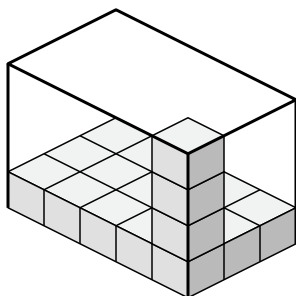
1)



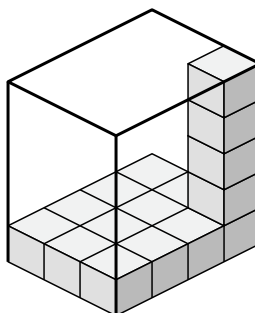
2)



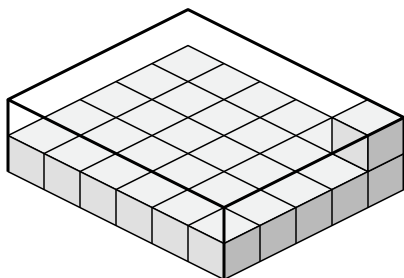
3)



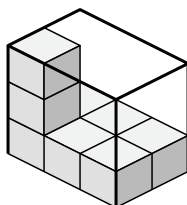
4)



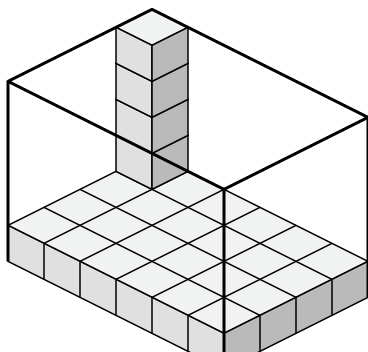
5)



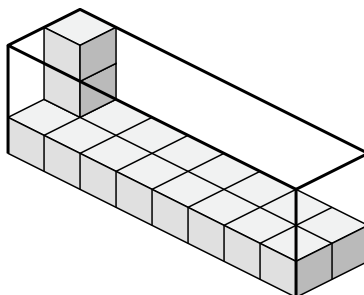
6)



7)



8)



Answers

1. 3×3×3

2. 3×3×2

3. 5×3×4

4. 3×4×5

5. 6×5×2

6. 3×2×3

7. 6×4×5

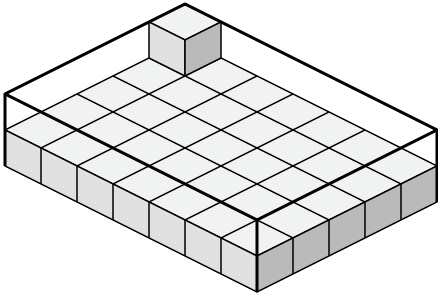
8. 8×2×3



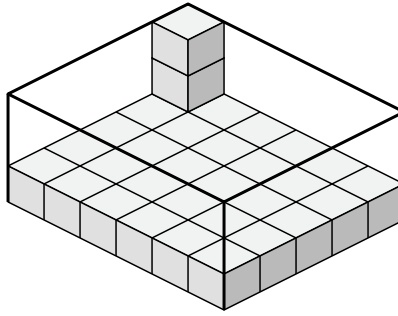
Create an expression to determine the volume of each box.

Answers

1)



2)



1. _____

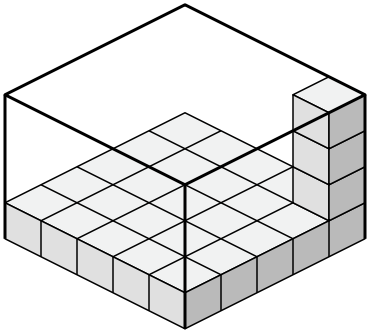
2. _____

3. _____

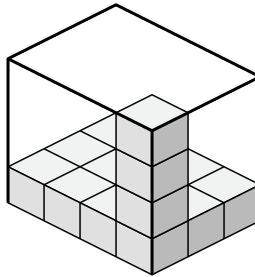
4. _____

5. _____

3)



4)

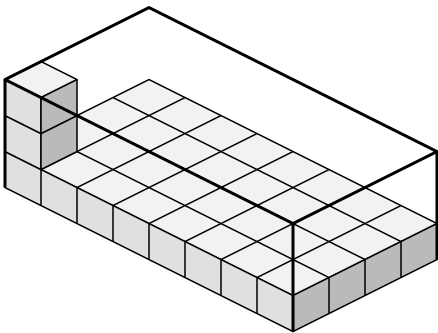


6. _____

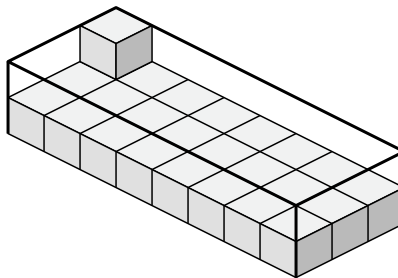
7. _____

8. _____

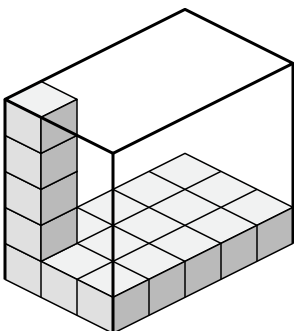
5)



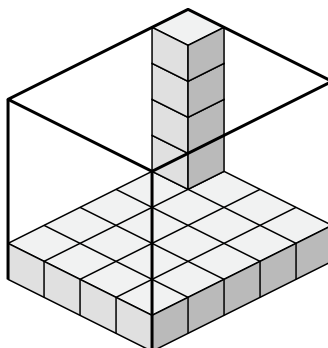
6)



7)



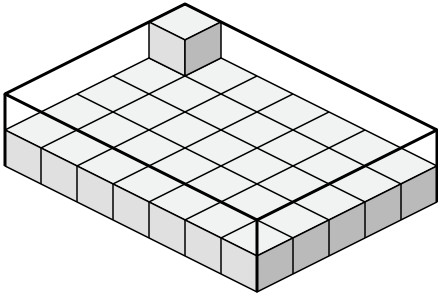
8)



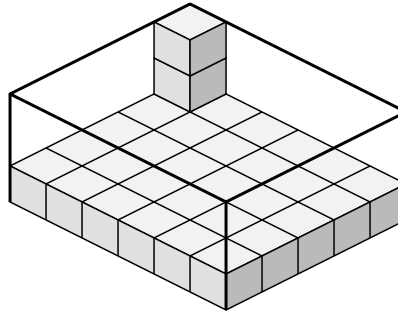


Create an expression to determine the volume of each box.

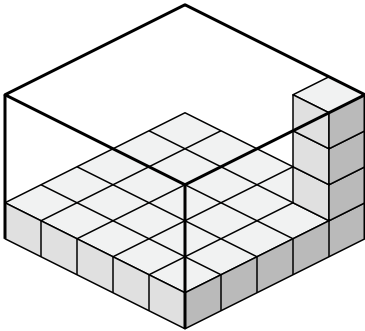
1)



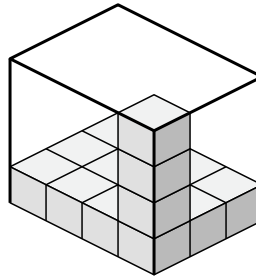
2)



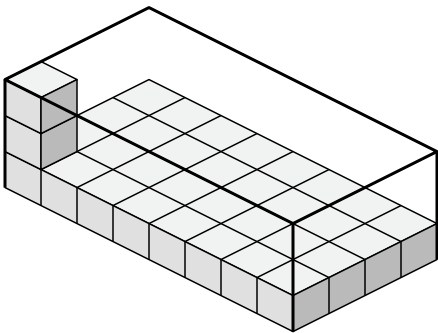
3)



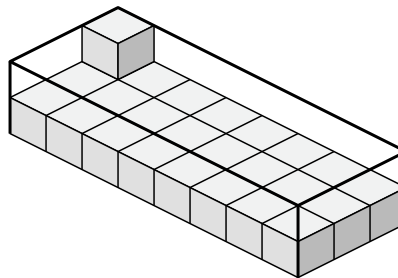
4)



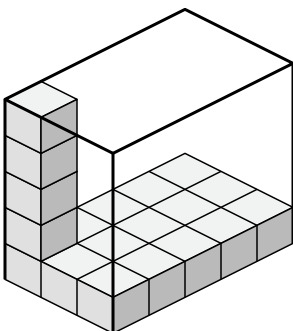
5)



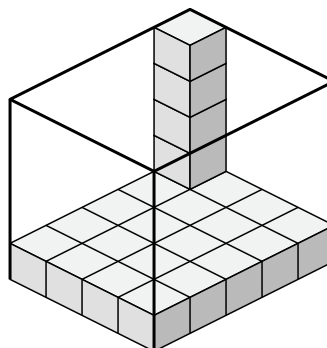
6)



7)



8)



Answers

1. $7 \times 5 \times 2$

2. $6 \times 5 \times 3$

3. $5 \times 5 \times 4$

4. $4 \times 3 \times 4$

5. $8 \times 4 \times 3$

6. $8 \times 3 \times 2$

7. $3 \times 5 \times 5$

8. $4 \times 5 \times 5$