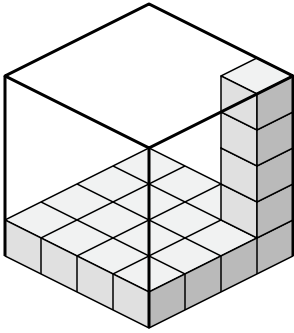




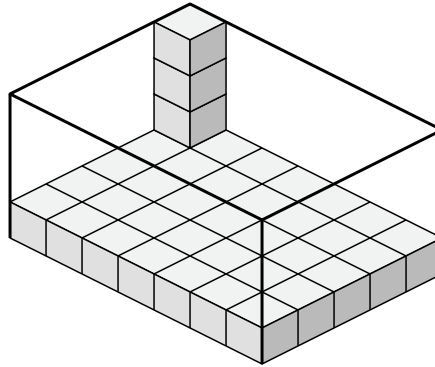
Create an expression to determine the volume of each box.

Answers

1)



2)



1. _____

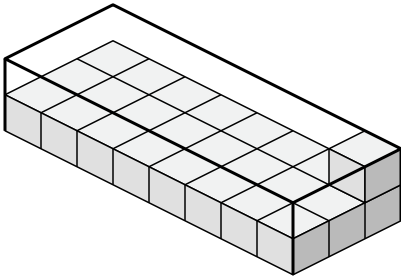
2. _____

3. _____

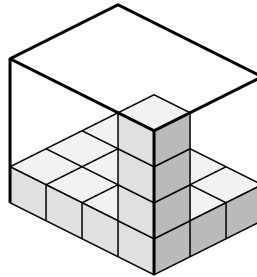
4. _____

5. _____

3)



4)

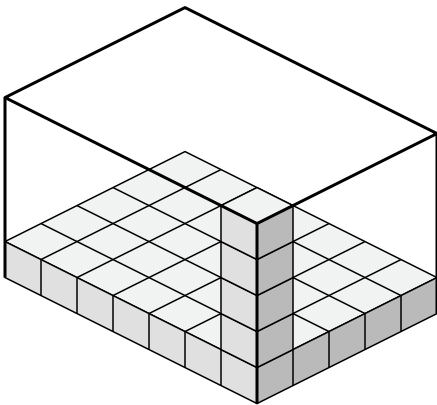


6. _____

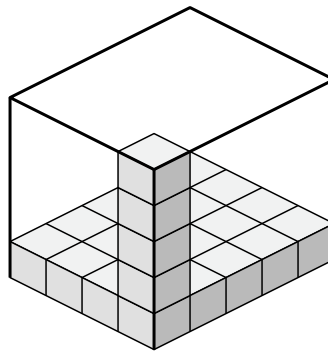
7. _____

8. _____

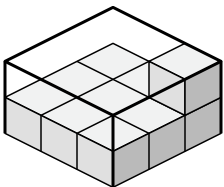
5)



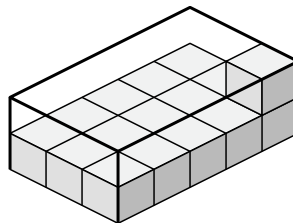
6)



7)



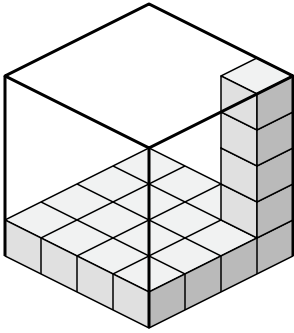
8)



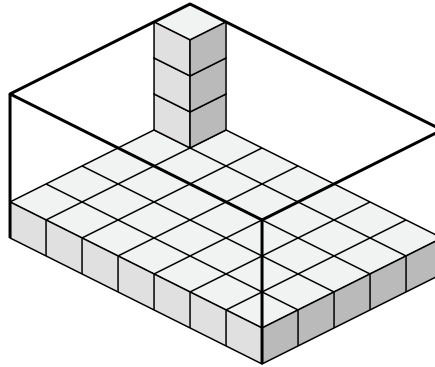


Create an expression to determine the volume of each box.

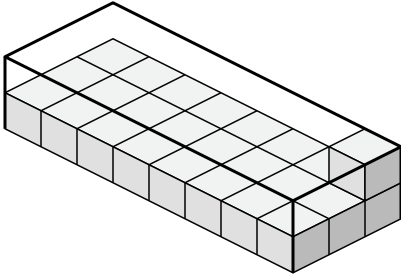
1)



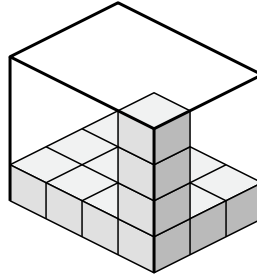
2)



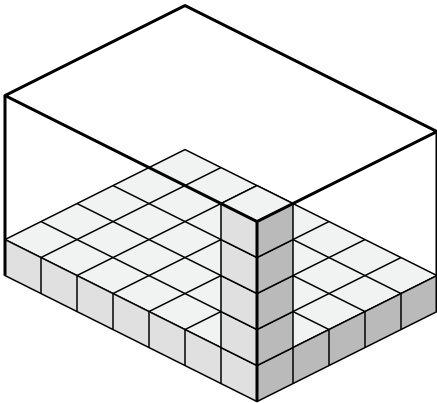
3)



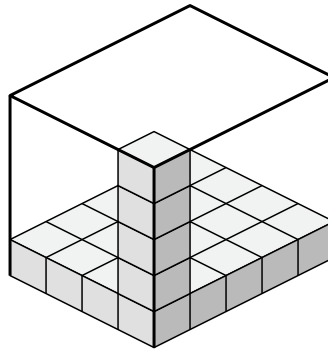
4)



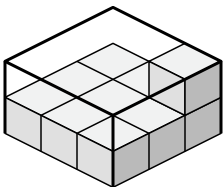
5)



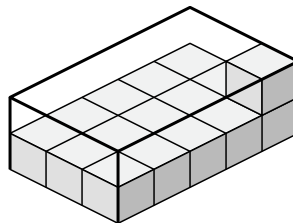
6)



7)



8)



Answers

1. $4 \times 4 \times 5$

2. $7 \times 5 \times 4$

3. $8 \times 3 \times 2$

4. $4 \times 3 \times 4$

5. $7 \times 5 \times 5$

6. $4 \times 5 \times 5$

7. $3 \times 3 \times 2$

8. $3 \times 5 \times 2$