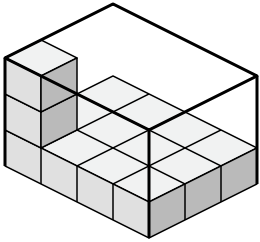


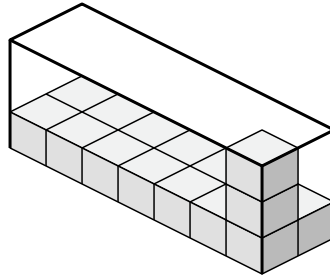


Create an expression to determine the volume of each box.

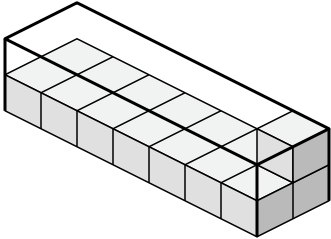
1)



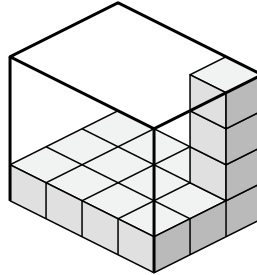
2)



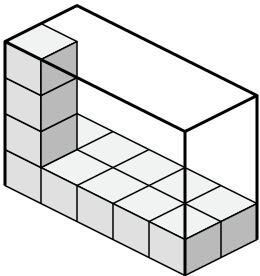
3)



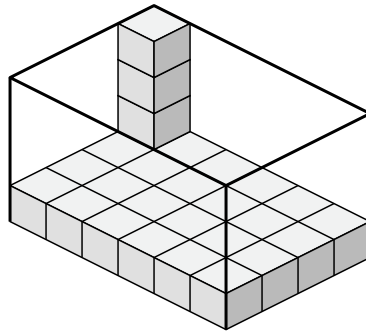
4)



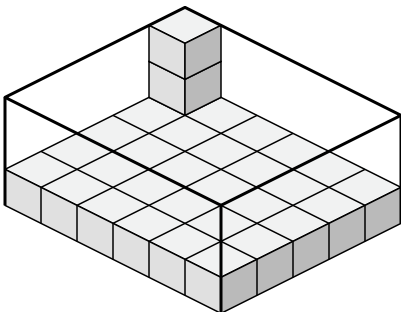
5)



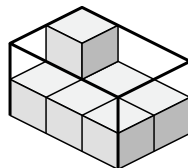
6)



7)



8)



Answers

1. \_\_\_\_\_

2. \_\_\_\_\_

3. \_\_\_\_\_

4. \_\_\_\_\_

5. \_\_\_\_\_

6. \_\_\_\_\_

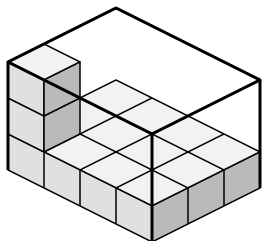
7. \_\_\_\_\_

8. \_\_\_\_\_

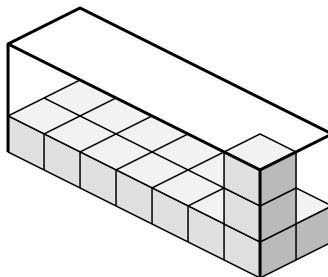


Create an expression to determine the volume of each box.

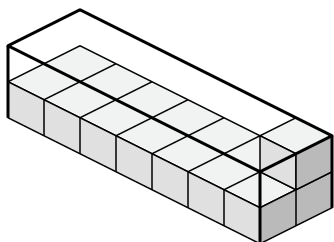
1)



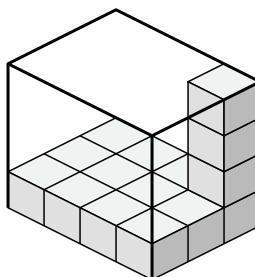
2)



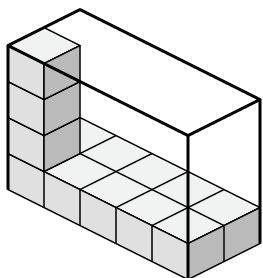
3)



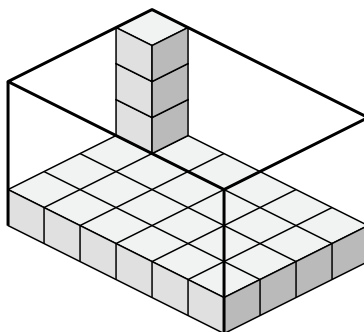
4)



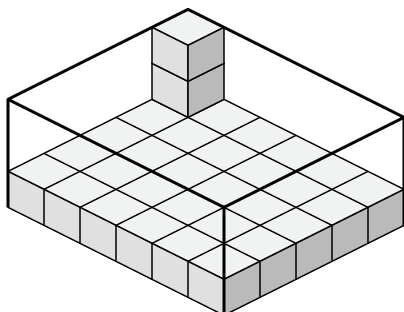
5)



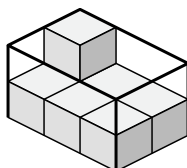
6)



7)



8)



Answers

1. 4×3×3

2. 7×2×3

3. 7×2×2

4. 4×3×4

5. 5×2×4

6. 6×4×4

7. 6×5×3

8. 3×2×2