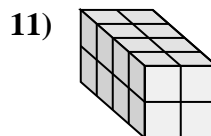
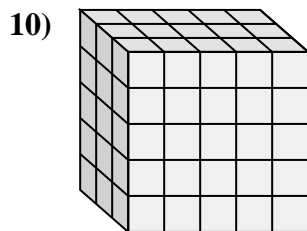
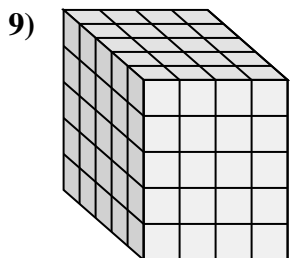
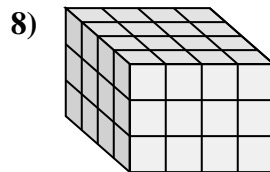
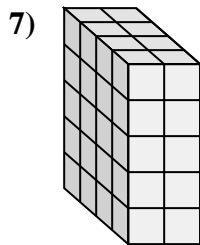
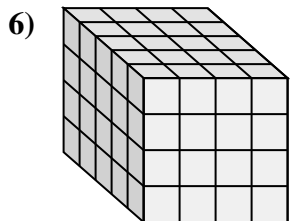
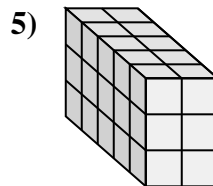
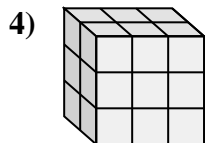
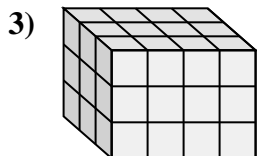
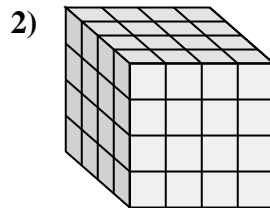
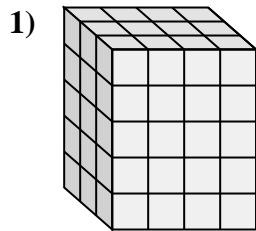
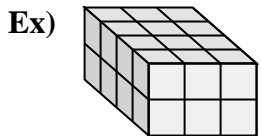




Match each problem with the equation that could represent it. Answer with the missing term and letter.



Answers

Ex. J, 4

1. _____

2. _____

3. _____

4. _____

5. _____

6. _____

7. _____

8. _____

9. _____

10. _____

11. _____

A. $4 \times 4 \times \underline{\quad} = 48$

B. $3 \times 4 \times 5 = \underline{\quad}$

C. $4 \times 2 \times 2 = \underline{\quad}$

D. $5 \times 4 \times \underline{\quad} = 100$

E. $\underline{\quad} \times 2 \times 5 = 40$

F. $5 \times 2 \times \underline{\quad} = 30$

G. $3 \times 4 \times \underline{\quad} = 36$

H. $2 \times 3 \times \underline{\quad} = 18$

I. $5 \times \underline{\quad} \times 4 = 80$

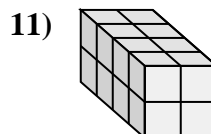
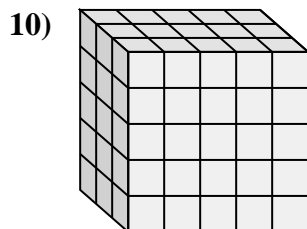
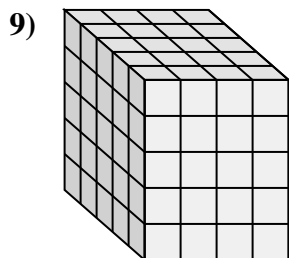
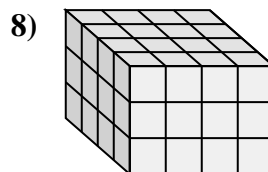
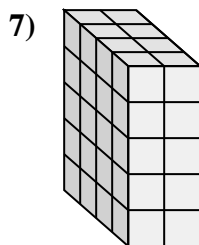
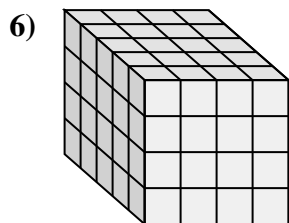
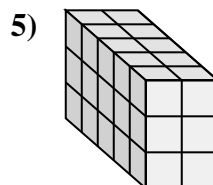
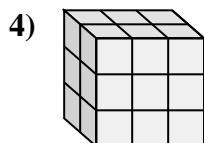
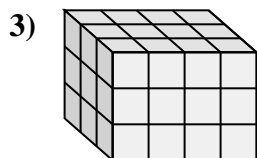
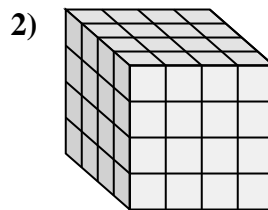
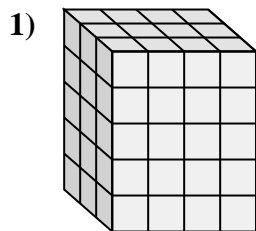
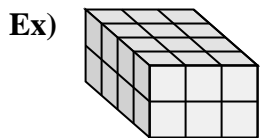
J. $\underline{\quad} \times 3 \times 2 = 24$

K. $4 \times \underline{\quad} \times 4 = 64$

L. $\underline{\quad} \times 5 \times 5 = 75$



Match each problem with the equation that could represent it. Answer with the missing term and letter.



A. $4 \times 4 \times \underline{\quad} = 48$

B. $3 \times 4 \times 5 = \underline{\quad}$

C. $4 \times 2 \times 2 = \underline{\quad}$

D. $5 \times 4 \times \underline{\quad} = 100$

E. $\underline{\quad} \times 2 \times 5 = 40$

F. $5 \times 2 \times \underline{\quad} = 30$

G. $3 \times 4 \times \underline{\quad} = 36$

H. $2 \times 3 \times \underline{\quad} = 18$

I. $5 \times \underline{\quad} \times 4 = 80$

J. $\underline{\quad} \times 3 \times 2 = 24$

K. $4 \times \underline{\quad} \times 4 = 64$

L. $\underline{\quad} \times 5 \times 5 = 75$

Answers

Ex. J, 4

1. B, 60

2. K, 4

3. G, 3

4. H, 3

5. F, 3

6. I, 4

7. E, 4

8. A, 3

9. D, 5

10. L, 3

11. C, 16