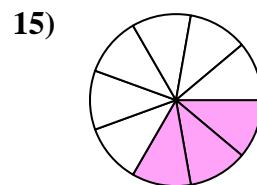
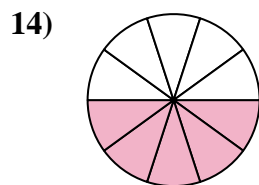
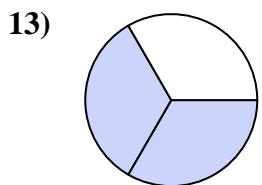
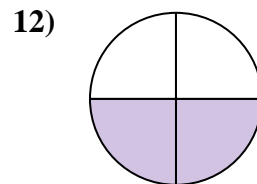
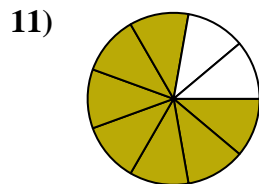
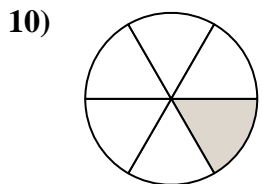
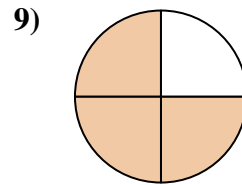
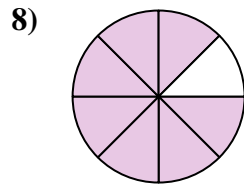
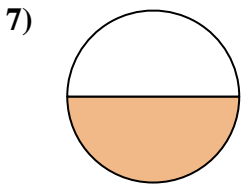
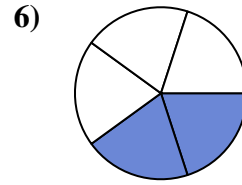
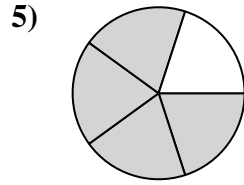
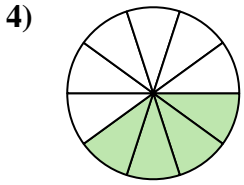
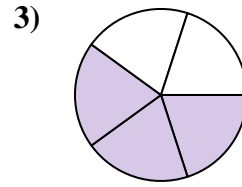
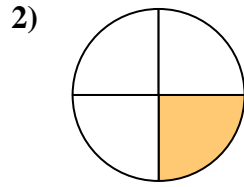
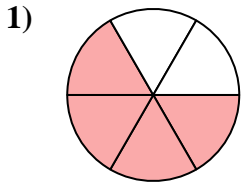




Find the angle (in degrees) of the shaded portion of the circle.

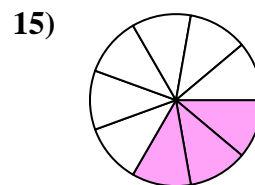
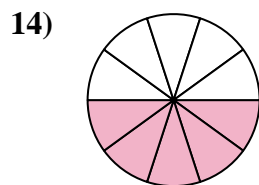
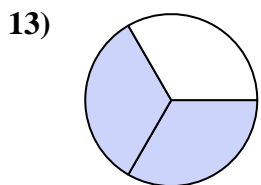
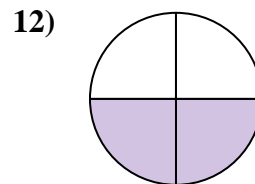
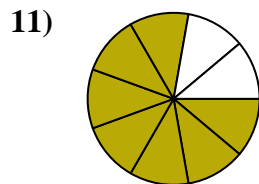
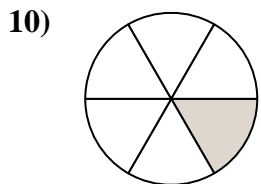
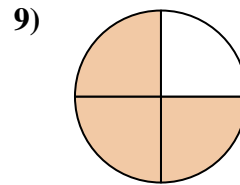
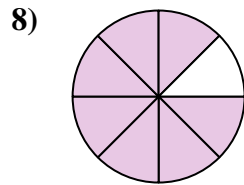
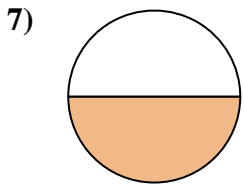
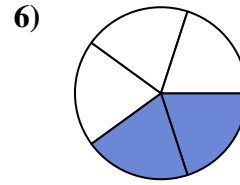
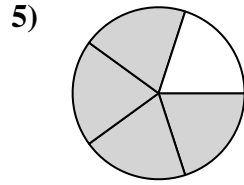
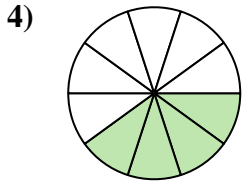
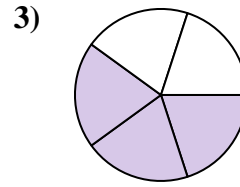
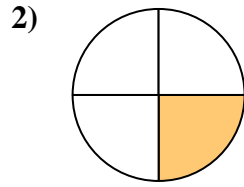
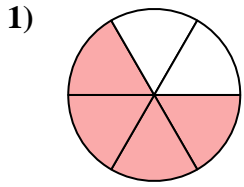
Answers



1. _____
2. _____
3. _____
4. _____
5. _____
6. _____
7. _____
8. _____
9. _____
10. _____
11. _____
12. _____
13. _____
14. _____
15. _____



Find the angle (in degrees) of the shaded portion of the circle.



Answers

1. 240

2. 90

3. 216

4. 144

5. 288

6. 144

7. 180

8. 315

9. 270

10. 60

11. 280

12. 180

13. 240

14. 180

15. 120



Find the angle (in degrees) of the shaded portion of the circle.

Answers

288

216

315

144

280

60

90

240

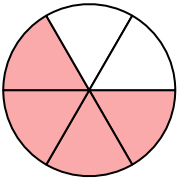
144

270

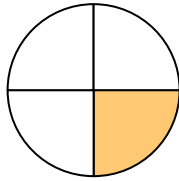
180

180

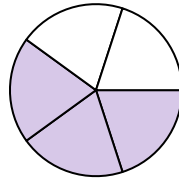
1)



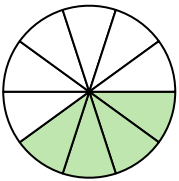
2)



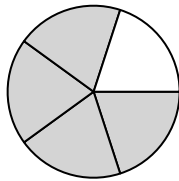
3)



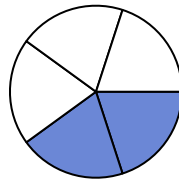
4)



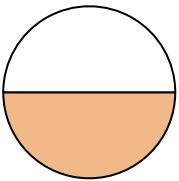
5)



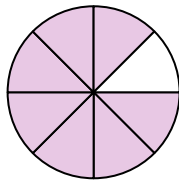
6)



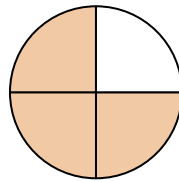
7)



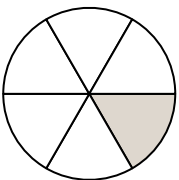
8)



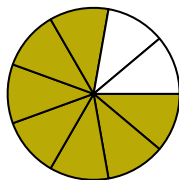
9)



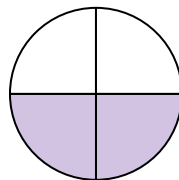
10)



11)



12)



1. _____

2. _____

3. _____

4. _____

5. _____

6. _____

7. _____

8. _____

9. _____

10. _____

11. _____

12. _____