



Solve each problem using a tape diagram.

**Answers**

**Ex)** A cable company had 756 subscribers. The ratio of regular subscribers to premium subscribers was 8:4. How many regular subscribers did they have?

Ex. 504

**1)** Adam's Ice Cream Hut had Chocolate or Vanilla shakes. On the 4th of July they sold 1,386 shakes total with the ratio of chocolate to vanilla being 5:9. How many chocolate shakes did they sell?

1. \_\_\_\_\_

2. \_\_\_\_\_

3. \_\_\_\_\_

4. \_\_\_\_\_

5. \_\_\_\_\_

**2)** A store had 880 sodas, both diet and regular. The ratio of diet sodas to regular sodas was 9:2. How many diet sodas were there?

**3)** Billy was looking at his streaming music stats. The ratio of songs he liked to disliked was 4:2. If he listened to 228 songs total how many did he like?

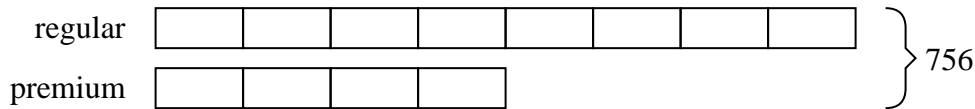
**4)** During an local election the ratio of teens to adults who voted was 5:8. If 741 people voted how many were teens?

**5)** At the fair the ratio of male to females was 7:8. If there are 930 people at the fair how many males are there?

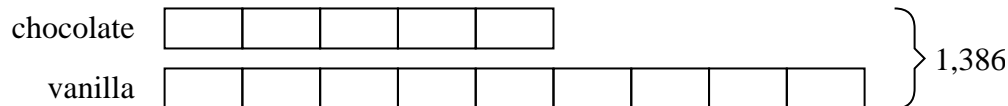


Solve each problem using a tape diagram.

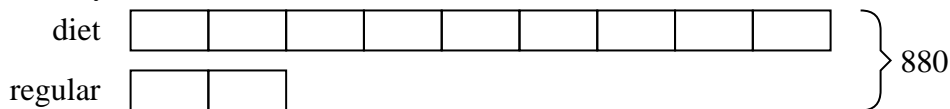
- Ex) A cable company had 756 subscribers. The ratio of regular subscribers to premium subscribers was 8:4. How many regular subscribers did they have?



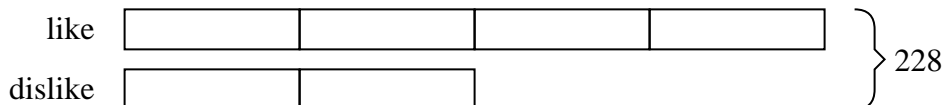
- 1) Adam's Ice Cream Hut had Chocolate or Vanilla shakes. On the 4th of July they sold 1,386 shakes total with the ratio of chocolate to vanilla being 5:9. How many chocolate shakes did they sell?



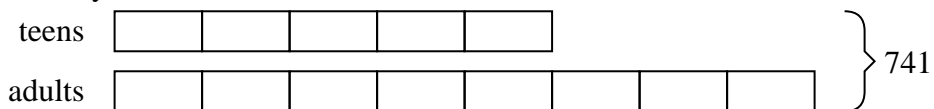
- 2) A store had 880 sodas, both diet and regular. The ratio of diet sodas to regular sodas was 9:2. How many diet sodas were there?



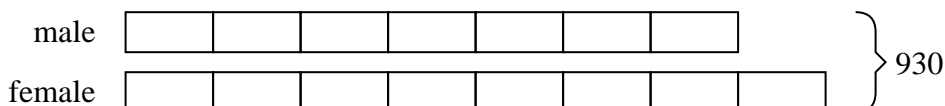
- 3) Billy was looking at his streaming music stats. The ratio of songs he liked to disliked was 4:2. If he listened to 228 songs total how many did he like?



- 4) During an local election the ratio of teens to adults who voted was 5:8. If 741 people voted how many were teens?



- 5) At the fair the ratio of male to females was 7:8. If there are 930 people at the fair how many males are there?

**Answers**Ex. 5041. 4952. 7203. 1524. 2855. 434