



Solve each problem using a tape diagram.

Answers

- 1) A store sold 50 C batteries in a day. They sold 3 as many AAA batteries as C batteries and 3 times as many AA as AAA batteries. How many batteries did they sell total?
  
  
  
  
  
  
  
  
  
  
- 2) An ice cream shop sold 37 waffle cones. They sold 8 times as many sugar cones as waffle cones and 3 times as many wafer cones as sugar cones. How many cones did they sell total?
  
  
  
  
  
  
  
  
  
  
- 3) A school principal was looking over grades. In math 22 students scored a C. 3 times as many students scored a B. And 6 times as many students scored an A as scored a B. How many students scored an A, B or C?
  
  
  
  
  
  
  
  
  
  
- 4) On week 1 a football player jogged for 29 minutes. On week 2 he jogged for 2 times as long. On week 3 he jogged for 5 times as long as he jogged on week 2. How many minute did he jog across all 3 weeks?
  
  
  
  
  
  
  
  
  
  
- 5) An ice cream shop sold 41 waffle cones. They sold 2 times as many sugar cones as waffle cones and 2 times as many wafer cones as sugar cones. How many cones did they sell total?

1. \_\_\_\_\_

2. \_\_\_\_\_

3. \_\_\_\_\_

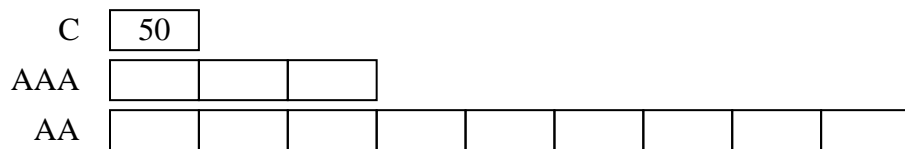
4. \_\_\_\_\_

5. \_\_\_\_\_

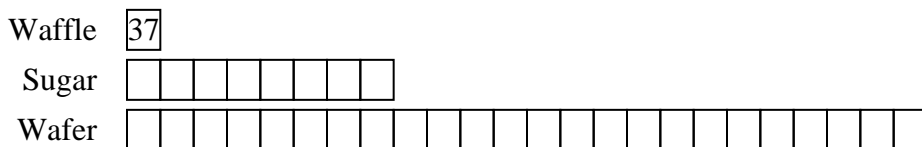


Solve each problem using a tape diagram.

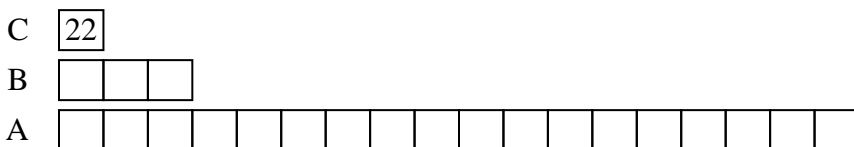
- 1) A store sold 50 C batteries in a day. They sold 3 as many AAA batteries as C batteries and 3 times as many AA as AAA batteries. How many batteries did they sell total?




- 2) An ice cream shop sold 37 waffle cones. They sold 8 times as many sugar cones as waffle cones and 3 times as many wafer cones as sugar cones. How many cones did they sell total?



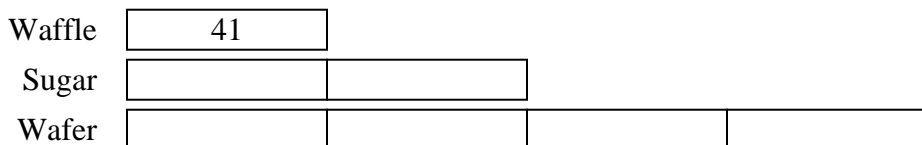
- 3) A school principal was looking over grades. In math 22 students scored a C. 3 times as many students scored a B. And 6 times as many students scored an A as scored a B. How many students scored an A, B or C?



- 4) On week 1 a football player jogged for 29 minutes. On week 2 he jogged for 2 times as long. On week 3 he jogged for 5 times as long as he jogged on week 2. How many minute did he jog across all 3 weeks?



- 5) An ice cream shop sold 41 waffle cones. They sold 2 times as many sugar cones as waffle cones and 2 times as many wafer cones as sugar cones. How many cones did they sell total?



Answers

1. 650

2. 1221

3. 484

4. 377

5. 287



Solve each problem using a tape diagram.

Answers

1) On week 1 a football player jogged for 46 minutes. On week 2 he jogged for 7 times as long. On week 3 he jogged for 9 times as long as he jogged on week 2. How many minute did he jog across all 3 weeks?

1. \_\_\_\_\_

2. \_\_\_\_\_

3. \_\_\_\_\_

4. \_\_\_\_\_

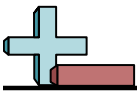
2) In one day a restaurant used 11 knives. They also used 2 as many forks as they used knives. And 2 times as many spoons as forks. How many utensils do they use in a day?

5. \_\_\_\_\_

3) Chef Cody buys 35 carrots. He buys 2 times as many potatoes as carrots and 3 times as many tomatoes as potatoes. How many vegetables did he buy all together?

4) An ice cream shop sold 18 waffle cones. They sold 4 times as many sugar cones as waffle cones and 2 times as many wafer cones as sugar cones. How many cones did they sell total?

5) A school principal was looking over grades. In math 12 students scored a C. 3 times as many students scored a B. And 3 times as many students scored an A as scored a B. How many students scored an A, B or C?



Solve each problem using a tape diagram.

- 1) On week 1 a football player jogged for 46 minutes. On week 2 he jogged for 7 times as long. On week 3 he jogged for 9 times as long as he jogged on week 2. How many minutes did he jog across all 3 weeks?

Week 1

Week 2

Week 3

- 2) In one day a restaurant used 11 knives. They also used 2 as many forks as they used knives. And 2 times as many spoons as forks. How many utensils do they use in a day?

knives

forks

spoons

- 3) Chef Cody buys 35 carrots. He buys 2 times as many potatoes as carrots and 3 times as many tomatoes as potatoes. How many vegetables did he buy all together?

Carrots

Potatoes

Tomatoes

- 4) An ice cream shop sold 18 waffle cones. They sold 4 times as many sugar cones as waffle cones and 2 times as many wafer cones as sugar cones. How many cones did they sell total?

Waffle

Sugar

Wafer

- 5) A school principal was looking over grades. In math 12 students scored a C. 3 times as many students scored a B. And 3 times as many students scored an A as scored a B. How many students scored an A, B or C?

C

B

A

**Answers**

1. **3266**

2. **77**

3. **315**

4. **234**

5. **156**



Solve each problem using a tape diagram.

Answers

- 1) On week 1 a football player jogged for 18 minutes. On week 2 he jogged for 3 times as long. On week 3 he jogged for 2 times as long as he jogged on week 2. How many minutes did he jog across all 3 weeks?
  
- 2) An ice cream shop sold 30 waffle cones. They sold 3 times as many sugar cones as waffle cones and 3 times as many wafer cones as sugar cones. How many cones did they sell total?
  
- 3) In one day a restaurant used 22 knives. They also used 3 as many forks as they used knives. And 2 times as many spoons as forks. How many utensils do they use in a day?
  
- 4) An ice cream shop sold 27 waffle cones. They sold 4 times as many sugar cones as waffle cones and 8 times as many wafer cones as sugar cones. How many cones did they sell total?
  
- 5) Chef Cody buys 29 carrots. He buys 4 times as many potatoes as carrots and 7 times as many tomatoes as potatoes. How many vegetables did he buy all together?

1. \_\_\_\_\_

2. \_\_\_\_\_

3. \_\_\_\_\_

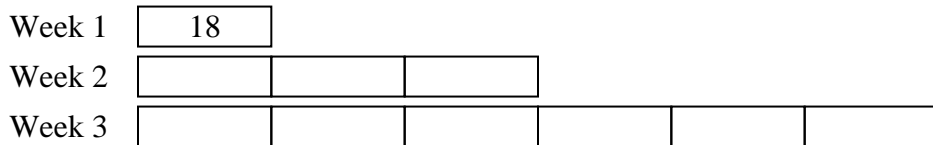
4. \_\_\_\_\_

5. \_\_\_\_\_

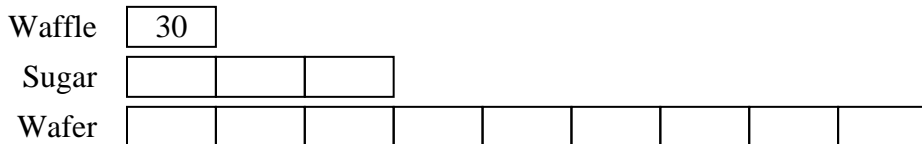


Solve each problem using a tape diagram.

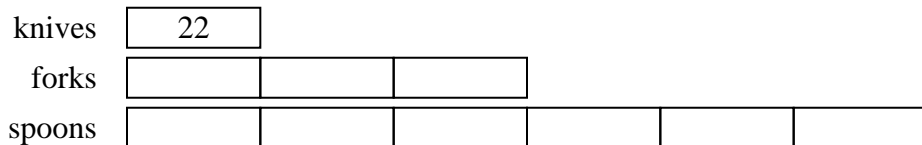
- 1) On week 1 a football player jogged for 18 minutes. On week 2 he jogged for 3 times as long. On week 3 he jogged for 2 times as long as he jogged on week 2. How many minute did he jog across all 3 weeks?



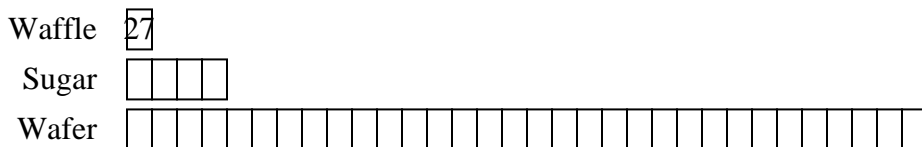
- 2) An ice cream shop sold 30 waffle cones. They sold 3 times as many sugar cones as waffle cones and 3 times as many wafer cones as sugar cones. How many cones did they sell total?



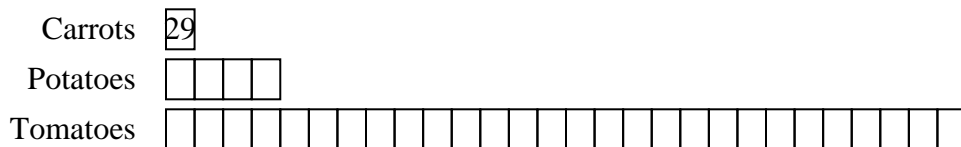
- 3) In one day a restaurant used 22 knives. They also used 3 as many forks as they used knives. And 2 times as many spoons as forks. How many utensils do they use in a day?



- 4) An ice cream shop sold 27 waffle cones. They sold 4 times as many sugar cones as waffle cones and 8 times as many wafer cones as sugar cones. How many cones did they sell total?



- 5) Chef Cody buys 29 carrots. He buys 4 times as many potatoes as carrots and 7 times as many tomatoes as potatoes. How many vegetables did he buy all together?



Answers

1. 180

2. 390

3. 220

4. 999

5. 957



Solve each problem using a tape diagram.

**Answers**

- 1) An ice cream shop sold 29 waffle cones. They sold 2 times as many sugar cones as waffle cones and 3 times as many wafer cones as sugar cones. How many cones did they sell total?
  
- 2) In one day a restaurant used 50 knives. They also used 3 as many forks as they used knives. And 2 times as many spoons as forks. How many utensils do they use in a day?
  
- 3) An ice cream shop sold 28 waffle cones. They sold 3 times as many sugar cones as waffle cones and 9 times as many wafer cones as sugar cones. How many cones did they sell total?
  
- 4) On week 1 a football player jogged for 13 minutes. On week 2 he jogged for 4 times as long. On week 3 he jogged for 3 times as long as he jogged on week 2. How many minute did he jog across all 3 weeks?
  
- 5) A school principal was looking over grades. In math 40 students scored a C. 4 times as many students scored a B. And 7 times as many students scored an A as scored a B. How many students scored an A, B or C?

1. \_\_\_\_\_

2. \_\_\_\_\_

3. \_\_\_\_\_

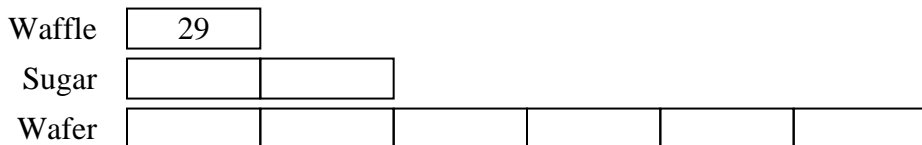
4. \_\_\_\_\_

5. \_\_\_\_\_

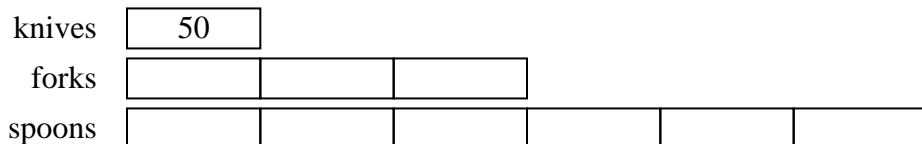


Solve each problem using a tape diagram.

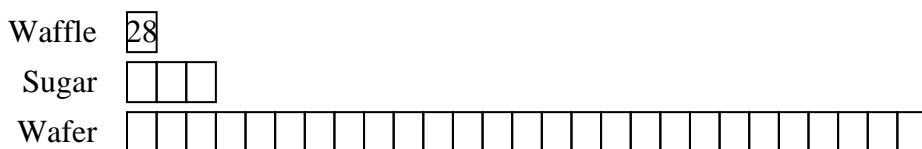
- 1) An ice cream shop sold 29 waffle cones. They sold 2 times as many sugar cones as waffle cones and 3 times as many wafer cones as sugar cones. How many cones did they sell total?



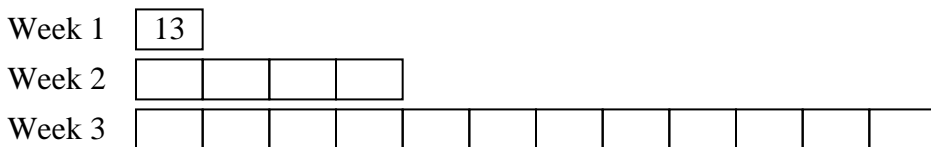
- 2) In one day a restaurant used 50 knives. They also used 3 as many forks as they used knives. And 2 times as many spoons as forks. How many utensils do they use in a day?



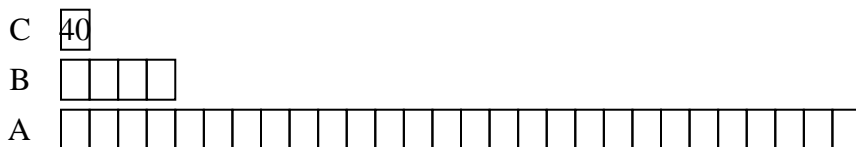
- 3) An ice cream shop sold 28 waffle cones. They sold 3 times as many sugar cones as waffle cones and 9 times as many wafer cones as sugar cones. How many cones did they sell total?



- 4) On week 1 a football player jogged for 13 minutes. On week 2 he jogged for 4 times as long. On week 3 he jogged for 3 times as long as he jogged on week 2. How many minute did he jog across all 3 weeks?



- 5) A school principal was looking over grades. In math 40 students scored a C. 4 times as many students scored a B. And 7 times as many students scored an A as scored a B. How many students scored an A, B or C?



Answers

1. 261

2. 500

3. 868

4. 221

5. 1320





Solve each problem using a tape diagram.

Answers

1) On week 1 a football player jogged for 37 minutes. On week 2 he jogged for 7 times as long. On week 3 he jogged for 4 times as long as he jogged on week 2. How many minute did he jog across all 3 weeks?

1. \_\_\_\_\_

2) A school principal was looking over grades. In math 30 students scored a C. 2 times as many students scored a B. And 2 times as many students scored an A as scored a B. How many students scored an A, B or C?

2. \_\_\_\_\_

3. \_\_\_\_\_

4. \_\_\_\_\_

5. \_\_\_\_\_

3) An ice cream shop sold 19 waffle cones. They sold 5 times as many sugar cones as waffle cones and 6 times as many wafer cones as sugar cones. How many cones did they sell total?

4) Chef Paul buys 20 carrots. He buys 5 times as many potatoes as carrots and 7 times as many tomatoes as potatoes. How many vegetables did he buy all together?

5) A store sold 14 C batteries in a day. They sold 2 as many AAA batteries as C batteries and 2 times as many AA as AAA batteries. How many batteries did they sell total?





Solve each problem using a tape diagram.

Answers

1) A school principal was looking over grades. In math 29 students scored a C. 2 times as many students scored a B. And 3 times as many students scored an A as scored a B. How many students scored an A, B or C?

1. \_\_\_\_\_

2) On week 1 a football player jogged for 22 minutes. On week 2 he jogged for 3 times as long. On week 3 he jogged for 2 times as long as he jogged on week 2. How many minute did he jog across all 3 weeks?

2. \_\_\_\_\_

3. \_\_\_\_\_

3) In one day a restaurant used 43 knives. They also used 2 as many forks as they used knives. And 3 times as many spoons as forks. How many utensils do they use in a day?

4. \_\_\_\_\_

5. \_\_\_\_\_

4) On week 1 a football player jogged for 33 minutes. On week 2 he jogged for 6 times as long. On week 3 he jogged for 8 times as long as he jogged on week 2. How many minute did he jog across all 3 weeks?

5) A school principal was looking over grades. In math 41 students scored a C. 4 times as many students scored a B. And 9 times as many students scored an A as scored a B. How many students scored an A, B or C?





Solve each problem using a tape diagram.

Answers

1) A school principal was looking over grades. In math 34 students scored a C. 4 times as many students scored a B. And 2 times as many students scored an A as scored a B. How many students scored an A, B or C?

1. \_\_\_\_\_

2. \_\_\_\_\_

3. \_\_\_\_\_

4. \_\_\_\_\_

5. \_\_\_\_\_

2) On week 1 a football player jogged for 24 minutes. On week 2 he jogged for 4 times as long. On week 3 he jogged for 8 times as long as he jogged on week 2. How many minute did he jog across all 3 weeks?

3) A store sold 44 C batteries in a day. They sold 8 as many AAA batteries as C batteries and 8 times as many AA as AAA batteries. How many batteries did they sell total?

4) In one day a restaurant used 39 knives. They also used 4 as many forks as they used knives. And 3 times as many spoons as forks. How many utensils do they use in a day?

5) In one day a restaurant used 16 knives. They also used 2 as many forks as they used knives. And 9 times as many spoons as forks. How many utensils do they use in a day?





Solve each problem using a tape diagram.

Answers

1) A school principal was looking over grades. In math 40 students scored a C. 9 times as many students scored a B. And 9 times as many students scored an A as scored a B. How many students scored an A, B or C?

1. \_\_\_\_\_

2. \_\_\_\_\_

3. \_\_\_\_\_

4. \_\_\_\_\_

2) Chef Edward buys 42 carrots. He buys 2 times as many potatoes as carrots and 4 times as many tomatoes as potatoes. How many vegetables did he buy all together?

5. \_\_\_\_\_

3) A store sold 26 C batteries in a day. They sold 2 as many AAA batteries as C batteries and 3 times as many AA as AAA batteries. How many batteries did they sell total?

4) An ice cream shop sold 19 waffle cones. They sold 2 times as many sugar cones as waffle cones and 2 times as many wafer cones as sugar cones. How many cones did they sell total?

5) An ice cream shop sold 27 waffle cones. They sold 6 times as many sugar cones as waffle cones and 4 times as many wafer cones as sugar cones. How many cones did they sell total?







Solve each problem using a tape diagram.

Answers

1) A store sold 47 C batteries in a day. They sold 6 as many AAA batteries as C batteries and 5 times as many AA as AAA batteries. How many batteries did they sell total?

1. \_\_\_\_\_

2) Chef Luke buys 28 carrots. He buys 3 times as many potatoes as carrots and 3 times as many tomatoes as potatoes. How many vegetables did he buy all together?

2. \_\_\_\_\_

3. \_\_\_\_\_

3) In one day a restaurant used 24 knives. They also used 6 as many forks as they used knives. And 2 times as many spoons as forks. How many utensils do they use in a day?

4. \_\_\_\_\_

5. \_\_\_\_\_

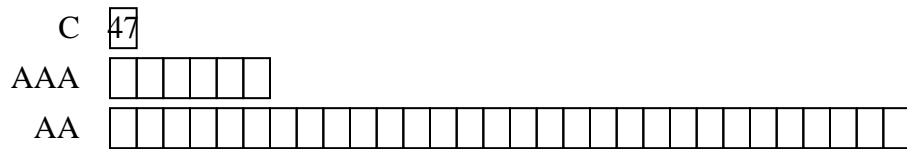
4) In one day a restaurant used 18 knives. They also used 4 as many forks as they used knives. And 3 times as many spoons as forks. How many utensils do they use in a day?

5) Chef George buys 25 carrots. He buys 7 times as many potatoes as carrots and 6 times as many tomatoes as potatoes. How many vegetables did he buy all together?



Solve each problem using a tape diagram.

- 1) A store sold 47 C batteries in a day. They sold 6 as many AAA batteries as C batteries and 5 times as many AA as AAA batteries. How many batteries did they sell total?



Answers

1. **1739**

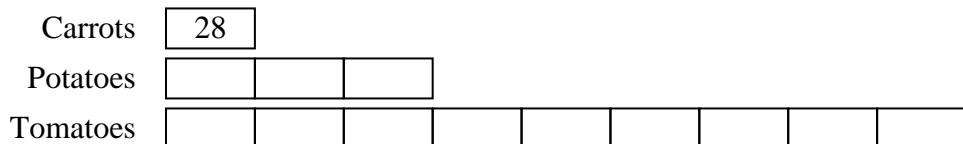
2. **364**

3. **456**

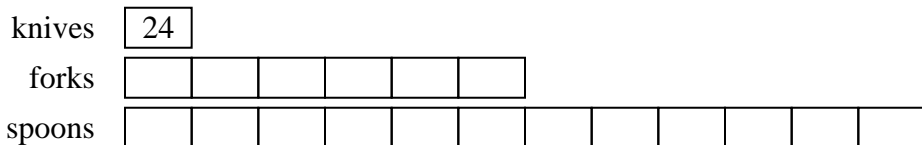
4. **306**

5. **1250**

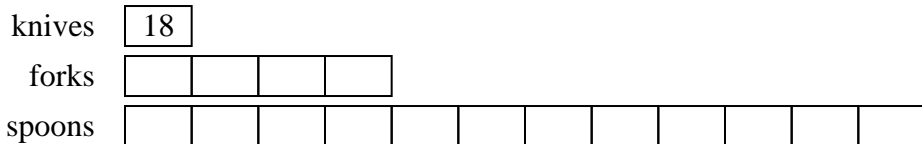
- 2) Chef Luke buys 28 carrots. He buys 3 times as many potatoes as carrots and 3 times as many tomatoes as potatoes. How many vegetables did he buy all together?



- 3) In one day a restaurant used 24 knives. They also used 6 as many forks as they used knives. And 2 times as many spoons as forks. How many utensils do they use in a day?



- 4) In one day a restaurant used 18 knives. They also used 4 as many forks as they used knives. And 3 times as many spoons as forks. How many utensils do they use in a day?



- 5) Chef George buys 25 carrots. He buys 7 times as many potatoes as carrots and 6 times as many tomatoes as potatoes. How many vegetables did he buy all together?





Solve each problem using a tape diagram.

**Answers**

1) On week 1 a football player jogged for 38 minutes. On week 2 he jogged for 6 times as long. On week 3 he jogged for 4 times as long as he jogged on week 2. How many minute did he jog across all 3 weeks?

1. \_\_\_\_\_

2. \_\_\_\_\_

3. \_\_\_\_\_

4. \_\_\_\_\_

2) A store sold 11 C batteries in a day. They sold 5 as many AAA batteries as C batteries and 9 times as many AA as AAA batteries. How many batteries did they sell total?

5. \_\_\_\_\_

3) Chef Victor buys 24 carrots. He buys 3 times as many potatoes as carrots and 2 times as many tomatoes as potatoes. How many vegetables did he buy all together?

4) A school principal was looking over grades. In math 26 students scored a C. 3 times as many students scored a B. And 3 times as many students scored an A as scored a B. How many students scored an A, B or C?

5) In one day a restaurant used 47 knives. They also used 4 as many forks as they used knives. And 3 times as many spoons as forks. How many utensils do they use in a day?



Solve each problem using a tape diagram.

- On week 1 a football player jogged for 38 minutes. On week 2 he jogged for 6 times as long. On week 3 he jogged for 4 times as long as he jogged on week 2. How many minute did he jog across all 3 weeks?

Week 1

Week 2 

--	--	--	--	--	--

Week 3 

--	--	--	--	--	--	--	--	--	--	--	--	--	--	--	--	--	--	--	--

- A store sold 11 C batteries in a day. They sold 5 as many AAA batteries as C batteries and 9 times as many AA as AAA batteries. How many batteries did they sell total?

C 

--	--

AAA 

--	--	--	--	--

AA 

--	--	--	--	--	--	--	--	--	--	--	--	--	--	--	--	--	--	--	--	--	--	--	--	--	--	--

- Chef Victor buys 24 carrots. He buys 3 times as many potatoes as carrots and 2 times as many tomatoes as potatoes. How many vegetables did he buy all together?

Carrots

Potatoes 

--	--	--

Tomatoes 

--	--	--	--	--	--

- A school principal was looking over grades. In math 26 students scored a C. 3 times as many students scored a B. And 3 times as many students scored an A as scored a B. How many students scored an A, B or C?

C

B 

--	--	--

A 

--	--	--	--	--	--	--	--	--

- In one day a restaurant used 47 knives. They also used 4 as many forks as they used knives. And 3 times as many spoons as forks. How many utensils do they use in a day?

knives

forks 

--	--	--	--

spoons 

--	--	--	--	--	--	--	--	--	--	--	--	--

**Answers**

1. 1178

2. 561

3. 240

4. 338

5. 799