



Solve each problem using a tape diagram.

Answers

- 1) On week 1 a football player jogged for 18 minutes. On week 2 he jogged for 3 times as long. On week 3 he jogged for 2 times as long as he jogged on week 2. How many minutes did he jog across all 3 weeks?

- 2) An ice cream shop sold 30 waffle cones. They sold 3 times as many sugar cones as waffle cones and 3 times as many wafer cones as sugar cones. How many cones did they sell total?

- 3) In one day a restaurant used 22 knives. They also used 3 as many forks as they used knives. And 2 times as many spoons as forks. How many utensils do they use in a day?

- 4) An ice cream shop sold 27 waffle cones. They sold 4 times as many sugar cones as waffle cones and 8 times as many wafer cones as sugar cones. How many cones did they sell total?

- 5) Chef Cody buys 29 carrots. He buys 4 times as many potatoes as carrots and 7 times as many tomatoes as potatoes. How many vegetables did he buy all together?

1. _____

2. _____

3. _____


4. _____

5. _____

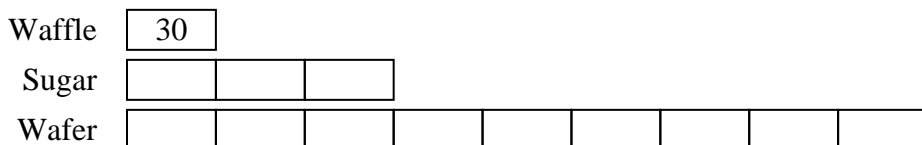


Solve each problem using a tape diagram.

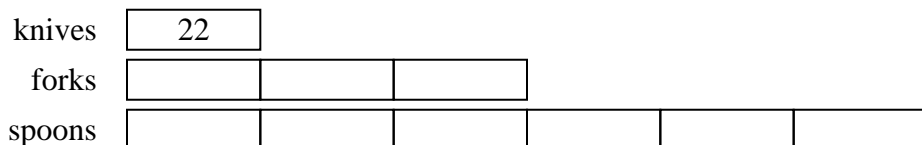
- 1) On week 1 a football player jogged for 18 minutes. On week 2 he jogged for 3 times as long. On week 3 he jogged for 2 times as long as he jogged on week 2. How many minute did he jog across all 3 weeks?



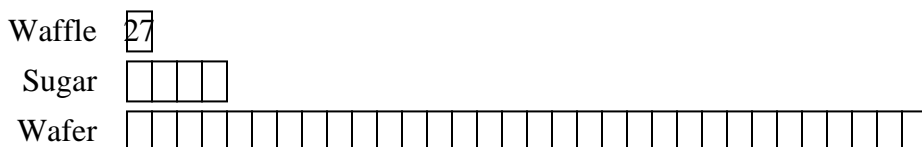
- 2) An ice cream shop sold 30 waffle cones. They sold 3 times as many sugar cones as waffle cones and 3 times as many wafer cones as sugar cones. How many cones did they sell total?



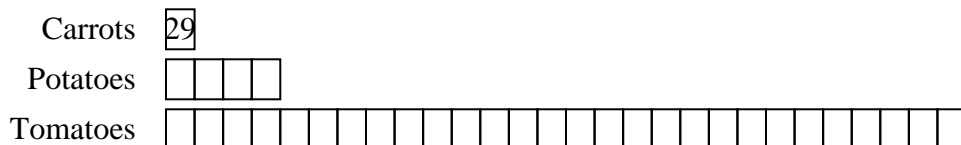
- 3) In one day a restaurant used 22 knives. They also used 3 as many forks as they used knives. And 2 times as many spoons as forks. How many utensils do they use in a day?



- 4) An ice cream shop sold 27 waffle cones. They sold 4 times as many sugar cones as waffle cones and 8 times as many wafer cones as sugar cones. How many cones did they sell total?



- 5) Chef Cody buys 29 carrots. He buys 4 times as many potatoes as carrots and 7 times as many tomatoes as potatoes. How many vegetables did he buy all together?



Answers

1. 180
2. 390
3. 220
4. 999
5. 957