

**Solve each problem using a tape diagram.****Answers**

- Ex)** At the school fundraiser Adam earned \$210. Bianca earned  $\frac{6}{10}$  as much as Adam. And Cathy earned  $\frac{5}{6}$  as much as Bianca. How much did Cathy earn?
- 1)** Two years ago the fair had  $\frac{3}{4}$  as many people as 1 year ago. 1 year ago the fair had  $\frac{4}{7}$  as many people as this year. This year the fair had 343 people. How many people did the fair have 2 years ago?
- 2)** On Super Bowl Sunday a store sold 408 sodas. They sold  $\frac{5}{8}$  as many bags of chips. They also sold  $\frac{2}{5}$  as many jars of dip as bags of chips. How many jars of dip did they sell?
- 3)** Tiffany was looking at her Nintendo collection. She had 340 wiiU games. She had  $\frac{6}{10}$  as many DS games and  $\frac{4}{6}$  as many 3ds games as DS games. How many 3ds games does she have?
- 4)** Isabel was trying to determine the weight of a small rock. She determined the small rock was  $\frac{3}{8}$  as heavy as a medium rock. The medium rock was  $\frac{8}{10}$  as heavy as a large rock. The large rock weighed 870 grams. How heavy was the small rock?

Ex. **105**

1. \_\_\_\_\_

2. \_\_\_\_\_

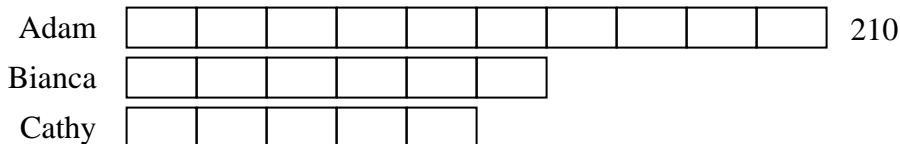
3. \_\_\_\_\_

4. \_\_\_\_\_

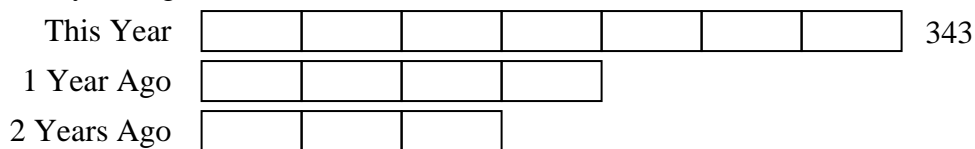


Solve each problem using a tape diagram.

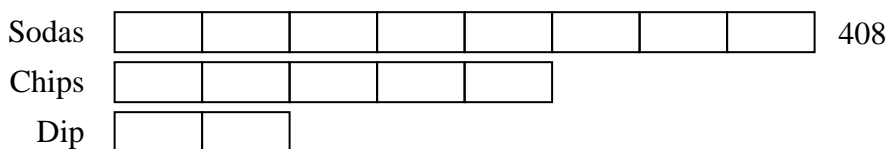
- Ex) At the school fundraiser Adam earned \$210. Bianca earned  $\frac{6}{10}$  as much as Adam. And Cathy earned  $\frac{5}{6}$  as much as Bianca. How much did Cathy earn?



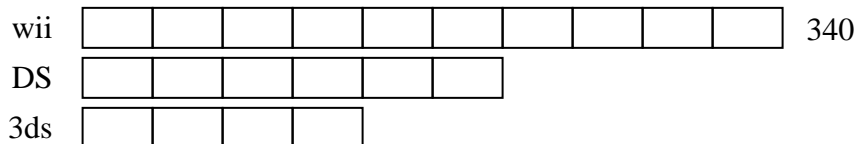
- 1) Two years ago the fair had  $\frac{3}{4}$  as many people as 1 year ago. 1 year ago the fair had  $\frac{4}{7}$  as many people as this year. This year the fair had 343 people. How many people did the fair have 2 years ago?



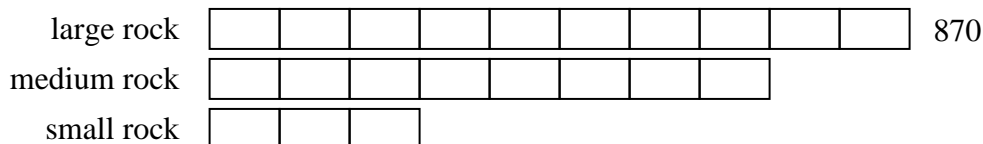
- 2) On Super Bowl Sunday a store sold 408 sodas. They sold  $\frac{5}{8}$  as many bags of chips. They also sold  $\frac{2}{5}$  as many jars of dip as bags of chips. How many jars of dip did they sell?



- 3) Tiffany was looking at her Nintendo collection. She had 340 wiiU games. She had  $\frac{6}{10}$  as many DS games and  $\frac{4}{6}$  as many 3ds games as DS games. How many 3ds games does she have?



- 4) Isabel was trying to determine the weight of a small rock. She determined the small rock was  $\frac{3}{8}$  as heavy as a medium rock. The medium rock was  $\frac{8}{10}$  as heavy as a large rock. The large rock weighed 870 grams. How heavy was the small rock?



## Answers

Ex. 105

1. 147

2. 102

3. 136

4. 261