

**Solve each problem.****Answers**

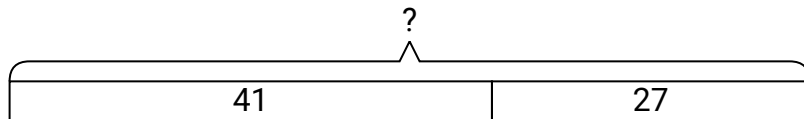
- 1) Bianca received 41 text messages before noon and another 27 after noon. How many text messages did Bianca receive total?
- 2) At the fair Carol started with 49 tickets and then bought 30 more. How many tickets did Carol have total?
- 3) Lana spent 18 minutes drawing at school and 34 minutes drawing at home. How many minutes total did she spend drawing?
- 4) Debby picked up 29 pieces of paper from the floor. If Paul picked up 14 pieces, how many did they pick up total?
- 5) A grocery store had 24 bottles of regular soda and 10 bottles of diet soda. How many bottles did they have total?
- 6) Paige had 12 books. If she bought 38 more at a yard sale how many would she have total?
- 7) Katie had 23 DS games and her friend had 47 games. How many do they have total?

1. _____
2. _____
3. _____
4. _____
5. _____
6. _____
7. _____

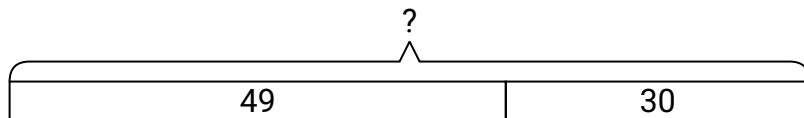


Solve each problem.

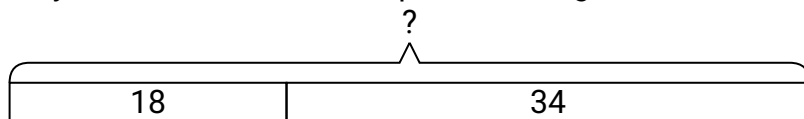
- 1) Bianca received 41 text messages before noon and another 27 after noon. How many text messages did Bianca receive total?



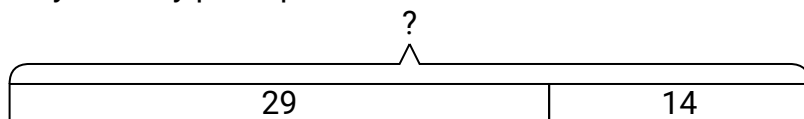
- 2) At the fair Carol started with 49 tickets and then bought 30 more. How many tickets did Carol have total?



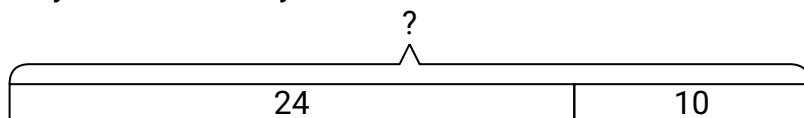
- 3) Lana spent 18 minutes drawing at school and 34 minutes drawing at home. How many minutes total did she spend drawing?



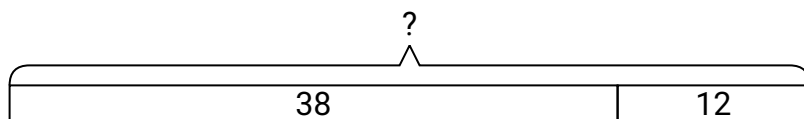
- 4) Debby picked up 29 pieces of paper from the floor. If Paul picked up 14 pieces, how many did they pick up total?



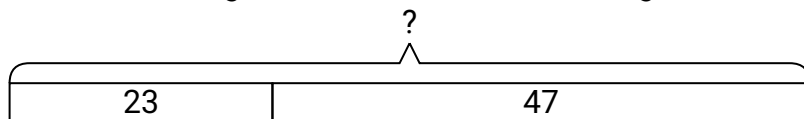
- 5) A grocery store had 24 bottles of regular soda and 10 bottles of diet soda. How many bottles did they have total?



- 6) Paige had 12 books. If she bought 38 more at a yard sale how many would she have total?



- 7) Katie had 23 DS games and her friend had 47 games. How many do they have total?

**Answers**

1. **68**
2. **79**
3. **52**
4. **43**
5. **34**
6. **50**
7. **70**