

**Solve each problem.****Answers**

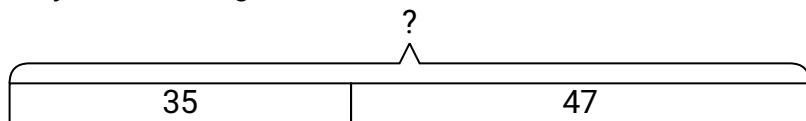
- 1) Robin received 35 text messages before noon and another 47 after noon. How many text messages did Robin receive total?
- 2) An aquarium had 35 fish in it. Later they added 46 fish. How many fish are in the aquarium now?
- 3) A farmer planted 20 seeds on Wednesday and another 50 seeds on Thursday. How many seeds did he plant total?
- 4) For a party John spent 23 dollars on food and 14 dollars on drinks. How much did John spend total?
- 5) There were 26 people in line at lunch when 24 more got in line. How many people were there total in line?
- 6) A grocery store had 46 bottles of regular soda and 13 bottles of diet soda. How many bottles did they have total?
- 7) At the zoo Isabel took 37 pictures. If her sister took another 12 pictures, how many did they take total?

1. _____
2. _____
3. _____
4. _____
5. _____
6. _____
7. _____

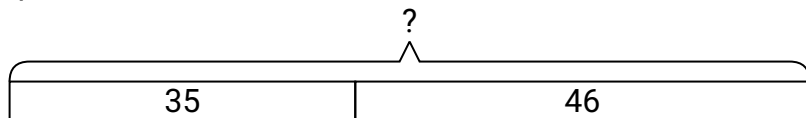


Solve each problem.

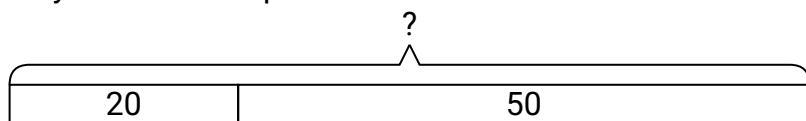
- 1) Robin received 35 text messages before noon and another 47 after noon. How many text messages did Robin receive total?



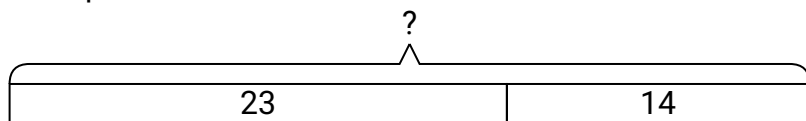
- 2) An aquarium had 35 fish in it. Later they added 46 fish. How many fish are in the aquarium now?



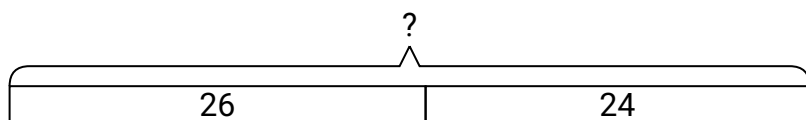
- 3) A farmer planted 20 seeds on Wednesday and another 50 seeds on Thursday. How many seeds did he plant total?



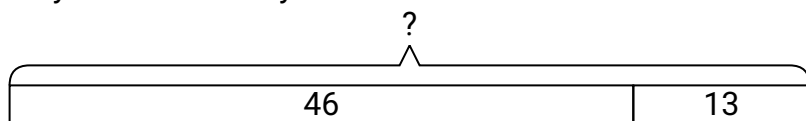
- 4) For a party John spent 23 dollars on food and 14 dollars on drinks. How much did John spend total?



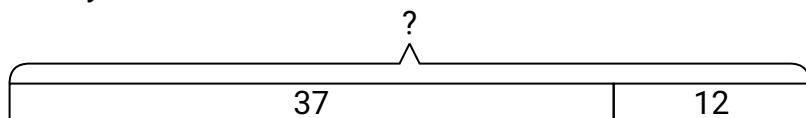
- 5) There were 26 people in line at lunch when 24 more got in line. How many people were there total in line?



- 6) A grocery store had 46 bottles of regular soda and 13 bottles of diet soda. How many bottles did they have total?



- 7) At the zoo Isabel took 37 pictures. If her sister took another 12 pictures, how many did they take total?

**Answers**1. **82**2. **81**3. **70**4. **37**5. **50**6. **59**7. **49**