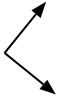




Determine if the angle shown is 'less', 'more' or 'equal' to 90°.

Answers

Ex)



1)



2)



Ex. **equal**

1. \_\_\_\_\_

2. \_\_\_\_\_

3)



4)



5)



3. \_\_\_\_\_

4. \_\_\_\_\_

6)



7)



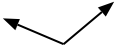
8)



5. \_\_\_\_\_

6. \_\_\_\_\_

9)



10)



11)



7. \_\_\_\_\_

8. \_\_\_\_\_

9. \_\_\_\_\_

10. \_\_\_\_\_

12)



13)



14)



11. \_\_\_\_\_

12. \_\_\_\_\_

13. \_\_\_\_\_

15)



16)



17)



14. \_\_\_\_\_

15. \_\_\_\_\_

16. \_\_\_\_\_

18)



19)



20)



17. \_\_\_\_\_

18. \_\_\_\_\_

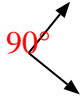
19. \_\_\_\_\_

20. \_\_\_\_\_



Determine if the angle shown is 'less', 'more' or 'equal' to 90°.

Ex)



1)



2)



Answers

Ex. equal

1. equal

2. less

3)



4)



5)



3. less

4. more

6)



7)



8)

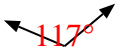


5. more

6. less

7. less

9)



10)



11)



8. less

9. more

10. equal

12)



13)



14)



11. more

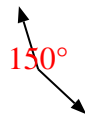
12. less

13. equal

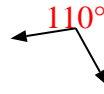
15)



16)



17)



14. equal

15. equal

16. more

18)



19)



20)



17. more

18. less

19. equal

20. less