



Answers

Mike and his friends were trying to see who could catch the most bugs in a day. They recorded their information in the pictograph below.

Bug Catching Contest




= 3 Bugs

- Who caught exactly 30 bugs?
- Who caught the greatest number of bugs?
- Who caught the fewest number of bugs?
- Who caught more bugs, Victor or Victor?
- How many bugs did Edward catch?

- _____
- _____
- _____
- _____
- _____
- _____
- _____
- _____
- _____
- _____

Several students were helping to decorate the school halls by drawing pictures to hang up. The pictograph below shows the number of pictures each student drew.

Pictures Drawn




= 5 pictures drawn

- Who drew exactly 45 pictures?
- Who drew the most pictures?
- How many pictures did Isabel draw?
- Who drew the fewest pictures?
- Did Janet or Sam draw more pictures?



Mike and his friends were trying to see who could catch the most bugs in a day. They recorded their information in the pictograph below.

Bug Catching Contest

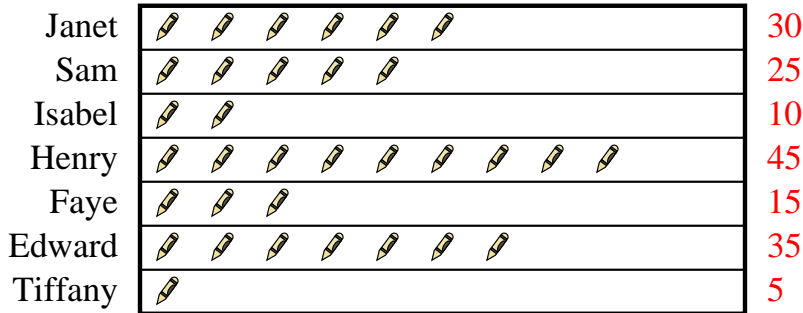


= 3 Bugs

- Who caught exactly 30 bugs?
- Who caught the greatest number of bugs?
- Who caught the fewest number of bugs?
- Who caught more bugs, Victor or Victor?
- How many bugs did Edward catch?

Several students were helping to decorate the school halls by drawing pictures to hang up. The pictograph below shows the number of pictures each student drew.

Pictures Drawn



= 5 pictures drawn

- Who drew exactly 45 pictures?
- Who drew the most pictures?
- How many pictures did Isabel draw?
- Who drew the fewest pictures?
- Did Janet or Sam draw more pictures?

Answers

- Tom**
- Tom**
- Sam**
- Victor**
- 27**
- Henry**
- Henry**
- 10**
- Tiffany**
- Janet**