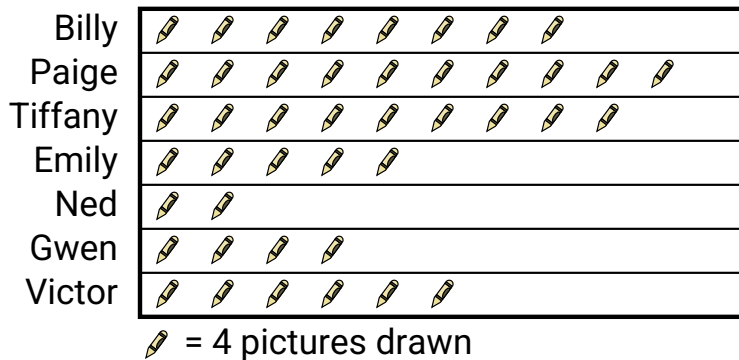


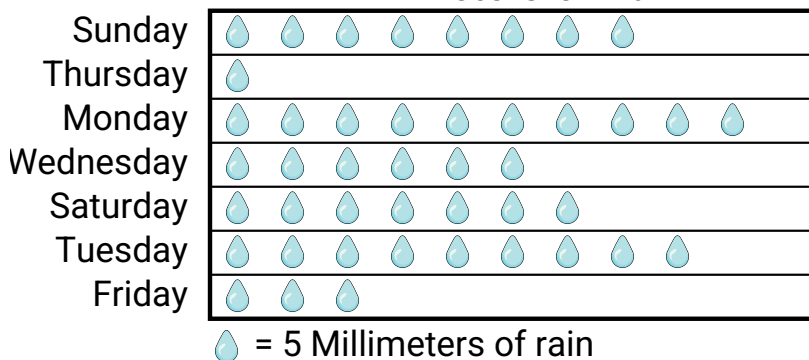


Several students were helping to decorate the school halls by drawing pictures to hang up. The pictograph below shows the number of pictures each student drew.

Pictures Drawn

- 1) Who drew exactly 20 pictures?
- 2) How many pictures did Tiffany draw?
- 3) Did Billy or Paige draw more pictures?
- 4) Who drew the most pictures?
- 5) Who drew the fewest pictures?

Mr. Sanders class was performing an experiment to see which day of the week had the most rain. His class recorded their information in the pictograph below.

Millimeters of Rain

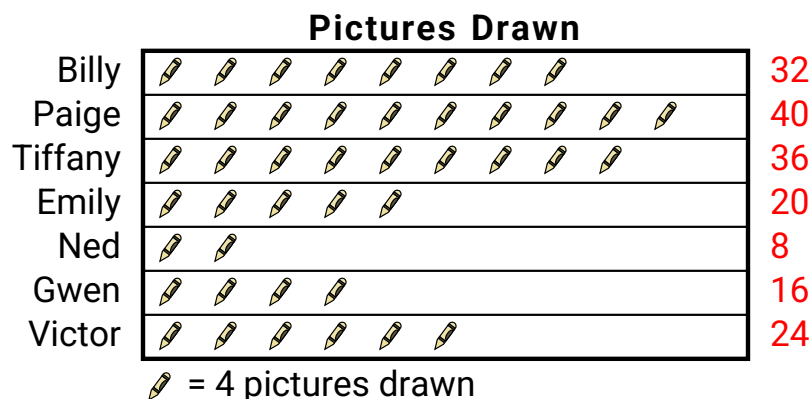
- 6) Which day had the least rain?
- 7) Did it rain more on Sunday or Thursday?
- 8) Which day had the most rain?
- 9) How much rain was there on Monday?
- 10) Which day was there exactly 30 millimeters of rain?

Answers

1. _____
2. _____
3. _____
4. _____
5. _____
6. _____
7. _____
8. _____
9. _____
10. _____

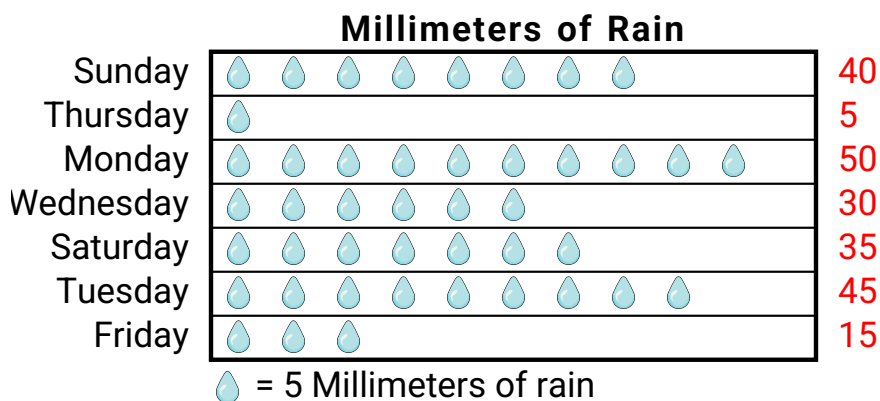


Several students were helping to decorate the school halls by drawing pictures to hang up. The pictograph below shows the number of pictures each student drew.



- 1) Who drew exactly 20 pictures?
- 2) How many pictures did Tiffany draw?
- 3) Did Billy or Paige draw more pictures?
- 4) Who drew the most pictures?
- 5) Who drew the fewest pictures?

Mr. Sanders class was performing an experiment to see which day of the week had the most rain. His class recorded their information in the pictograph below.



- 6) Which day had the least rain?
- 7) Did it rain more on Sunday or Thursday?
- 8) Which day had the most rain?
- 9) How much rain was there on Monday?
- 10) Which day was there exactly 30 millimeters of rain?

Answers

1. **Emily**
2. **36**
3. **Paige**
4. **Paige**
5. **Ned**
6. **Thursday**
7. **Sunday**
8. **Monday**
9. **50**
10. **Wednesday**