



Determine which letter best represents the weight.

Gram (g)

A gram is about the weight of a paperclip.



Kilogram (kg)

A kilogram is about the weight of a thick book.




Remember:

Kilo means 1,000. So a kilogram is 1,000 grams.
1 Kilogram is also about the same weight as 2 pounds.

Answers

1. _____
2. _____
3. _____
4. _____
5. _____
6. _____
7. _____
8. _____
9. _____

1)



Apple

- A. 200 grams
- B. 5 grams
- C. 5 kilograms
- D. 200 kilograms

2)



Flash Drive

- A. 10 kilograms
- B. 10 grams
- C. 1 kilogram
- D. 90 kilograms

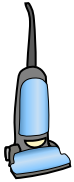
3)



Wrist Watch

- A. 500 kilograms
- B. 1 gram
- C. 90 grams
- D. 1 kilogram

4)



Vacuum

- A. 500 kilograms
- B. 90 grams
- C. 20 kilograms
- D. 50 grams

5)



Battery

- A. 10 kilograms
- B. 90 kilograms
- C. 15 grams
- D. 1 gram

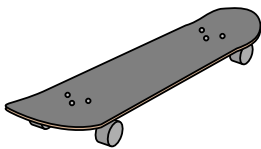
6)



Toothbrush

- A. 30 grams
- B. 500 kilograms
- C. 1 gram
- D. 15 kilograms

7)



Skateboard

- A. 20 grams
- B. 200 grams
- C. 15 kilograms
- D. 2 kilograms


8)



Tennis Ball

- A. 15 kilograms
- B. 1 kilogram
- C. 1 gram
- D. 50 grams

9)



Pear

- A. 170 kilograms
- B. 2 kilograms
- C. 170 grams
- D. 2 grams



Determine which letter best represents the weight.


Gram (g)

A gram is about the weight of a paperclip.



Kilogram (kg)

A kilogram is about the weight of a thick book.




Remember:


Kilo means 1,000. So a kilogram is 1,000 grams.

1 Kilogram is also about the same weight as 2 pounds.

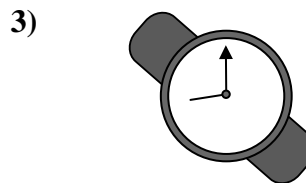
Answers



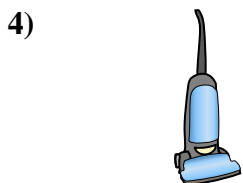
- Apple
- A. 200 grams
 - B. 5 grams
 - C. 5 kilograms
 - D. 200 kilograms



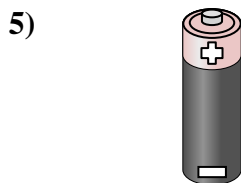
- Flash Drive
- A. 10 kilograms
 - B. 10 grams
 - C. 1 kilogram
 - D. 90 kilograms




- Wrist Watch
- A. 500 kilograms
 - B. 1 gram
 - C. 90 grams
 - D. 1 kilogram



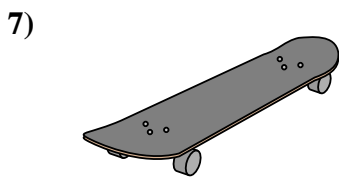
- Vacuum
- A. 500 kilograms
 - B. 90 grams
 - C. 20 kilograms
 - D. 50 grams




- Battery
- A. 10 kilograms
 - B. 90 kilograms
 - C. 15 grams
 - D. 1 gram



- Toothbrush
- A. 30 grams
 - B. 500 kilograms
 - C. 1 gram
 - D. 15 kilograms



- Skateboard
- A. 20 grams
 - B. 200 grams
 - C. 15 kilograms
 - D. 2 kilograms



- Tennis Ball
- A. 15 kilograms
 - B. 1 kilogram
 - C. 1 gram
 - D. 50 grams



- Pear
- A. 170 kilograms
 - B. 2 kilograms
 - C. 170 grams
 - D. 2 grams

- 1. **A**
- 2. **B**
- 3. **C**
- 4. **C**
- 5. **C**
- 6. **A**
- 7. **D**
- 8. **D**
- 9. **C**