




Determine which letter best represents the weight.

Ounce (oz)

Pound (lb)

An ounce is about the weight of a slice of bread.

A pound is about the weight of a can of vegetables.



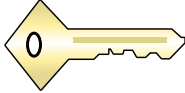
Remember:

There are 16 ounces in 1 pound.

Answers

- 1. _____
- 2. _____
- 3. _____
- 4. _____
- 5. _____
- 6. _____
- 7. _____
- 8. _____
- 9. _____

1)



Key

- A. 16 ounces
- B. 4 ounces
- C. 220 pounds
- D. 2 pounds


2)



Shovel

- A. 8 pounds
- B. 0.1 ounces
- C. 80 pounds
- D. 0.4 ounces

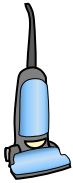
3)



Lawn Mower

- A. 50 pounds
- B. 100 ounces
- C. 200 pounds
- D. 200 ounces

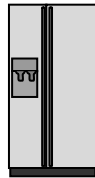
4)



Vacuum

- A. 3 ounces
- B. 2 ounces
- C. 35 pounds
- D. 1100 pounds

5)



Refrigerator

- A. 20 pounds
- B. 250 pounds
- C. 7 ounces
- D. 1 ounce

6)



Football

- A. 65 pounds
- B. 13 pounds
- C. 1 pound
- D. 0.9 ounces

7)



Flash Drive

- A. 19 pounds
- B. 1 ounce
- C. 20 pounds
- D. 10 ounces

8)



Hammer

- A. 3 pounds
- B. 16 ounces
- C. 1 ounce
- D. 10 pounds

9)



Can of Soda

- A. 0.04 ounces
- B. 4 pounds
- C. 100 pounds
- D. 9 ounces



Determine which letter best represents the weight.

Ounce (oz)

An ounce is about the weight of a slice of bread.



Pound (lb)

A pound is about the weight of a can of vegetables.

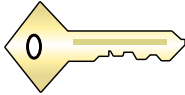


Remember:

There are 16 ounces in 1 pound.

Answers

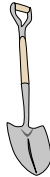
1)



Key

- A. 16 ounces
- B. 4 ounces
- C. 220 pounds
- D. 2 pounds


2)



Shovel

- A. 8 pounds
- B. 0.1 ounces
- C. 80 pounds
- D. 0.4 ounces

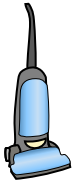
3)



Lawn Mower

- A. 50 pounds
- B. 100 ounces
- C. 200 pounds
- D. 200 ounces

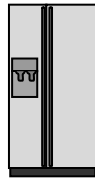
4)



Vacuum

- A. 3 ounces
- B. 2 ounces
- C. 35 pounds
- D. 1100 pounds

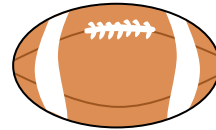
5)



Refrigerator

- A. 20 pounds
- B. 250 pounds
- C. 7 ounces
- D. 1 ounce

6)



Football

- A. 65 pounds
- B. 13 pounds
- C. 1 pound
- D. 0.9 ounces

7)



Flash Drive

- A. 19 pounds
- B. 1 ounce
- C. 20 pounds
- D. 10 ounces

8)



Hammer

- A. 3 pounds
- B. 16 ounces
- C. 1 ounce
- D. 10 pounds

9)



Can of Soda

- A. 0.04 ounces
- B. 4 pounds
- C. 100 pounds
- D. 9 ounces

- 1. **B**
- 2. **A**
- 3. **A**
- 4. **C**
- 5. **B**
- 6. **C**
- 7. **B**
- 8. **A**
- 9. **D**