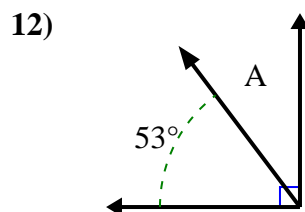
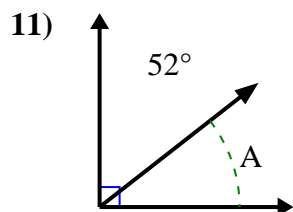
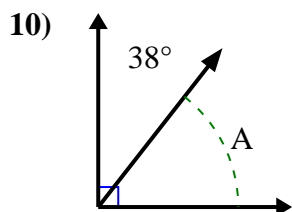
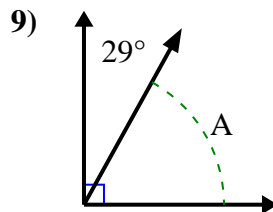
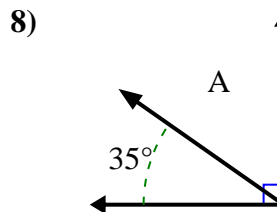
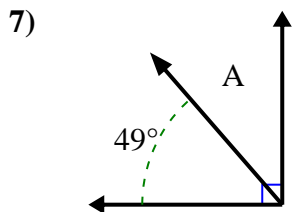
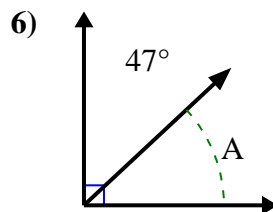
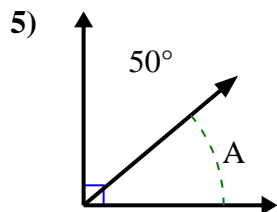
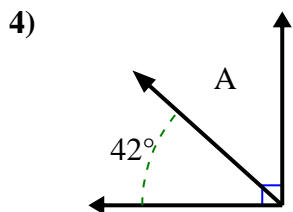
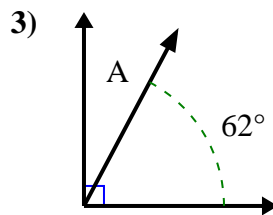
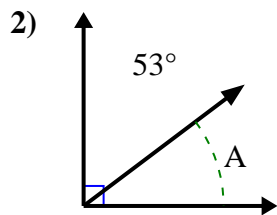
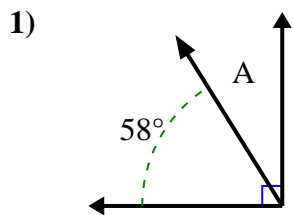




Find the value of 'A' in the set of complementary angles.

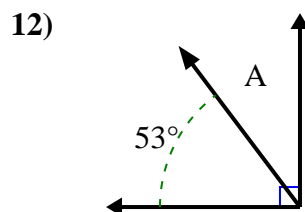
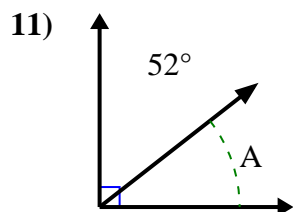
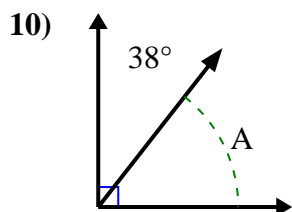
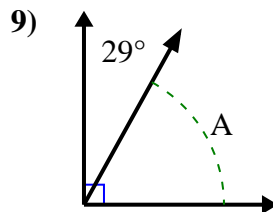
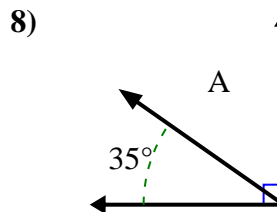
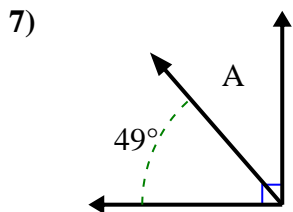
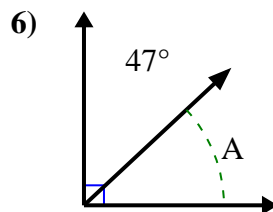
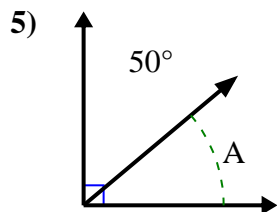
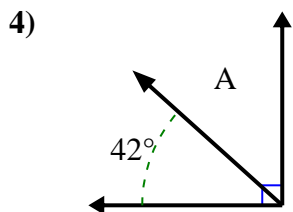
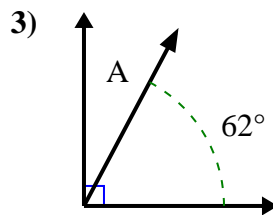
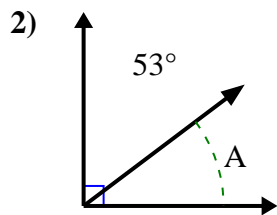
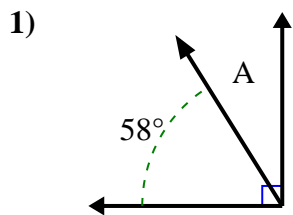
Answers



- 1. \_\_\_\_\_
- 2. \_\_\_\_\_
- 3. \_\_\_\_\_
- 4. \_\_\_\_\_
- 5. \_\_\_\_\_
- 6. \_\_\_\_\_
- 7. \_\_\_\_\_
- 8. \_\_\_\_\_
- 9. \_\_\_\_\_
- 10. \_\_\_\_\_
- 11. \_\_\_\_\_
- 12. \_\_\_\_\_



Find the value of 'A' in the set of complementary angles.



Answers

1. 32°

2. 37°

3. 28°

4. 48°

5. 40°

6. 43°

7. 41°

8. 55°

9. 61°

10. 52°

11. 38°

12. 37°