



Solve each problem.

1)  $4 + 1 = \underline{\quad}$

2)  $2 + 2 = \underline{\quad}$

3)  $2 + 3 = \underline{\quad}$

4)  $3 + 2 = \underline{\quad}$

5)  $1 + 4 = \underline{\quad}$

6)  $5 + 0 = \underline{\quad}$

7)  $1 + 3 = \underline{\quad}$

8)  $3 + 1 = \underline{\quad}$

9)  $5 - 3 = \underline{\quad}$

10)  $5 - 5 = \underline{\quad}$

11)  $5 - 4 = \underline{\quad}$

12)  $4 - 4 = \underline{\quad}$

13)  $2 - 1 = \underline{\quad}$

14)  $4 - 2 = \underline{\quad}$

15)  $3 - 1 = \underline{\quad}$

16)  $4 - 3 = \underline{\quad}$

**Answers**

1. \_\_\_\_\_

2. \_\_\_\_\_

3. \_\_\_\_\_

4. \_\_\_\_\_

5. \_\_\_\_\_

6. \_\_\_\_\_

7. \_\_\_\_\_

8. \_\_\_\_\_

9. \_\_\_\_\_

10. \_\_\_\_\_

11. \_\_\_\_\_

12. \_\_\_\_\_

13. \_\_\_\_\_

14. \_\_\_\_\_

15. \_\_\_\_\_

16. \_\_\_\_\_



Solve each problem.

1)  $4 + 1 = \underline{5}$

2)  $2 + 2 = \underline{4}$

3)  $2 + 3 = \underline{5}$

4)  $3 + 2 = \underline{5}$

5)  $1 + 4 = \underline{5}$

6)  $5 + 0 = \underline{5}$

7)  $1 + 3 = \underline{4}$

8)  $3 + 1 = \underline{4}$

9)  $5 - 3 = \underline{2}$

10)  $5 - 5 = \underline{0}$

11)  $5 - 4 = \underline{1}$

12)  $4 - 4 = \underline{0}$

13)  $2 - 1 = \underline{1}$

14)  $4 - 2 = \underline{2}$

15)  $3 - 1 = \underline{2}$

16)  $4 - 3 = \underline{1}$


**Answers**1. 52. 43. 54. 55. 56. 57. 48. 49. 210. 011. 112. 013. 114. 215. 216. 1




Solve each problem.

Answers


1)  $4 + 1 = \underline{\quad}$




2)  $2 + 2 = \underline{\quad}$




3)  $2 + 3 = \underline{\quad}$




4)  $3 + 2 = \underline{\quad}$




5)  $1 + 4 = \underline{\quad}$




6)  $5 + 0 = \underline{\quad}$



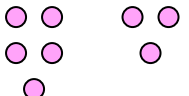
7)  $1 + 3 = \underline{\quad}$



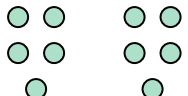
8)  $3 + 1 = \underline{\quad}$



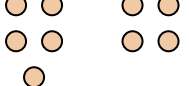
9)  $5 - 3 = \underline{\quad}$




10)  $5 - 5 = \underline{\quad}$




11)  $5 - 4 = \underline{\quad}$




12)  $4 - 4 = \underline{\quad}$




13)  $2 - 1 = \underline{\quad}$



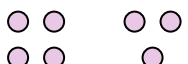
14)  $4 - 2 = \underline{\quad}$



15)  $3 - 1 = \underline{\quad}$



16)  $4 - 3 = \underline{\quad}$



1. \_\_\_\_\_
2. \_\_\_\_\_
3. \_\_\_\_\_
4. \_\_\_\_\_
5. \_\_\_\_\_
6. \_\_\_\_\_
7. \_\_\_\_\_
8. \_\_\_\_\_
9. \_\_\_\_\_
10. \_\_\_\_\_
11. \_\_\_\_\_
12. \_\_\_\_\_
13. \_\_\_\_\_
14. \_\_\_\_\_
15. \_\_\_\_\_
16. \_\_\_\_\_