



Determine which letter best represents the weight.

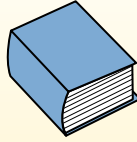
**Gram (g)**

A gram is about the weight of a paperclip.



**Kilogram (kg)**

A kilogram is about the weight of a thick book.




**Remember:**

Kilo means 1,000. So a kilogram is 1,000 grams.  
1 Kilogram is also about the same weight as 2 pounds.

**Answers**

1. \_\_\_\_\_
2. \_\_\_\_\_
3. \_\_\_\_\_
4. \_\_\_\_\_
5. \_\_\_\_\_
6. \_\_\_\_\_
7. \_\_\_\_\_
8. \_\_\_\_\_
9. \_\_\_\_\_

1)



2 Liter of Soda

- A. 50 grams
- B. 2 kilograms
- C. 100 grams
- D. 3 grams

2)



Big Screen TV

- A. 20 grams
- B. 20 kilograms
- C. 100 grams
- D. 1000 kilograms

3)



Shovel

- A. 30 kilograms
- B. 5 kilograms
- C. 10 grams
- D. 1 gram

4)



Monitor

- A. 500 kilograms
- B. 8 kilograms
- C. 8 grams
- D. 500 grams


5)



Glue Stick

- A. 500 grams
- B. 1 kilogram
- C. 62 grams
- D. 1 gram

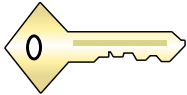
6)



Recliner

- A. 150 grams
- B. 1 kilogram
- C. 35 kilograms
- D. 90 grams

7)



Key

- A. 1 gram
- B. 100 kilograms
- C. 100 grams
- D. 1 kilogram

8)



File Cabinet

- A. 1 gram
- B. 55 kilograms
- C. 1 kilogram
- D. 300 grams

9)



Broom

- A. 10 kilograms
- B. 200 kilograms
- C. 10 grams
- D. 500 grams



Determine which letter best represents the weight.


**Gram (g)**

A gram is about the weight of a paperclip.



**Kilogram (kg)**

A kilogram is about the weight of a thick book.




**Remember:**

Kilo means 1,000. So a kilogram is 1,000 grams.

1 Kilogram is also about the same weight as 2 pounds.

**Answers**

1)



2 Liter of Soda

- A. 50 grams
- B. 2 kilograms
- C. 100 grams
- D. 3 grams

2)



Big Screen TV

- A. 20 grams
- B. 20 kilograms
- C. 100 grams
- D. 1000 kilograms

3)



Shovel

- A. 30 kilograms
- B. 5 kilograms
- C. 10 grams
- D. 1 gram

4)



Monitor

- A. 500 kilograms
- B. 8 kilograms
- C. 8 grams
- D. 500 grams


5)



Glue Stick

- A. 500 grams
- B. 1 kilogram
- C. 62 grams
- D. 1 gram

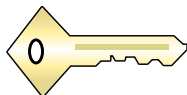
6)



Recliner

- A. 150 grams
- B. 1 kilogram
- C. 35 kilograms
- D. 90 grams

7)



Key

- A. 1 gram
- B. 100 kilograms
- C. 100 grams
- D. 1 kilogram

8)



File Cabinet

- A. 1 gram
- B. 55 kilograms
- C. 1 kilogram
- D. 300 grams

9)



Broom

- A. 10 kilograms
- B. 200 kilograms
- C. 10 grams
- D. 500 grams

- 1. **B**
- 2. **B**
- 3. **B**
- 4. **B**
- 5. **C**
- 6. **C**
- 7. **C**
- 8. **B**
- 9. **D**