




Determine which letter best represents the weight.

**Ounce (oz)**

An ounce is about the weight of a slice of bread.



**Pound (lb)**

A pound is about the weight of a can of vegetables.



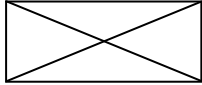
**Remember:**

There are 16 ounces in 1 pound.

**Answers**

1. \_\_\_\_\_
2. \_\_\_\_\_
3. \_\_\_\_\_
4. \_\_\_\_\_
5. \_\_\_\_\_
6. \_\_\_\_\_
7. \_\_\_\_\_
8. \_\_\_\_\_
9. \_\_\_\_\_

1)



Envelope

- A. 11 pounds
- B. 1 ounce
- C. 24 ounces
- D. 440 pounds

2)

Screw

- A. 0.04 ounces
- B. 10 ounces
- C. 1 pound
- D. 2 pounds

3)



File Cabinet

- A. 2 pounds
- B. 120 pounds
- C. 160 ounces
- D. 11 ounces

4)



Broom

- A. 20 pounds
- B. 2 pounds
- C. 4 ounces
- D. 440 pounds

5)



Strawberry

- A. 11 ounces
- B. 0.5 ounces
- C. 1 pound
- D. 0.5 pounds


6)



Wrist Watch

- A. 16 ounces
- B. 3 ounces
- C. 12 pounds
- D. 2 pounds

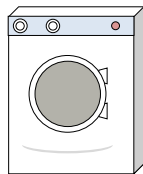
7)



2 Liter of Soda

- A. 4 pounds
- B. 0.11 ounces
- C. 2 ounces
- D. 4 ounces

8)



Washing Machine

- A. 0.2 ounces
- B. 16 pounds
- C. 3 tons
- D. 165 pounds

9)



Monitor

- A. 1000 pounds
- B. 20 ounces
- C. 0.2 ounces
- D. 20 pounds




Determine which letter best represents the weight.

**Ounce (oz)**

**Pound (lb)**

An ounce is about the weight of a slice of bread.

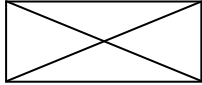
A pound is about the weight of a can of vegetables.



**Remember:**  
There are 16 ounces in 1 pound.

**Answers**

1)



Envelope

- A. 11 pounds
- B. 1 ounce
- C. 24 ounces
- D. 440 pounds

2)

Screw

- A. 0.04 ounces
- B. 10 ounces
- C. 1 pound
- D. 2 pounds

3)



File Cabinet

- A. 2 pounds
- B. 120 pounds
- C. 160 ounces
- D. 11 ounces

4)



Broom

- A. 20 pounds
- B. 2 pounds
- C. 4 ounces
- D. 440 pounds

5)



Strawberry

- A. 11 ounces
- B. 0.5 ounces
- C. 1 pound
- D. 0.5 pounds


6)



Wrist Watch

- A. 16 ounces
- B. 3 ounces
- C. 12 pounds
- D. 2 pounds

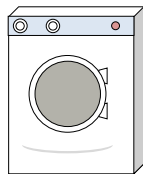
7)



2 Liter of Soda

- A. 4 pounds
- B. 0.11 ounces
- C. 2 ounces
- D. 4 ounces

8)



Washing Machine

- A. 0.2 ounces
- B. 16 pounds
- C. 3 tons
- D. 165 pounds

9)



Monitor

- A. 1000 pounds
- B. 20 ounces
- C. 0.2 ounces
- D. 20 pounds

- 1. **B**
- 2. **A**
- 3. **B**
- 4. **B**
- 5. **B**
- 6. **B**
- 7. **A**
- 8. **D**
- 9. **D**