



Fill in the chart.

pounds (lb)	ounces (oz)
1	16
2	
3	
4	
5	
6	
7	
8	
9	
10	
11	

Answers

- 11) If an object weighed 80 ounces, how many pounds would it weigh?
- 12) If an object weighed 6 pounds, how many ounces would it weigh?
- 13) If an object weighed 10 pounds, how many ounces would it weigh?
- 14) If an object weighed 2 pounds, how many ounces would it weigh?
- 15) If an object weighed 3 pounds, how many ounces would it weigh?
- 16) If an object weighed 7 pounds, how many ounces would it weigh?
- 17) If an object weighed 64 ounces, how many pounds would it weigh?
- 18) If an object weighed 9 pounds, how many ounces would it weigh?
- 19) If an object weighed 8 pounds, how many ounces would it weigh?
- 20) If an object weighed 16 ounces, how many pounds would it weigh?

1. _____
2. _____
3. _____
4. _____
5. _____
6. _____
7. _____
8. _____
9. _____
10. _____
11. _____
12. _____
13. _____
14. _____
15. _____
16. _____
17. _____
18. _____
19. _____
20. _____



Fill in the chart.

pounds (lb)	ounces (oz)
1	16
2	32
3	48
4	64
5	80
6	96
7	112
8	128
9	144
10	160
11	176

Answers

- 11) If an object weighed 80 ounces, how many pounds would it weigh?
- 12) If an object weighed 6 pounds, how many ounces would it weigh?
- 13) If an object weighed 10 pounds, how many ounces would it weigh?
- 14) If an object weighed 2 pounds, how many ounces would it weigh?
- 15) If an object weighed 3 pounds, how many ounces would it weigh?
- 16) If an object weighed 7 pounds, how many ounces would it weigh?
- 17) If an object weighed 64 ounces, how many pounds would it weigh?
- 18) If an object weighed 9 pounds, how many ounces would it weigh?
- 19) If an object weighed 8 pounds, how many ounces would it weigh?
- 20) If an object weighed 16 ounces, how many pounds would it weigh?

1. 32
2. 48
3. 64
4. 80
5. 96
6. 112
7. 128
8. 144
9. 160
10. 176
11. 5
12. 96
13. 160
14. 32
15. 48
16. 112
17. 4
18. 144
19. 128
20. 1



Fill in the chart.

pounds (lb)	ounces (oz)
1	16
2	
3	
4	
5	
6	
7	
8	
9	
10	
11	

Answers

- 11) If an object weighed 128 ounces, how many pounds would it weigh?
- 12) If an object weighed 32 ounces, how many pounds would it weigh?
- 13) If an object weighed 4 pounds, how many ounces would it weigh?
- 14) If an object weighed 48 ounces, how many pounds would it weigh?
- 15) If an object weighed 80 ounces, how many pounds would it weigh?
- 16) If an object weighed 144 ounces, how many pounds would it weigh?
- 17) If an object weighed 16 ounces, how many pounds would it weigh?
- 18) If an object weighed 6 pounds, how many ounces would it weigh?
- 19) If an object weighed 10 pounds, how many ounces would it weigh?
- 20) If an object weighed 7 pounds, how many ounces would it weigh?

1. _____
2. _____
3. _____
4. _____
5. _____
6. _____
7. _____
8. _____
9. _____
10. _____
11. _____
12. _____
13. _____
14. _____
15. _____
16. _____
17. _____
18. _____
19. _____
20. _____



Fill in the chart.

pounds (lb)	ounces (oz)
1	16
2	32
3	48
4	64
5	80
6	96
7	112
8	128
9	144
10	160
11	176

Answers

- 11) If an object weighed 128 ounces, how many pounds would it weigh?
- 12) If an object weighed 32 ounces, how many pounds would it weigh?
- 13) If an object weighed 4 pounds, how many ounces would it weigh?
- 14) If an object weighed 48 ounces, how many pounds would it weigh?
- 15) If an object weighed 80 ounces, how many pounds would it weigh?
- 16) If an object weighed 144 ounces, how many pounds would it weigh?
- 17) If an object weighed 16 ounces, how many pounds would it weigh?
- 18) If an object weighed 6 pounds, how many ounces would it weigh?
- 19) If an object weighed 10 pounds, how many ounces would it weigh?
- 20) If an object weighed 7 pounds, how many ounces would it weigh?

1. 32
2. 48
3. 64
4. 80
5. 96
6. 112
7. 128
8. 144
9. 160
10. 176
11. 8
12. 2
13. 64
14. 3
15. 5
16. 9
17. 1
18. 96
19. 160
20. 112



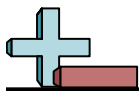
Fill in the chart.

pounds (lb)	ounces (oz)
1	16
2	
3	
4	
5	
6	
7	
8	
9	
10	
11	

Answers

- 11) If an object weighed 48 ounces, how many pounds would it weigh?
- 12) If an object weighed 10 pounds, how many ounces would it weigh?
- 13) If an object weighed 144 ounces, how many pounds would it weigh?
- 14) If an object weighed 16 ounces, how many pounds would it weigh?
- 15) If an object weighed 96 ounces, how many pounds would it weigh?
- 16) If an object weighed 8 pounds, how many ounces would it weigh?
- 17) If an object weighed 5 pounds, how many ounces would it weigh?
- 18) If an object weighed 7 pounds, how many ounces would it weigh?
- 19) If an object weighed 64 ounces, how many pounds would it weigh?
- 20) If an object weighed 32 ounces, how many pounds would it weigh?

1. _____
2. _____
3. _____
4. _____
5. _____
6. _____
7. _____
8. _____
9. _____
10. _____
11. _____
12. _____
13. _____
14. _____
15. _____
16. _____
17. _____
18. _____
19. _____
20. _____



Fill in the chart.

pounds (lb)	ounces (oz)
1	16
2	32
3	48
4	64
5	80
6	96
7	112
8	128
9	144
10	160
11	176

Answers

- 11) If an object weighed 48 ounces, how many pounds would it weigh?
- 12) If an object weighed 10 pounds, how many ounces would it weigh?
- 13) If an object weighed 144 ounces, how many pounds would it weigh?
- 14) If an object weighed 16 ounces, how many pounds would it weigh?
- 15) If an object weighed 96 ounces, how many pounds would it weigh?
- 16) If an object weighed 8 pounds, how many ounces would it weigh?
- 17) If an object weighed 5 pounds, how many ounces would it weigh?
- 18) If an object weighed 7 pounds, how many ounces would it weigh?
- 19) If an object weighed 64 ounces, how many pounds would it weigh?
- 20) If an object weighed 32 ounces, how many pounds would it weigh?

1. 32
2. 48
3. 64
4. 80
5. 96
6. 112
7. 128
8. 144
9. 160
10. 176
11. 3
12. 160
13. 9
14. 1
15. 6
16. 128
17. 80
18. 112
19. 4
20. 2



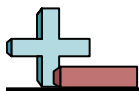
Fill in the chart.

pounds (lb)	ounces (oz)
1	16
2	
3	
4	
5	
6	
7	
8	
9	
10	
11	

Answers

- 11) If an object weighed 80 ounces, how many pounds would it weigh?
- 12) If an object weighed 2 pounds, how many ounces would it weigh?
- 13) If an object weighed 16 ounces, how many pounds would it weigh?
- 14) If an object weighed 9 pounds, how many ounces would it weigh?
- 15) If an object weighed 6 pounds, how many ounces would it weigh?
- 16) If an object weighed 10 pounds, how many ounces would it weigh?
- 17) If an object weighed 3 pounds, how many ounces would it weigh?
- 18) If an object weighed 7 pounds, how many ounces would it weigh?
- 19) If an object weighed 4 pounds, how many ounces would it weigh?
- 20) If an object weighed 8 pounds, how many ounces would it weigh?

1. _____
2. _____
3. _____
4. _____
5. _____
6. _____
7. _____
8. _____
9. _____
10. _____
11. _____
12. _____
13. _____
14. _____
15. _____
16. _____
17. _____
18. _____
19. _____
20. _____



Fill in the chart.

pounds (lb)	ounces (oz)
1	16
2	32
3	48
4	64
5	80
6	96
7	112
8	128
9	144
10	160
11	176

Answers

- 11) If an object weighed 80 ounces, how many pounds would it weigh?
- 12) If an object weighed 2 pounds, how many ounces would it weigh?
- 13) If an object weighed 16 ounces, how many pounds would it weigh?
- 14) If an object weighed 9 pounds, how many ounces would it weigh?
- 15) If an object weighed 6 pounds, how many ounces would it weigh?
- 16) If an object weighed 10 pounds, how many ounces would it weigh?
- 17) If an object weighed 3 pounds, how many ounces would it weigh?
- 18) If an object weighed 7 pounds, how many ounces would it weigh?
- 19) If an object weighed 4 pounds, how many ounces would it weigh?
- 20) If an object weighed 8 pounds, how many ounces would it weigh?

1. 32
2. 48
3. 64
4. 80
5. 96
6. 112
7. 128
8. 144
9. 160
10. 176
11. 5
12. 32
13. 1
14. 144
15. 96
16. 160
17. 48
18. 112
19. 64
20. 128



Fill in the chart.

pounds (lb)	ounces (oz)
1	16
2	
3	
4	
5	
6	
7	
8	
9	
10	
11	

Answers

11) If an object weighed 10 pounds, how many ounces would it weigh?

12) If an object weighed 48 ounces, how many pounds would it weigh?

13) If an object weighed 1 pounds, how many ounces would it weigh?

14) If an object weighed 80 ounces, how many pounds would it weigh?

15) If an object weighed 64 ounces, how many pounds would it weigh?

16) If an object weighed 96 ounces, how many pounds would it weigh?

17) If an object weighed 32 ounces, how many pounds would it weigh?

18) If an object weighed 8 pounds, how many ounces would it weigh?

19) If an object weighed 144 ounces, how many pounds would it weigh?

20) If an object weighed 112 ounces, how many pounds would it weigh?

1. _____
2. _____
3. _____
4. _____
5. _____
6. _____
7. _____
8. _____
9. _____
10. _____
11. _____
12. _____
13. _____
14. _____
15. _____
16. _____
17. _____
18. _____
19. _____
20. _____



Fill in the chart.

pounds (lb)	ounces (oz)
1	16
2	32
3	48
4	64
5	80
6	96
7	112
8	128
9	144
10	160
11	176

Answers

- 11) If an object weighed 10 pounds, how many ounces would it weigh?
- 12) If an object weighed 48 ounces, how many pounds would it weigh?
- 13) If an object weighed 1 pounds, how many ounces would it weigh?
- 14) If an object weighed 80 ounces, how many pounds would it weigh?
- 15) If an object weighed 64 ounces, how many pounds would it weigh?
- 16) If an object weighed 96 ounces, how many pounds would it weigh?
- 17) If an object weighed 32 ounces, how many pounds would it weigh?
- 18) If an object weighed 8 pounds, how many ounces would it weigh?
- 19) If an object weighed 144 ounces, how many pounds would it weigh?
- 20) If an object weighed 112 ounces, how many pounds would it weigh?

1. 32
2. 48
3. 64
4. 80
5. 96
6. 112
7. 128
8. 144
9. 160
10. 176
11. 160
12. 3
13. 16
14. 5
15. 4
16. 6
17. 2
18. 128
19. 9
20. 7



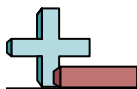
Fill in the chart.

pounds (lb)	ounces (oz)
1	16
2	
3	
4	
5	
6	
7	
8	
9	
10	
11	

Answers

- 11) If an object weighed 96 ounces, how many pounds would it weigh?
- 12) If an object weighed 144 ounces, how many pounds would it weigh?
- 13) If an object weighed 8 pounds, how many ounces would it weigh?
- 14) If an object weighed 4 pounds, how many ounces would it weigh?
- 15) If an object weighed 7 pounds, how many ounces would it weigh?
- 16) If an object weighed 3 pounds, how many ounces would it weigh?
- 17) If an object weighed 1 pounds, how many ounces would it weigh?
- 18) If an object weighed 2 pounds, how many ounces would it weigh?
- 19) If an object weighed 160 ounces, how many pounds would it weigh?
- 20) If an object weighed 80 ounces, how many pounds would it weigh?

1. _____
2. _____
3. _____
4. _____
5. _____
6. _____
7. _____
8. _____
9. _____
10. _____
11. _____
12. _____
13. _____
14. _____
15. _____
16. _____
17. _____
18. _____
19. _____
20. _____



Fill in the chart.

pounds (lb)	ounces (oz)
1	16
2	32
3	48
4	64
5	80
6	96
7	112
8	128
9	144
10	160
11	176

Answers

- 11) If an object weighed 96 ounces, how many pounds would it weigh?
- 12) If an object weighed 144 ounces, how many pounds would it weigh?
- 13) If an object weighed 8 pounds, how many ounces would it weigh?
- 14) If an object weighed 4 pounds, how many ounces would it weigh?
- 15) If an object weighed 7 pounds, how many ounces would it weigh?
- 16) If an object weighed 3 pounds, how many ounces would it weigh?
- 17) If an object weighed 1 pounds, how many ounces would it weigh?
- 18) If an object weighed 2 pounds, how many ounces would it weigh?
- 19) If an object weighed 160 ounces, how many pounds would it weigh?
- 20) If an object weighed 80 ounces, how many pounds would it weigh?

1. 32
2. 48
3. 64
4. 80
5. 96
6. 112
7. 128
8. 144
9. 160
10. 176
11. 6
12. 9
13. 128
14. 64
15. 112
16. 48
17. 16
18. 32
19. 10
20. 5



Fill in the chart.

pounds (lb)	ounces (oz)
1	16
2	
3	
4	
5	
6	
7	
8	
9	
10	
11	

Answers

- 11) If an object weighed 1 pounds, how many ounces would it weigh?
- 12) If an object weighed 64 ounces, how many pounds would it weigh?
- 13) If an object weighed 144 ounces, how many pounds would it weigh?
- 14) If an object weighed 128 ounces, how many pounds would it weigh?
- 15) If an object weighed 3 pounds, how many ounces would it weigh?
- 16) If an object weighed 80 ounces, how many pounds would it weigh?
- 17) If an object weighed 7 pounds, how many ounces would it weigh?
- 18) If an object weighed 160 ounces, how many pounds would it weigh?
- 19) If an object weighed 6 pounds, how many ounces would it weigh?
- 20) If an object weighed 2 pounds, how many ounces would it weigh?

1. _____
2. _____
3. _____
4. _____
5. _____
6. _____
7. _____
8. _____
9. _____
10. _____
11. _____
12. _____
13. _____
14. _____
15. _____
16. _____
17. _____
18. _____
19. _____
20. _____



Fill in the chart.

pounds (lb)	ounces (oz)
1	16
2	32
3	48
4	64
5	80
6	96
7	112
8	128
9	144
10	160
11	176

Answers

- 11) If an object weighed 1 pounds, how many ounces would it weigh?
- 12) If an object weighed 64 ounces, how many pounds would it weigh?
- 13) If an object weighed 144 ounces, how many pounds would it weigh?
- 14) If an object weighed 128 ounces, how many pounds would it weigh?
- 15) If an object weighed 3 pounds, how many ounces would it weigh?
- 16) If an object weighed 80 ounces, how many pounds would it weigh?
- 17) If an object weighed 7 pounds, how many ounces would it weigh?
- 18) If an object weighed 160 ounces, how many pounds would it weigh?
- 19) If an object weighed 6 pounds, how many ounces would it weigh?
- 20) If an object weighed 2 pounds, how many ounces would it weigh?

1. 32
2. 48
3. 64
4. 80
5. 96
6. 112
7. 128
8. 144
9. 160
10. 176
11. 16
12. 4
13. 9
14. 8
15. 48
16. 5
17. 112
18. 10
19. 96
20. 32



Fill in the chart.

pounds (lb)	ounces (oz)
1	16
2	
3	
4	
5	
6	
7	
8	
9	
10	
11	

Answers

- 11) If an object weighed 1 pounds, how many ounces would it weigh?
- 12) If an object weighed 2 pounds, how many ounces would it weigh?
- 13) If an object weighed 5 pounds, how many ounces would it weigh?
- 14) If an object weighed 4 pounds, how many ounces would it weigh?
- 15) If an object weighed 160 ounces, how many pounds would it weigh?
- 16) If an object weighed 128 ounces, how many pounds would it weigh?
- 17) If an object weighed 7 pounds, how many ounces would it weigh?
- 18) If an object weighed 144 ounces, how many pounds would it weigh?
- 19) If an object weighed 96 ounces, how many pounds would it weigh?
- 20) If an object weighed 3 pounds, how many ounces would it weigh?

1. _____
2. _____
3. _____
4. _____
5. _____
6. _____
7. _____
8. _____
9. _____
10. _____
11. _____
12. _____
13. _____
14. _____
15. _____
16. _____
17. _____
18. _____
19. _____
20. _____



Fill in the chart.

pounds (lb)	ounces (oz)
1	16
2	32
3	48
4	64
5	80
6	96
7	112
8	128
9	144
10	160
11	176

Answers

- 11) If an object weighed 1 pounds, how many ounces would it weigh?
- 12) If an object weighed 2 pounds, how many ounces would it weigh?
- 13) If an object weighed 5 pounds, how many ounces would it weigh?
- 14) If an object weighed 4 pounds, how many ounces would it weigh?
- 15) If an object weighed 160 ounces, how many pounds would it weigh?
- 16) If an object weighed 128 ounces, how many pounds would it weigh?
- 17) If an object weighed 7 pounds, how many ounces would it weigh?
- 18) If an object weighed 144 ounces, how many pounds would it weigh?
- 19) If an object weighed 96 ounces, how many pounds would it weigh?
- 20) If an object weighed 3 pounds, how many ounces would it weigh?

1. 32
2. 48
3. 64
4. 80
5. 96
6. 112
7. 128
8. 144
9. 160
10. 176
11. 16
12. 32
13. 80
14. 64
15. 10
16. 8
17. 112
18. 9
19. 6
20. 48



Fill in the chart.

pounds (lb)	ounces (oz)
1	16
2	
3	
4	
5	
6	
7	
8	
9	
10	
11	

Answers

- 11) If an object weighed 80 ounces, how many pounds would it weigh?
- 12) If an object weighed 6 pounds, how many ounces would it weigh?
- 13) If an object weighed 3 pounds, how many ounces would it weigh?
- 14) If an object weighed 1 pounds, how many ounces would it weigh?
- 15) If an object weighed 9 pounds, how many ounces would it weigh?
- 16) If an object weighed 2 pounds, how many ounces would it weigh?
- 17) If an object weighed 10 pounds, how many ounces would it weigh?
- 18) If an object weighed 8 pounds, how many ounces would it weigh?
- 19) If an object weighed 4 pounds, how many ounces would it weigh?
- 20) If an object weighed 7 pounds, how many ounces would it weigh?

1. _____
2. _____
3. _____
4. _____
5. _____
6. _____
7. _____
8. _____
9. _____
10. _____
11. _____
12. _____
13. _____
14. _____
15. _____
16. _____
17. _____
18. _____
19. _____
20. _____



Fill in the chart.

pounds (lb)	ounces (oz)
1	16
2	32
3	48
4	64
5	80
6	96
7	112
8	128
9	144
10	160
11	176

Answers

- 11) If an object weighed 80 ounces, how many pounds would it weigh?
- 12) If an object weighed 6 pounds, how many ounces would it weigh?
- 13) If an object weighed 3 pounds, how many ounces would it weigh?
- 14) If an object weighed 1 pounds, how many ounces would it weigh?
- 15) If an object weighed 9 pounds, how many ounces would it weigh?
- 16) If an object weighed 2 pounds, how many ounces would it weigh?
- 17) If an object weighed 10 pounds, how many ounces would it weigh?
- 18) If an object weighed 8 pounds, how many ounces would it weigh?
- 19) If an object weighed 4 pounds, how many ounces would it weigh?
- 20) If an object weighed 7 pounds, how many ounces would it weigh?

1. 32
2. 48
3. 64
4. 80
5. 96
6. 112
7. 128
8. 144
9. 160
10. 176
11. 5
12. 96
13. 48
14. 16
15. 144
16. 32
17. 160
18. 128
19. 64
20. 112



Fill in the chart.

pounds (lb)	ounces (oz)
1	16
2	
3	
4	
5	
6	
7	
8	
9	
10	
11	

Answers

- 11) If an object weighed 1 pounds, how many ounces would it weigh?
- 12) If an object weighed 144 ounces, how many pounds would it weigh?
- 13) If an object weighed 5 pounds, how many ounces would it weigh?
- 14) If an object weighed 10 pounds, how many ounces would it weigh?
- 15) If an object weighed 7 pounds, how many ounces would it weigh?
- 16) If an object weighed 4 pounds, how many ounces would it weigh?
- 17) If an object weighed 8 pounds, how many ounces would it weigh?
- 18) If an object weighed 48 ounces, how many pounds would it weigh?
- 19) If an object weighed 2 pounds, how many ounces would it weigh?
- 20) If an object weighed 96 ounces, how many pounds would it weigh?

1. _____
2. _____
3. _____
4. _____
5. _____
6. _____
7. _____
8. _____
9. _____
10. _____
11. _____
12. _____
13. _____
14. _____
15. _____
16. _____
17. _____
18. _____
19. _____
20. _____



Fill in the chart.

pounds (lb)	ounces (oz)
1	16
2	32
3	48
4	64
5	80
6	96
7	112
8	128
9	144
10	160
11	176

Answers

- 11) If an object weighed 1 pounds, how many ounces would it weigh?
- 12) If an object weighed 144 ounces, how many pounds would it weigh?
- 13) If an object weighed 5 pounds, how many ounces would it weigh?
- 14) If an object weighed 10 pounds, how many ounces would it weigh?
- 15) If an object weighed 7 pounds, how many ounces would it weigh?
- 16) If an object weighed 4 pounds, how many ounces would it weigh?
- 17) If an object weighed 8 pounds, how many ounces would it weigh?
- 18) If an object weighed 48 ounces, how many pounds would it weigh?
- 19) If an object weighed 2 pounds, how many ounces would it weigh?
- 20) If an object weighed 96 ounces, how many pounds would it weigh?

1. 32
2. 48
3. 64
4. 80
5. 96
6. 112
7. 128
8. 144
9. 160
10. 176
11. 16
12. 9
13. 80
14. 160
15. 112
16. 64
17. 128
18. 3
19. 32
20. 6